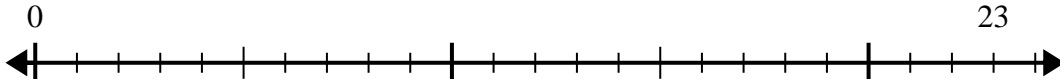


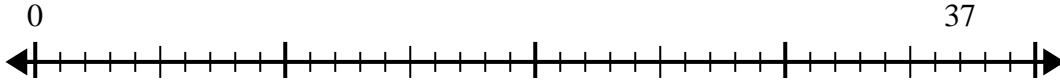


Usa la recta numérica para resolver el problema de división.

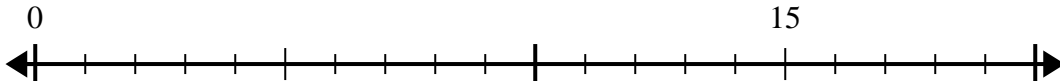
1) $23 \div 4 =$
0



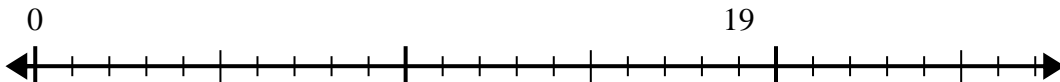
2) $37 \div 8 =$
0



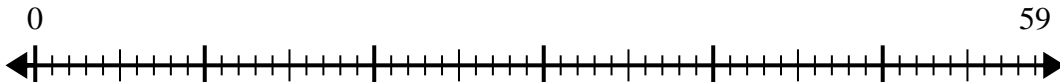
3) $15 \div 4 =$
0



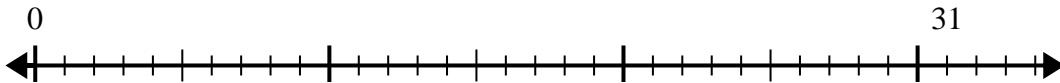
4) $19 \div 6 =$
0



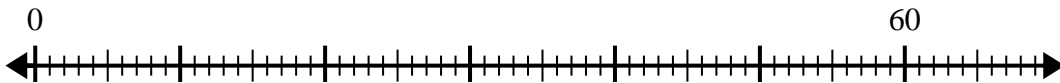
5) $59 \div 8 =$
0



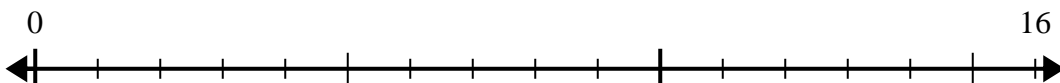
6) $31 \div 8 =$
0



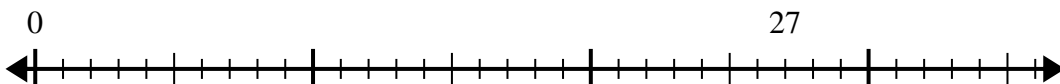
7) $60 \div 7 =$
0



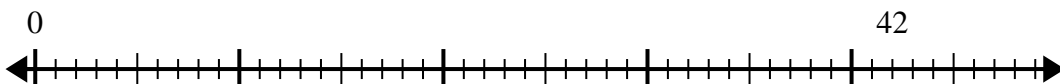
8) $16 \div 5 =$
0



9) $27 \div 4 =$
0



10) $42 \div 5 =$
0



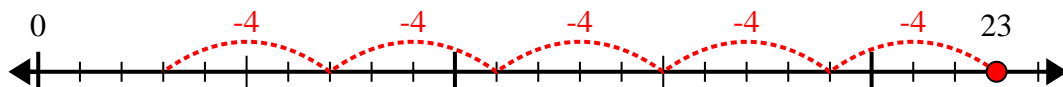
Respuestas

1. _____
2. _____
3. _____
4. _____
5. _____
6. _____
7. _____
8. _____
9. _____
10. _____

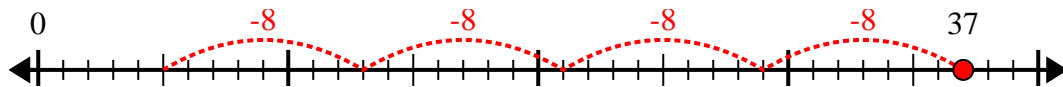


Usa la recta numérica para resolver el problema de división.

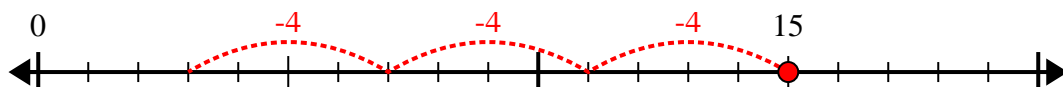
1) $23 \div 4 =$



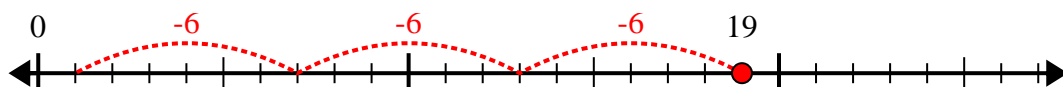
2) $37 \div 8 =$



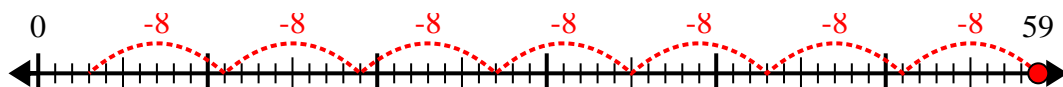
3) $15 \div 4 =$



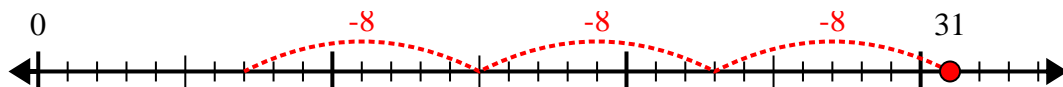
4) $19 \div 6 =$



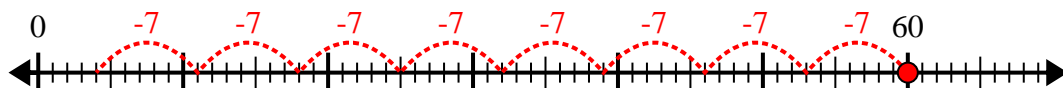
5) $59 \div 8 =$



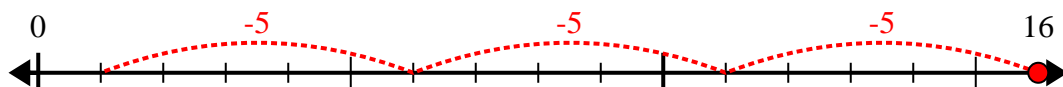
6) $31 \div 8 =$



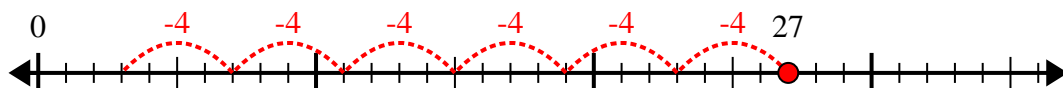
7) $60 \div 7 =$



8) $16 \div 5 =$



9) $27 \div 4 =$



10) $42 \div 5 =$



Respuestas

1. **5r3**

2. **4r5**

3. **3r3**

4. **3r1**

5. **7r3**

6. **3r7**

7. **8r4**

8. **3r1**

9. **6r3**

10. **8r2**