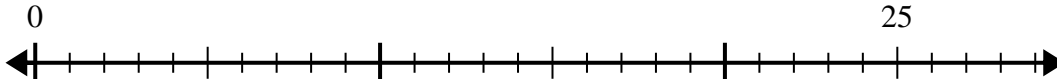


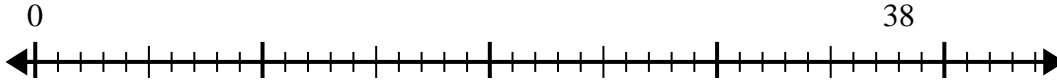


Usa la recta numérica para resolver el problema de división.

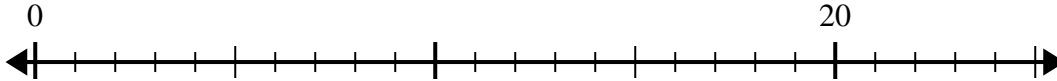
1) $25 \div 6 =$
0



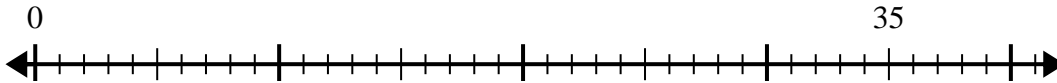
2) $38 \div 7 =$
0



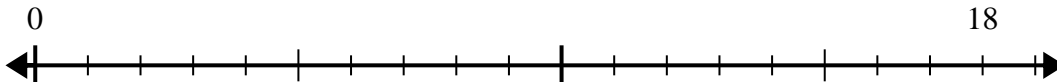
3) $20 \div 6 =$
0



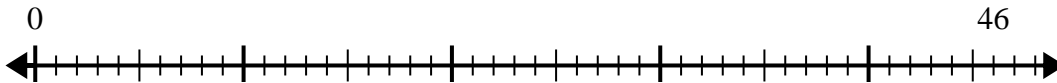
4) $35 \div 6 =$
0



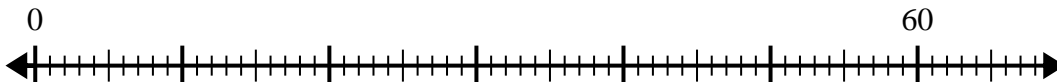
5) $18 \div 5 =$
0



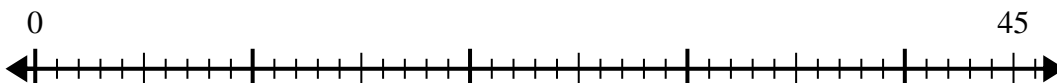
6) $46 \div 6 =$
0



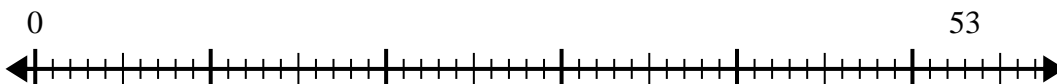
7) $60 \div 8 =$
0



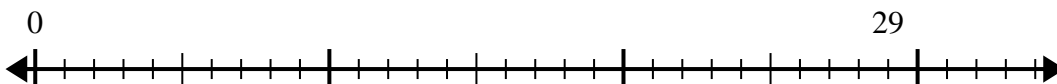
8) $45 \div 7 =$
0



9) $53 \div 8 =$
0



10) $29 \div 4 =$
0



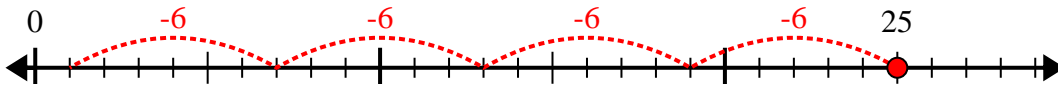
Respuestas

- 1. _____
- 2. _____
- 3. _____
- 4. _____
- 5. _____
- 6. _____
- 7. _____
- 8. _____
- 9. _____
- 10. _____

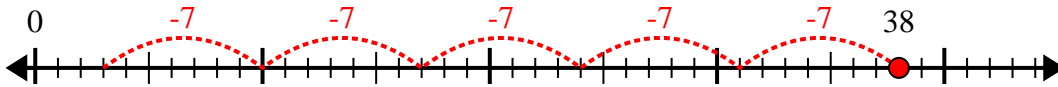


Usa la recta numérica para resolver el problema de división.

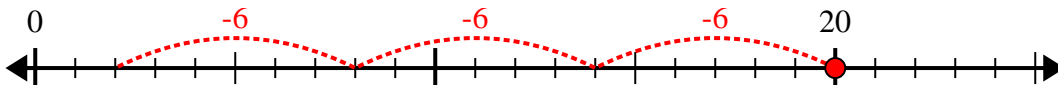
1) $25 \div 6 =$



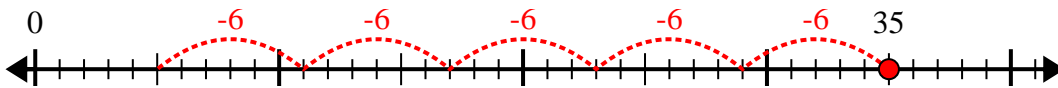
2) $38 \div 7 =$



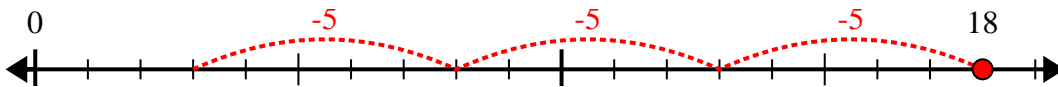
3) $20 \div 6 =$



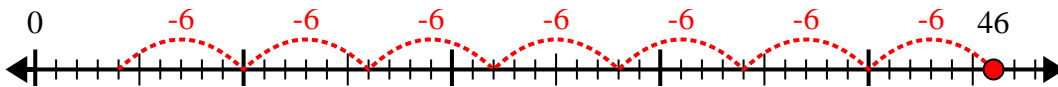
4) $35 \div 6 =$



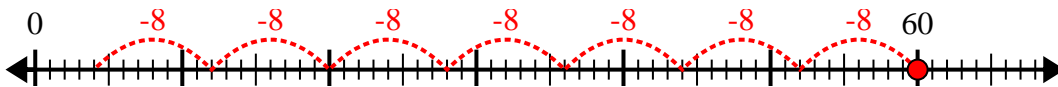
5) $18 \div 5 =$



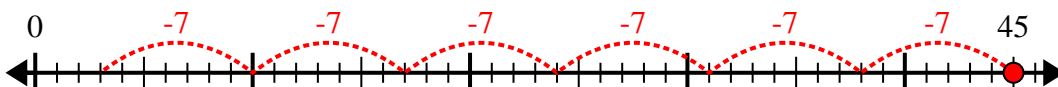
6) $46 \div 6 =$



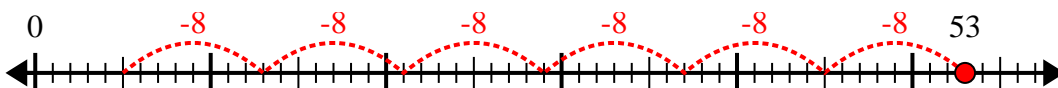
7) $60 \div 8 =$



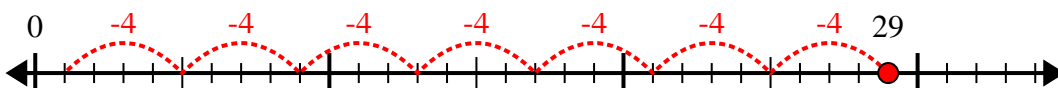
8) $45 \div 7 =$



9) $53 \div 8 =$



10) $29 \div 4 =$



Respuestas

1. **4r1**

2. **5r3**

3. **3r2**

4. **5r5**

5. **3r3**

6. **7r4**

7. **7r4**

8. **6r3**

9. **6r5**

10. **7r1**