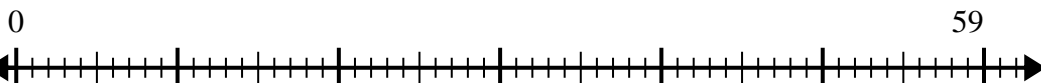


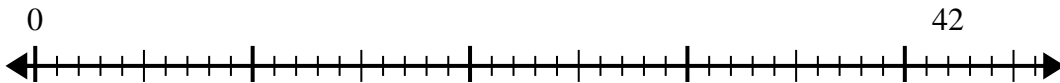


Usa la recta numérica para resolver el problema de división.

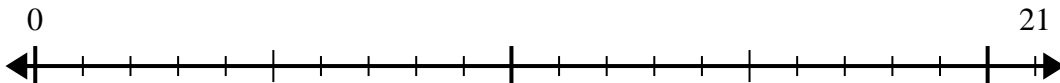
1)  $59 \div 7 =$



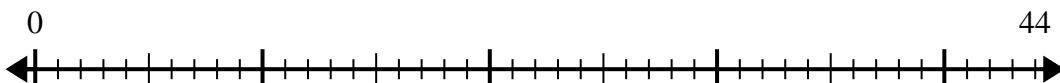
2)  $42 \div 5 =$



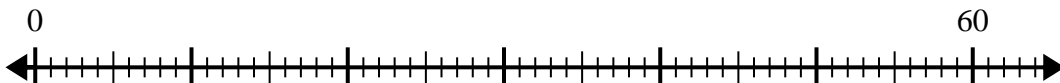
3)  $21 \div 4 =$



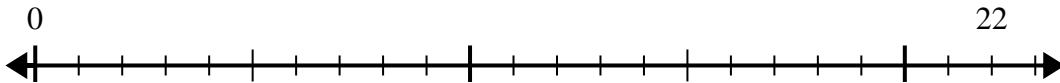
4)  $44 \div 7 =$



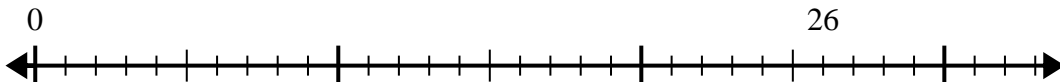
5)  $60 \div 8 =$



6)  $22 \div 5 =$



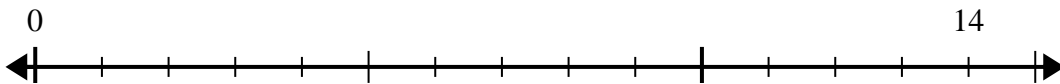
7)  $26 \div 4 =$



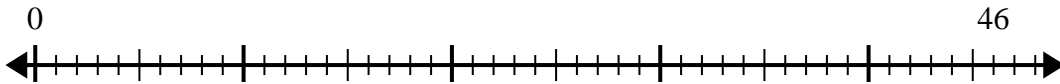
8)  $54 \div 8 =$



9)  $14 \div 4 =$



10)  $46 \div 6 =$



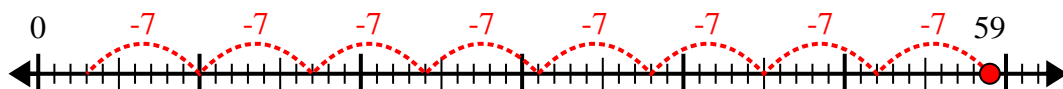
**Respuestas**

- 1. \_\_\_\_\_
- 2. \_\_\_\_\_
- 3. \_\_\_\_\_
- 4. \_\_\_\_\_
- 5. \_\_\_\_\_
- 6. \_\_\_\_\_
- 7. \_\_\_\_\_
- 8. \_\_\_\_\_
- 9. \_\_\_\_\_
- 10. \_\_\_\_\_

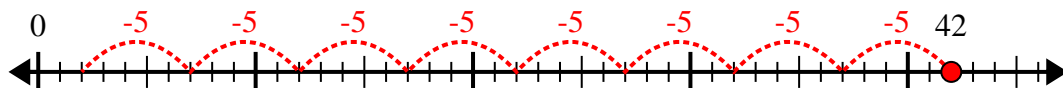


Usa la recta numérica para resolver el problema de división.

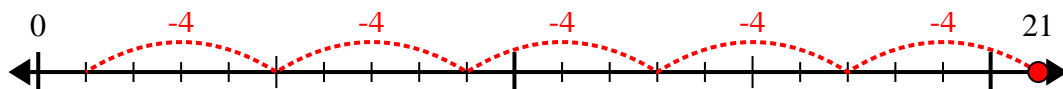
1)  $59 \div 7 =$



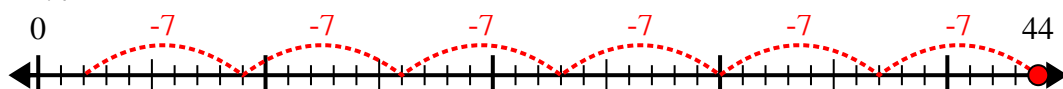
2)  $42 \div 5 =$



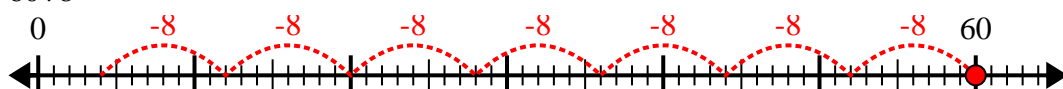
3)  $21 \div 4 =$



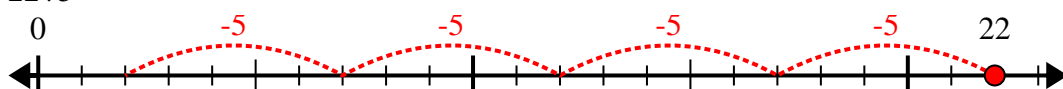
4)  $44 \div 7 =$



5)  $60 \div 8 =$



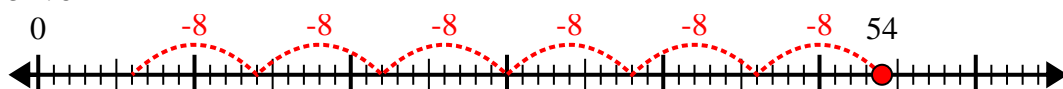
6)  $22 \div 5 =$



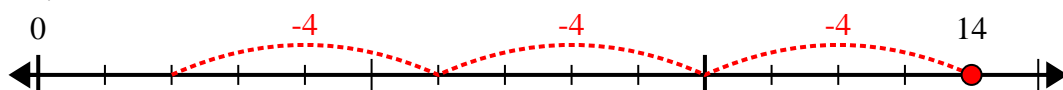
7)  $26 \div 4 =$



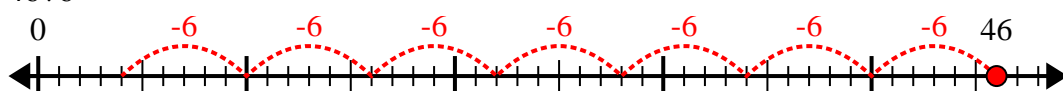
8)  $54 \div 8 =$



9)  $14 \div 4 =$



10)  $46 \div 6 =$



**Respuestas**

1. 8r3

2. 8r2

3. 5r1

4. 6r2

5. 7r4

6. 4r2

7. 6r2

8. 6r6

9. 3r2

10. 7r4