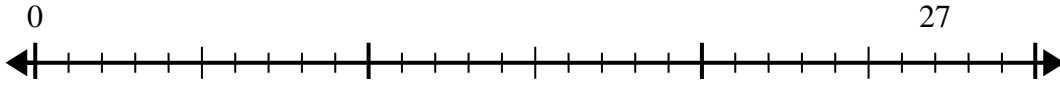


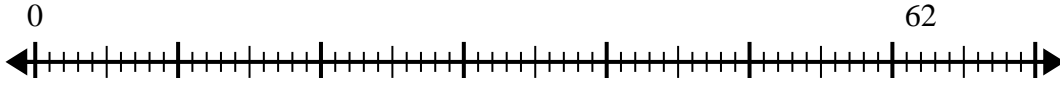


Usa la recta numérica para resolver el problema de división.

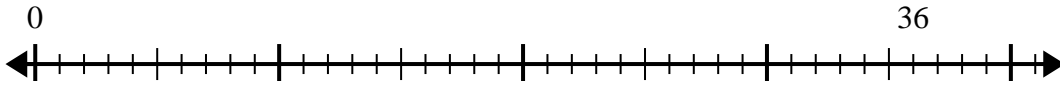
1) $27 \div 4 =$
0



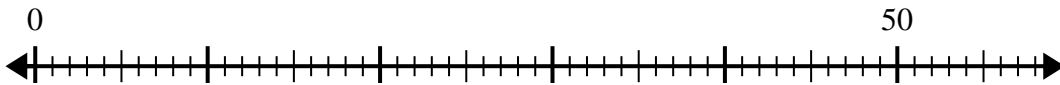
2) $62 \div 8 =$
0



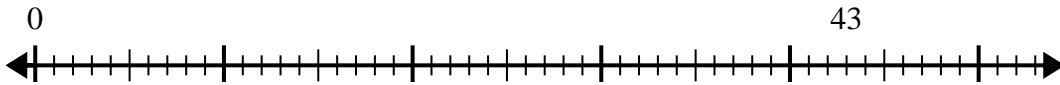
3) $36 \div 5 =$
0



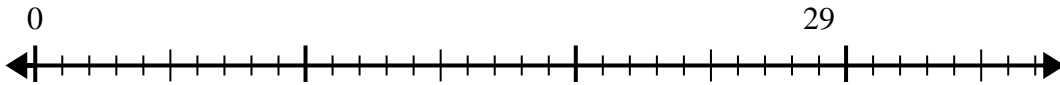
4) $50 \div 8 =$
0



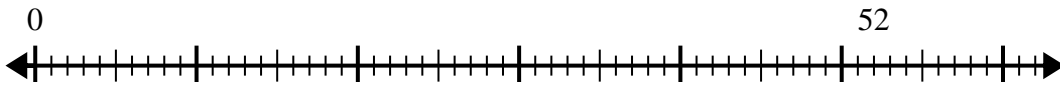
5) $43 \div 6 =$
0



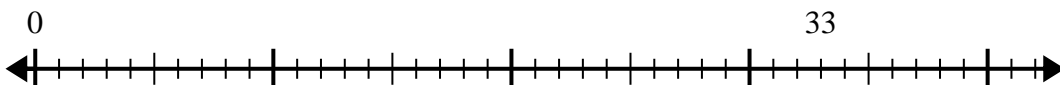
6) $29 \div 6 =$
0



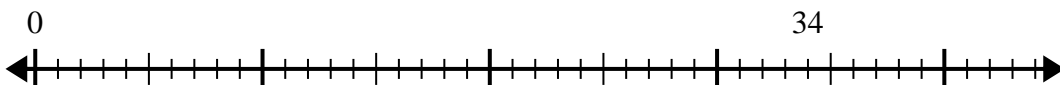
7) $52 \div 6 =$
0



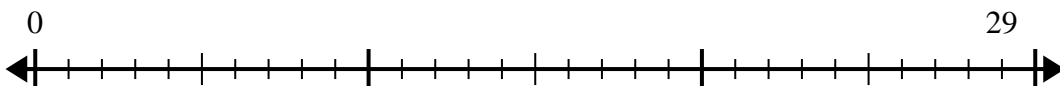
8) $33 \div 5 =$
0



9) $34 \div 7 =$
0



10) $29 \div 4 =$
0



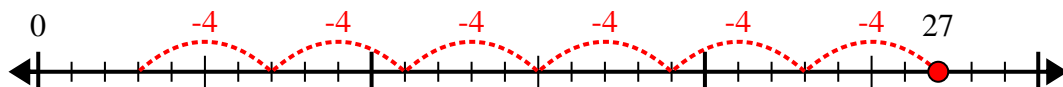
Respuestas

- 1. _____
- 2. _____
- 3. _____
- 4. _____
- 5. _____
- 6. _____
- 7. _____
- 8. _____
- 9. _____
- 10. _____

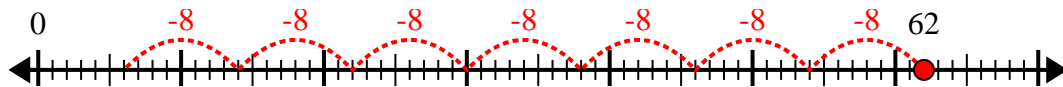


Usa la recta numérica para resolver el problema de división.

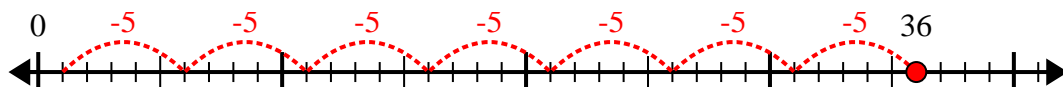
1) $27 \div 4 =$



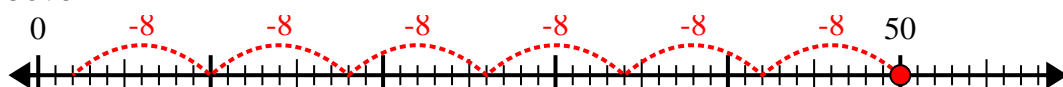
2) $62 \div 8 =$



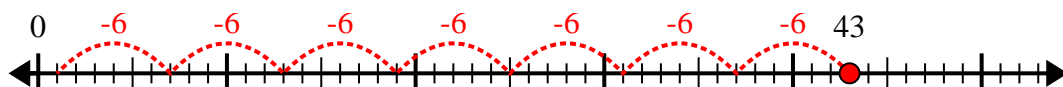
3) $36 \div 5 =$



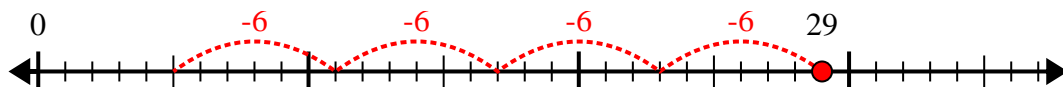
4) $50 \div 8 =$



5) $43 \div 6 =$



6) $29 \div 6 =$



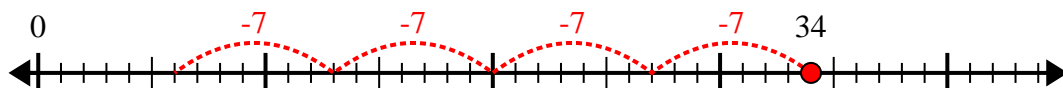
7) $52 \div 6 =$



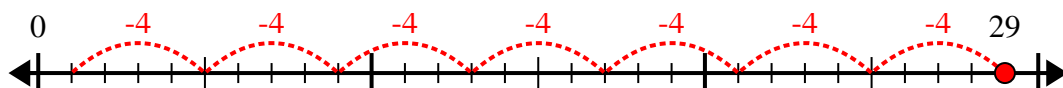
8) $33 \div 5 =$



9) $34 \div 7 =$



10) $29 \div 4 =$



Respuestas

1. 6r3

2. 7r6

3. 7r1

4. 6r2

5. 7r1

6. 4r5

7. 8r4

8. 6r3

9. 4r6

10. 7r1