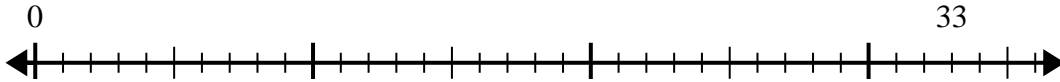


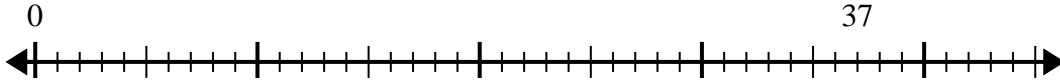


Usa la recta numérica para resolver el problema de división.

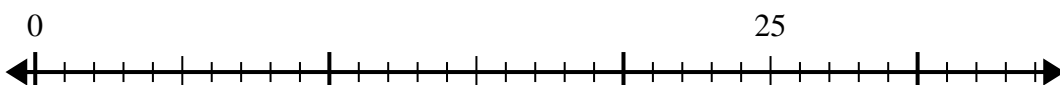
1) $33 \div 7 =$
0



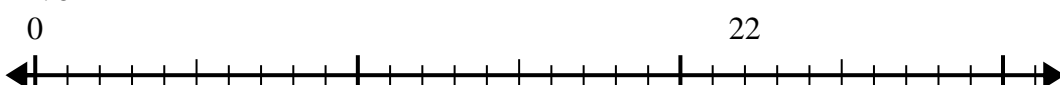
2) $37 \div 5 =$
0



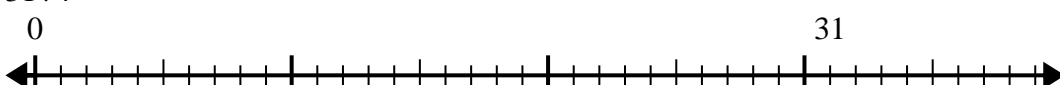
3) $25 \div 4 =$
0



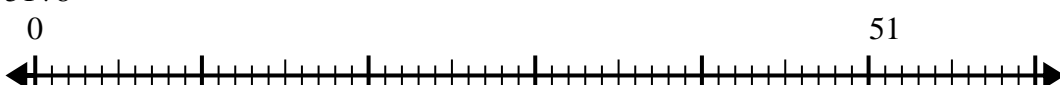
4) $22 \div 6 =$
0



5) $31 \div 4 =$
0



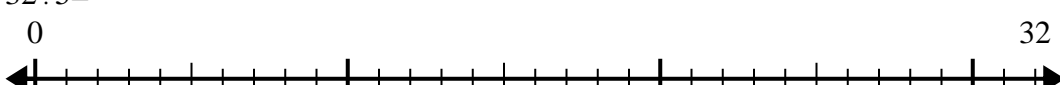
6) $51 \div 8 =$
0



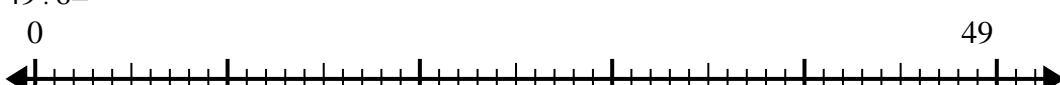
7) $58 \div 7 =$
0




8) $32 \div 5 =$
0



9) $49 \div 6 =$
0



10) $23 \div 7 =$
0



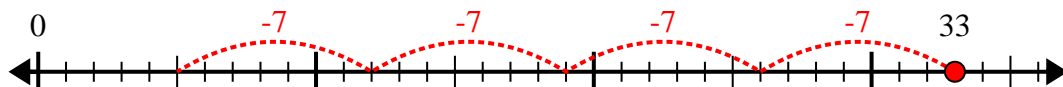
Respuestas

- 1. _____
- 2. _____
- 3. _____
- 4. _____
- 5. _____
- 6. _____
- 7. _____
- 8. _____
- 9. _____
- 10. _____

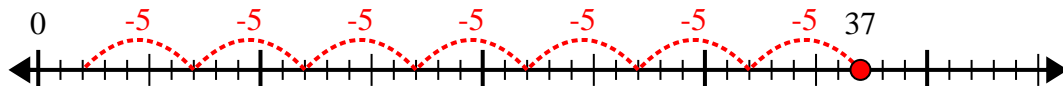


Usa la recta numérica para resolver el problema de división.

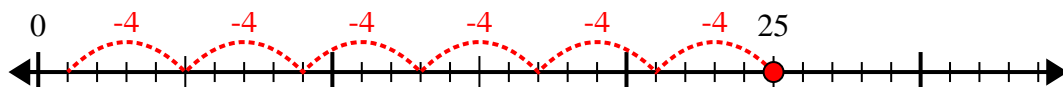
1) $33 \div 7 =$



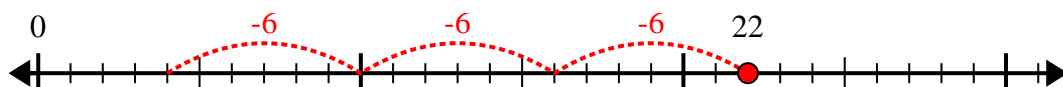
2) $37 \div 5 =$



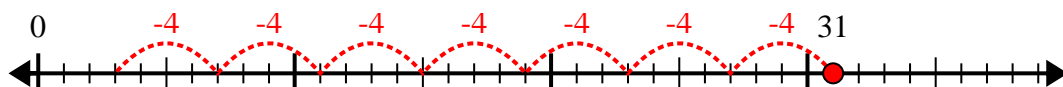
3) $25 \div 4 =$



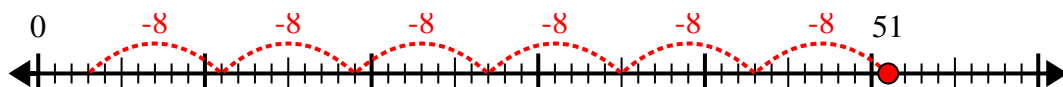
4) $22 \div 6 =$



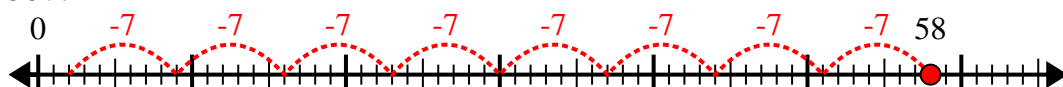
5) $31 \div 4 =$



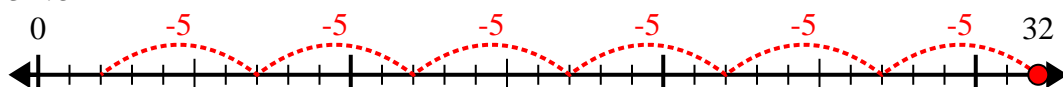
6) $51 \div 8 =$



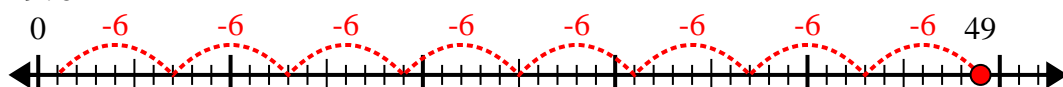
7) $58 \div 7 =$



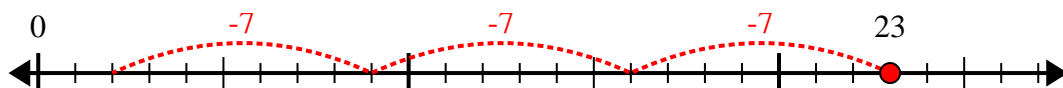
8) $32 \div 5 =$



9) $49 \div 6 =$



10) $23 \div 7 =$



Respuestas

1. 4r5

2. 7r2

3. 6r1

4. 3r4

5. 7r3

6. 6r3

7. 8r2

8. 6r2

9. 8r1

10. 3r2