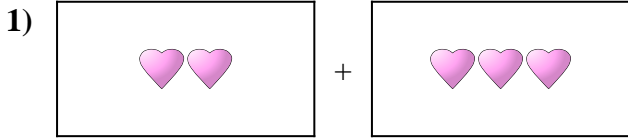


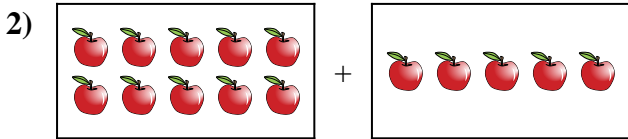


Expresé el problema visual como una ecuación con respuesta.

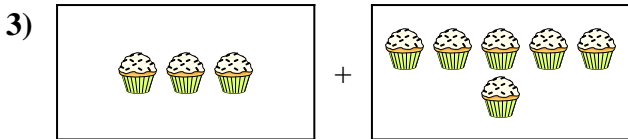
Respuestas



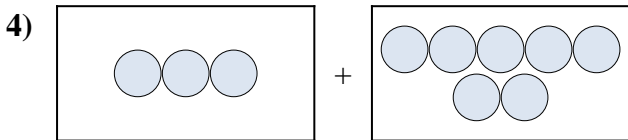
1. _____



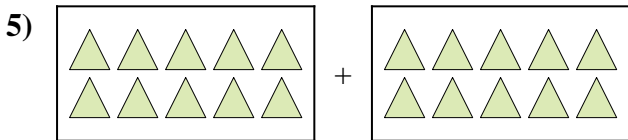
2. _____




3. _____



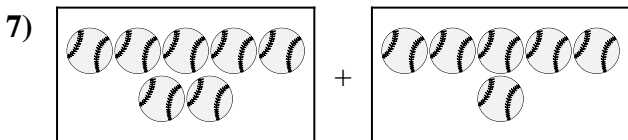
4. _____



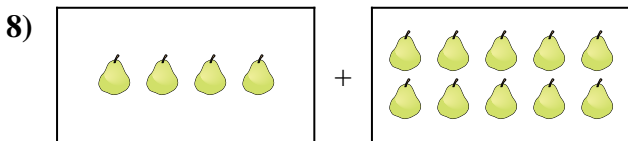
5. _____



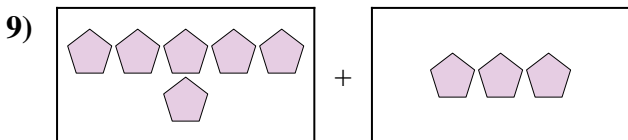
6. _____



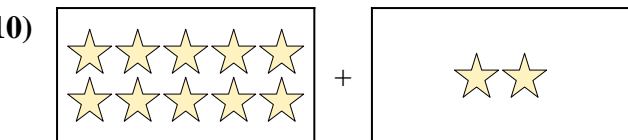
7. _____



8. _____



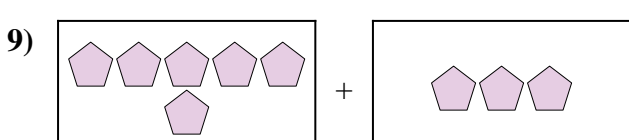
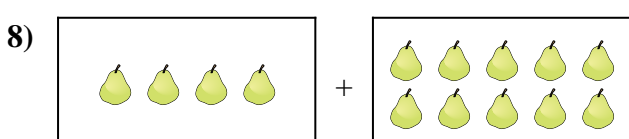
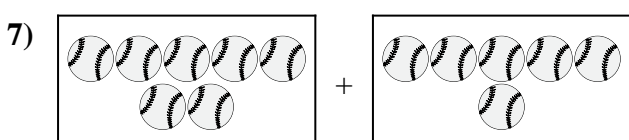

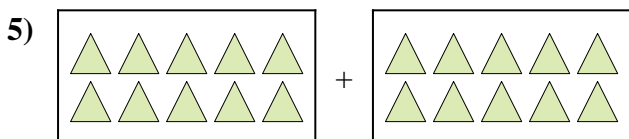
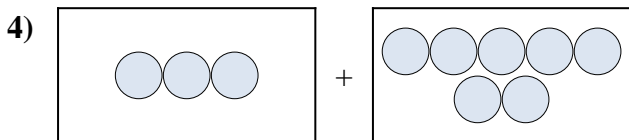
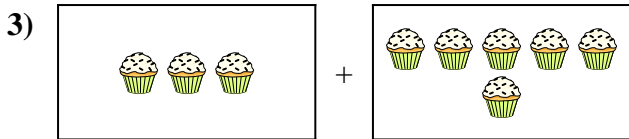
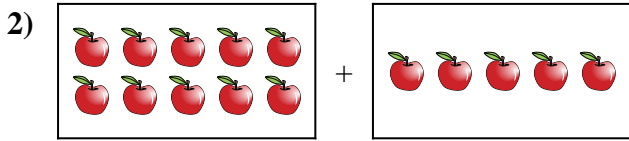
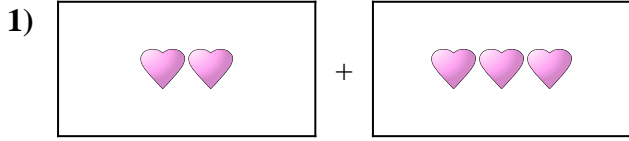
9. _____



10. _____



Expresé el problema visual como una ecuación con respuesta.



Respuestas

1. $2 + 3 = 5$

2. $10 + 5 = 15$

3. $3 + 6 = 9$

4. $3 + 7 = 10$

5. $10 + 10 = 20$

6. $10 + 3 = 13$

7. $7 + 6 = 13$

8. $4 + 10 = 14$

9. $6 + 3 = 9$

10. $10 + 2 = 12$