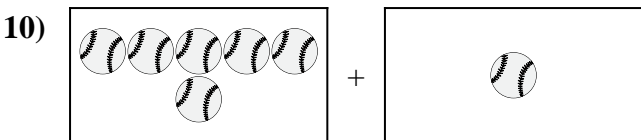
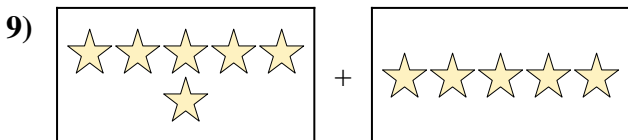
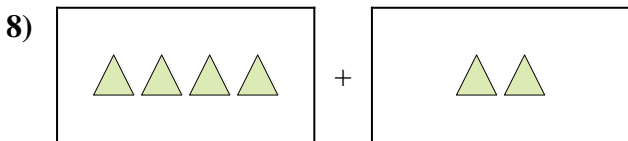
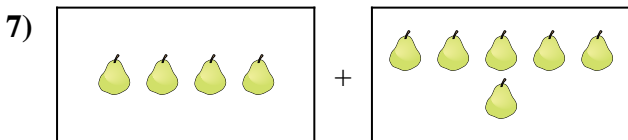
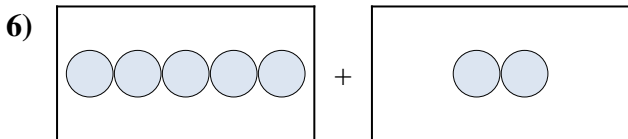
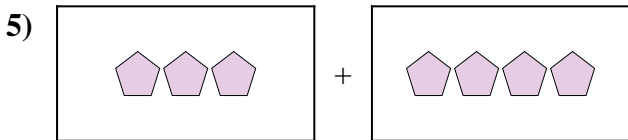
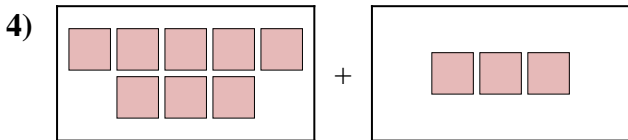

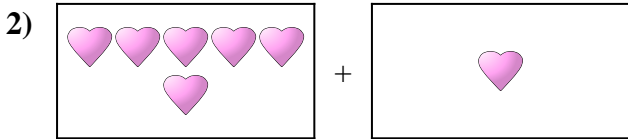
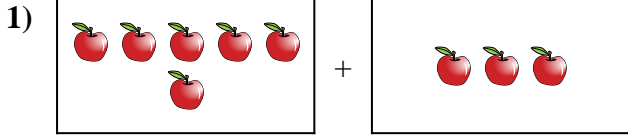




Expresar el problema visual como una ecuación con respuesta.

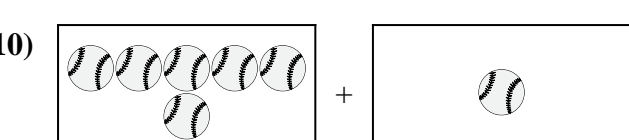
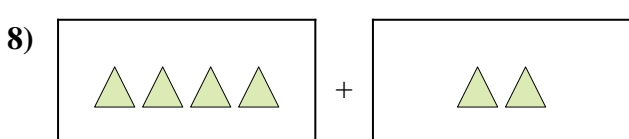
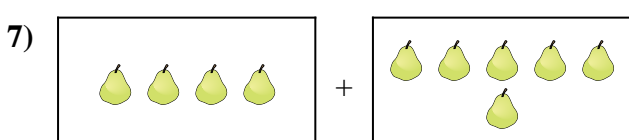
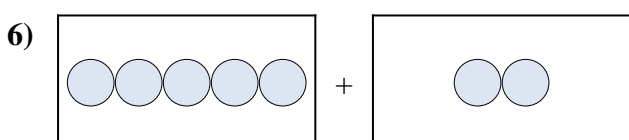
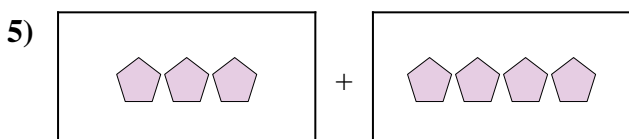
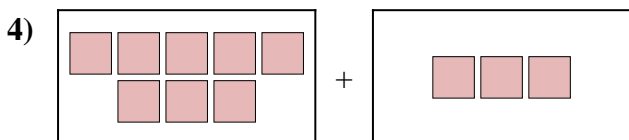

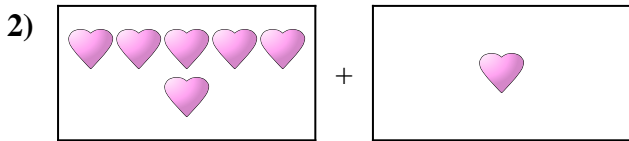
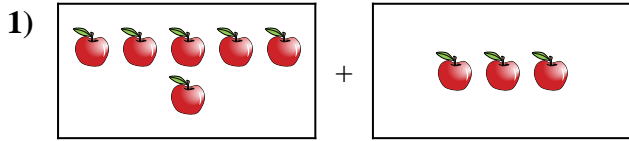
Respuestas



1. _____
2. _____
3. _____
4. _____
5. _____
6. _____
7. _____
8. _____
9. _____
10. _____



Expresar el problema visual como una ecuación con respuesta.



Respuestas

1. $6 + 3 = 9$

2. $6 + 1 = 7$

3. $10 + 4 = 14$

4. $8 + 3 = 11$

5. $3 + 4 = 7$

6. $5 + 2 = 7$

7. $4 + 6 = 10$

8. $4 + 2 = 6$

9. $6 + 5 = 11$

10. $6 + 1 = 7$