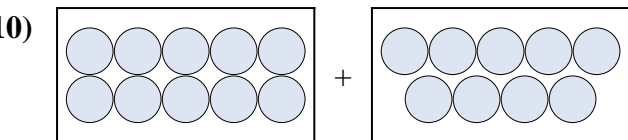
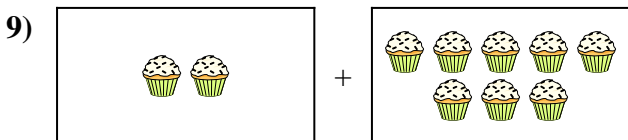
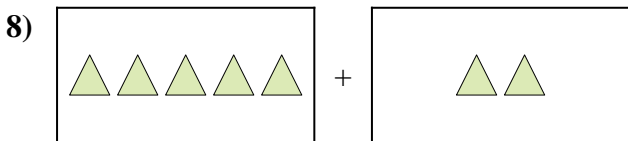
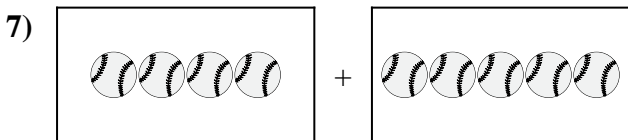
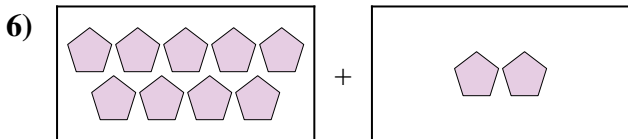
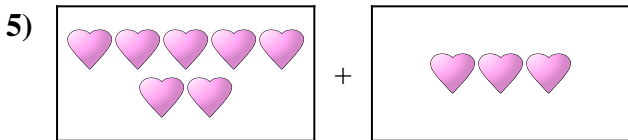
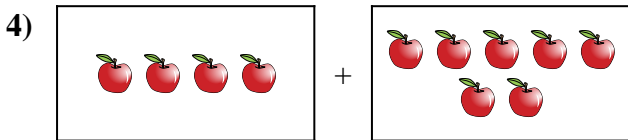
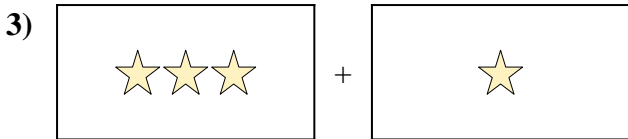
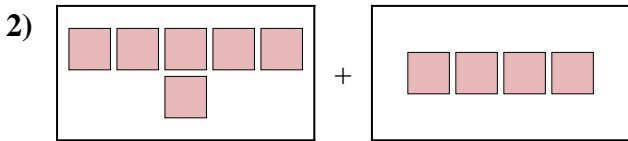
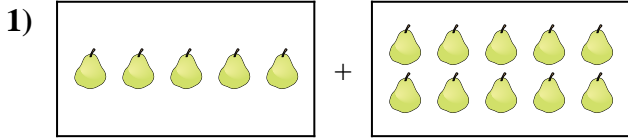




Expresé el problema visual como una ecuación con respuesta.

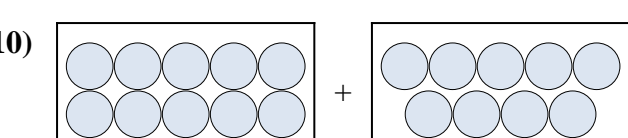
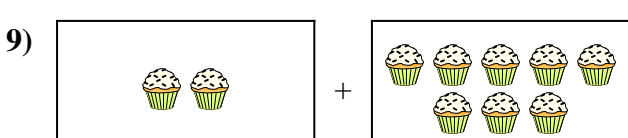
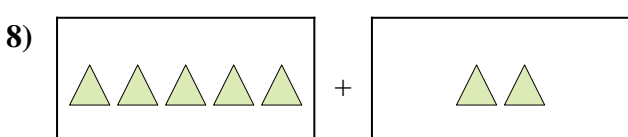
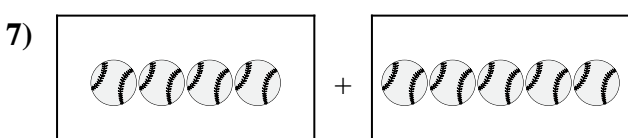
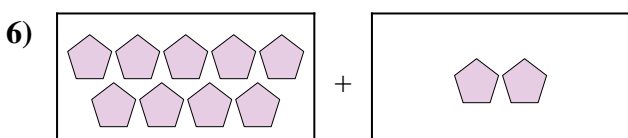
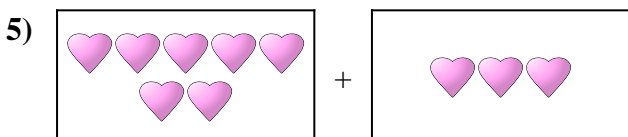
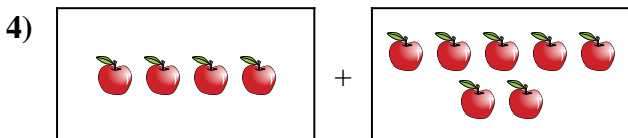
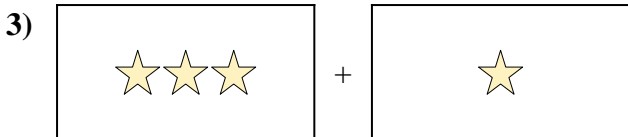
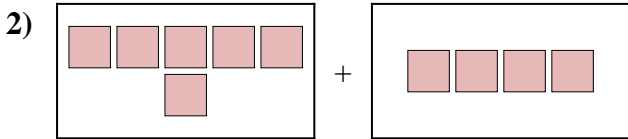
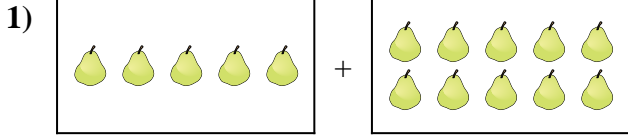
**Respuestas**



1. \_\_\_\_\_
2. \_\_\_\_\_
3. \_\_\_\_\_
4. \_\_\_\_\_
5. \_\_\_\_\_
6. \_\_\_\_\_
7. \_\_\_\_\_
8. \_\_\_\_\_
9. \_\_\_\_\_
10. \_\_\_\_\_



Expresar el problema visual como una ecuación con respuesta.



**Respuestas**

1. **5 + 10 = 15**

2. **6 + 4 = 10**

3. **3 + 1 = 4**

4. **4 + 7 = 11**

5. **7 + 3 = 10**

6. **9 + 2 = 11**

7. **4 + 5 = 9**

8. **5 + 2 = 7**

9. **2 + 8 = 10**

10. **10 + 9 = 19**