



Determina cuál letra representa mejor la suma.

1)  $\frac{2}{3} + \frac{2}{3}$

2)  $\frac{2}{8} + \frac{2}{8}$

3)  $\frac{4}{12} + \frac{8}{12}$

4)  $\frac{4}{12} + \frac{7}{12}$

5)  $\frac{1}{2} + \frac{1}{2}$

6)  $\frac{3}{5} + \frac{3}{5}$

7)  $\frac{2}{6} + \frac{4}{6}$

8)  $\frac{1}{5} + \frac{2}{5}$

9)  $\frac{6}{10} + \frac{8}{10}$

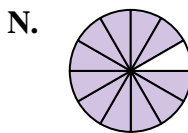
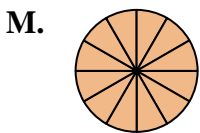
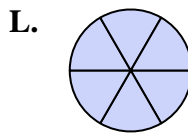
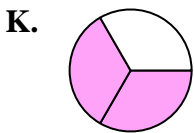
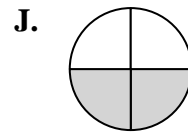
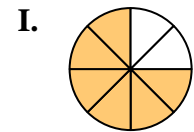
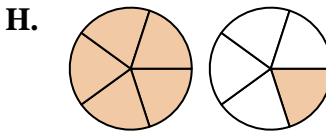
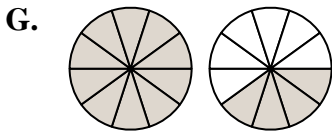
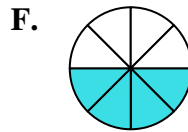
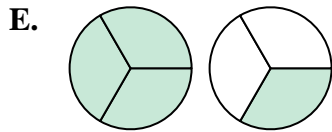
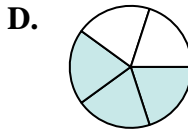
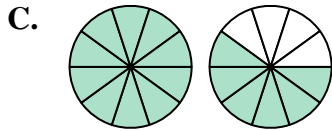
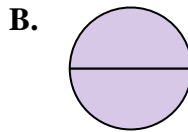
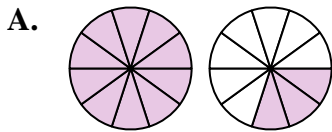
10)  $\frac{1}{3} + \frac{1}{3}$

11)  $\frac{9}{10} + \frac{4}{10}$

12)  $\frac{1}{8} + \frac{5}{8}$

13)  $\frac{1}{4} + \frac{1}{4}$

14)  $\frac{9}{10} + \frac{7}{10}$

**Respuestas**

1. \_\_\_\_\_

2. \_\_\_\_\_

3. \_\_\_\_\_

4. \_\_\_\_\_

5. \_\_\_\_\_

6. \_\_\_\_\_

7. \_\_\_\_\_

8. \_\_\_\_\_

9. \_\_\_\_\_

10. \_\_\_\_\_

11. \_\_\_\_\_

12. \_\_\_\_\_

13. \_\_\_\_\_

14. \_\_\_\_\_



Determina cuál letra representa mejor la suma.

1)  $\frac{2}{3} + \frac{2}{3}$

3)  $\frac{4}{12} + \frac{8}{12}$

5)  $\frac{1}{2} + \frac{1}{2}$

7)  $\frac{2}{6} + \frac{4}{6}$

9)  $\frac{6}{10} + \frac{8}{10}$

11)  $\frac{9}{10} + \frac{4}{10}$

13)  $\frac{1}{4} + \frac{1}{4}$

2)  $\frac{2}{8} + \frac{2}{8}$

4)  $\frac{4}{12} + \frac{7}{12}$

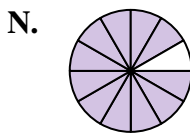
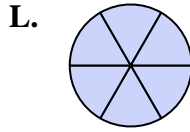
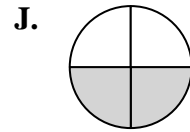
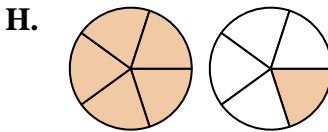
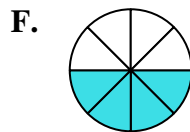
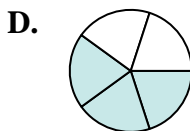
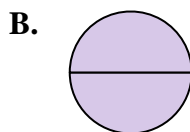
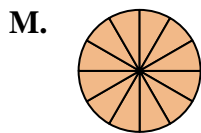
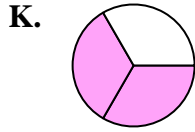
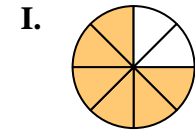
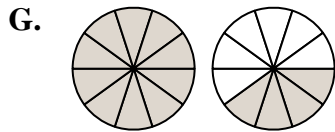
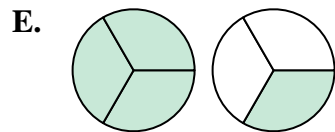
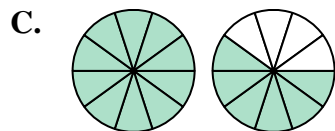
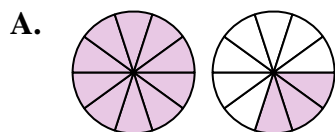
6)  $\frac{3}{5} + \frac{3}{5}$

8)  $\frac{1}{5} + \frac{2}{5}$

10)  $\frac{1}{3} + \frac{1}{3}$

12)  $\frac{1}{8} + \frac{5}{8}$

14)  $\frac{9}{10} + \frac{7}{10}$

**Respuestas**

1. **E**  $1\frac{1}{3}$

2. **F**  $\frac{4}{8}$

3. **M**  $\frac{12}{12}$

4. **N**  $1\frac{11}{12}$

5. **B**  $\frac{2}{2}$

6. **H**  $1\frac{1}{5}$

7. **L**  $\frac{6}{6}$

8. **D**  $\frac{3}{5}$

9. **G**  $1\frac{4}{10}$

10. **K**  $\frac{2}{3}$

11. **A**  $1\frac{3}{10}$

12. **I**  $\frac{6}{8}$

13. **J**  $\frac{2}{4}$

14. **C**  $1\frac{6}{10}$