



Determina cuál letra representa mejor la suma.

1) $\frac{3}{4} + \frac{3}{4}$

3) $\frac{4}{5} + \frac{1}{5}$

5) $\frac{3}{10} + \frac{6}{10}$

7) $\frac{7}{10} + \frac{1}{10}$

9) $\frac{2}{8} + \frac{4}{8}$

11) $\frac{1}{5} + \frac{1}{5}$

13) $\frac{1}{2} + \frac{1}{2}$

2) $\frac{3}{8} + \frac{4}{8}$

4) $\frac{1}{5} + \frac{3}{5}$

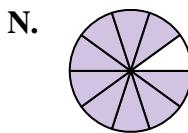
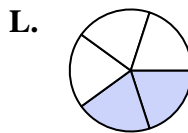
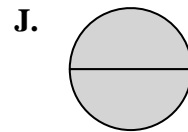
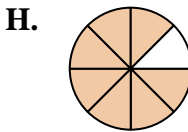
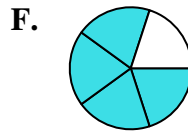
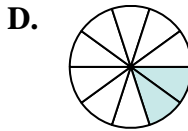
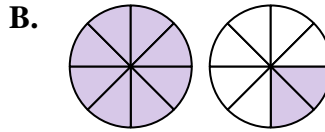
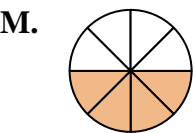
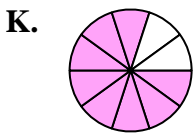
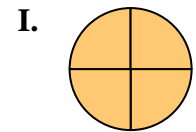
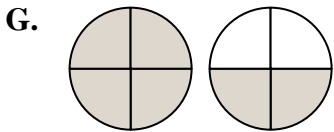
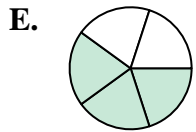
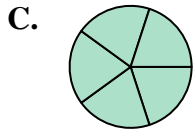
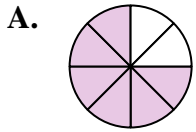
6) $\frac{1}{5} + \frac{2}{5}$

8) $\frac{1}{10} + \frac{1}{10}$

10) $\frac{6}{8} + \frac{4}{8}$

12) $\frac{3}{4} + \frac{1}{4}$

14) $\frac{1}{8} + \frac{3}{8}$

**Respuestas**

1. _____

2. _____

3. _____

4. _____

5. _____

6. _____

7. _____

8. _____

9. _____

10. _____

11. _____

12. _____

13. _____

14. _____



Determina cuál letra representa mejor la suma.

1) $\frac{3}{4} + \frac{3}{4}$

3) $\frac{4}{5} + \frac{1}{5}$

5) $\frac{3}{10} + \frac{6}{10}$

7) $\frac{7}{10} + \frac{1}{10}$

9) $\frac{2}{8} + \frac{4}{8}$

11) $\frac{1}{5} + \frac{1}{5}$

13) $\frac{1}{2} + \frac{1}{2}$

2) $\frac{3}{8} + \frac{4}{8}$

4) $\frac{1}{5} + \frac{3}{5}$

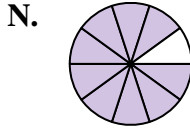
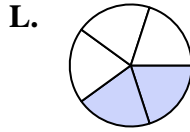
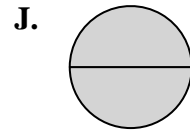
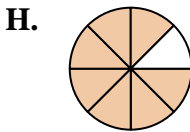
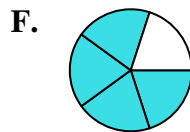
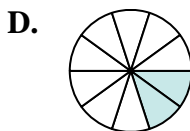
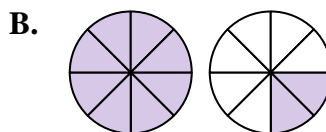
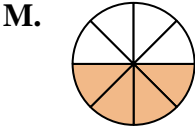
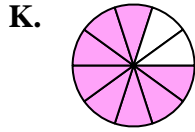
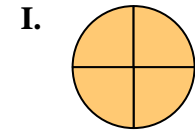
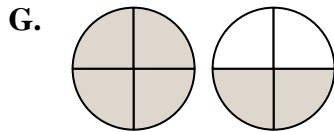
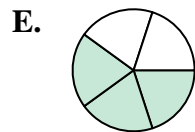
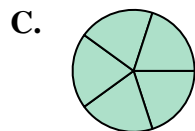
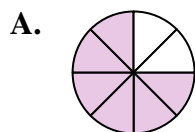
6) $\frac{1}{5} + \frac{2}{5}$

8) $\frac{1}{10} + \frac{1}{10}$

10) $\frac{6}{8} + \frac{4}{8}$

12) $\frac{3}{4} + \frac{1}{4}$

14) $\frac{1}{8} + \frac{3}{8}$

**Respuestas**

1. **G** $1\frac{2}{4}$

2. **H** $\frac{7}{8}$

3. **C** $\frac{5}{5}$

4. **F** $\frac{4}{5}$

5. **N** $\frac{9}{10}$

6. **E** $\frac{3}{5}$

7. **K** $\frac{8}{10}$

8. **D** $\frac{2}{10}$

9. **A** $\frac{6}{8}$

10. **B** $1\frac{2}{8}$

11. **L** $\frac{2}{5}$

12. **I** $\frac{4}{4}$

13. **J** $\frac{2}{2}$

14. **M** $\frac{4}{8}$