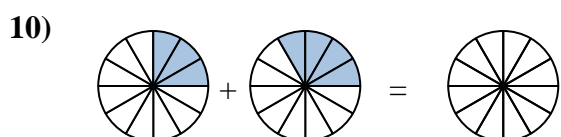
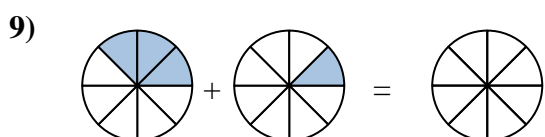
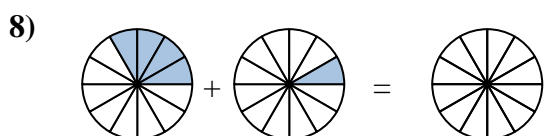
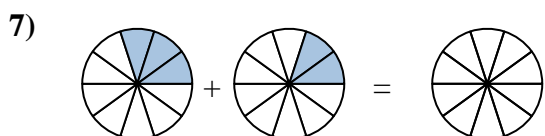
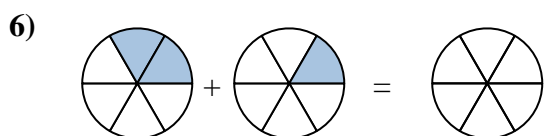
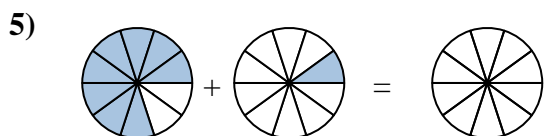
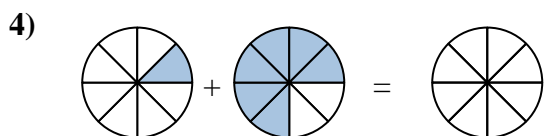
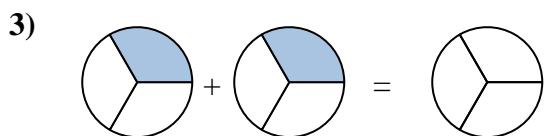
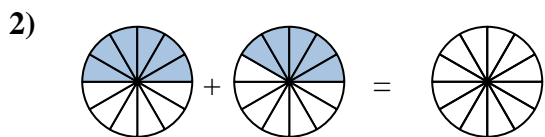
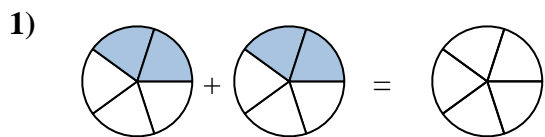
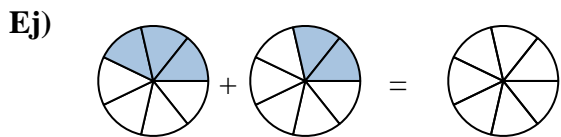




Sombrea la fracción para resolver el problema.



Respuestas

Ej. $\frac{3}{7}$ $\frac{2}{7}$ $\frac{5}{7}$

1. _____

2. _____

3. _____

4. _____

5. _____

6. _____

7. _____

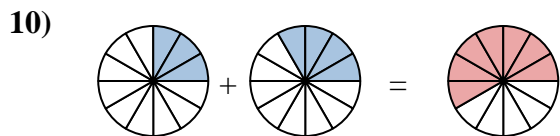
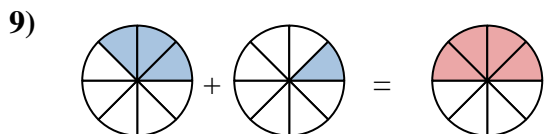
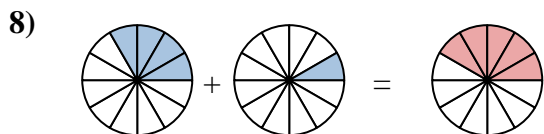
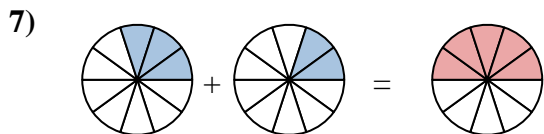
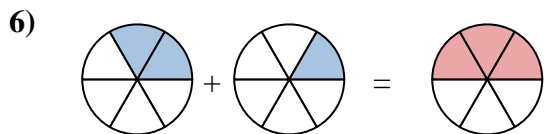
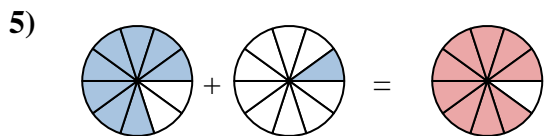
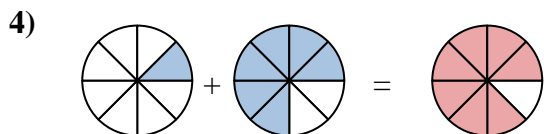
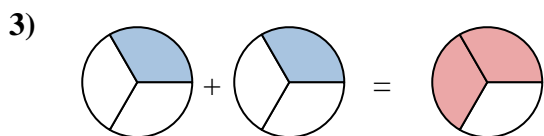
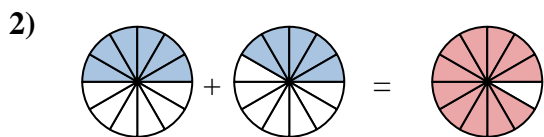
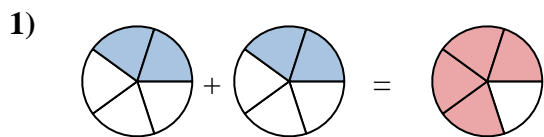
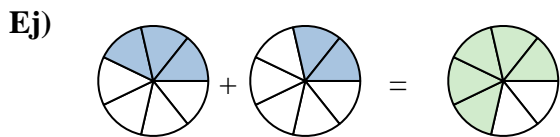
8. _____

9. _____

10. _____



Sombrea la fracción para resolver el problema.

**Respuestas**

Ej.	$\frac{3}{7}$	$\frac{2}{7}$	$\frac{5}{7}$
1.	$\frac{2}{5}$	$\frac{2}{5}$	$\frac{4}{5}$
2.	$\frac{6}{12}$	$\frac{5}{12}$	$\frac{11}{12}$
3.	$\frac{1}{3}$	$\frac{1}{3}$	$\frac{2}{3}$
4.	$\frac{1}{8}$	$\frac{6}{8}$	$\frac{7}{8}$
5.	$\frac{8}{10}$	$\frac{1}{10}$	$\frac{9}{10}$
6.	$\frac{2}{6}$	$\frac{1}{6}$	$\frac{3}{6}$
7.	$\frac{3}{10}$	$\frac{2}{10}$	$\frac{5}{10}$
8.	$\frac{4}{12}$	$\frac{1}{12}$	$\frac{5}{12}$
9.	$\frac{3}{8}$	$\frac{1}{8}$	$\frac{4}{8}$
10.	$\frac{3}{12}$	$\frac{4}{12}$	$\frac{7}{12}$