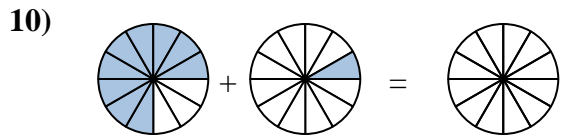
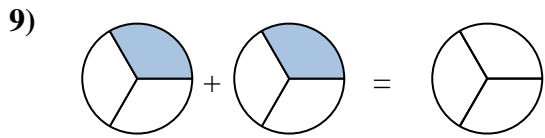
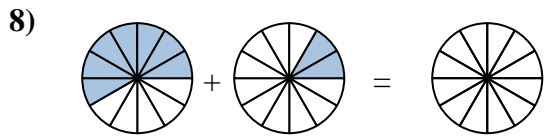
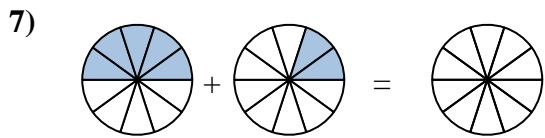
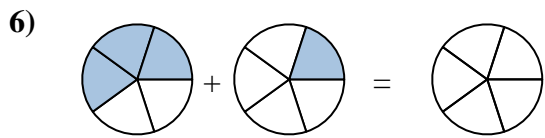
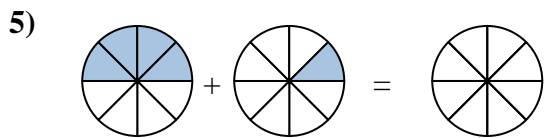
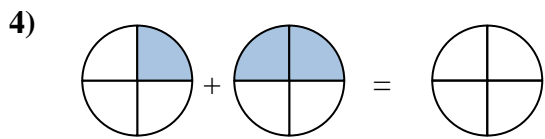
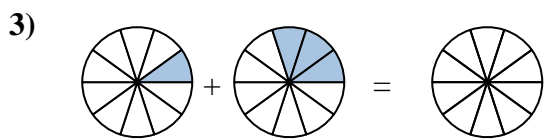
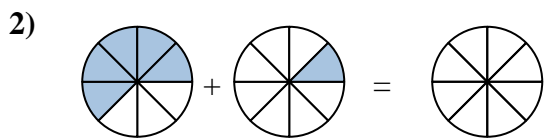
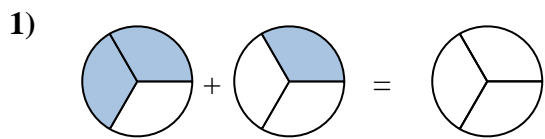
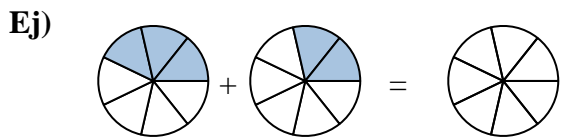




Sombrea la fracción para resolver el problema.



Respuestas

Ej. $\frac{3}{7}$ $\frac{2}{7}$ $\frac{5}{7}$

1. _____

2. _____

3. _____

4. _____

5. _____

6. _____

7. _____

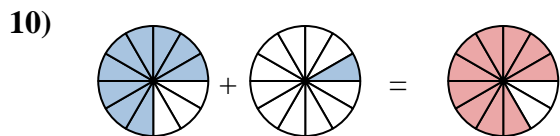
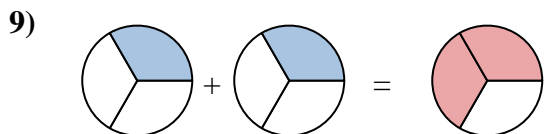
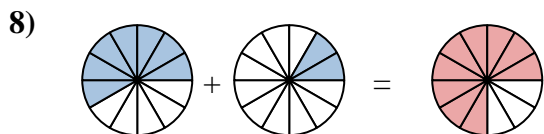
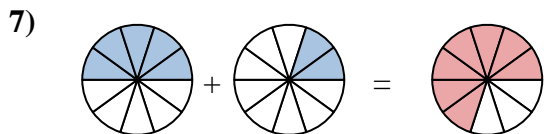
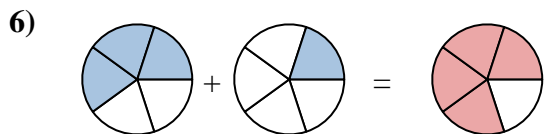
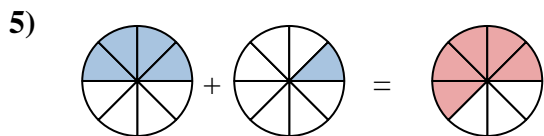
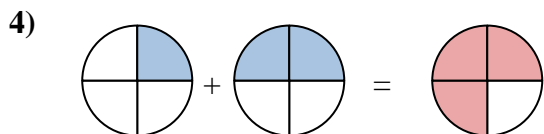
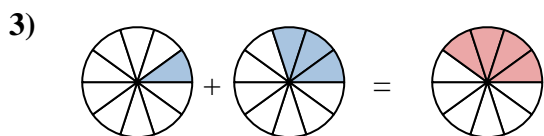
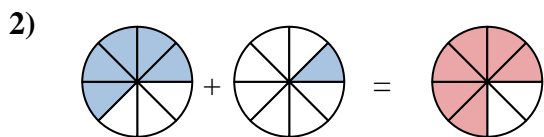
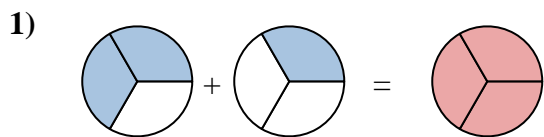
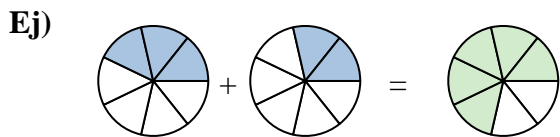
8. _____

9. _____

10. _____



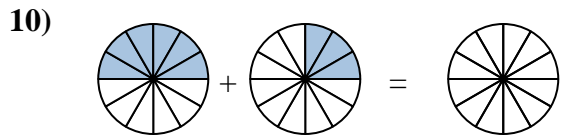
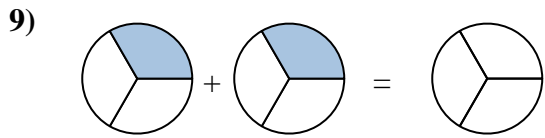
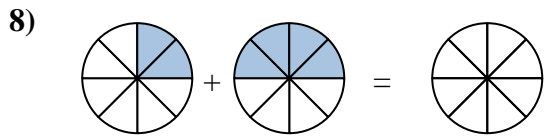
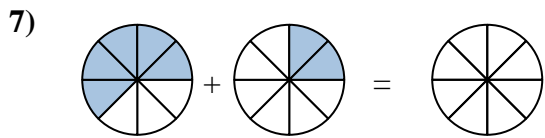
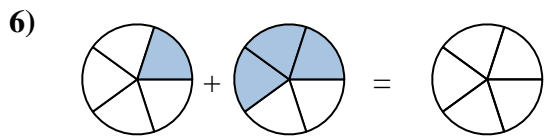
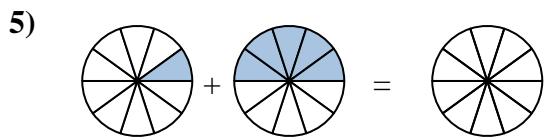
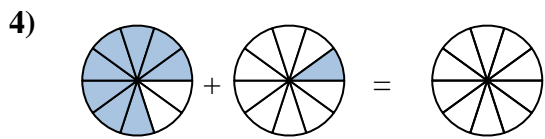
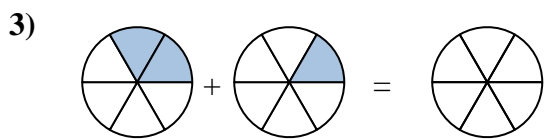
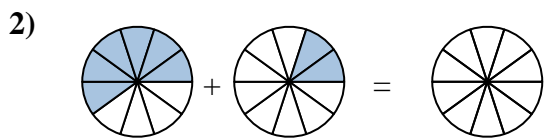
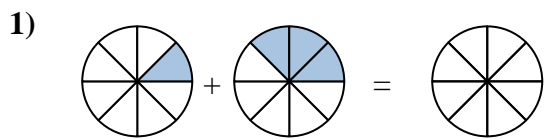
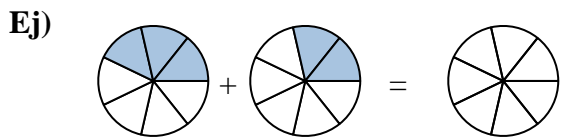
Sombrea la fracción para resolver el problema.

**Respuestas**

Ej.	$\frac{3}{7}$	$\frac{2}{7}$	$\frac{5}{7}$
1.	$\frac{2}{3}$	$\frac{1}{3}$	$\frac{3}{3}$
2.	$\frac{5}{8}$	$\frac{1}{8}$	$\frac{6}{8}$
3.	$\frac{1}{10}$	$\frac{3}{10}$	$\frac{4}{10}$
4.	$\frac{1}{4}$	$\frac{2}{4}$	$\frac{3}{4}$
5.	$\frac{4}{8}$	$\frac{1}{8}$	$\frac{5}{8}$
6.	$\frac{3}{5}$	$\frac{1}{5}$	$\frac{4}{5}$
7.	$\frac{5}{10}$	$\frac{2}{10}$	$\frac{7}{10}$
8.	$\frac{7}{12}$	$\frac{2}{12}$	$\frac{9}{12}$
9.	$\frac{1}{3}$	$\frac{1}{3}$	$\frac{2}{3}$
10.	$\frac{9}{12}$	$\frac{1}{12}$	$\frac{10}{12}$



Sombrea la fracción para resolver el problema.



Respuestas

Ej. $\frac{3}{7}$ $\frac{2}{7}$ $\frac{5}{7}$

1. _____

2. _____

3. _____

4. _____

5. _____

6. _____

7. _____

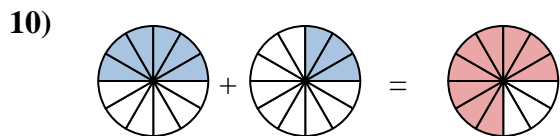
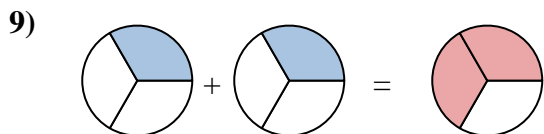
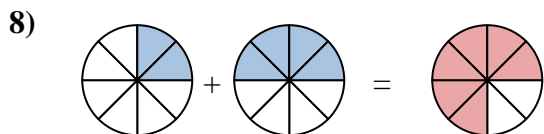
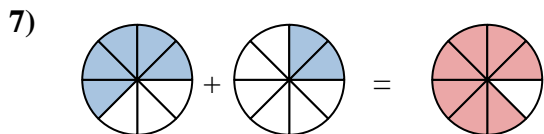
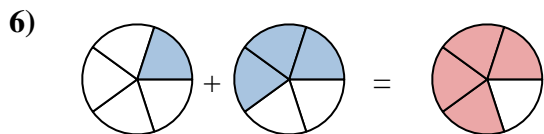
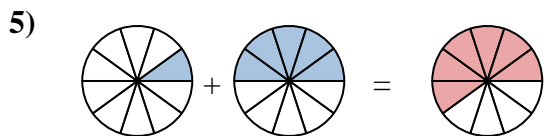
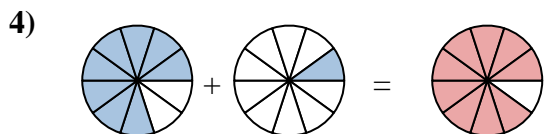
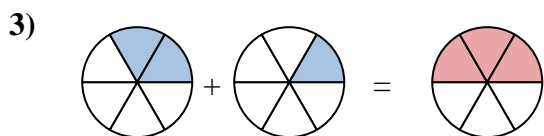
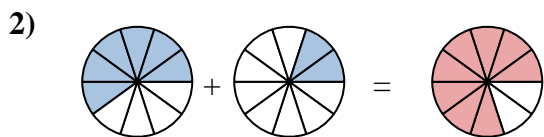
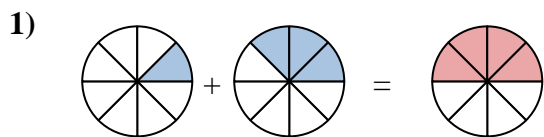
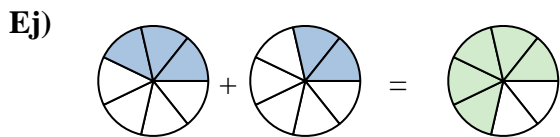
8. _____

9. _____

10. _____



Sombrea la fracción para resolver el problema.

**Respuestas**

Ej. $\frac{3}{7}$ $\frac{2}{7}$ $\frac{5}{7}$

1. $\frac{1}{8}$ $\frac{3}{8}$ $\frac{4}{8}$

2. $\frac{6}{10}$ $\frac{2}{10}$ $\frac{8}{10}$

3. $\frac{2}{6}$ $\frac{1}{6}$ $\frac{3}{6}$

4. $\frac{8}{10}$ $\frac{1}{10}$ $\frac{9}{10}$

5. $\frac{1}{10}$ $\frac{5}{10}$ $\frac{6}{10}$

6. $\frac{1}{5}$ $\frac{3}{5}$ $\frac{4}{5}$

7. $\frac{5}{8}$ $\frac{2}{8}$ $\frac{7}{8}$

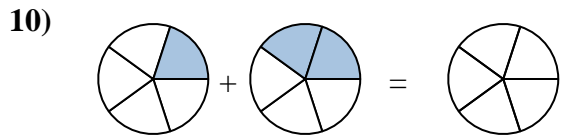
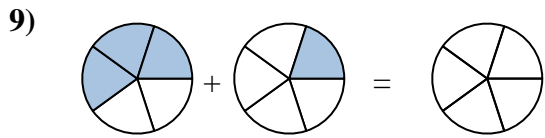
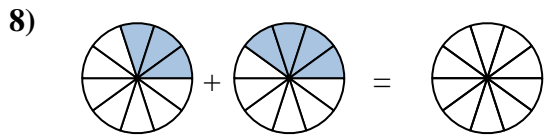
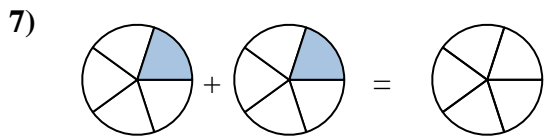
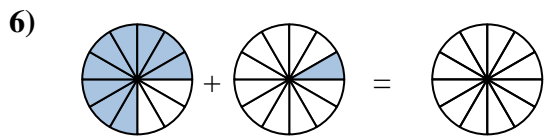
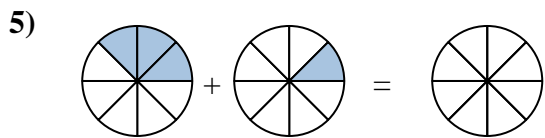
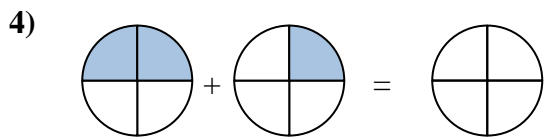
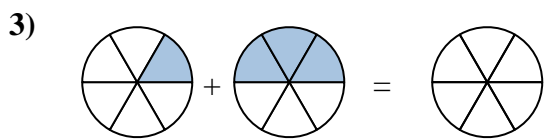
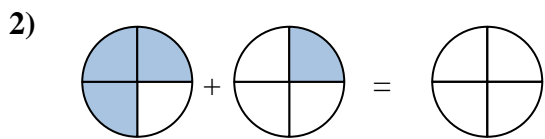
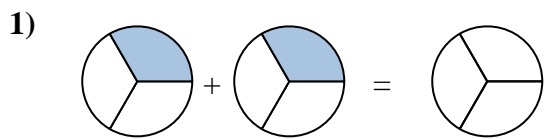
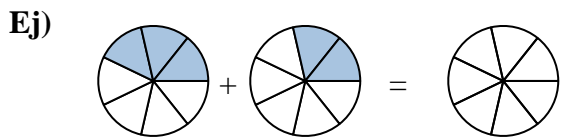
8. $\frac{2}{8}$ $\frac{4}{8}$ $\frac{6}{8}$

9. $\frac{1}{3}$ $\frac{1}{3}$ $\frac{2}{3}$

10. $\frac{6}{12}$ $\frac{3}{12}$ $\frac{9}{12}$



Sombrea la fracción para resolver el problema.



Respuestas

Ej. $\frac{3}{7}$ $\frac{2}{7}$ $\frac{5}{7}$

1. _____

2. _____

3. _____

4. _____

5. _____

6. _____

7. _____

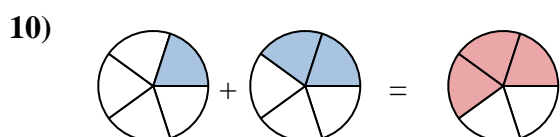
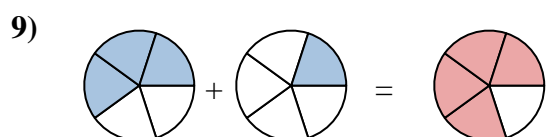
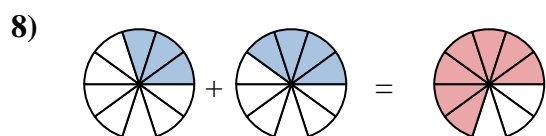
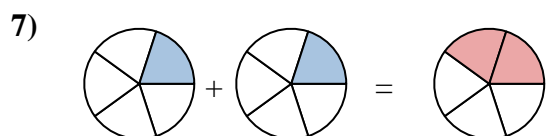
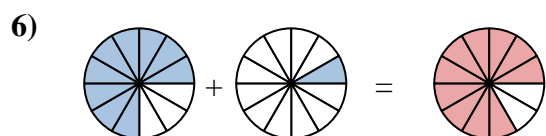
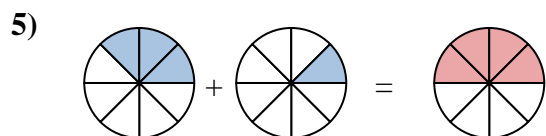
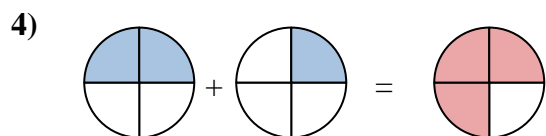
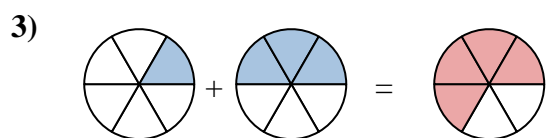
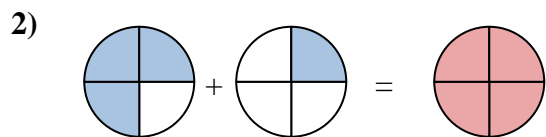
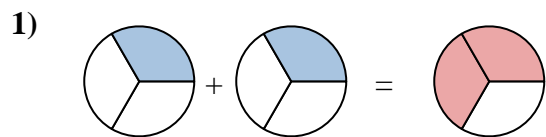
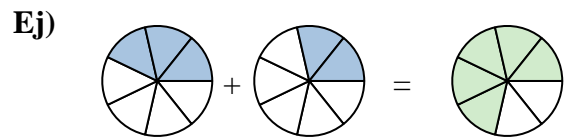
8. _____

9. _____

10. _____



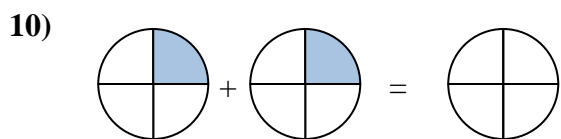
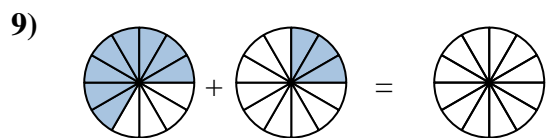
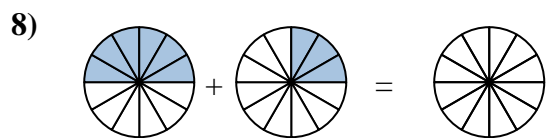
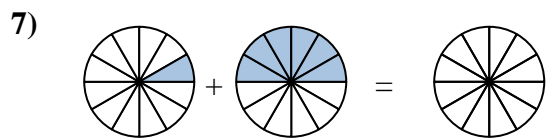
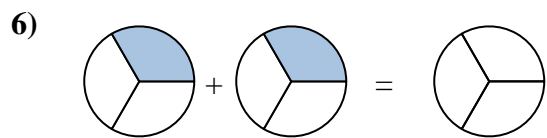
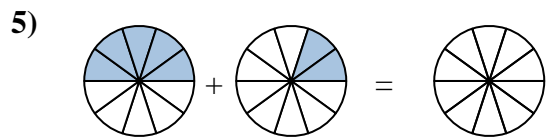
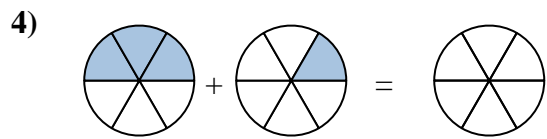
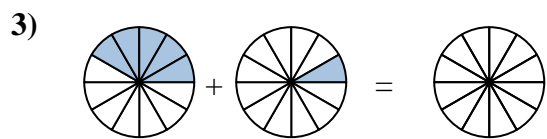
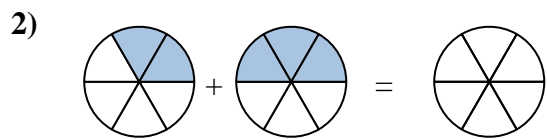
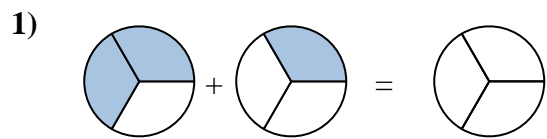
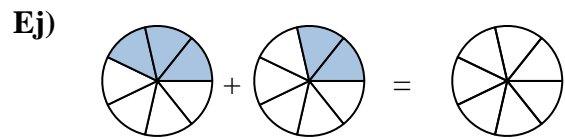
Sombrea la fracción para resolver el problema.

**Respuestas**

Ej.	$\frac{3}{7}$	$\frac{2}{7}$	$\frac{5}{7}$
1.	$\frac{1}{3}$	$\frac{1}{3}$	$\frac{2}{3}$
2.	$\frac{3}{4}$	$\frac{1}{4}$	$\frac{4}{4}$
3.	$\frac{1}{6}$	$\frac{3}{6}$	$\frac{4}{6}$
4.	$\frac{2}{4}$	$\frac{1}{4}$	$\frac{3}{4}$
5.	$\frac{3}{8}$	$\frac{1}{8}$	$\frac{4}{8}$
6.	$\frac{9}{12}$	$\frac{1}{12}$	$\frac{10}{12}$
7.	$\frac{1}{5}$	$\frac{1}{5}$	$\frac{2}{5}$
8.	$\frac{3}{10}$	$\frac{4}{10}$	$\frac{7}{10}$
9.	$\frac{3}{5}$	$\frac{1}{5}$	$\frac{4}{5}$
10.	$\frac{1}{5}$	$\frac{2}{5}$	$\frac{3}{5}$



Sombrea la fracción para resolver el problema.



Respuestas

Ej. $\frac{3}{7}$ $\frac{2}{7}$ $\frac{5}{7}$

1. _____

2. _____

3. _____

4. _____

5. _____

6. _____

7. _____

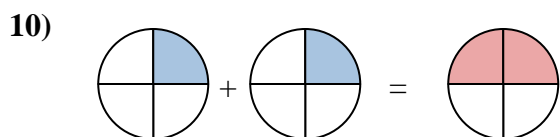
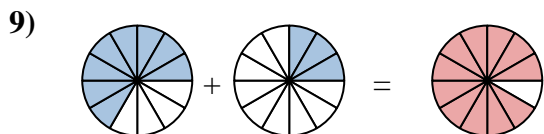
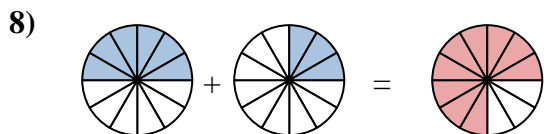
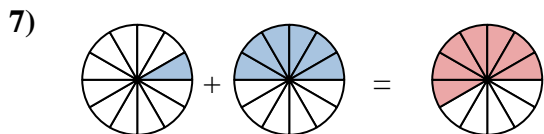
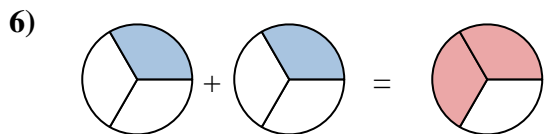
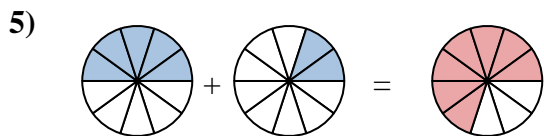
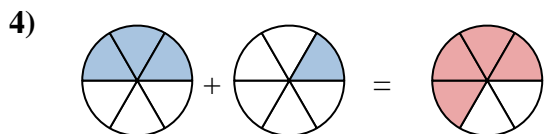
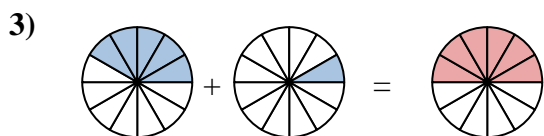
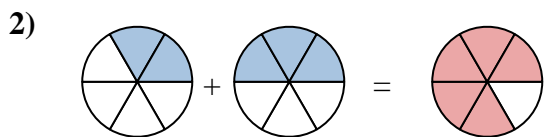
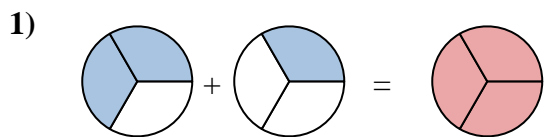
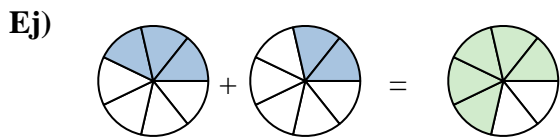
8. _____

9. _____

10. _____



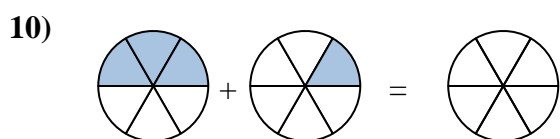
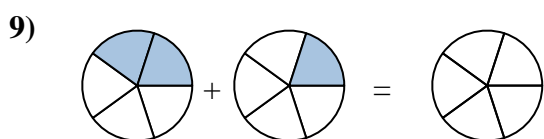
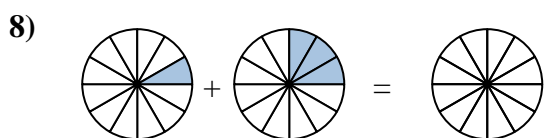
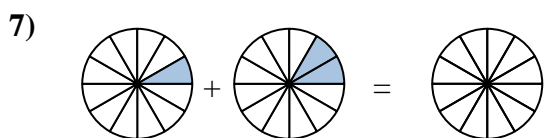
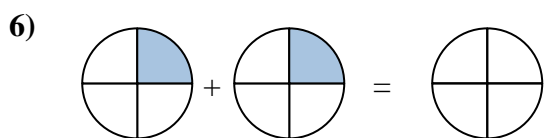
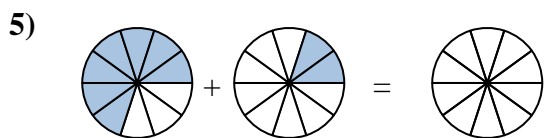
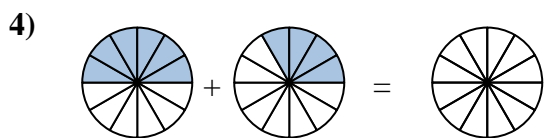
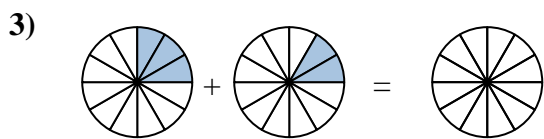
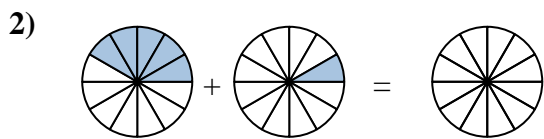
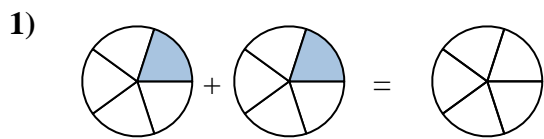
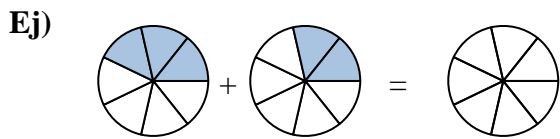
Sombrea la fracción para resolver el problema.

**Respuestas**

Ej.	$\frac{3}{7}$	$\frac{2}{7}$	$\frac{5}{7}$
1.	$\frac{2}{3}$	$\frac{1}{3}$	$\frac{3}{3}$
2.	$\frac{2}{6}$	$\frac{3}{6}$	$\frac{5}{6}$
3.	$\frac{5}{12}$	$\frac{1}{12}$	$\frac{6}{12}$
4.	$\frac{3}{6}$	$\frac{1}{6}$	$\frac{4}{6}$
5.	$\frac{5}{10}$	$\frac{2}{10}$	$\frac{7}{10}$
6.	$\frac{1}{3}$	$\frac{1}{3}$	$\frac{2}{3}$
7.	$\frac{1}{12}$	$\frac{6}{12}$	$\frac{7}{12}$
8.	$\frac{6}{12}$	$\frac{3}{12}$	$\frac{9}{12}$
9.	$\frac{8}{12}$	$\frac{3}{12}$	$\frac{11}{12}$
10.	$\frac{1}{4}$	$\frac{1}{4}$	$\frac{2}{4}$



Sombrea la fracción para resolver el problema.



Respuestas

Ej. $\frac{3}{7}$ $\frac{2}{7}$ $\frac{5}{7}$

1. _____

2. _____

3. _____

4. _____

5. _____

6. _____

7. _____

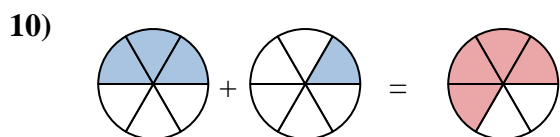
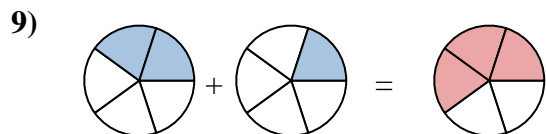
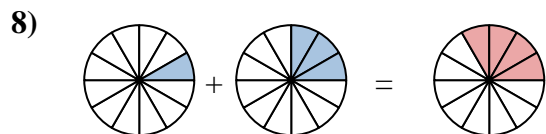
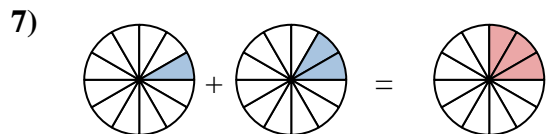
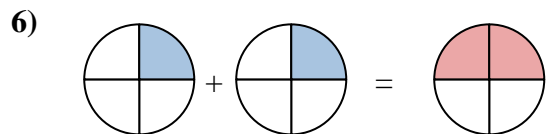
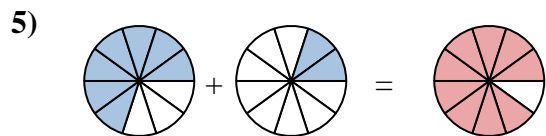
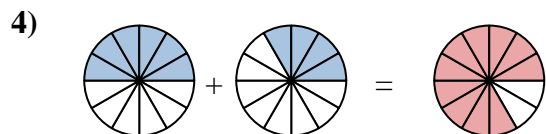
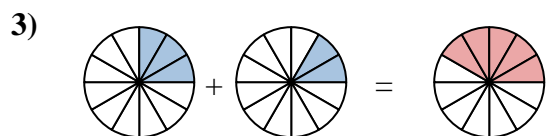
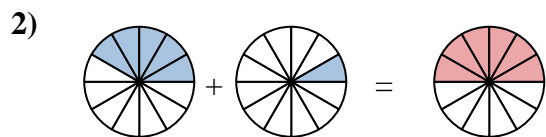
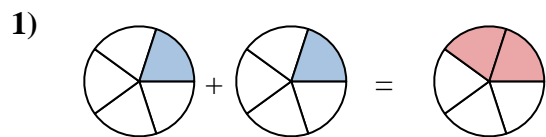
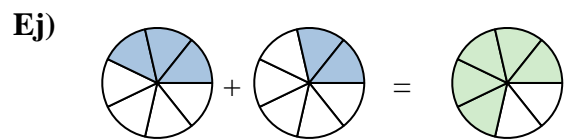
8. _____

9. _____

10. _____



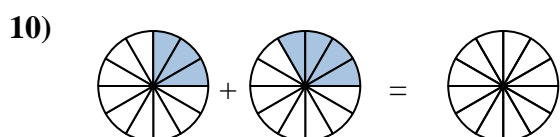
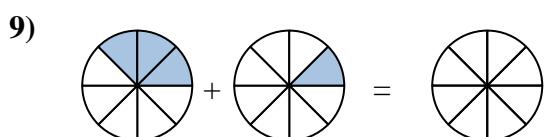
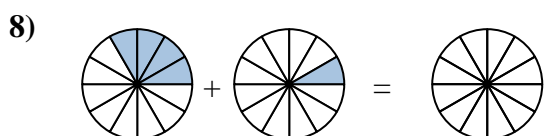
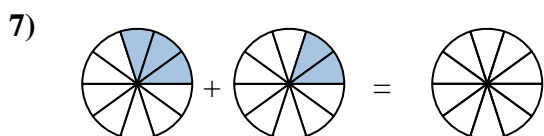
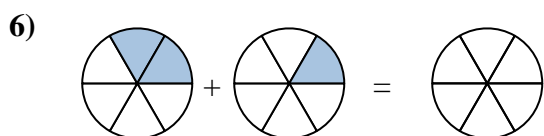
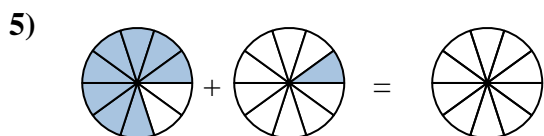
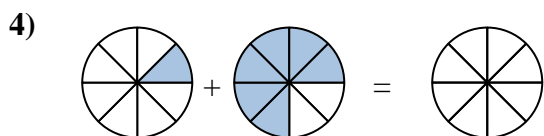
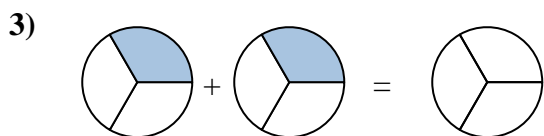
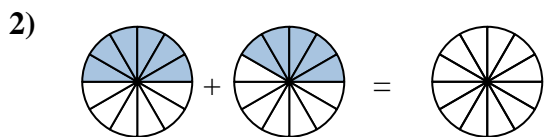
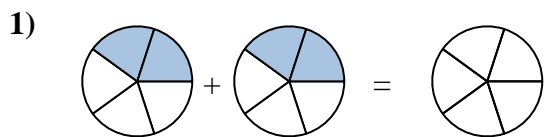
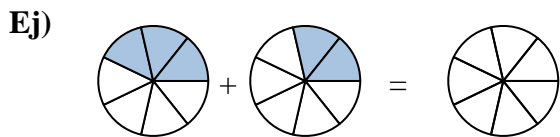
Sombrea la fracción para resolver el problema.

**Respuestas**

Ej.	$\frac{3}{7}$	$\frac{2}{7}$	$\frac{5}{7}$
1.	$\frac{1}{5}$	$\frac{1}{5}$	$\frac{2}{5}$
2.	$\frac{5}{12}$	$\frac{1}{12}$	$\frac{6}{12}$
3.	$\frac{3}{12}$	$\frac{2}{12}$	$\frac{5}{12}$
4.	$\frac{6}{12}$	$\frac{4}{12}$	$\frac{10}{12}$
5.	$\frac{7}{10}$	$\frac{2}{10}$	$\frac{9}{10}$
6.	$\frac{1}{4}$	$\frac{1}{4}$	$\frac{2}{4}$
7.	$\frac{1}{12}$	$\frac{2}{12}$	$\frac{3}{12}$
8.	$\frac{1}{12}$	$\frac{3}{12}$	$\frac{4}{12}$
9.	$\frac{2}{5}$	$\frac{1}{5}$	$\frac{3}{5}$
10.	$\frac{3}{6}$	$\frac{1}{6}$	$\frac{4}{6}$



Sombrea la fracción para resolver el problema.



Respuestas

Ej. $\frac{3}{7}$ $\frac{2}{7}$ $\frac{5}{7}$

1. _____

2. _____

3. _____

4. _____

5. _____

6. _____

7. _____

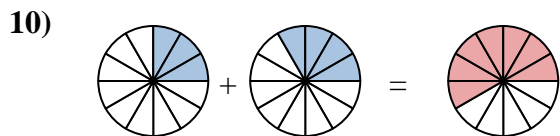
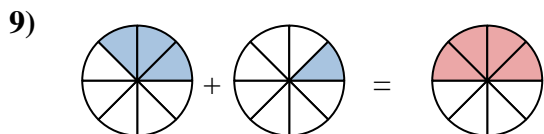
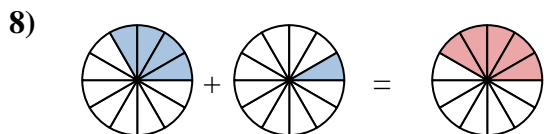
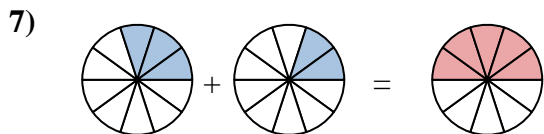
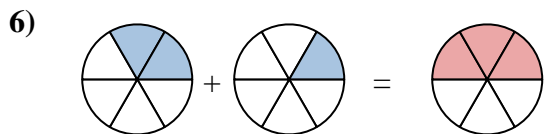
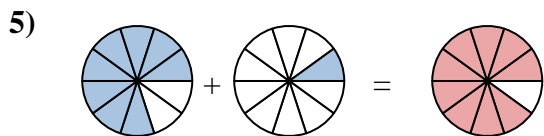
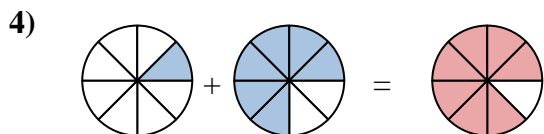
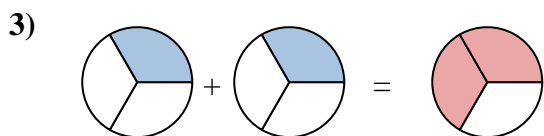
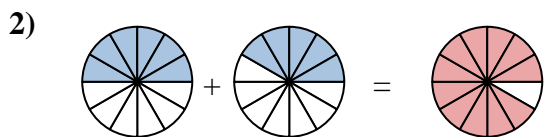
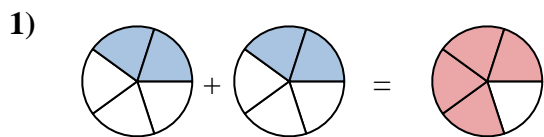
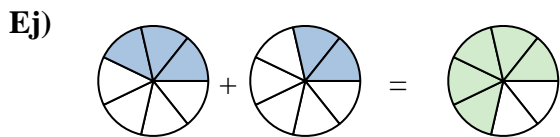
8. _____

9. _____

10. _____



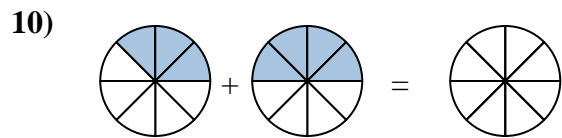
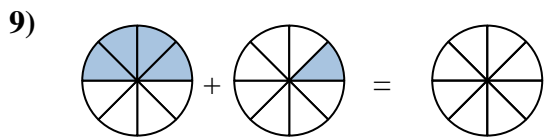
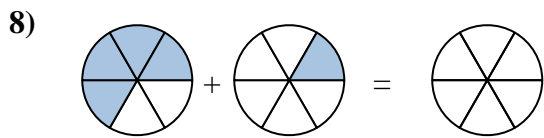
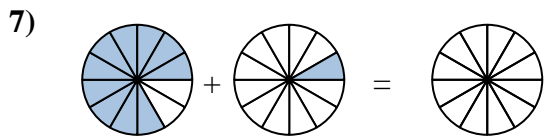
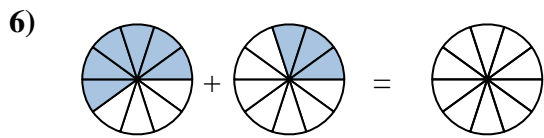
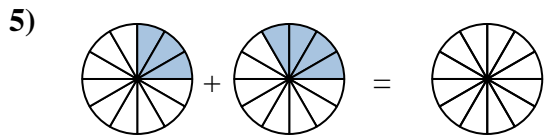
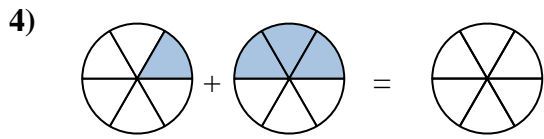
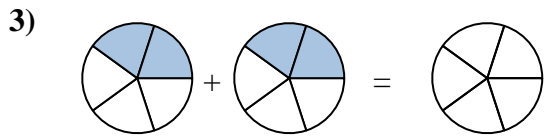
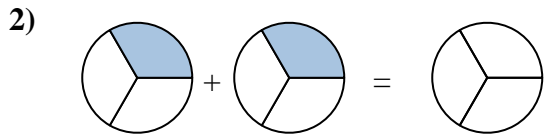
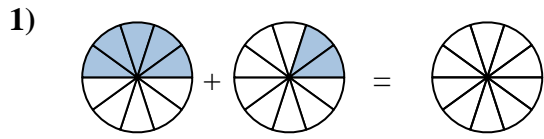
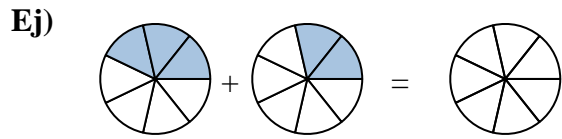
Sombrea la fracción para resolver el problema.

**Respuestas**

Ej.	$\frac{3}{7}$	$\frac{2}{7}$	$\frac{5}{7}$
1.	$\frac{2}{5}$	$\frac{2}{5}$	$\frac{4}{5}$
2.	$\frac{6}{12}$	$\frac{5}{12}$	$\frac{11}{12}$
3.	$\frac{1}{3}$	$\frac{1}{3}$	$\frac{2}{3}$
4.	$\frac{1}{8}$	$\frac{6}{8}$	$\frac{7}{8}$
5.	$\frac{8}{10}$	$\frac{1}{10}$	$\frac{9}{10}$
6.	$\frac{2}{6}$	$\frac{1}{6}$	$\frac{3}{6}$
7.	$\frac{3}{10}$	$\frac{2}{10}$	$\frac{5}{10}$
8.	$\frac{4}{12}$	$\frac{1}{12}$	$\frac{5}{12}$
9.	$\frac{3}{8}$	$\frac{1}{8}$	$\frac{4}{8}$
10.	$\frac{3}{12}$	$\frac{4}{12}$	$\frac{7}{12}$



Sombrea la fracción para resolver el problema.



Respuestas

Ej. $\frac{3}{7}$ $\frac{2}{7}$ $\frac{5}{7}$

1. _____

2. _____

3. _____

4. _____

5. _____

6. _____

7. _____

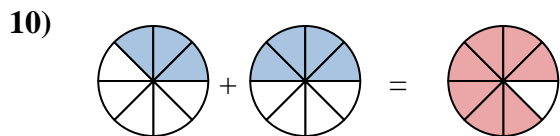
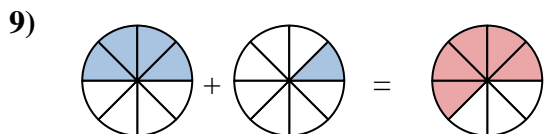
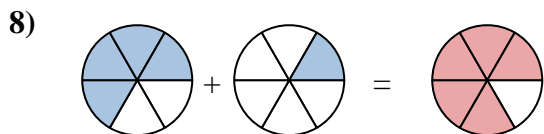
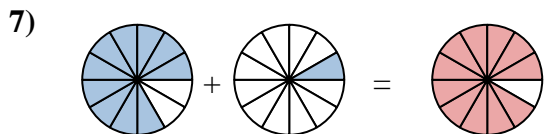
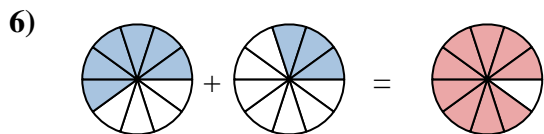
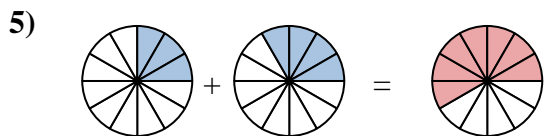
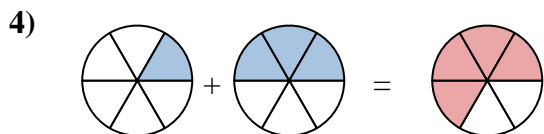
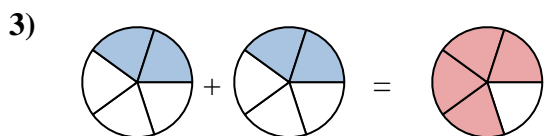
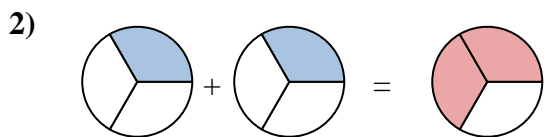
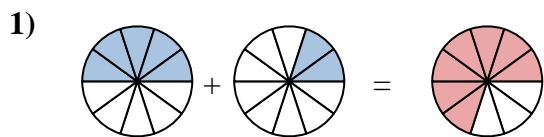
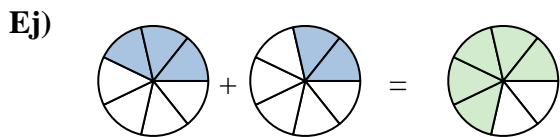
8. _____

9. _____

10. _____



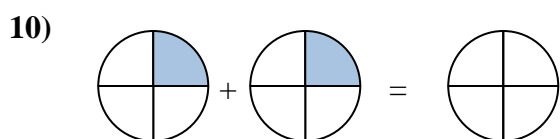
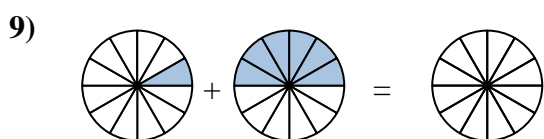
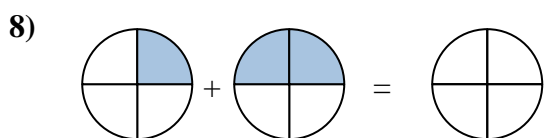
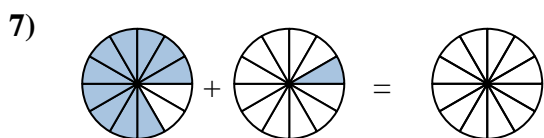
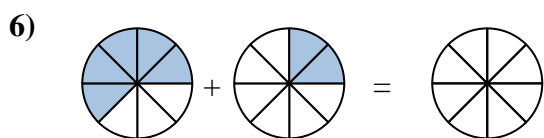
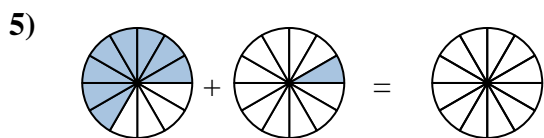
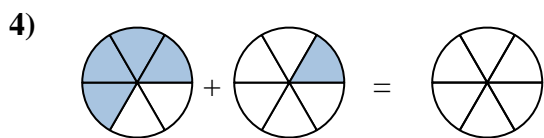
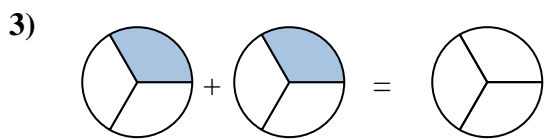
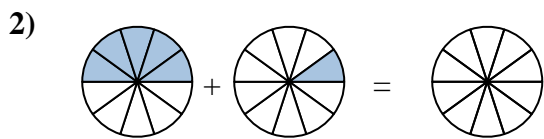
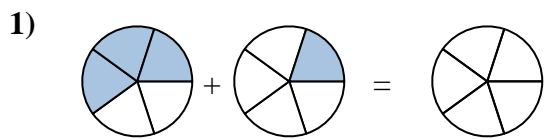
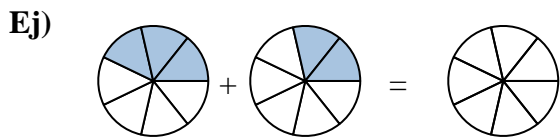
Sombrea la fracción para resolver el problema.

**Respuestas**

Ej.	$\frac{3}{7}$	$\frac{2}{7}$	$\frac{5}{7}$
1.	$\frac{5}{10}$	$\frac{2}{10}$	$\frac{7}{10}$
2.	$\frac{1}{3}$	$\frac{1}{3}$	$\frac{2}{3}$
3.	$\frac{2}{5}$	$\frac{2}{5}$	$\frac{4}{5}$
4.	$\frac{1}{6}$	$\frac{3}{6}$	$\frac{4}{6}$
5.	$\frac{3}{12}$	$\frac{4}{12}$	$\frac{7}{12}$
6.	$\frac{6}{10}$	$\frac{3}{10}$	$\frac{9}{10}$
7.	$\frac{10}{12}$	$\frac{1}{12}$	$\frac{11}{12}$
8.	$\frac{4}{6}$	$\frac{1}{6}$	$\frac{5}{6}$
9.	$\frac{4}{8}$	$\frac{1}{8}$	$\frac{5}{8}$
10.	$\frac{3}{8}$	$\frac{4}{8}$	$\frac{7}{8}$



Sombrea la fracción para resolver el problema.



Respuestas

Ej. $\frac{3}{7}$ $\frac{2}{7}$ $\frac{5}{7}$

1. _____

2. _____

3. _____

4. _____

5. _____

6. _____

7. _____

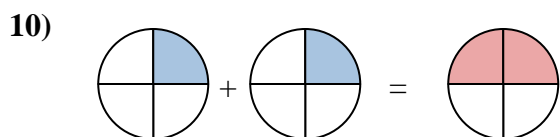
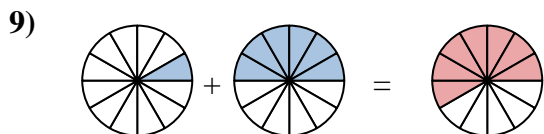
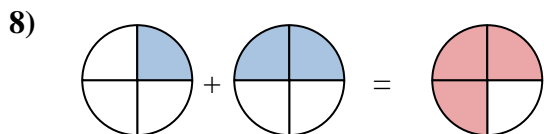
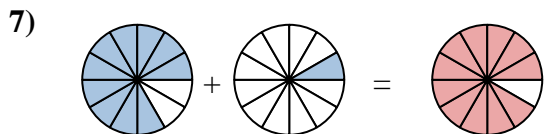
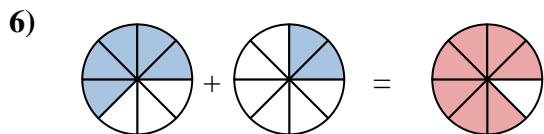
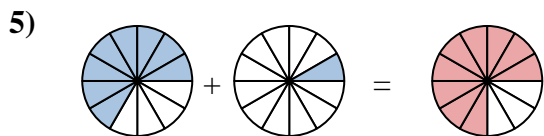
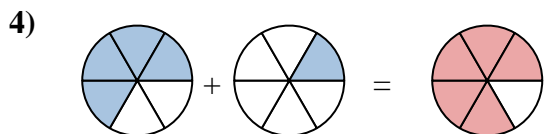
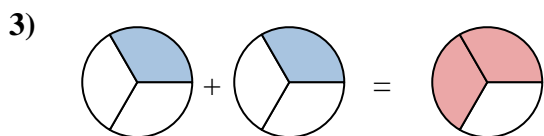
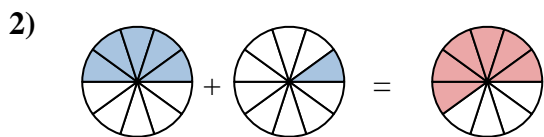
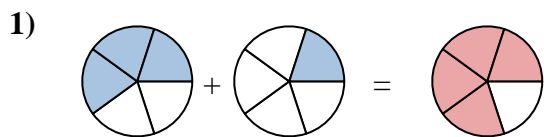
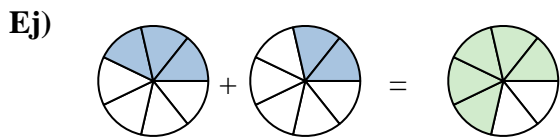
8. _____

9. _____

10. _____



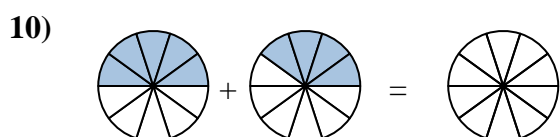
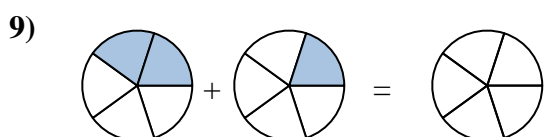
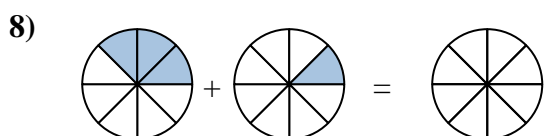
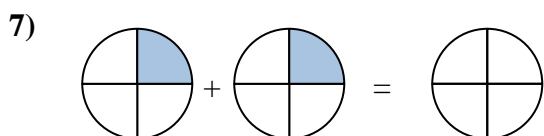
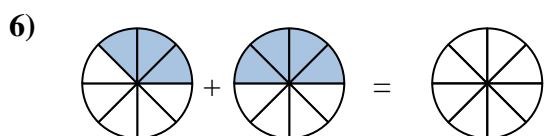
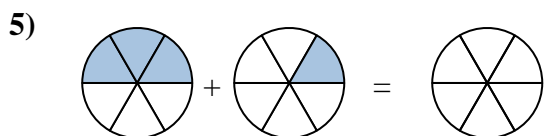
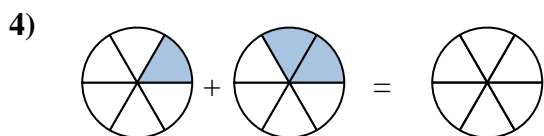
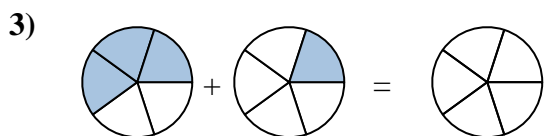
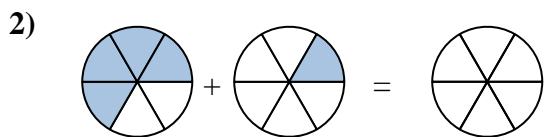
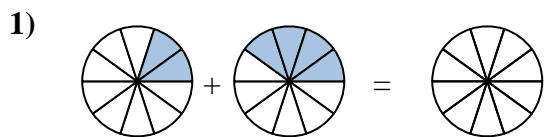
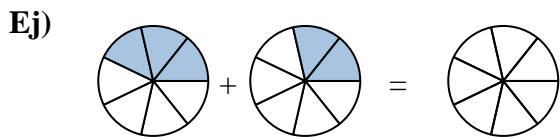
Sombrea la fracción para resolver el problema.

**Respuestas**

Ej.	$\frac{3}{7}$	$\frac{2}{7}$	$\frac{5}{7}$
1.	$\frac{3}{5}$	$\frac{1}{5}$	$\frac{4}{5}$
2.	$\frac{5}{10}$	$\frac{1}{10}$	$\frac{6}{10}$
3.	$\frac{1}{3}$	$\frac{1}{3}$	$\frac{2}{3}$
4.	$\frac{4}{6}$	$\frac{1}{6}$	$\frac{5}{6}$
5.	$\frac{8}{12}$	$\frac{1}{12}$	$\frac{9}{12}$
6.	$\frac{5}{8}$	$\frac{2}{8}$	$\frac{7}{8}$
7.	$\frac{10}{12}$	$\frac{1}{12}$	$\frac{11}{12}$
8.	$\frac{1}{4}$	$\frac{2}{4}$	$\frac{3}{4}$
9.	$\frac{1}{12}$	$\frac{6}{12}$	$\frac{7}{12}$
10.	$\frac{1}{4}$	$\frac{1}{4}$	$\frac{2}{4}$



Sombrea la fracción para resolver el problema.



Respuestas

Ej. $\frac{3}{7}$ $\frac{2}{7}$ $\frac{5}{7}$

1. _____

2. _____

3. _____

4. _____

5. _____

6. _____

7. _____

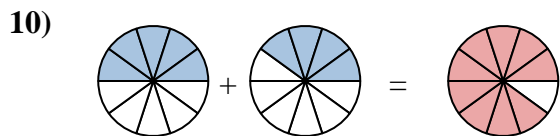
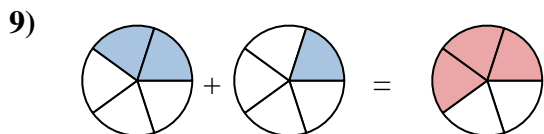
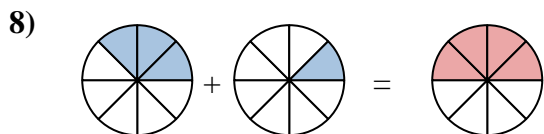
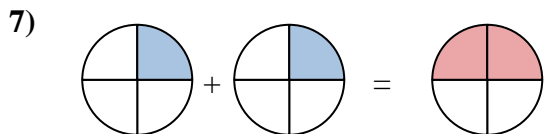
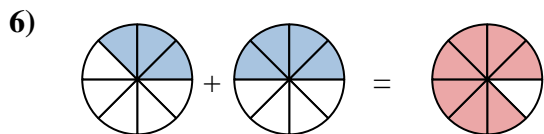
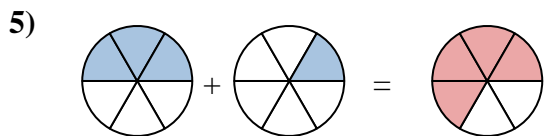
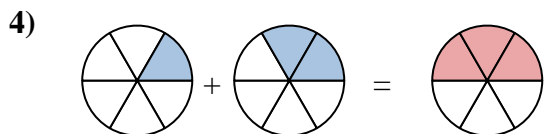
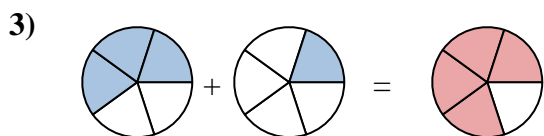
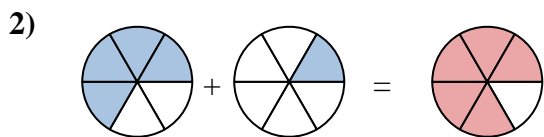
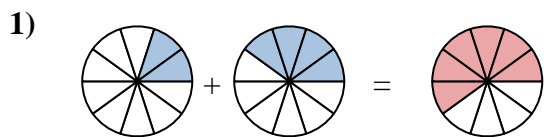
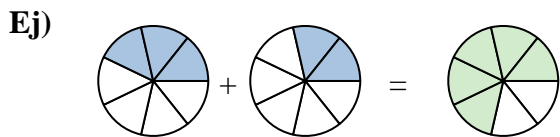
8. _____

9. _____

10. _____



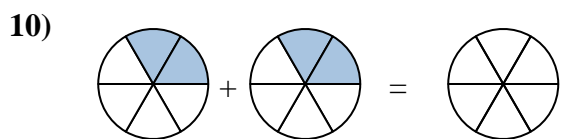
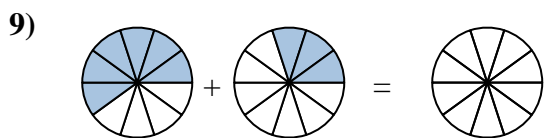
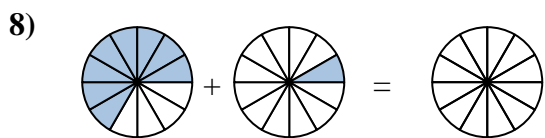
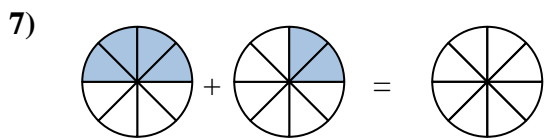
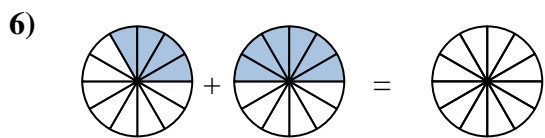
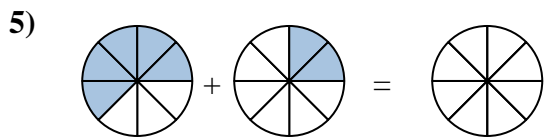
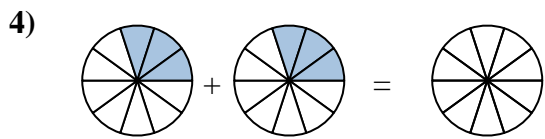
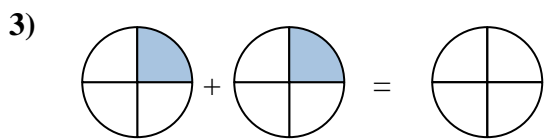
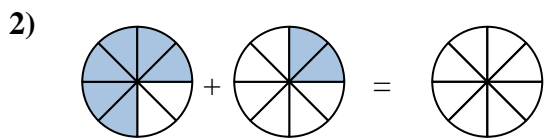
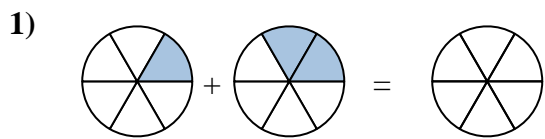
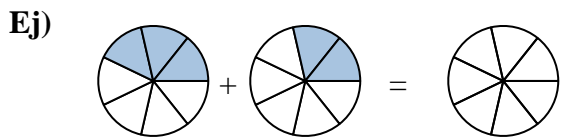
Sombrea la fracción para resolver el problema.

**Respuestas**

Ej.	$\frac{3}{7}$	$\frac{2}{7}$	$\frac{5}{7}$
1.	$\frac{2}{10}$	$\frac{4}{10}$	$\frac{6}{10}$
2.	$\frac{4}{6}$	$\frac{1}{6}$	$\frac{5}{6}$
3.	$\frac{3}{5}$	$\frac{1}{5}$	$\frac{4}{5}$
4.	$\frac{1}{6}$	$\frac{2}{6}$	$\frac{3}{6}$
5.	$\frac{3}{6}$	$\frac{1}{6}$	$\frac{4}{6}$
6.	$\frac{3}{8}$	$\frac{4}{8}$	$\frac{7}{8}$
7.	$\frac{1}{4}$	$\frac{1}{4}$	$\frac{2}{4}$
8.	$\frac{3}{8}$	$\frac{1}{8}$	$\frac{4}{8}$
9.	$\frac{2}{5}$	$\frac{1}{5}$	$\frac{3}{5}$
10.	$\frac{5}{10}$	$\frac{4}{10}$	$\frac{9}{10}$



Sombrea la fracción para resolver el problema.



Respuestas

Ej. $\frac{3}{7}$ $\frac{2}{7}$ $\frac{5}{7}$

1. _____

2. _____

3. _____

4. _____

5. _____

6. _____

7. _____

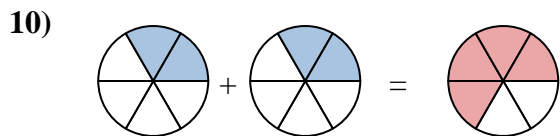
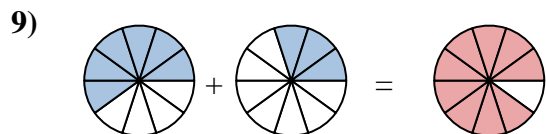
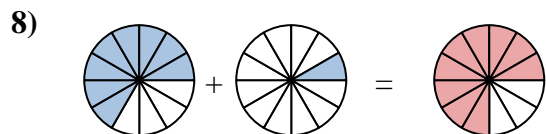
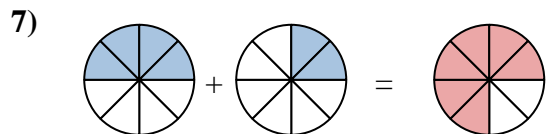
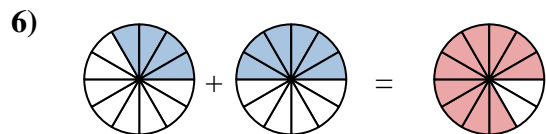
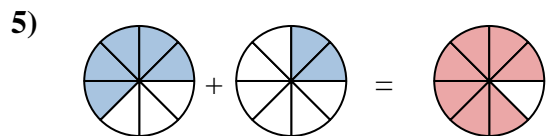
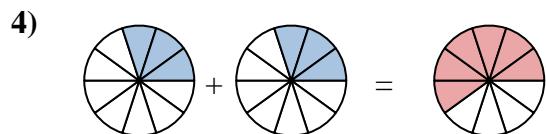
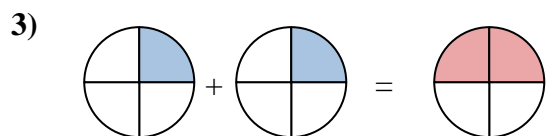
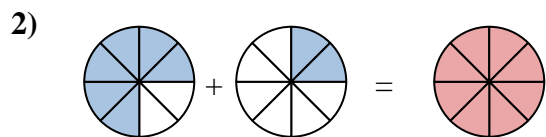
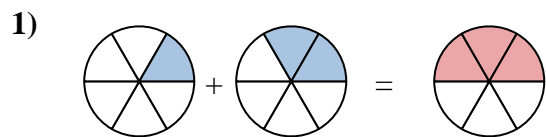
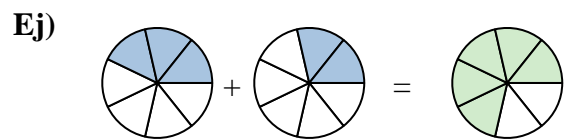
8. _____

9. _____

10. _____



Sombrea la fracción para resolver el problema.

**Respuestas**

Ej. $\frac{3}{7}$ $\frac{2}{7}$ $\frac{5}{7}$

1. $\frac{1}{6}$ $\frac{2}{6}$ $\frac{3}{6}$

2. $\frac{6}{8}$ $\frac{2}{8}$ $\frac{8}{8}$

3. $\frac{1}{4}$ $\frac{1}{4}$ $\frac{2}{4}$

4. $\frac{3}{10}$ $\frac{3}{10}$ $\frac{6}{10}$

5. $\frac{5}{8}$ $\frac{2}{8}$ $\frac{7}{8}$

6. $\frac{4}{12}$ $\frac{6}{12}$ $\frac{10}{12}$

7. $\frac{4}{8}$ $\frac{2}{8}$ $\frac{6}{8}$

8. $\frac{8}{12}$ $\frac{1}{12}$ $\frac{9}{12}$

9. $\frac{6}{10}$ $\frac{3}{10}$ $\frac{9}{10}$

10. $\frac{2}{6}$ $\frac{2}{6}$ $\frac{4}{6}$