



Iguala cada ecuación para responder y escribe la respuesta.

Respuestas

Ej) $\frac{1}{6} + \frac{1}{6} + \frac{1}{6}$



Ej. **A**

1) $\frac{1}{8} + \frac{1}{8} + \frac{1}{8} + \frac{1}{8}$



1. _____

2) $\frac{1}{6} + \frac{1}{6}$



2. _____

3) $\frac{1}{4} + \frac{1}{4}$




3. _____

4) $\frac{1}{12} + \frac{1}{12} + \frac{1}{12} + \frac{1}{12}$



4. _____

5) $\frac{1}{10} + \frac{1}{10} + \frac{1}{10}$



5. _____

6) $\frac{1}{10} + \frac{1}{10} + \frac{1}{10} + \frac{1}{10} + \frac{1}{10} + \frac{1}{10}$



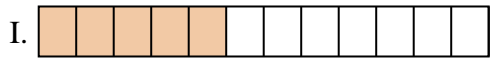
6. _____

7) $\frac{1}{3} + \frac{1}{3}$



7. _____

8) $\frac{1}{6} + \frac{1}{6} + \frac{1}{6} + \frac{1}{6} + \frac{1}{6}$



8. _____

9) $\frac{1}{5} + \frac{1}{5}$




9. _____

10) $\frac{1}{10} + \frac{1}{10}$




10. _____

11) $\frac{1}{10} + \frac{1}{10} + \frac{1}{10} + \frac{1}{10} + \frac{1}{10} + \frac{1}{10} + \frac{1}{10}$



11. _____

12) $\frac{1}{12} + \frac{1}{12} + \frac{1}{12} + \frac{1}{12} + \frac{1}{12}$



12. _____

13) $\frac{1}{4} + \frac{1}{4} + \frac{1}{4}$




13. _____

14) $\frac{1}{6} + \frac{1}{6} + \frac{1}{6} + \frac{1}{6}$



14. _____

15) $\frac{1}{5} + \frac{1}{5} + \frac{1}{5} + \frac{1}{5}$



15. _____



Iguala cada ecuación para responder y escribe la respuesta.


Ej) $\frac{1}{6} + \frac{1}{6} + \frac{1}{6}$



1) $\frac{1}{8} + \frac{1}{8} + \frac{1}{8} + \frac{1}{8}$



2) $\frac{1}{6} + \frac{1}{6}$




3) $\frac{1}{4} + \frac{1}{4}$



4) $\frac{1}{12} + \frac{1}{12} + \frac{1}{12} + \frac{1}{12}$



5) $\frac{1}{10} + \frac{1}{10} + \frac{1}{10}$



6) $\frac{1}{10} + \frac{1}{10} + \frac{1}{10} + \frac{1}{10} + \frac{1}{10} + \frac{1}{10}$




7) $\frac{1}{3} + \frac{1}{3}$




8) $\frac{1}{6} + \frac{1}{6} + \frac{1}{6} + \frac{1}{6} + \frac{1}{6}$




9) $\frac{1}{5} + \frac{1}{5}$




10) $\frac{1}{10} + \frac{1}{10}$



11) $\frac{1}{10} + \frac{1}{10} + \frac{1}{10} + \frac{1}{10} + \frac{1}{10} + \frac{1}{10} + \frac{1}{10}$




12) $\frac{1}{12} + \frac{1}{12} + \frac{1}{12} + \frac{1}{12} + \frac{1}{12}$




13) $\frac{1}{4} + \frac{1}{4} + \frac{1}{4}$



14) $\frac{1}{6} + \frac{1}{6} + \frac{1}{6} + \frac{1}{6}$



15) $\frac{1}{5} + \frac{1}{5} + \frac{1}{5} + \frac{1}{5}$

**Respuestas**Ej. **A** 1. **L** 2. **O** 3. **P** 4. **B** 5. **M** 6. **G** 7. **F** 8. **N** 9. **D** 10. **J** 11. **E** 12. **I** 13. **K** 14. **H** 15. **C**