




Iguala cada ecuación para responder y escribe la respuesta.

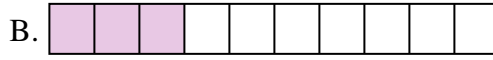
Respuestas

Ej) $\frac{1}{10} + \frac{1}{10} + \frac{1}{10} + \frac{1}{10} + \frac{1}{10} + \frac{1}{10} + \frac{1}{10}$



Ej. **H**

1) $\frac{1}{12} + \frac{1}{12} + \frac{1}{12} + \frac{1}{12}$



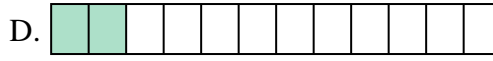
1. _____

2) $\frac{1}{5} + \frac{1}{5} + \frac{1}{5} + \frac{1}{5}$



2. _____

3) $\frac{1}{6} + \frac{1}{6} + \frac{1}{6}$



3. _____

4) $\frac{1}{8} + \frac{1}{8} + \frac{1}{8} + \frac{1}{8}$



4. _____

5) $\frac{1}{4} + \frac{1}{4}$



5. _____

6) $\frac{1}{5} + \frac{1}{5} + \frac{1}{5}$



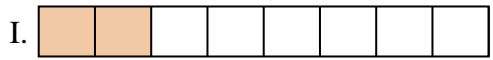
6. _____

7) $\frac{1}{8} + \frac{1}{8} + \frac{1}{8} + \frac{1}{8} + \frac{1}{8}$



7. _____

8) $\frac{1}{3} + \frac{1}{3}$




8. _____

9) $\frac{1}{5} + \frac{1}{5}$



9. _____

10) $\frac{1}{12} + \frac{1}{12}$




10. _____

11) $\frac{1}{8} + \frac{1}{8}$



11. _____

12) $\frac{1}{10} + \frac{1}{10} + \frac{1}{10}$



12. _____

13) $\frac{1}{4} + \frac{1}{4} + \frac{1}{4}$




13. _____

14) $\frac{1}{12} + \frac{1}{12} + \frac{1}{12} + \frac{1}{12} + \frac{1}{12}$



14. _____

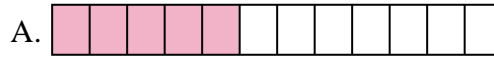
15) $\frac{1}{6} + \frac{1}{6} + \frac{1}{6} + \frac{1}{6} + \frac{1}{6}$





Iguala cada ecuación para responder y escribe la respuesta.


Ej) $\frac{1}{10} + \frac{1}{10} + \frac{1}{10} + \frac{1}{10} + \frac{1}{10} + \frac{1}{10} + \frac{1}{10}$



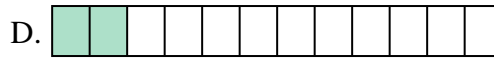
1) $\frac{1}{12} + \frac{1}{12} + \frac{1}{12} + \frac{1}{12}$



2) $\frac{1}{5} + \frac{1}{5} + \frac{1}{5} + \frac{1}{5}$




3) $\frac{1}{6} + \frac{1}{6} + \frac{1}{6}$



4) $\frac{1}{8} + \frac{1}{8} + \frac{1}{8} + \frac{1}{8}$



5) $\frac{1}{4} + \frac{1}{4}$



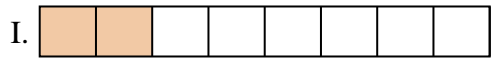
6) $\frac{1}{5} + \frac{1}{5} + \frac{1}{5}$



7) $\frac{1}{8} + \frac{1}{8} + \frac{1}{8} + \frac{1}{8} + \frac{1}{8}$




8) $\frac{1}{3} + \frac{1}{3}$



9) $\frac{1}{5} + \frac{1}{5}$




10) $\frac{1}{12} + \frac{1}{12}$



11) $\frac{1}{8} + \frac{1}{8}$



12) $\frac{1}{10} + \frac{1}{10} + \frac{1}{10}$




13) $\frac{1}{4} + \frac{1}{4} + \frac{1}{4}$



14) $\frac{1}{12} + \frac{1}{12} + \frac{1}{12} + \frac{1}{12} + \frac{1}{12}$



15) $\frac{1}{6} + \frac{1}{6} + \frac{1}{6} + \frac{1}{6} + \frac{1}{6}$

**Respuestas**Ej. **H** 1. **G** 2. **M** 3. **J** 4. **O** 5. **L** 6. **P** 7. **C** 8. **F** 9. **K** 10. **D** 11. **I** 12. **B** 13. **N** 14. **A** 15. **E**