



Iguala cada ecuación para responder y escribe la respuesta.

**Respuestas**

Ej)  $\frac{1}{5} + \frac{1}{5}$



Ej. **E** \_\_\_\_\_

1)  $\frac{1}{10} + \frac{1}{10} + \frac{1}{10} + \frac{1}{10} + \frac{1}{10} + \frac{1}{10} + \frac{1}{10}$



1. \_\_\_\_\_

2)  $\frac{1}{12} + \frac{1}{12} + \frac{1}{12} + \frac{1}{12}$



2. \_\_\_\_\_

3)  $\frac{1}{6} + \frac{1}{6}$




3. \_\_\_\_\_

4)  $\frac{1}{8} + \frac{1}{8} + \frac{1}{8} + \frac{1}{8} + \frac{1}{8} + \frac{1}{8} + \frac{1}{8}$



4. \_\_\_\_\_

5)  $\frac{1}{10} + \frac{1}{10} + \frac{1}{10} + \frac{1}{10} + \frac{1}{10} + \frac{1}{10}$



5. \_\_\_\_\_

6)  $\frac{1}{5} + \frac{1}{5} + \frac{1}{5} + \frac{1}{5}$




6. \_\_\_\_\_

7)  $\frac{1}{10} + \frac{1}{10} + \frac{1}{10} + \frac{1}{10}$



7. \_\_\_\_\_

8)  $\frac{1}{4} + \frac{1}{4}$




8. \_\_\_\_\_

9)  $\frac{1}{3} + \frac{1}{3}$



9. \_\_\_\_\_

10)  $\frac{1}{8} + \frac{1}{8} + \frac{1}{8} + \frac{1}{8} + \frac{1}{8}$



10. \_\_\_\_\_

11)  $\frac{1}{4} + \frac{1}{4} + \frac{1}{4}$



11. \_\_\_\_\_

12)  $\frac{1}{10} + \frac{1}{10} + \frac{1}{10} + \frac{1}{10} + \frac{1}{10}$



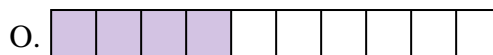
12. \_\_\_\_\_

13)  $\frac{1}{8} + \frac{1}{8} + \frac{1}{8}$




13. \_\_\_\_\_

14)  $\frac{1}{8} + \frac{1}{8} + \frac{1}{8} + \frac{1}{8} + \frac{1}{8} + \frac{1}{8}$



14. \_\_\_\_\_

15)  $\frac{1}{8} + \frac{1}{8} + \frac{1}{8} + \frac{1}{8}$



15. \_\_\_\_\_



Iguala cada ecuación para responder y escribe la respuesta.

Ej)  $\frac{1}{5} + \frac{1}{5}$



1)  $\frac{1}{10} + \frac{1}{10} + \frac{1}{10} + \frac{1}{10} + \frac{1}{10} + \frac{1}{10} + \frac{1}{10}$



2)  $\frac{1}{12} + \frac{1}{12} + \frac{1}{12} + \frac{1}{12}$




3)  $\frac{1}{6} + \frac{1}{6}$



4)  $\frac{1}{8} + \frac{1}{8} + \frac{1}{8} + \frac{1}{8} + \frac{1}{8} + \frac{1}{8} + \frac{1}{8}$



5)  $\frac{1}{10} + \frac{1}{10} + \frac{1}{10} + \frac{1}{10} + \frac{1}{10} + \frac{1}{10}$




6)  $\frac{1}{5} + \frac{1}{5} + \frac{1}{5} + \frac{1}{5}$



7)  $\frac{1}{10} + \frac{1}{10} + \frac{1}{10} + \frac{1}{10}$



8)  $\frac{1}{4} + \frac{1}{4}$




9)  $\frac{1}{3} + \frac{1}{3}$



10)  $\frac{1}{8} + \frac{1}{8} + \frac{1}{8} + \frac{1}{8} + \frac{1}{8}$



11)  $\frac{1}{4} + \frac{1}{4} + \frac{1}{4}$



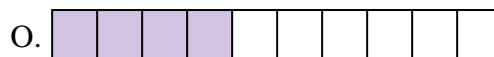
12)  $\frac{1}{10} + \frac{1}{10} + \frac{1}{10} + \frac{1}{10} + \frac{1}{10}$




13)  $\frac{1}{8} + \frac{1}{8} + \frac{1}{8}$



14)  $\frac{1}{8} + \frac{1}{8} + \frac{1}{8} + \frac{1}{8} + \frac{1}{8} + \frac{1}{8}$



15)  $\frac{1}{8} + \frac{1}{8} + \frac{1}{8} + \frac{1}{8}$

**Respuestas**Ej.     E    1.     K    2.     D    3.     B    4.     G    5.     P    6.     A    7.     O    8.     M    9.     J    10.    H   11.    L   12.    C   13.    F   14.    N   15.    I