



Iguala cada ecuación para responder y escribe la respuesta.

Respuestas

Ej) $\frac{1}{6} + \frac{1}{6} + \frac{1}{6}$




Ej. **A**

1) $\frac{1}{8} + \frac{1}{8} + \frac{1}{8} + \frac{1}{8}$



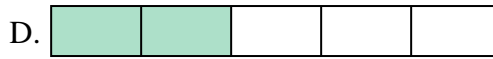
1. _____

2) $\frac{1}{6} + \frac{1}{6}$




2. _____

3) $\frac{1}{4} + \frac{1}{4}$




3. _____

4) $\frac{1}{12} + \frac{1}{12} + \frac{1}{12} + \frac{1}{12}$



4. _____

5) $\frac{1}{10} + \frac{1}{10} + \frac{1}{10}$



5. _____

6) $\frac{1}{10} + \frac{1}{10} + \frac{1}{10} + \frac{1}{10} + \frac{1}{10} + \frac{1}{10}$



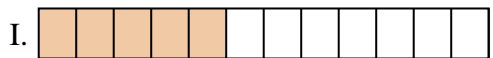
6. _____

7) $\frac{1}{3} + \frac{1}{3}$



7. _____

8) $\frac{1}{6} + \frac{1}{6} + \frac{1}{6} + \frac{1}{6} + \frac{1}{6}$




8. _____

9) $\frac{1}{5} + \frac{1}{5}$




9. _____

10) $\frac{1}{10} + \frac{1}{10}$



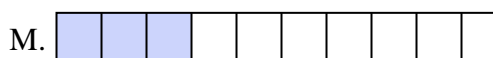
10. _____

11) $\frac{1}{10} + \frac{1}{10} + \frac{1}{10} + \frac{1}{10} + \frac{1}{10} + \frac{1}{10} + \frac{1}{10}$



11. _____

12) $\frac{1}{12} + \frac{1}{12} + \frac{1}{12} + \frac{1}{12} + \frac{1}{12}$



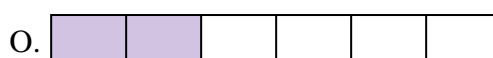
12. _____

13) $\frac{1}{4} + \frac{1}{4} + \frac{1}{4}$




13. _____

14) $\frac{1}{6} + \frac{1}{6} + \frac{1}{6} + \frac{1}{6}$



14. _____

15) $\frac{1}{5} + \frac{1}{5} + \frac{1}{5} + \frac{1}{5}$



15. _____



Iguala cada ecuación para responder y escribe la respuesta.


Ej) $\frac{1}{6} + \frac{1}{6} + \frac{1}{6}$



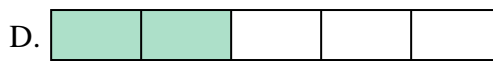
1) $\frac{1}{8} + \frac{1}{8} + \frac{1}{8} + \frac{1}{8}$




2) $\frac{1}{6} + \frac{1}{6}$



3) $\frac{1}{4} + \frac{1}{4}$



4) $\frac{1}{12} + \frac{1}{12} + \frac{1}{12} + \frac{1}{12}$



5) $\frac{1}{10} + \frac{1}{10} + \frac{1}{10}$



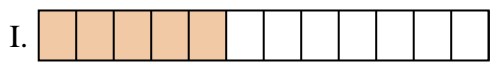
6) $\frac{1}{10} + \frac{1}{10} + \frac{1}{10} + \frac{1}{10} + \frac{1}{10} + \frac{1}{10}$



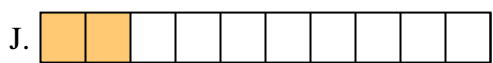
7) $\frac{1}{3} + \frac{1}{3}$



8) $\frac{1}{6} + \frac{1}{6} + \frac{1}{6} + \frac{1}{6} + \frac{1}{6}$




9) $\frac{1}{5} + \frac{1}{5}$




10) $\frac{1}{10} + \frac{1}{10}$



11) $\frac{1}{10} + \frac{1}{10} + \frac{1}{10} + \frac{1}{10} + \frac{1}{10} + \frac{1}{10} + \frac{1}{10}$



12) $\frac{1}{12} + \frac{1}{12} + \frac{1}{12} + \frac{1}{12} + \frac{1}{12}$




13) $\frac{1}{4} + \frac{1}{4} + \frac{1}{4}$



14) $\frac{1}{6} + \frac{1}{6} + \frac{1}{6} + \frac{1}{6}$



15) $\frac{1}{5} + \frac{1}{5} + \frac{1}{5} + \frac{1}{5}$


**Respuestas**Ej. **A** 1. **L** 2. **O** 3. **P** 4. **B** 5. **M** 6. **G** 7. **F** 8. **N** 9. **D** 10. **J** 11. **E** 12. **I** 13. **K** 14. **H** 15. **C**



Iguala cada ecuación para responder y escribe la respuesta.

Respuestas

Ej) $\frac{1}{5} + \frac{1}{5}$




Ej. **G**

1) $\frac{1}{10} + \frac{1}{10}$



1. _____

2) $\frac{1}{5} + \frac{1}{5} + \frac{1}{5}$



2. _____

3) $\frac{1}{3} + \frac{1}{3}$



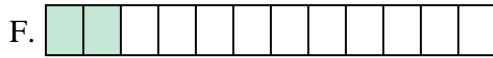
3. _____

4) $\frac{1}{12} + \frac{1}{12}$



4. _____

5) $\frac{1}{12} + \frac{1}{12} + \frac{1}{12} + \frac{1}{12}$



5. _____

6) $\frac{1}{4} + \frac{1}{4}$



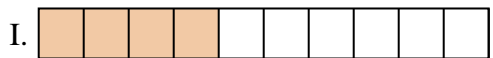
6. _____

7) $\frac{1}{6} + \frac{1}{6}$



7. _____

8) $\frac{1}{4} + \frac{1}{4} + \frac{1}{4}$



8. _____

9) $\frac{1}{10} + \frac{1}{10} + \frac{1}{10} + \frac{1}{10}$



9. _____

10) $\frac{1}{6} + \frac{1}{6} + \frac{1}{6} + \frac{1}{6} + \frac{1}{6}$




10. _____

11) $\frac{1}{8} + \frac{1}{8} + \frac{1}{8} + \frac{1}{8}$



11. _____

12) $\frac{1}{12} + \frac{1}{12} + \frac{1}{12}$




12. _____

13) $\frac{1}{8} + \frac{1}{8}$




13. _____

14) $\frac{1}{6} + \frac{1}{6} + \frac{1}{6} + \frac{1}{6}$



14. _____


15) $\frac{1}{8} + \frac{1}{8} + \frac{1}{8} + \frac{1}{8} + \frac{1}{8}$





Iguala cada ecuación para responder y escribe la respuesta.

Ej) $\frac{1}{5} + \frac{1}{5}$




1) $\frac{1}{10} + \frac{1}{10}$



2) $\frac{1}{5} + \frac{1}{5} + \frac{1}{5}$



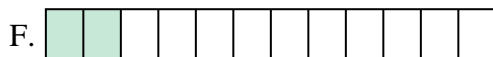
3) $\frac{1}{3} + \frac{1}{3}$



4) $\frac{1}{12} + \frac{1}{12}$



5) $\frac{1}{12} + \frac{1}{12} + \frac{1}{12} + \frac{1}{12}$



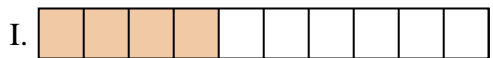
6) $\frac{1}{4} + \frac{1}{4}$



7) $\frac{1}{6} + \frac{1}{6}$



8) $\frac{1}{4} + \frac{1}{4} + \frac{1}{4}$



9) $\frac{1}{10} + \frac{1}{10} + \frac{1}{10} + \frac{1}{10}$




10) $\frac{1}{6} + \frac{1}{6} + \frac{1}{6} + \frac{1}{6} + \frac{1}{6}$



11) $\frac{1}{8} + \frac{1}{8} + \frac{1}{8} + \frac{1}{8}$




12) $\frac{1}{12} + \frac{1}{12} + \frac{1}{12}$




13) $\frac{1}{8} + \frac{1}{8}$



14) $\frac{1}{6} + \frac{1}{6} + \frac{1}{6} + \frac{1}{6}$



15) $\frac{1}{8} + \frac{1}{8} + \frac{1}{8} + \frac{1}{8} + \frac{1}{8}$


**Respuestas**Ej. **G** 1. **E** 2. **O** 3. **K** 4. **F** 5. **M** 6. **D** 7. **A** 8. **P** 9. **I** 10. **B** 11. **C** 12. **J** 13. **N** 14. **L** 15. **H**



Iguala cada ecuación para responder y escribe la respuesta.

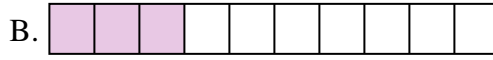
Respuestas

Ej) $\frac{1}{10} + \frac{1}{10} + \frac{1}{10} + \frac{1}{10} + \frac{1}{10} + \frac{1}{10} + \frac{1}{10}$



Ej. **H**

1) $\frac{1}{12} + \frac{1}{12} + \frac{1}{12} + \frac{1}{12}$



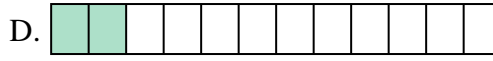
1. _____

2) $\frac{1}{5} + \frac{1}{5} + \frac{1}{5} + \frac{1}{5}$



2. _____

3) $\frac{1}{6} + \frac{1}{6} + \frac{1}{6}$



3. _____

4) $\frac{1}{8} + \frac{1}{8} + \frac{1}{8} + \frac{1}{8}$



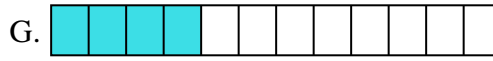
4. _____

5) $\frac{1}{4} + \frac{1}{4}$



5. _____

6) $\frac{1}{5} + \frac{1}{5} + \frac{1}{5}$



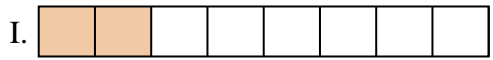
6. _____

7) $\frac{1}{8} + \frac{1}{8} + \frac{1}{8} + \frac{1}{8} + \frac{1}{8}$



7. _____

8) $\frac{1}{3} + \frac{1}{3}$



8. _____

9) $\frac{1}{5} + \frac{1}{5}$



9. _____

10) $\frac{1}{12} + \frac{1}{12}$




10. _____

11) $\frac{1}{8} + \frac{1}{8}$



11. _____

12) $\frac{1}{10} + \frac{1}{10} + \frac{1}{10}$



12. _____

13) $\frac{1}{4} + \frac{1}{4} + \frac{1}{4}$




13. _____

14) $\frac{1}{12} + \frac{1}{12} + \frac{1}{12} + \frac{1}{12} + \frac{1}{12}$



14. _____

15) $\frac{1}{6} + \frac{1}{6} + \frac{1}{6} + \frac{1}{6} + \frac{1}{6}$

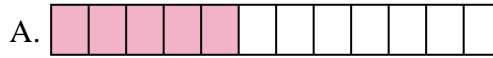


15. _____



Iguala cada ecuación para responder y escribe la respuesta.

Ej) $\frac{1}{10} + \frac{1}{10} + \frac{1}{10} + \frac{1}{10} + \frac{1}{10} + \frac{1}{10} + \frac{1}{10}$



1) $\frac{1}{12} + \frac{1}{12} + \frac{1}{12} + \frac{1}{12}$



2) $\frac{1}{5} + \frac{1}{5} + \frac{1}{5} + \frac{1}{5}$




3) $\frac{1}{6} + \frac{1}{6} + \frac{1}{6}$



4) $\frac{1}{8} + \frac{1}{8} + \frac{1}{8} + \frac{1}{8}$




5) $\frac{1}{4} + \frac{1}{4}$




6) $\frac{1}{5} + \frac{1}{5} + \frac{1}{5}$



7) $\frac{1}{8} + \frac{1}{8} + \frac{1}{8} + \frac{1}{8} + \frac{1}{8}$



8) $\frac{1}{3} + \frac{1}{3}$



9) $\frac{1}{5} + \frac{1}{5}$



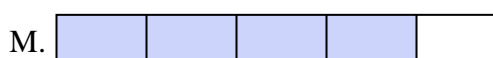
10) $\frac{1}{12} + \frac{1}{12}$



11) $\frac{1}{8} + \frac{1}{8}$




12) $\frac{1}{10} + \frac{1}{10} + \frac{1}{10}$




13) $\frac{1}{4} + \frac{1}{4} + \frac{1}{4}$



14) $\frac{1}{12} + \frac{1}{12} + \frac{1}{12} + \frac{1}{12} + \frac{1}{12}$



15) $\frac{1}{6} + \frac{1}{6} + \frac{1}{6} + \frac{1}{6} + \frac{1}{6}$



Respuestas

Ej. **H**

1. **G**

2. **M**

3. **J**

4. **O**

5. **L**

6. **P**

7. **C**

8. **F**

9. **K**

10. **D**

11. **I**

12. **B**

13. **N**

14. **A**

15. **E**



Iguala cada ecuación para responder y escribe la respuesta.

Respuestas

Ej) $\frac{1}{4} + \frac{1}{4}$

Ej. I

1) $\frac{1}{10} + \frac{1}{10} + \frac{1}{10} + \frac{1}{10} + \frac{1}{10} + \frac{1}{10} + \frac{1}{10}$



1. _____

2) $\frac{1}{5} + \frac{1}{5}$



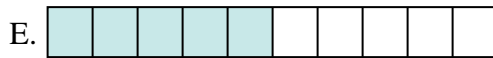
2. _____

3) $\frac{1}{5} + \frac{1}{5} + \frac{1}{5}$




3. _____

4) $\frac{1}{8} + \frac{1}{8}$



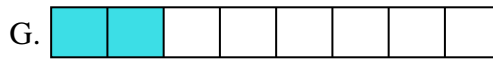
4. _____

5) $\frac{1}{10} + \frac{1}{10} + \frac{1}{10} + \frac{1}{10} + \frac{1}{10}$




5. _____

6) $\frac{1}{3} + \frac{1}{3}$




6. _____

7) $\frac{1}{10} + \frac{1}{10} + \frac{1}{10} + \frac{1}{10}$



7. _____

8) $\frac{1}{4} + \frac{1}{4} + \frac{1}{4}$




8. _____

9) $\frac{1}{12} + \frac{1}{12}$




9. _____

10) $\frac{1}{8} + \frac{1}{8} + \frac{1}{8} + \frac{1}{8} + \frac{1}{8} + \frac{1}{8}$




10. _____

11) $\frac{1}{12} + \frac{1}{12} + \frac{1}{12} + \frac{1}{12}$



11. _____

12) $\frac{1}{6} + \frac{1}{6} + \frac{1}{6}$




12. _____

13) $\frac{1}{5} + \frac{1}{5} + \frac{1}{5} + \frac{1}{5}$




13. _____

14) $\frac{1}{8} + \frac{1}{8} + \frac{1}{8} + \frac{1}{8}$



14. _____

15) $\frac{1}{10} + \frac{1}{10} + \frac{1}{10}$



15. _____



Iguala cada ecuación para responder y escribe la respuesta.


Ej) $\frac{1}{4} + \frac{1}{4}$



1) $\frac{1}{10} + \frac{1}{10} + \frac{1}{10} + \frac{1}{10} + \frac{1}{10} + \frac{1}{10} + \frac{1}{10}$



2) $\frac{1}{5} + \frac{1}{5}$




3) $\frac{1}{5} + \frac{1}{5} + \frac{1}{5}$



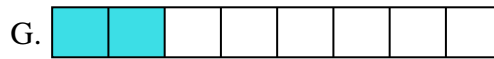
4) $\frac{1}{8} + \frac{1}{8}$




5) $\frac{1}{10} + \frac{1}{10} + \frac{1}{10} + \frac{1}{10} + \frac{1}{10}$




6) $\frac{1}{3} + \frac{1}{3}$



7) $\frac{1}{10} + \frac{1}{10} + \frac{1}{10} + \frac{1}{10}$




8) $\frac{1}{4} + \frac{1}{4} + \frac{1}{4}$



9) $\frac{1}{12} + \frac{1}{12}$




10) $\frac{1}{8} + \frac{1}{8} + \frac{1}{8} + \frac{1}{8} + \frac{1}{8} + \frac{1}{8}$



11) $\frac{1}{12} + \frac{1}{12} + \frac{1}{12} + \frac{1}{12}$



12) $\frac{1}{6} + \frac{1}{6} + \frac{1}{6}$




13) $\frac{1}{5} + \frac{1}{5} + \frac{1}{5} + \frac{1}{5}$



14) $\frac{1}{8} + \frac{1}{8} + \frac{1}{8} + \frac{1}{8}$



15) $\frac{1}{10} + \frac{1}{10} + \frac{1}{10}$

**Respuestas**Ej. **I** 1. **L** 2. **K** 3. **M** 4. **G** 5. **E** 6. **N** 7. **J** 8. **A** 9. **D** 10. **C** 11. **H** 12. **B** 13. **P** 14. **O** 15. **F**



Iguala cada ecuación para responder y escribe la respuesta.

Respuestas


Ej) $\frac{1}{12} + \frac{1}{12} + \frac{1}{12}$

Ej. **N**

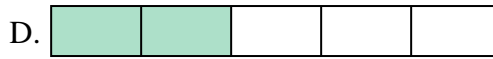
1) $\frac{1}{6} + \frac{1}{6} + \frac{1}{6} + \frac{1}{6} + \frac{1}{6}$

1.

2) $\frac{1}{8} + \frac{1}{8} + \frac{1}{8} + \frac{1}{8} + \frac{1}{8}$

2.


3) $\frac{1}{5} + \frac{1}{5}$

3.

4) $\frac{1}{3} + \frac{1}{3}$

4.

5) $\frac{1}{10} + \frac{1}{10} + \frac{1}{10} + \frac{1}{10} + \frac{1}{10} + \frac{1}{10} + \frac{1}{10}$

5.


6) $\frac{1}{5} + \frac{1}{5} + \frac{1}{5} + \frac{1}{5}$

6.

7) $\frac{1}{4} + \frac{1}{4}$

7.


8) $\frac{1}{6} + \frac{1}{6}$

8.

9) $\frac{1}{10} + \frac{1}{10} + \frac{1}{10} + \frac{1}{10} + \frac{1}{10}$

9.

10) $\frac{1}{6} + \frac{1}{6} + \frac{1}{6}$

10.

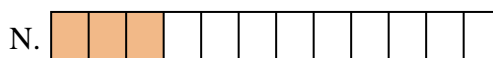
11) $\frac{1}{8} + \frac{1}{8} + \frac{1}{8}$

11.


12) $\frac{1}{12} + \frac{1}{12} + \frac{1}{12} + \frac{1}{12}$

12.


13) $\frac{1}{6} + \frac{1}{6} + \frac{1}{6} + \frac{1}{6}$

13.

14) $\frac{1}{10} + \frac{1}{10}$

14.

15) $\frac{1}{12} + \frac{1}{12} + \frac{1}{12} + \frac{1}{12} + \frac{1}{12} + \frac{1}{12} + \frac{1}{12}$

15.



Iguala cada ecuación para responder y escribe la respuesta.


Ej) $\frac{1}{12} + \frac{1}{12} + \frac{1}{12}$



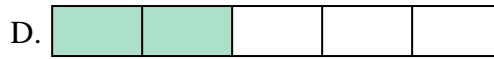
1) $\frac{1}{6} + \frac{1}{6} + \frac{1}{6} + \frac{1}{6} + \frac{1}{6}$



2) $\frac{1}{8} + \frac{1}{8} + \frac{1}{8} + \frac{1}{8} + \frac{1}{8}$




3) $\frac{1}{5} + \frac{1}{5}$



4) $\frac{1}{3} + \frac{1}{3}$



5) $\frac{1}{10} + \frac{1}{10} + \frac{1}{10} + \frac{1}{10} + \frac{1}{10} + \frac{1}{10} + \frac{1}{10}$




6) $\frac{1}{5} + \frac{1}{5} + \frac{1}{5} + \frac{1}{5}$



7) $\frac{1}{4} + \frac{1}{4}$



8) $\frac{1}{6} + \frac{1}{6}$



9) $\frac{1}{10} + \frac{1}{10} + \frac{1}{10} + \frac{1}{10} + \frac{1}{10}$



10) $\frac{1}{6} + \frac{1}{6} + \frac{1}{6}$



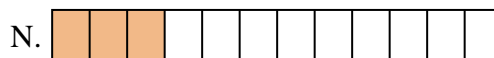
11) $\frac{1}{8} + \frac{1}{8} + \frac{1}{8}$




12) $\frac{1}{12} + \frac{1}{12} + \frac{1}{12} + \frac{1}{12}$




13) $\frac{1}{6} + \frac{1}{6} + \frac{1}{6} + \frac{1}{6}$



14) $\frac{1}{10} + \frac{1}{10}$



15) $\frac{1}{12} + \frac{1}{12} + \frac{1}{12} + \frac{1}{12} + \frac{1}{12} + \frac{1}{12} + \frac{1}{12}$


**Respuestas**Ej. N 1. I 2. C 3. D 4. M 5. F 6. A 7. E 8. B 9. P 10. G 11. L 12. J 13. K 14. O 15. H



Iguala cada ecuación para responder y escribe la respuesta.

Respuestas

Ej) $\frac{1}{4} + \frac{1}{4} + \frac{1}{4}$

Ej. **N**

1) $\frac{1}{8} + \frac{1}{8} + \frac{1}{8} + \frac{1}{8} + \frac{1}{8} + \frac{1}{8} + \frac{1}{8}$



1. _____

2) $\frac{1}{10} + \frac{1}{10} + \frac{1}{10}$



2. _____

3) $\frac{1}{6} + \frac{1}{6} + \frac{1}{6} + \frac{1}{6}$




3. _____

4) $\frac{1}{10} + \frac{1}{10} + \frac{1}{10} + \frac{1}{10} + \frac{1}{10} + \frac{1}{10} + \frac{1}{10}$



4. _____

5) $\frac{1}{8} + \frac{1}{8} + \frac{1}{8}$




5. _____

6) $\frac{1}{12} + \frac{1}{12} + \frac{1}{12} + \frac{1}{12} + \frac{1}{12} + \frac{1}{12}$



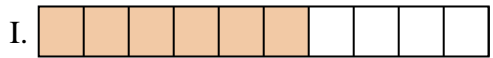
6. _____

7) $\frac{1}{5} + \frac{1}{5} + \frac{1}{5}$



7. _____

8) $\frac{1}{3} + \frac{1}{3}$



8. _____

9) $\frac{1}{5} + \frac{1}{5} + \frac{1}{5} + \frac{1}{5}$



9. _____

10) $\frac{1}{12} + \frac{1}{12} + \frac{1}{12}$




10. _____

11) $\frac{1}{10} + \frac{1}{10} + \frac{1}{10} + \frac{1}{10} + \frac{1}{10} + \frac{1}{10}$



11. _____

12) $\frac{1}{12} + \frac{1}{12}$



12. _____

13) $\frac{1}{10} + \frac{1}{10}$



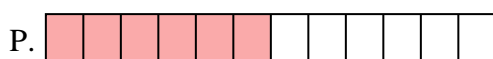
13. _____

14) $\frac{1}{6} + \frac{1}{6} + \frac{1}{6}$



14. _____

15) $\frac{1}{8} + \frac{1}{8} + \frac{1}{8} + \frac{1}{8} + \frac{1}{8} + \frac{1}{8}$




15. _____



Iguala cada ecuación para responder y escribe la respuesta.

Ej) $\frac{1}{4} + \frac{1}{4} + \frac{1}{4}$



1) $\frac{1}{8} + \frac{1}{8} + \frac{1}{8} + \frac{1}{8} + \frac{1}{8} + \frac{1}{8} + \frac{1}{8}$




2) $\frac{1}{10} + \frac{1}{10} + \frac{1}{10}$




3) $\frac{1}{6} + \frac{1}{6} + \frac{1}{6} + \frac{1}{6}$



4) $\frac{1}{10} + \frac{1}{10} + \frac{1}{10} + \frac{1}{10} + \frac{1}{10} + \frac{1}{10} + \frac{1}{10}$



5) $\frac{1}{8} + \frac{1}{8} + \frac{1}{8}$



6) $\frac{1}{12} + \frac{1}{12} + \frac{1}{12} + \frac{1}{12} + \frac{1}{12} + \frac{1}{12}$



7) $\frac{1}{5} + \frac{1}{5} + \frac{1}{5}$



8) $\frac{1}{3} + \frac{1}{3}$



9) $\frac{1}{5} + \frac{1}{5} + \frac{1}{5} + \frac{1}{5}$



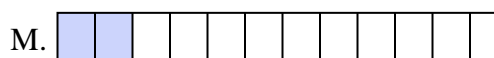
10) $\frac{1}{12} + \frac{1}{12} + \frac{1}{12}$



11) $\frac{1}{10} + \frac{1}{10} + \frac{1}{10} + \frac{1}{10} + \frac{1}{10} + \frac{1}{10}$



12) $\frac{1}{12} + \frac{1}{12}$



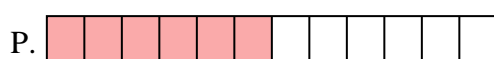
13) $\frac{1}{10} + \frac{1}{10}$



14) $\frac{1}{6} + \frac{1}{6} + \frac{1}{6}$



15) $\frac{1}{8} + \frac{1}{8} + \frac{1}{8} + \frac{1}{8} + \frac{1}{8} + \frac{1}{8}$

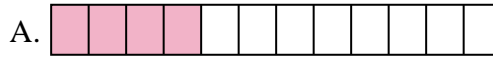
**Respuestas**Ej. N 1. J 2. G 3. E 4. K 5. O 6. P 7. H 8. C 9. F 10. D 11. I 12. M 13. B 14. L 15. A



Iguala cada ecuación para responder y escribe la respuesta.

Respuestas

Ej) $\frac{1}{10} + \frac{1}{10}$



Ej. **G**

1) $\frac{1}{5} + \frac{1}{5} + \frac{1}{5}$



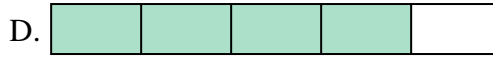
1. _____

2) $\frac{1}{10} + \frac{1}{10} + \frac{1}{10} + \frac{1}{10} + \frac{1}{10} + \frac{1}{10}$



2. _____

3) $\frac{1}{8} + \frac{1}{8} + \frac{1}{8}$




3. _____

4) $\frac{1}{6} + \frac{1}{6} + \frac{1}{6} + \frac{1}{6} + \frac{1}{6}$



4. _____

5) $\frac{1}{4} + \frac{1}{4}$



6. _____

6) $\frac{1}{3} + \frac{1}{3}$




7. _____

7) $\frac{1}{12} + \frac{1}{12} + \frac{1}{12} + \frac{1}{12} + \frac{1}{12}$



8. _____

8) $\frac{1}{10} + \frac{1}{10} + \frac{1}{10} + \frac{1}{10} + \frac{1}{10} + \frac{1}{10} + \frac{1}{10}$



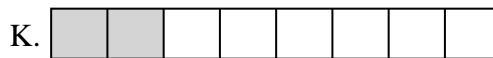
9. _____

9) $\frac{1}{8} + \frac{1}{8}$



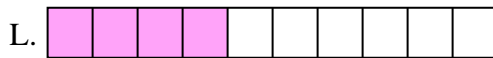
10. _____

10) $\frac{1}{10} + \frac{1}{10} + \frac{1}{10} + \frac{1}{10}$



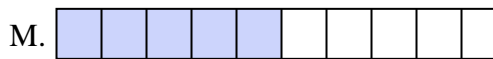
11. _____

11) $\frac{1}{10} + \frac{1}{10} + \frac{1}{10} + \frac{1}{10} + \frac{1}{10}$



12. _____

12) $\frac{1}{5} + \frac{1}{5} + \frac{1}{5} + \frac{1}{5}$




13. _____

13) $\frac{1}{4} + \frac{1}{4} + \frac{1}{4}$




14. _____

14) $\frac{1}{6} + \frac{1}{6} + \frac{1}{6} + \frac{1}{6}$



15. _____

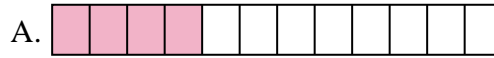
15) $\frac{1}{12} + \frac{1}{12} + \frac{1}{12} + \frac{1}{12}$



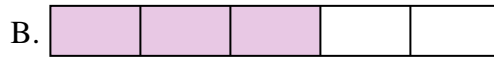


Iguala cada ecuación para responder y escribe la respuesta.

Ej) $\frac{1}{10} + \frac{1}{10}$



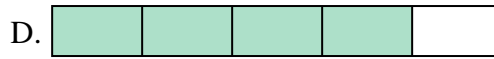
1) $\frac{1}{5} + \frac{1}{5} + \frac{1}{5}$




2) $\frac{1}{10} + \frac{1}{10} + \frac{1}{10} + \frac{1}{10} + \frac{1}{10} + \frac{1}{10}$




3) $\frac{1}{8} + \frac{1}{8} + \frac{1}{8}$



4) $\frac{1}{6} + \frac{1}{6} + \frac{1}{6} + \frac{1}{6} + \frac{1}{6}$



5) $\frac{1}{4} + \frac{1}{4}$




6) $\frac{1}{3} + \frac{1}{3}$



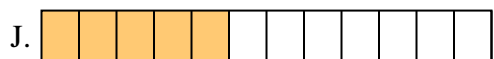
7) $\frac{1}{12} + \frac{1}{12} + \frac{1}{12} + \frac{1}{12} + \frac{1}{12}$




8) $\frac{1}{10} + \frac{1}{10} + \frac{1}{10} + \frac{1}{10} + \frac{1}{10} + \frac{1}{10} + \frac{1}{10}$



9) $\frac{1}{8} + \frac{1}{8}$




10) $\frac{1}{10} + \frac{1}{10} + \frac{1}{10} + \frac{1}{10}$




11) $\frac{1}{10} + \frac{1}{10} + \frac{1}{10} + \frac{1}{10} + \frac{1}{10}$




12) $\frac{1}{5} + \frac{1}{5} + \frac{1}{5} + \frac{1}{5}$




13) $\frac{1}{4} + \frac{1}{4} + \frac{1}{4}$



14) $\frac{1}{6} + \frac{1}{6} + \frac{1}{6} + \frac{1}{6}$



15) $\frac{1}{12} + \frac{1}{12} + \frac{1}{12} + \frac{1}{12}$

**Respuestas**Ej. **G** 1. **B** 2. **E** 3. **N** 4. **I** 5. **C** 6. **H** 7. **J** 8. **O** 9. **K** 10. **L** 11. **M** 12. **D** 13. **F** 14. **P** 15. **A**



Iguala cada ecuación para responder y escribe la respuesta.

Respuestas

Ej) $\frac{1}{5} + \frac{1}{5}$



Ej. **E** _____

1) $\frac{1}{10} + \frac{1}{10} + \frac{1}{10} + \frac{1}{10} + \frac{1}{10} + \frac{1}{10} + \frac{1}{10}$



1. _____

2) $\frac{1}{12} + \frac{1}{12} + \frac{1}{12} + \frac{1}{12}$



2. _____

3) $\frac{1}{6} + \frac{1}{6}$




3. _____

4) $\frac{1}{8} + \frac{1}{8} + \frac{1}{8} + \frac{1}{8} + \frac{1}{8} + \frac{1}{8} + \frac{1}{8}$



4. _____

5) $\frac{1}{10} + \frac{1}{10} + \frac{1}{10} + \frac{1}{10} + \frac{1}{10} + \frac{1}{10}$



5. _____

6) $\frac{1}{5} + \frac{1}{5} + \frac{1}{5} + \frac{1}{5}$




6. _____

7) $\frac{1}{10} + \frac{1}{10} + \frac{1}{10} + \frac{1}{10}$



7. _____

8) $\frac{1}{4} + \frac{1}{4}$




8. _____

9) $\frac{1}{3} + \frac{1}{3}$



9. _____

10) $\frac{1}{8} + \frac{1}{8} + \frac{1}{8} + \frac{1}{8} + \frac{1}{8}$



10. _____

11) $\frac{1}{4} + \frac{1}{4} + \frac{1}{4}$



11. _____

12) $\frac{1}{10} + \frac{1}{10} + \frac{1}{10} + \frac{1}{10} + \frac{1}{10}$



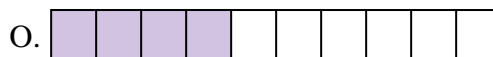
12. _____

13) $\frac{1}{8} + \frac{1}{8} + \frac{1}{8}$




13. _____

14) $\frac{1}{8} + \frac{1}{8} + \frac{1}{8} + \frac{1}{8} + \frac{1}{8} + \frac{1}{8}$



14. _____

15) $\frac{1}{8} + \frac{1}{8} + \frac{1}{8} + \frac{1}{8}$





Iguala cada ecuación para responder y escribe la respuesta.

Ej) $\frac{1}{5} + \frac{1}{5}$



1) $\frac{1}{10} + \frac{1}{10} + \frac{1}{10} + \frac{1}{10} + \frac{1}{10} + \frac{1}{10} + \frac{1}{10}$



2) $\frac{1}{12} + \frac{1}{12} + \frac{1}{12} + \frac{1}{12}$




3) $\frac{1}{6} + \frac{1}{6}$



4) $\frac{1}{8} + \frac{1}{8} + \frac{1}{8} + \frac{1}{8} + \frac{1}{8} + \frac{1}{8} + \frac{1}{8}$



5) $\frac{1}{10} + \frac{1}{10} + \frac{1}{10} + \frac{1}{10} + \frac{1}{10} + \frac{1}{10}$




6) $\frac{1}{5} + \frac{1}{5} + \frac{1}{5} + \frac{1}{5}$



7) $\frac{1}{10} + \frac{1}{10} + \frac{1}{10} + \frac{1}{10}$



8) $\frac{1}{4} + \frac{1}{4}$



9) $\frac{1}{3} + \frac{1}{3}$



10) $\frac{1}{8} + \frac{1}{8} + \frac{1}{8} + \frac{1}{8} + \frac{1}{8}$




11) $\frac{1}{4} + \frac{1}{4} + \frac{1}{4}$



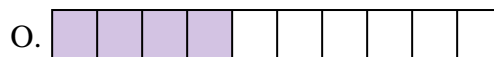
12) $\frac{1}{10} + \frac{1}{10} + \frac{1}{10} + \frac{1}{10} + \frac{1}{10}$




13) $\frac{1}{8} + \frac{1}{8} + \frac{1}{8}$



14) $\frac{1}{8} + \frac{1}{8} + \frac{1}{8} + \frac{1}{8} + \frac{1}{8} + \frac{1}{8}$



15) $\frac{1}{8} + \frac{1}{8} + \frac{1}{8} + \frac{1}{8}$


**Respuestas**Ej. E 1. K 2. D 3. B 4. G 5. P 6. A 7. O 8. M 9. J 10. H 11. L 12. C 13. F 14. N 15. I



Iguala cada ecuación para responder y escribe la respuesta.

Respuestas

Ej) $\frac{1}{8} + \frac{1}{8} + \frac{1}{8} + \frac{1}{8} + \frac{1}{8}$



Ej. A

1) $\frac{1}{4} + \frac{1}{4} + \frac{1}{4}$



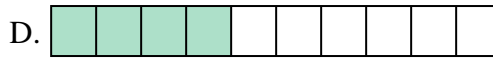
1. _____

2) $\frac{1}{10} + \frac{1}{10} + \frac{1}{10} + \frac{1}{10} + \frac{1}{10} + \frac{1}{10}$



2. _____

3) $\frac{1}{6} + \frac{1}{6}$




3. _____

4) $\frac{1}{8} + \frac{1}{8} + \frac{1}{8} + \frac{1}{8} + \frac{1}{8} + \frac{1}{8} + \frac{1}{8}$



4. _____

5) $\frac{1}{6} + \frac{1}{6} + \frac{1}{6} + \frac{1}{6}$



5. _____

6) $\frac{1}{12} + \frac{1}{12} + \frac{1}{12} + \frac{1}{12} + \frac{1}{12}$



6. _____

7) $\frac{1}{8} + \frac{1}{8} + \frac{1}{8} + \frac{1}{8}$



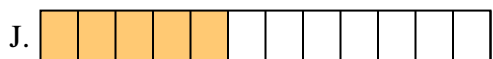
7. _____

8) $\frac{1}{3} + \frac{1}{3}$



8. _____

9) $\frac{1}{6} + \frac{1}{6} + \frac{1}{6} + \frac{1}{6} + \frac{1}{6}$




9. _____

10) $\frac{1}{12} + \frac{1}{12} + \frac{1}{12} + \frac{1}{12}$



10. _____

11) $\frac{1}{10} + \frac{1}{10} + \frac{1}{10} + \frac{1}{10}$




11. _____

12) $\frac{1}{5} + \frac{1}{5} + \frac{1}{5} + \frac{1}{5}$




12. _____

13) $\frac{1}{4} + \frac{1}{4}$




13. _____

14) $\frac{1}{8} + \frac{1}{8} + \frac{1}{8} + \frac{1}{8} + \frac{1}{8} + \frac{1}{8}$



14. _____

15) $\frac{1}{5} + \frac{1}{5}$



15. _____



Iguala cada ecuación para responder y escribe la respuesta.


Ej) $\frac{1}{8} + \frac{1}{8} + \frac{1}{8} + \frac{1}{8} + \frac{1}{8}$



1) $\frac{1}{4} + \frac{1}{4} + \frac{1}{4}$



2) $\frac{1}{10} + \frac{1}{10} + \frac{1}{10} + \frac{1}{10} + \frac{1}{10} + \frac{1}{10}$




3) $\frac{1}{6} + \frac{1}{6}$



4) $\frac{1}{8} + \frac{1}{8} + \frac{1}{8} + \frac{1}{8} + \frac{1}{8} + \frac{1}{8} + \frac{1}{8}$



5) $\frac{1}{6} + \frac{1}{6} + \frac{1}{6} + \frac{1}{6}$



6) $\frac{1}{12} + \frac{1}{12} + \frac{1}{12} + \frac{1}{12} + \frac{1}{12}$



7) $\frac{1}{8} + \frac{1}{8} + \frac{1}{8} + \frac{1}{8}$



8) $\frac{1}{3} + \frac{1}{3}$



9) $\frac{1}{6} + \frac{1}{6} + \frac{1}{6} + \frac{1}{6} + \frac{1}{6}$



10) $\frac{1}{12} + \frac{1}{12} + \frac{1}{12} + \frac{1}{12}$




11) $\frac{1}{10} + \frac{1}{10} + \frac{1}{10} + \frac{1}{10}$



12) $\frac{1}{5} + \frac{1}{5} + \frac{1}{5} + \frac{1}{5}$




13) $\frac{1}{4} + \frac{1}{4}$



14) $\frac{1}{8} + \frac{1}{8} + \frac{1}{8} + \frac{1}{8} + \frac{1}{8} + \frac{1}{8}$



15) $\frac{1}{5} + \frac{1}{5}$

**Respuestas**Ej. **A** 1. **F** 2. **P** 3. **N** 4. **O** 5. **H** 6. **J** 7. **C** 8. **K** 9. **L** 10. **I** 11. **D** 12. **B** 13. **M** 14. **G** 15. **E**



Iguala cada ecuación para responder y escribe la respuesta.

Respuestas

Ej) $\frac{1}{8} + \frac{1}{8} + \frac{1}{8} + \frac{1}{8} + \frac{1}{8}$



Ej. **J**

1) $\frac{1}{5} + \frac{1}{5} + \frac{1}{5}$



1. _____

2) $\frac{1}{4} + \frac{1}{4}$



2. _____

3) $\frac{1}{5} + \frac{1}{5} + \frac{1}{5} + \frac{1}{5}$



3. _____

4) $\frac{1}{8} + \frac{1}{8}$



4. _____

5) $\frac{1}{4} + \frac{1}{4} + \frac{1}{4}$




5. _____

6) $\frac{1}{5} + \frac{1}{5}$




6. _____

7) $\frac{1}{8} + \frac{1}{8} + \frac{1}{8} + \frac{1}{8} + \frac{1}{8} + \frac{1}{8}$



7. _____

8) $\frac{1}{6} + \frac{1}{6} + \frac{1}{6} + \frac{1}{6} + \frac{1}{6}$



8. _____

9) $\frac{1}{6} + \frac{1}{6} + \frac{1}{6} + \frac{1}{6}$




9. _____

10) $\frac{1}{12} + \frac{1}{12} + \frac{1}{12} + \frac{1}{12} + \frac{1}{12} + \frac{1}{12}$



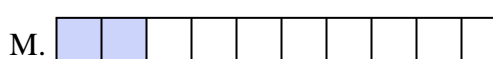
10. _____

11) $\frac{1}{10} + \frac{1}{10} + \frac{1}{10}$



11. _____

12) $\frac{1}{10} + \frac{1}{10} + \frac{1}{10} + \frac{1}{10} + \frac{1}{10}$



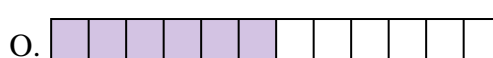
12. _____

13) $\frac{1}{3} + \frac{1}{3}$



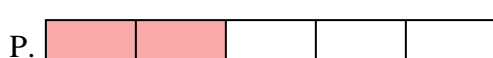
13. _____

14) $\frac{1}{8} + \frac{1}{8} + \frac{1}{8} + \frac{1}{8}$



14. _____

15) $\frac{1}{10} + \frac{1}{10}$



15. _____



Iguala cada ecuación para responder y escribe la respuesta.


Ej) $\frac{1}{8} + \frac{1}{8} + \frac{1}{8} + \frac{1}{8} + \frac{1}{8}$



1) $\frac{1}{5} + \frac{1}{5} + \frac{1}{5}$




2) $\frac{1}{4} + \frac{1}{4}$



3) $\frac{1}{5} + \frac{1}{5} + \frac{1}{5} + \frac{1}{5}$



4) $\frac{1}{8} + \frac{1}{8}$



5) $\frac{1}{4} + \frac{1}{4} + \frac{1}{4}$




6) $\frac{1}{5} + \frac{1}{5}$



7) $\frac{1}{8} + \frac{1}{8} + \frac{1}{8} + \frac{1}{8} + \frac{1}{8} + \frac{1}{8}$




8) $\frac{1}{6} + \frac{1}{6} + \frac{1}{6} + \frac{1}{6} + \frac{1}{6}$




9) $\frac{1}{6} + \frac{1}{6} + \frac{1}{6} + \frac{1}{6}$




10) $\frac{1}{12} + \frac{1}{12} + \frac{1}{12} + \frac{1}{12} + \frac{1}{12} + \frac{1}{12}$



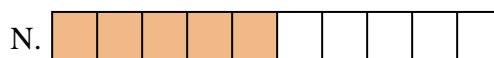
11) $\frac{1}{10} + \frac{1}{10} + \frac{1}{10}$



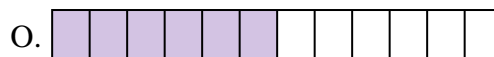
12) $\frac{1}{10} + \frac{1}{10} + \frac{1}{10} + \frac{1}{10} + \frac{1}{10}$



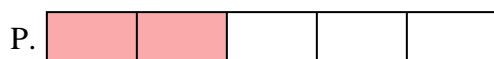
13) $\frac{1}{3} + \frac{1}{3}$



14) $\frac{1}{8} + \frac{1}{8} + \frac{1}{8} + \frac{1}{8}$



15) $\frac{1}{10} + \frac{1}{10}$

**Respuestas**Ej. **J** 1. **L** 2. **D** 3. **H** 4. **K** 5. **E** 6. **P** 7. **I** 8. **G** 9. **A** 10. **O** 11. **B** 12. **N** 13. **F** 14. **C** 15. **M**