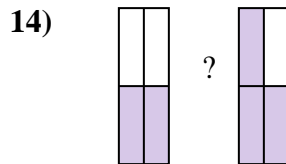
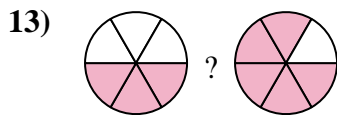
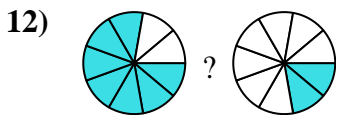
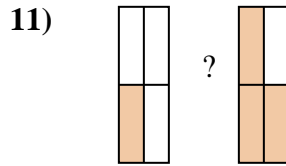
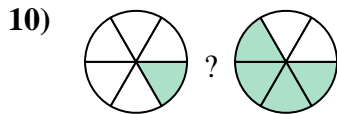
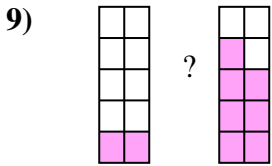
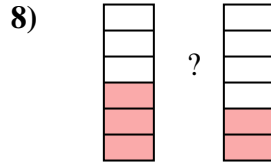

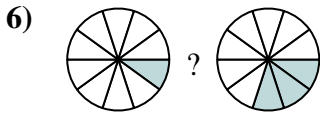
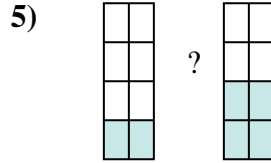
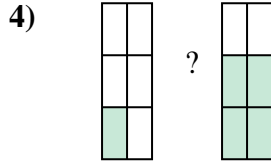
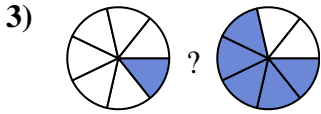
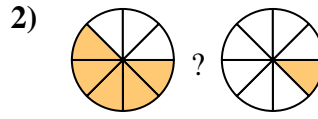

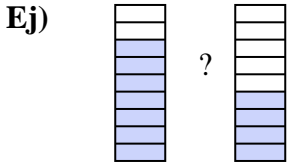




Compara el tamaño de las fracciones usando $<$, $>$ o $=$.



Respuestas

Ej. $\frac{5}{8} > \frac{3}{8}$

1. _____

2. _____

3. _____

4. _____

5. _____

6. _____

7. _____

8. _____

9. _____

10. _____

11. _____

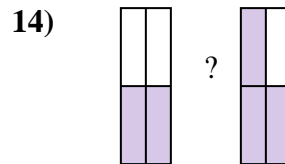
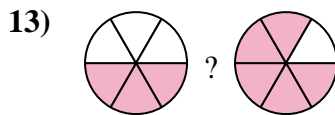
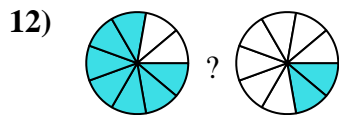
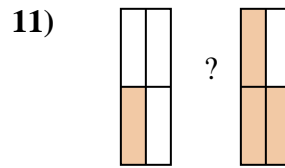
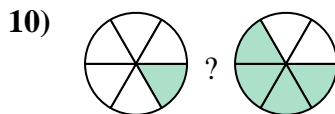
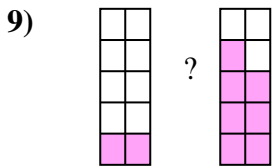
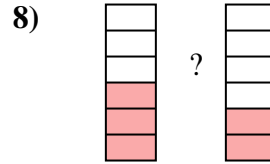

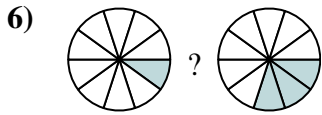
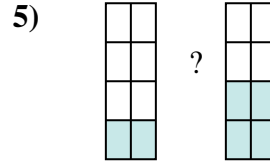
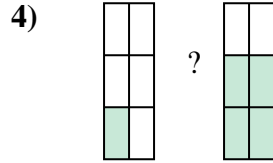
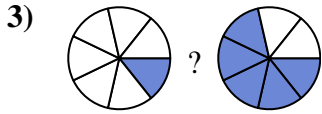
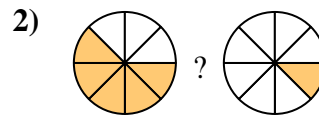

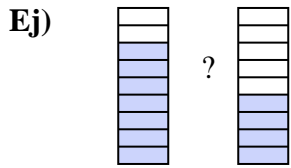
12. _____

13. _____

14. _____



Compara el tamaño de las fracciones usando $<$, $>$ o $=$.



Respuestas

Ej. $\frac{7}{9} > \frac{4}{9}$

1. $\frac{5}{9} < \frac{8}{9}$

2. $\frac{5}{8} > \frac{1}{8}$

3. $\frac{1}{7} < \frac{5}{7}$

4. $\frac{1}{6} < \frac{4}{6}$

5. $\frac{2}{8} < \frac{4}{8}$

6. $\frac{1}{10} < \frac{3}{10}$

7. $\frac{4}{5} > \frac{3}{5}$

8. $\frac{3}{6} > \frac{2}{6}$

9. $\frac{2}{10} < \frac{7}{10}$

10. $\frac{1}{6} < \frac{4}{6}$

11. $\frac{1}{4} < \frac{3}{4}$

12. $\frac{7}{9} > \frac{2}{9}$

13. $\frac{3}{6} < \frac{5}{6}$

14. $\frac{2}{4} < \frac{3}{4}$