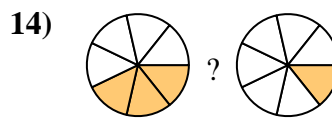
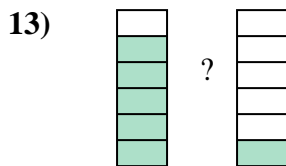
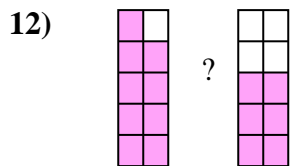
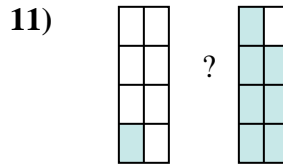
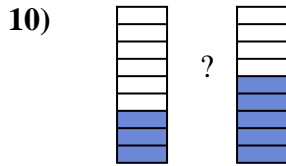
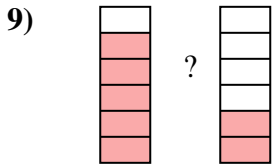
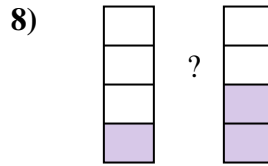
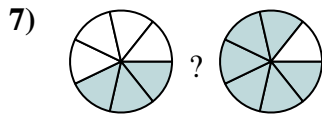
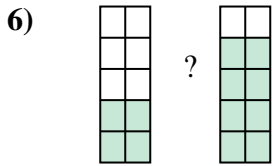
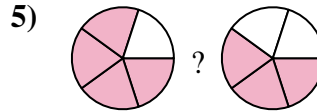
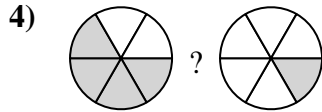
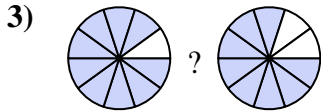
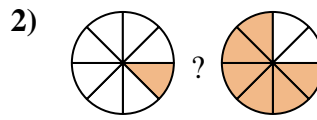

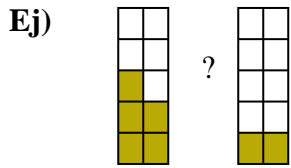




Compara el tamaño de las fracciones usando  $<$ ,  $>$  o  $=$ .



**Respuestas**

Ej.  $\frac{5}{10} > \frac{2}{10}$

1. \_\_\_\_\_

2. \_\_\_\_\_

3. \_\_\_\_\_

4. \_\_\_\_\_

5. \_\_\_\_\_

6. \_\_\_\_\_

7. \_\_\_\_\_

8. \_\_\_\_\_

9. \_\_\_\_\_

10. \_\_\_\_\_

11. \_\_\_\_\_

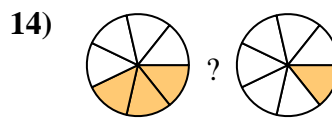
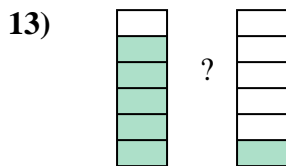
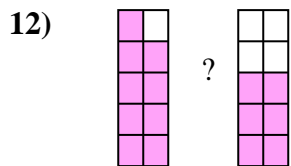
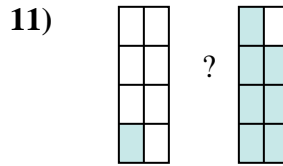
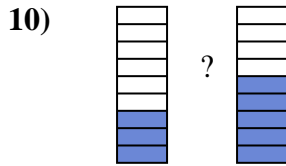
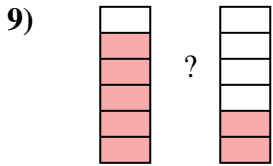
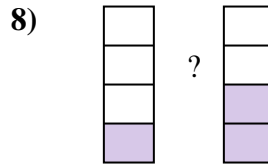
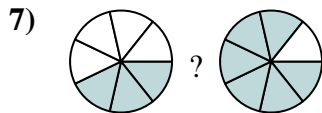
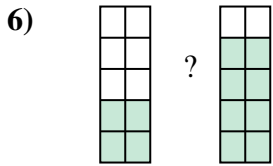
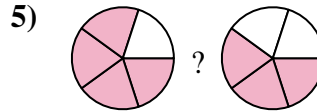
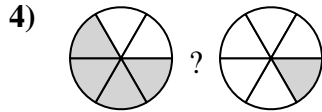
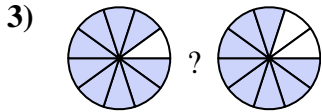
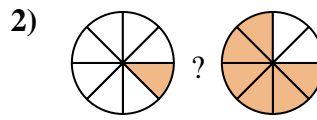

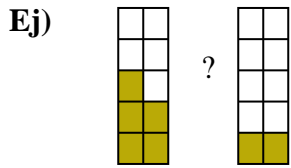
12. \_\_\_\_\_

13. \_\_\_\_\_

14. \_\_\_\_\_



Compara el tamaño de las fracciones usando  $<$ ,  $>$  o  $=$ .



**Respuestas**

Ej.  $\frac{5}{10} > \frac{2}{10}$

1.  $\frac{2}{10} < \frac{7}{10}$

2.  $\frac{1}{8} < \frac{6}{8}$

3.  $\frac{9}{10} > \frac{8}{10}$

4.  $\frac{4}{6} > \frac{1}{6}$

5.  $\frac{4}{5} > \frac{3}{5}$

6.  $\frac{4}{10} < \frac{8}{10}$

7.  $\frac{3}{7} < \frac{6}{7}$

8.  $\frac{1}{4} < \frac{2}{4}$

9.  $\frac{5}{6} > \frac{2}{6}$

10.  $\frac{3}{9} < \frac{5}{9}$

11.  $\frac{1}{8} < \frac{7}{8}$

12.  $\frac{9}{10} > \frac{6}{10}$

13.  $\frac{5}{6} > \frac{1}{6}$

14.  $\frac{3}{7} > \frac{1}{7}$