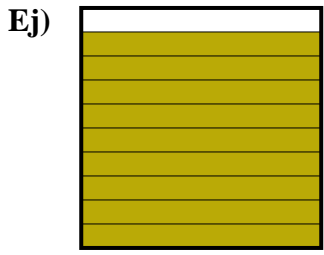





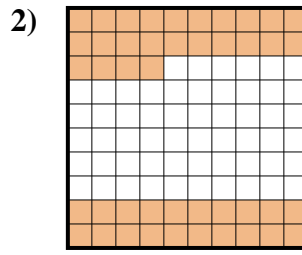
Determina el valor escrito como fracción, decimal y porcentaje.



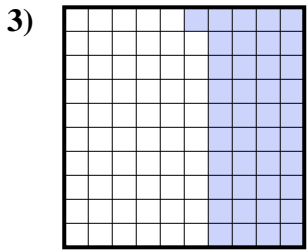
fracción $\frac{9}{10}$
 decimal 0.9
 porcentaje 90



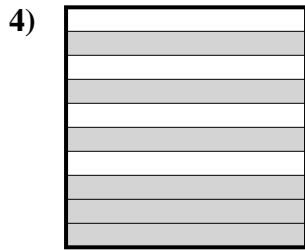
fracción _____
 decimal _____
 porcentaje _____



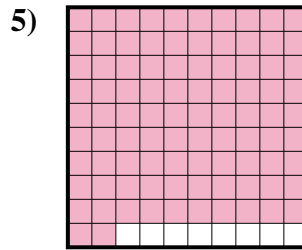
fracción _____
 decimal _____
 porcentaje _____



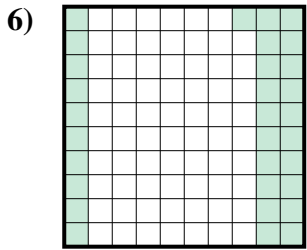
fracción _____
 decimal _____
 porcentaje _____



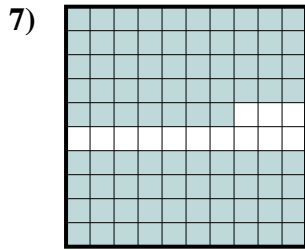
fracción _____
 decimal _____
 porcentaje _____



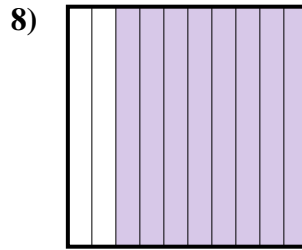
fracción _____
 decimal _____
 porcentaje _____



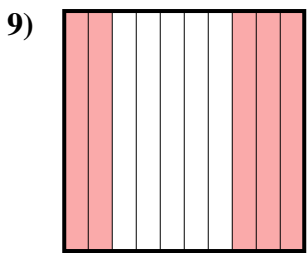
fracción _____
 decimal _____
 porcentaje _____



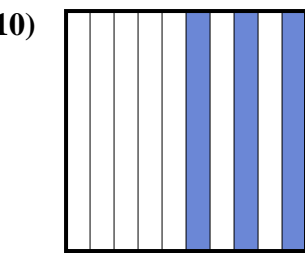
fracción _____
 decimal _____
 porcentaje _____



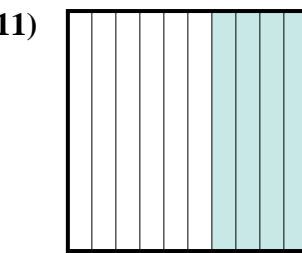
fracción _____
 decimal _____
 porcentaje _____



fracción _____
 decimal _____
 porcentaje _____



fracción _____
 decimal _____
 porcentaje _____



fracción _____
 decimal _____
 porcentaje _____

Respuestas

Ej.	$\frac{9}{10}$	0.9	90%
1.	_____	_____	_____
2.	_____	_____	_____
3.	_____	_____	_____
4.	_____	_____	_____
5.	_____	_____	_____
6.	_____	_____	_____
7.	_____	_____	_____
8.	_____	_____	_____
9.	_____	_____	_____
10.	_____	_____	_____
11.	_____	_____	_____

