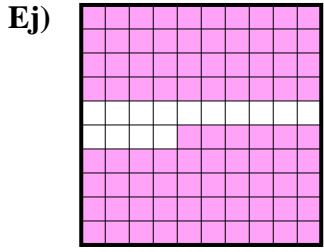
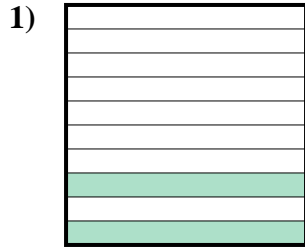




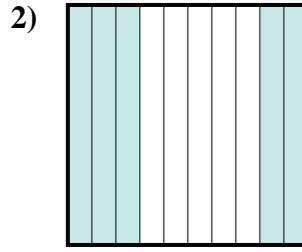
Determina el valor escrito como fracción, decimal y porcentaje.



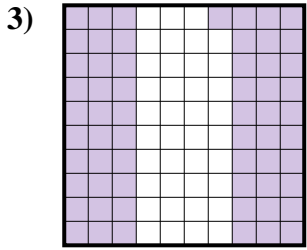
fracción $\frac{86}{100}$
 decimal 0.86
 porcentaje 86



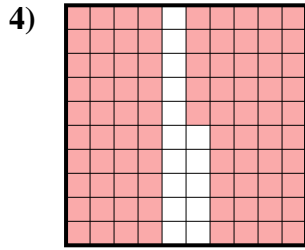
fracción _____
 decimal _____
 porcentaje _____



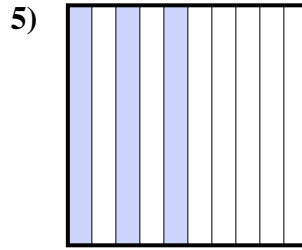
fracción _____
 decimal _____
 porcentaje _____



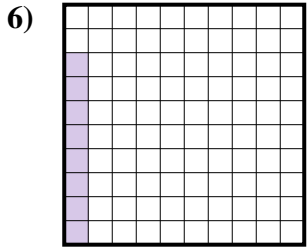
fracción _____
 decimal _____
 porcentaje _____



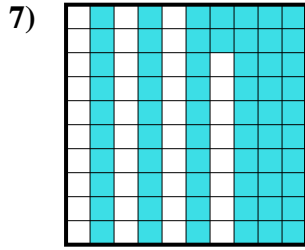
fracción _____
 decimal _____
 porcentaje _____



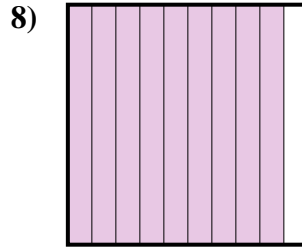
fracción _____
 decimal _____
 porcentaje _____



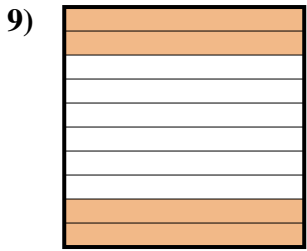
fracción _____
 decimal _____
 porcentaje _____



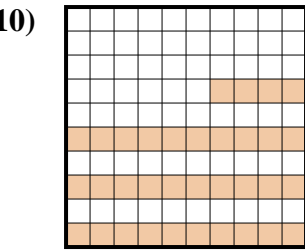
fracción _____
 decimal _____
 porcentaje _____



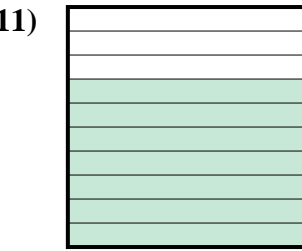
fracción _____
 decimal _____
 porcentaje _____



fracción _____
 decimal _____
 porcentaje _____



fracción _____
 decimal _____
 porcentaje _____



fracción _____
 decimal _____
 porcentaje _____

Respuestas

| | | | |
|-----|------------------|-------------|------------|
| Ej. | $\frac{86}{100}$ | 0.86 | 86% |
| 1. | _____ | _____ | _____ |
| 2. | _____ | _____ | _____ |
| 3. | _____ | _____ | _____ |
| 4. | _____ | _____ | _____ |
| 5. | _____ | _____ | _____ |
| 6. | _____ | _____ | _____ |
| 7. | _____ | _____ | _____ |
| 8. | _____ | _____ | _____ |
| 9. | _____ | _____ | _____ |
| 10. | _____ | _____ | _____ |
| 11. | _____ | _____ | _____ |

