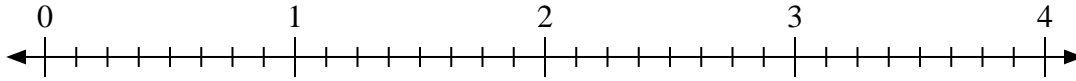


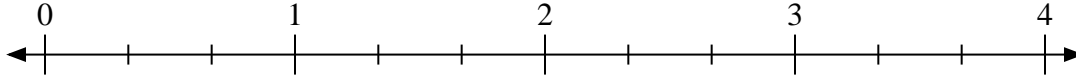


Usa la recta numérica para resolver.

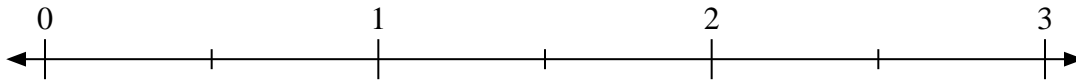
1) $2 \div \frac{1}{8}$



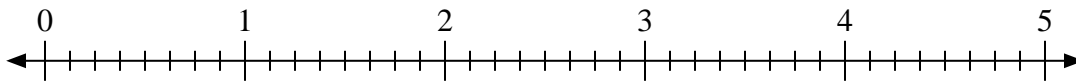
2) $2 \div \frac{2}{3}$



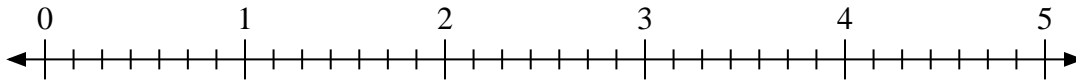
3) $2 \div \frac{1}{2}$



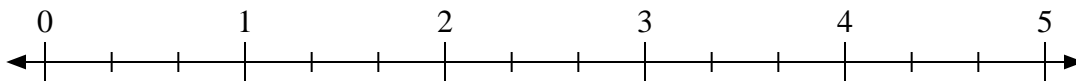
4) $3 \div \frac{5}{8}$



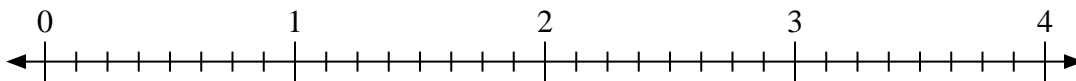
5) $2 \div \frac{6}{7}$



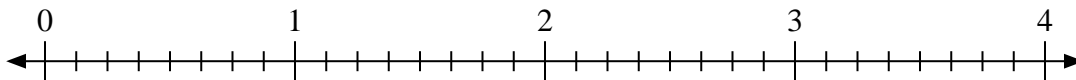
6) $4 \div \frac{1}{3}$



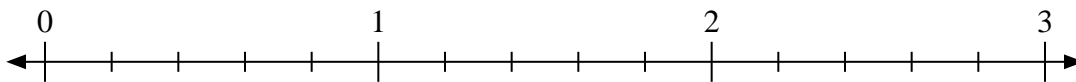
7) $2 \div \frac{3}{8}$



8) $2 \div \frac{2}{8}$



9) $2 \div \frac{3}{5}$



Respuestas

1. _____

2. _____

3. _____

4. _____

5. _____

6. _____

7. _____

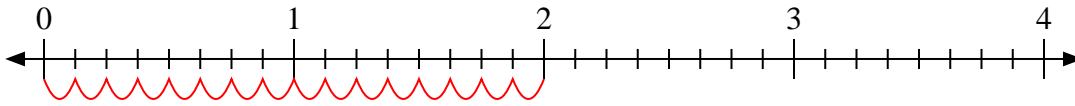
8. _____

9. _____

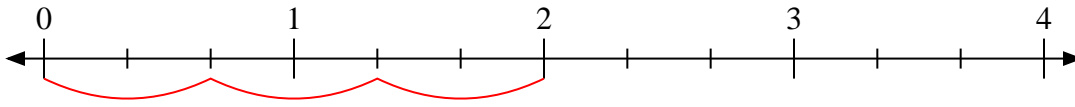


Usa la recta numérica para resolver.

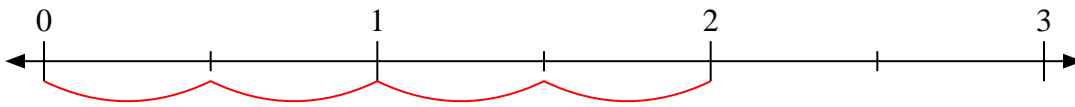
1) $2 \div \frac{1}{8}$



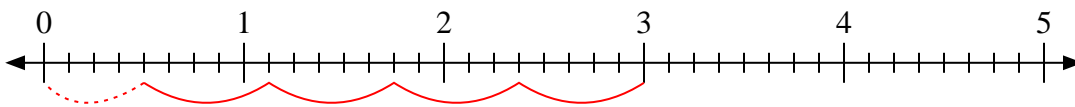
2) $2 \div \frac{2}{3}$



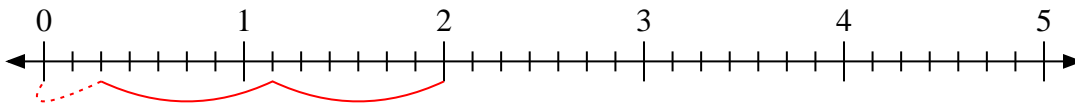
3) $2 \div \frac{1}{2}$



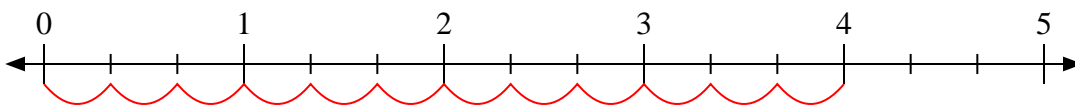
4) $3 \div \frac{5}{8}$



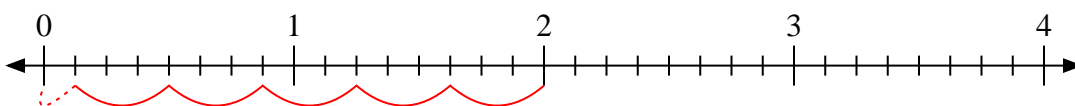
5) $2 \div \frac{6}{7}$



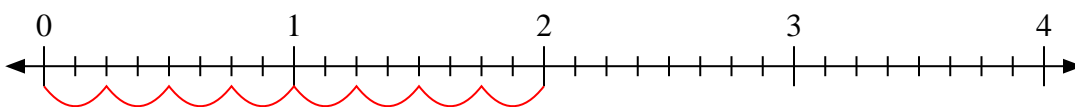
6) $4 \div \frac{1}{3}$



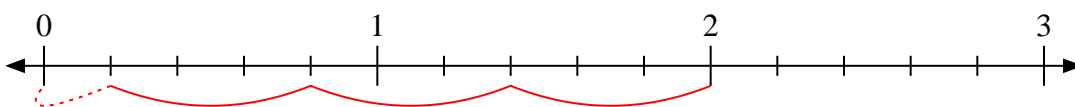
7) $2 \div \frac{3}{8}$



8) $2 \div \frac{2}{8}$



9) $2 \div \frac{3}{5}$



Respuestas

1. 16
2. 3
3. 4
4. $4 \frac{4}{5}$
5. $2 \frac{2}{6}$
6. 12
7. $5 \frac{1}{3}$
8. 8
9. $3 \frac{1}{3}$