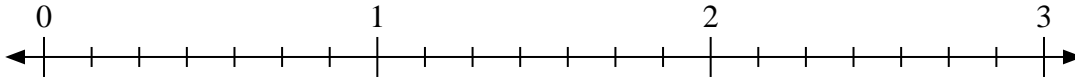


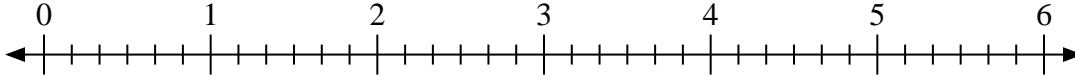


Usa la recta numérica para resolver.

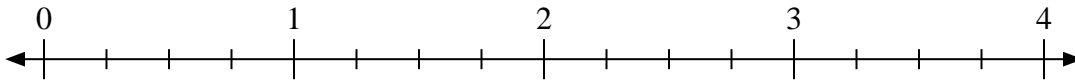
1) $2 \div \frac{3}{7}$



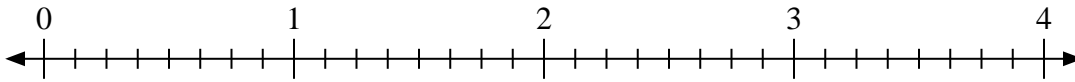
2) $6 \div \frac{3}{6}$



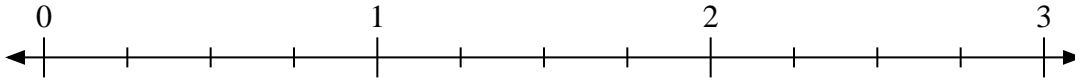
3) $2 \div \frac{1}{4}$



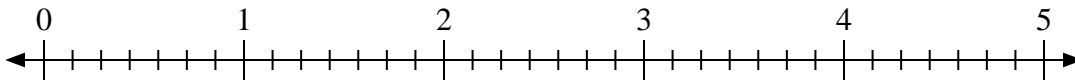
4) $2 \div \frac{2}{8}$



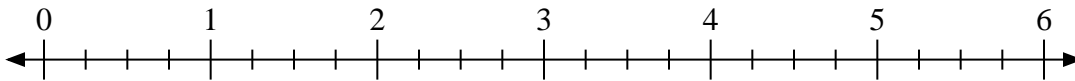
5) $3 \div \frac{2}{4}$



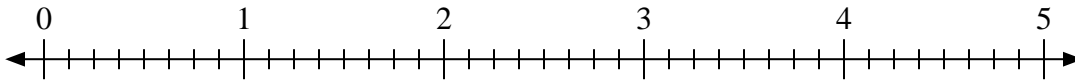
6) $5 \div \frac{4}{7}$



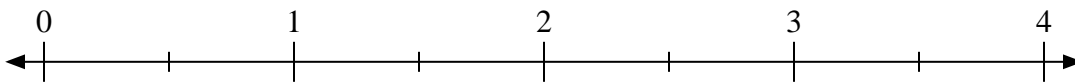
7) $6 \div \frac{1}{4}$



8) $5 \div \frac{5}{8}$



9) $3 \div \frac{1}{2}$



Respuestas

1. _____

2. _____

3. _____

4. _____

5. _____

6. _____

7. _____

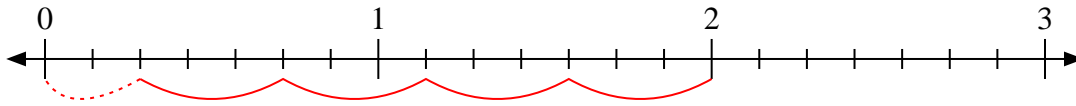
8. _____

9. _____

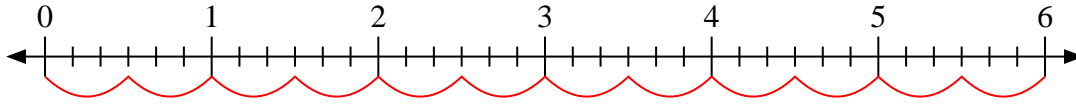


Usa la recta numérica para resolver.

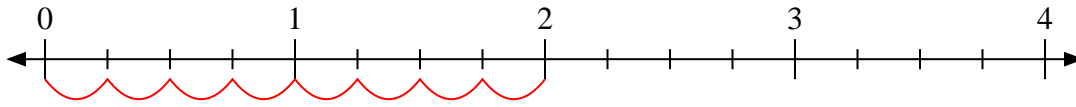
1) $2 \div \frac{3}{7}$



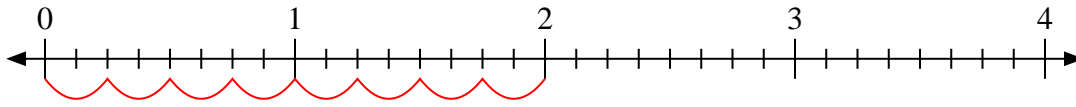
2) $6 \div \frac{3}{6}$



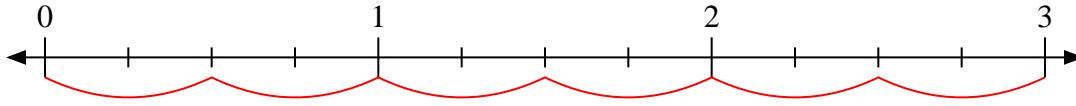
3) $2 \div \frac{1}{4}$



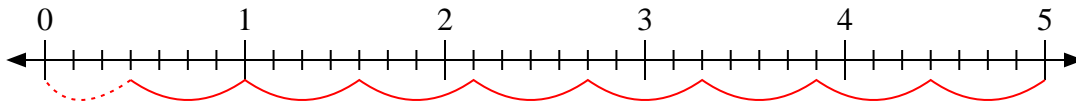
4) $2 \div \frac{2}{8}$



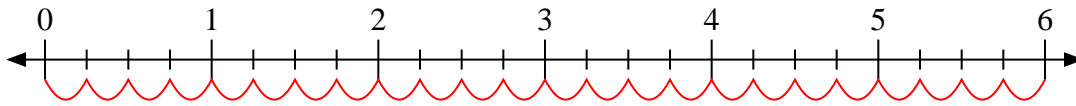
5) $3 \div \frac{2}{4}$



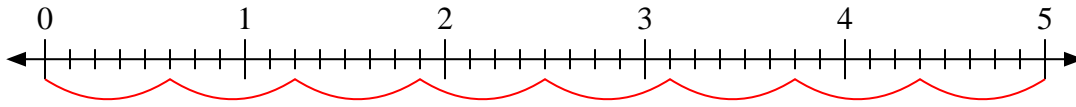
6) $5 \div \frac{4}{7}$



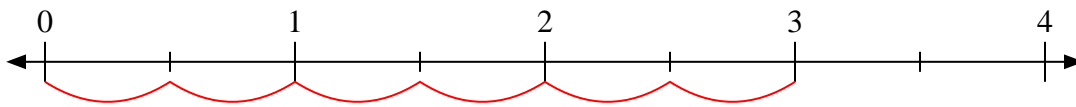
7) $6 \div \frac{1}{4}$



8) $5 \div \frac{5}{8}$



9) $3 \div \frac{1}{2}$



Respuestas

1. 4 ²/₃

2. 12

3. 8

4. 8

5. 6

6. 8 ³/₄

7. 24

8. 8

9. 6