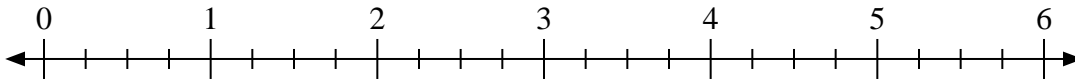


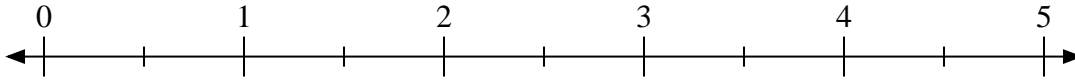


Usa la recta numérica para resolver.

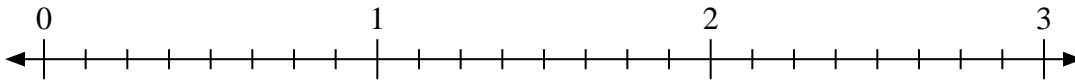
1) $6 \div \frac{3}{4}$



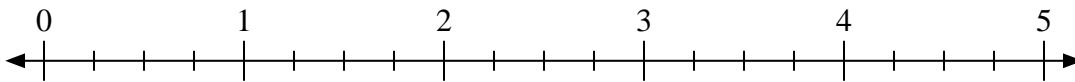
2) $5 \div \frac{1}{2}$



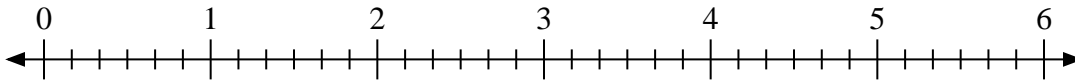
3) $3 \div \frac{6}{8}$



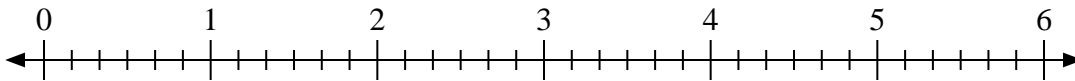
4) $3 \div \frac{3}{4}$



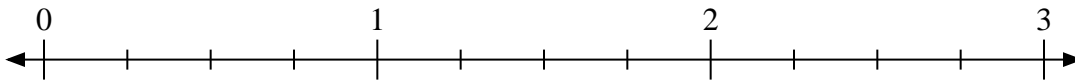
5) $6 \div \frac{3}{6}$




6) $5 \div \frac{1}{6}$



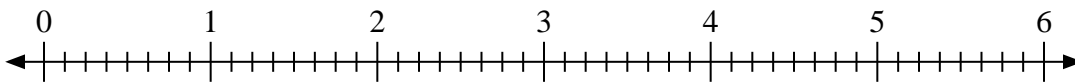
7) $3 \div \frac{1}{4}$



8) $3 \div \frac{2}{3}$



9) $3 \div \frac{3}{8}$



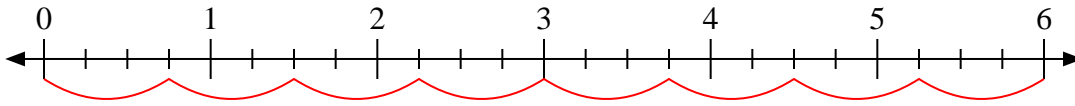
Respuestas

1. _____
2. _____
3. _____
4. _____
5. _____
6. _____
7. _____
8. _____
9. _____

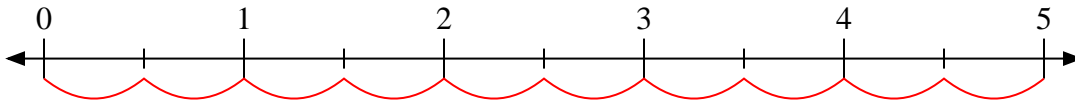


Usa la recta numérica para resolver.

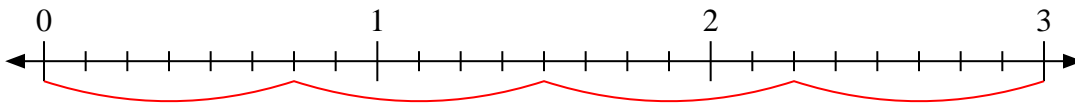
1) $6 \div \frac{3}{4}$



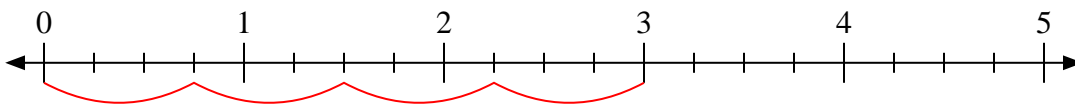
2) $5 \div \frac{1}{2}$



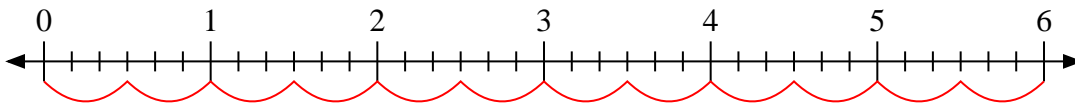
3) $3 \div \frac{6}{8}$



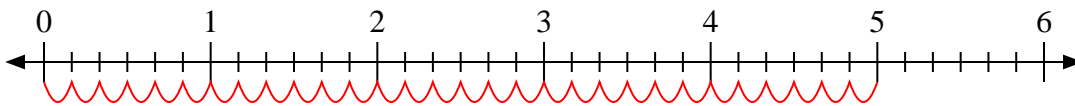
4) $3 \div \frac{3}{4}$



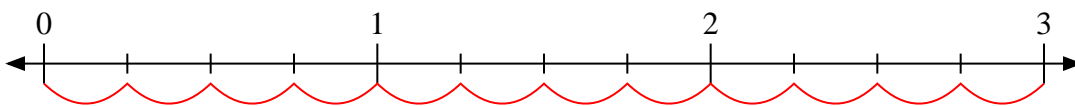
5) $6 \div \frac{3}{6}$



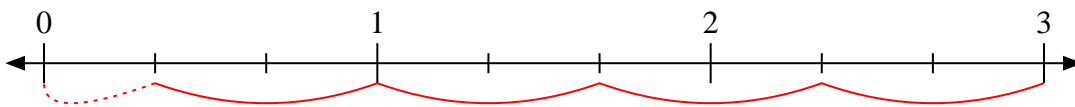
6) $5 \div \frac{1}{6}$



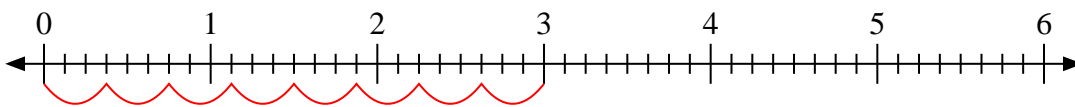
7) $3 \div \frac{1}{4}$



8) $3 \div \frac{2}{3}$



9) $3 \div \frac{3}{8}$



Respuestas

1. 8
2. 10
3. 4
4. 4
5. 12
6. 30
7. 12
8. 4 1/2
9. 8