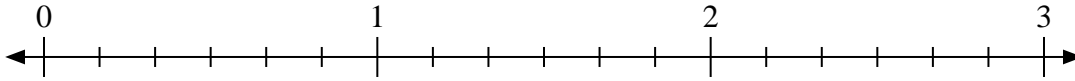


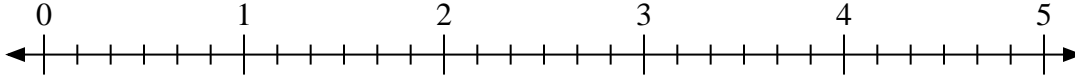


Usa la recta numérica para resolver.

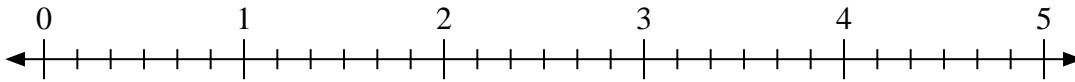
1)  $3 \div \frac{2}{6}$



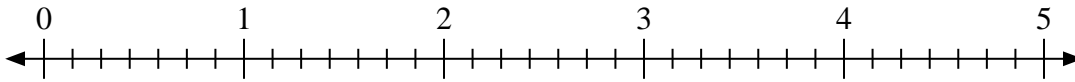
2)  $3 \div \frac{2}{6}$



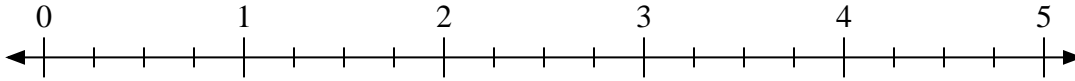
3)  $4 \div \frac{3}{6}$



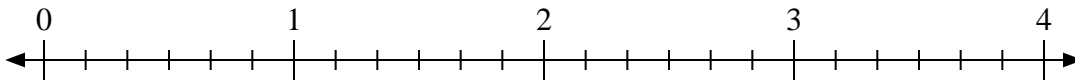
4)  $5 \div \frac{6}{7}$



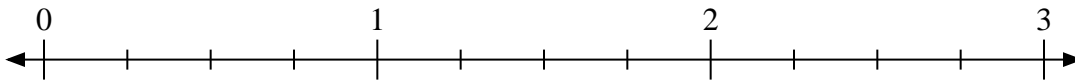
5)  $4 \div \frac{3}{4}$



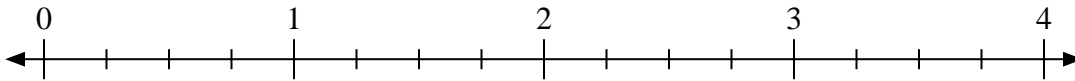
6)  $4 \div \frac{3}{6}$



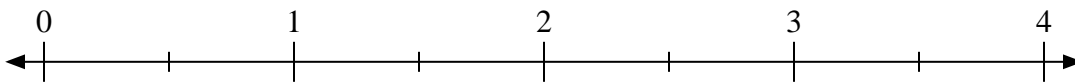
7)  $3 \div \frac{3}{4}$



8)  $3 \div \frac{3}{4}$



9)  $2 \div \frac{1}{2}$



**Respuestas**

1. \_\_\_\_\_

2. \_\_\_\_\_

3. \_\_\_\_\_

4. \_\_\_\_\_

5. \_\_\_\_\_

6. \_\_\_\_\_

7. \_\_\_\_\_

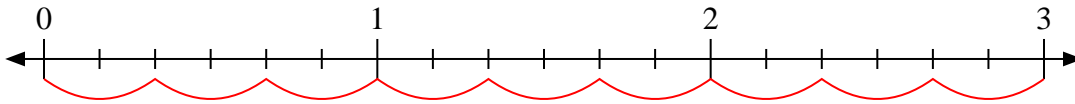
8. \_\_\_\_\_

9. \_\_\_\_\_

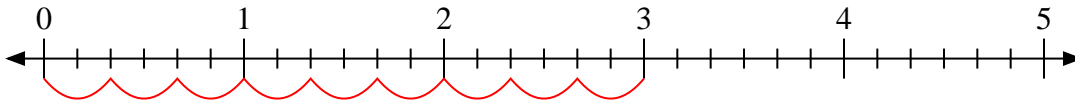


Usa la recta numérica para resolver.

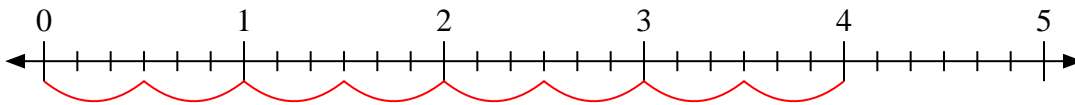
1)  $3 \div \frac{2}{6}$



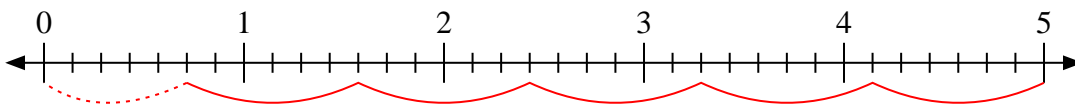
2)  $3 \div \frac{2}{6}$



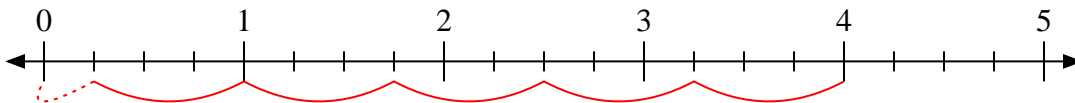
3)  $4 \div \frac{3}{6}$



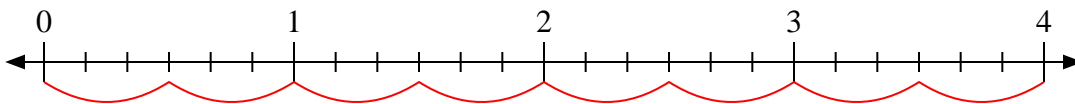
4)  $5 \div \frac{6}{7}$



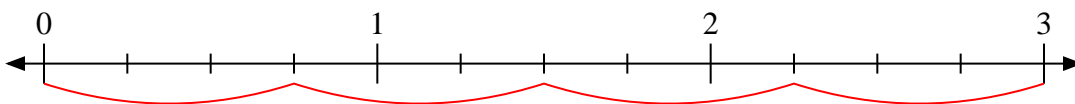
5)  $4 \div \frac{3}{4}$



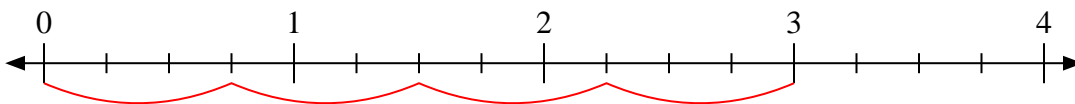
6)  $4 \div \frac{3}{6}$



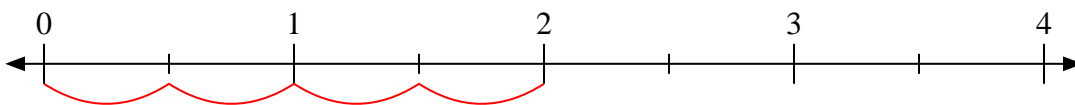
7)  $3 \div \frac{3}{4}$



8)  $3 \div \frac{3}{4}$



9)  $2 \div \frac{1}{2}$



**Respuestas**

1. 9

2. 9

3. 8

4.  $5 \frac{5}{6}$

5.  $5 \frac{1}{3}$

6. 8

7. 4

8. 4

9. 4