




Usa la caja para mostrar un ejemplo visual de cómo dividir una fracción y un número entero.

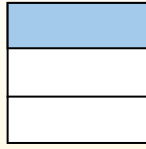
**Respuestas**

$\frac{1}{3} \div 4 = ?$



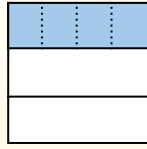
Para resolverlo, comience con un todo.

Divida el conjunto en 3 piezas y complete 1 sección.



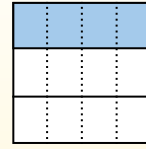
Ahora puedes ver el tamaño de  $\frac{1}{3}$

Em seguida, divide a  $\frac{1}{3}$  en 4 grupos.



Esto muestra el tamaño de cada pieza.


Para calcular el tamaño de cada pieza en comparación con el conjunto, divida el conjunto en 4 grupos.



Each piece is  $\frac{1}{12}$  of the whole.  
Or:

$\frac{1}{3} \div 4 = \frac{1}{12}$


1)  $\frac{1}{2} \div 8 =$




2)  $\frac{1}{9} \div 6 =$




3)  $\frac{1}{3} \div 8 =$




4)  $\frac{1}{7} \div 9 =$




5)  $\frac{1}{2} \div 3 =$




6)  $\frac{1}{8} \div 9 =$




7)  $\frac{1}{9} \div 3 =$




8)  $\frac{1}{4} \div 5 =$



9)  $\frac{1}{3} \div 9 =$




10)  $\frac{1}{5} \div 6 =$



11)  $\frac{1}{7} \div 6 =$



12)  $\frac{1}{7} \div 5 =$




1. \_\_\_\_\_
2. \_\_\_\_\_
3. \_\_\_\_\_
4. \_\_\_\_\_
5. \_\_\_\_\_
6. \_\_\_\_\_
7. \_\_\_\_\_
8. \_\_\_\_\_
9. \_\_\_\_\_
10. \_\_\_\_\_
11. \_\_\_\_\_
12. \_\_\_\_\_




Usa la caja para mostrar un ejemplo visual de cómo dividir una fracción y un número entero.

$\frac{1}{3} \div 4 = ?$



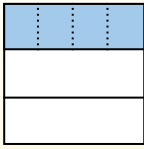
Para resolverlo, comience con un todo.

Divida el conjunto en 3 piezas y complete 1 sección.



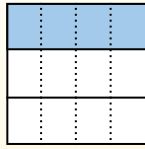
Ahora puedes ver el tamaño de  $\frac{1}{3}$

Em seguida, divida a  $\frac{1}{3}$  en 4 grupos.



Esto muestra el tamaño de cada pieza.

Para calcular el tamaño de cada pieza en comparación con el conjunto, divida el conjunto en 4 grupos.

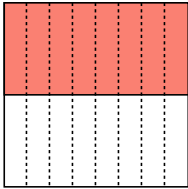


Each piece is  $\frac{1}{12}$  of the whole.  
Or:  
 $\frac{1}{3} \div 4 = \frac{1}{12}$

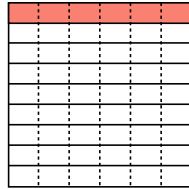
**Respuestas**

1.  $\frac{1}{16}$
2.  $\frac{1}{54}$
3.  $\frac{1}{24}$
4.  $\frac{1}{63}$
5.  $\frac{1}{6}$
6.  $\frac{1}{72}$
7.  $\frac{1}{27}$
8.  $\frac{1}{20}$
9.  $\frac{1}{27}$
10.  $\frac{1}{30}$
11.  $\frac{1}{42}$
12.  $\frac{1}{35}$

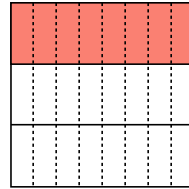
1)  $\frac{1}{2} \div 8 =$



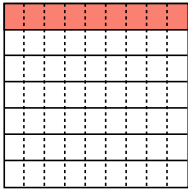
2)  $\frac{1}{9} \div 6 =$



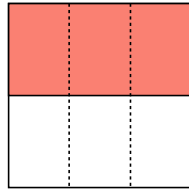
3)  $\frac{1}{3} \div 8 =$



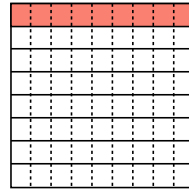
4)  $\frac{1}{7} \div 9 =$



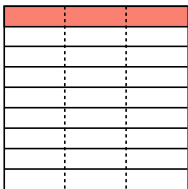
5)  $\frac{1}{2} \div 3 =$



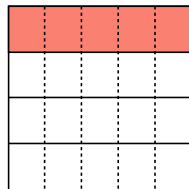
6)  $\frac{1}{8} \div 9 =$



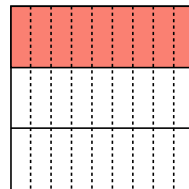
7)  $\frac{1}{9} \div 3 =$



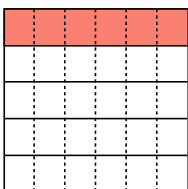
8)  $\frac{1}{4} \div 5 =$



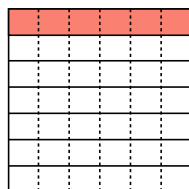
9)  $\frac{1}{3} \div 9 =$



10)  $\frac{1}{5} \div 6 =$



11)  $\frac{1}{7} \div 6 =$



12)  $\frac{1}{7} \div 5 =$

