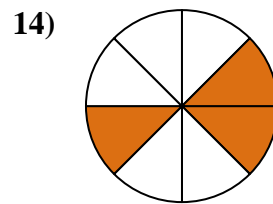
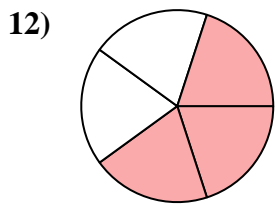
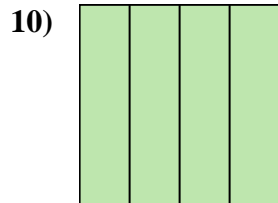

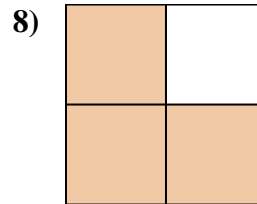
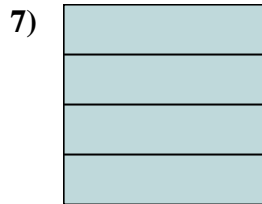
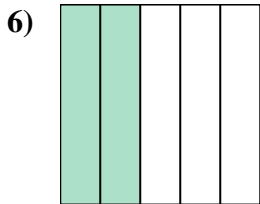
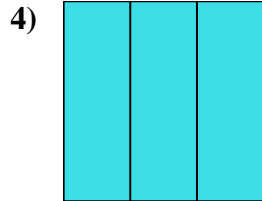
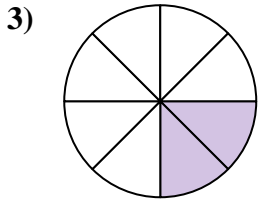
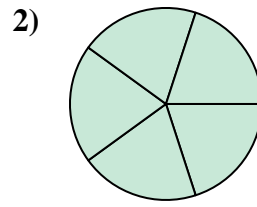
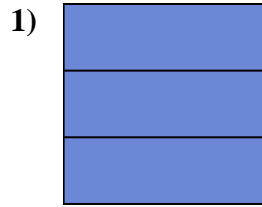
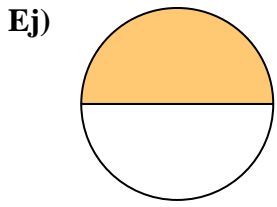




Escribe la cantidad sombreada como una fracción.



Respuestas

Ej. $\frac{1}{2}$

1. _____

2. _____

3. _____

4. _____

5. _____

6. _____

7. _____

8. _____

9. _____

10. _____

11. _____

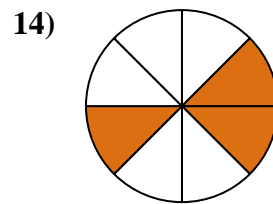
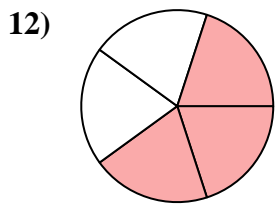
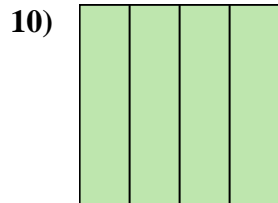

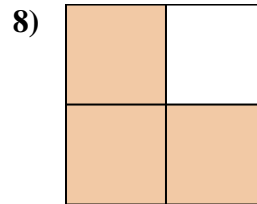
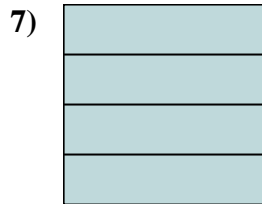
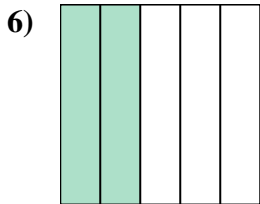
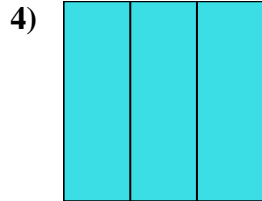
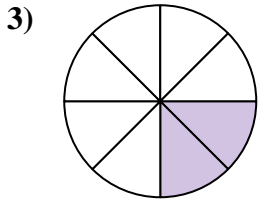
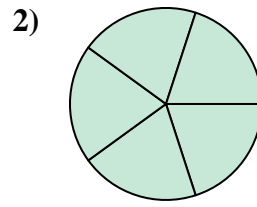
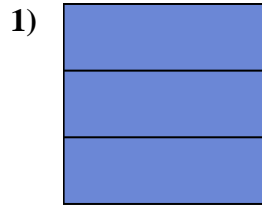
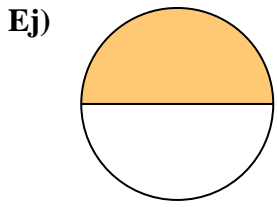
12. _____

13. _____

14. _____



Escribe la cantidad sombreada como una fracción.



Respuestas

Ej. $\frac{1}{2}$

1. $\frac{3}{3}$

2. $\frac{5}{5}$

3. $\frac{2}{8}$

4. $\frac{3}{3}$

5. $\frac{1}{8}$

6. $\frac{2}{5}$

7. $\frac{4}{4}$

8. $\frac{3}{4}$

9. $\frac{2}{2}$

10. $\frac{4}{4}$

11. $\frac{3}{3}$

12. $\frac{3}{5}$

13. $\frac{1}{2}$

14. $\frac{3}{8}$