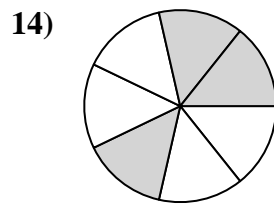
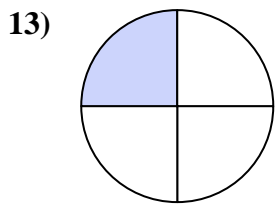
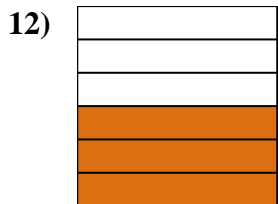
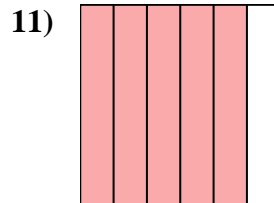

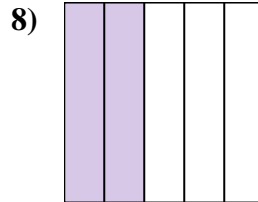
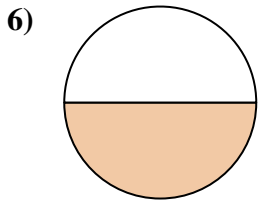
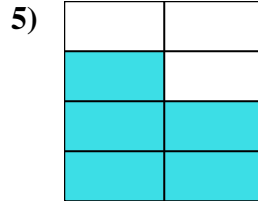
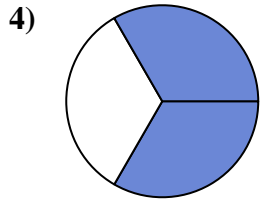
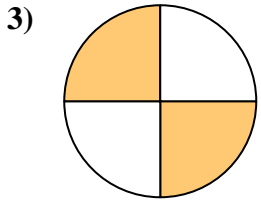
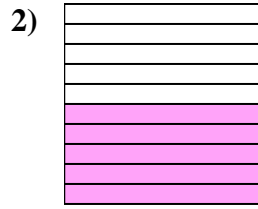
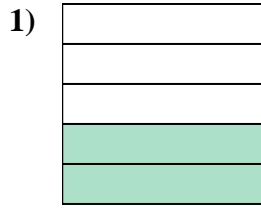
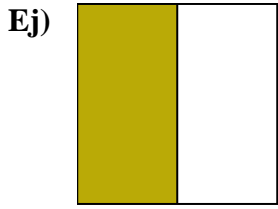




Escribe la cantidad sombreada en forma escrita.



Respuestas

Ej. una mitad

1. _____

2. _____

3. _____

4. _____

5. _____

6. _____

7. _____

8. _____

9. _____

10. _____

11. _____

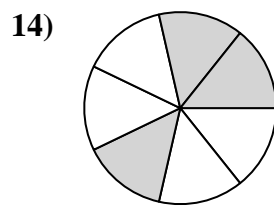
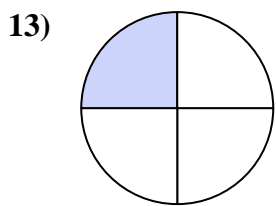
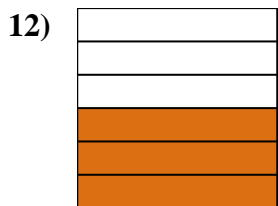
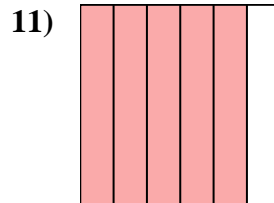

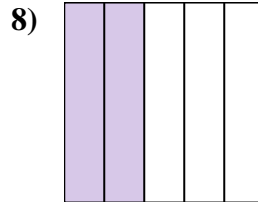
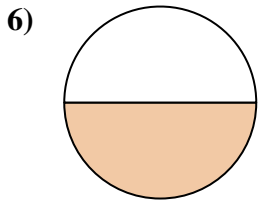
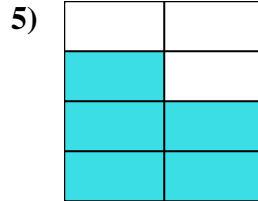
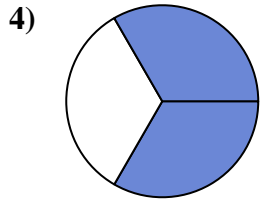
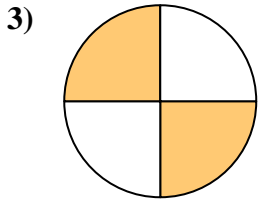
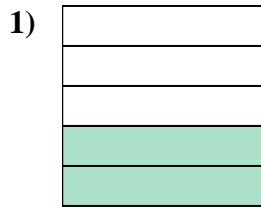
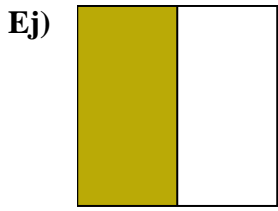
12. _____

13. _____

14. _____



Escriba la cantidad sombreada en forma escrita.



Respuestas

Ej. una mitad

1. dos quintas partes

2. cinco décimas

3. dos cuartos

4. dos tercios

5. cinco séptimos

6. una mitad

7. cuatro octavos

8. dos quintas partes

9. dos tercios

10. un noveno

11. cinco sextos

12. tres sextos

13. un cuarto

14. tres séptimos