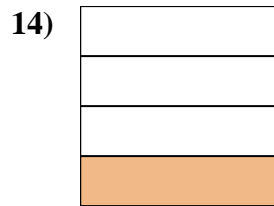
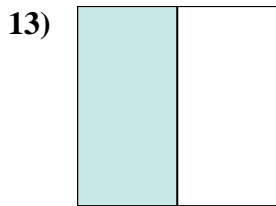
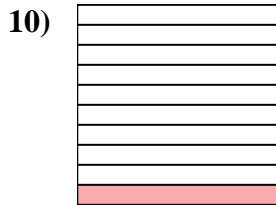
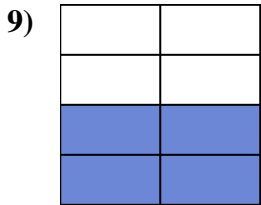
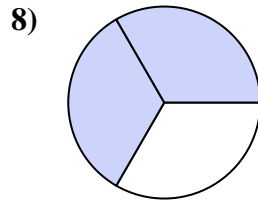
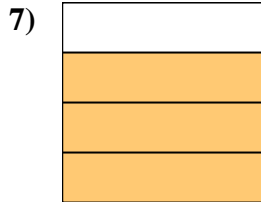
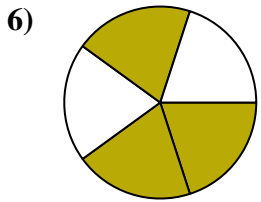
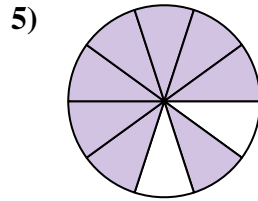
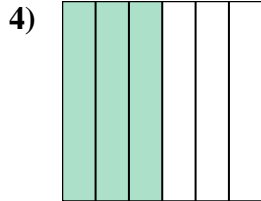
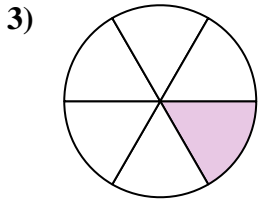

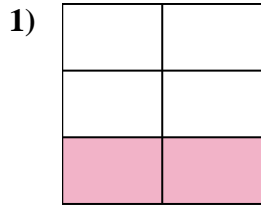
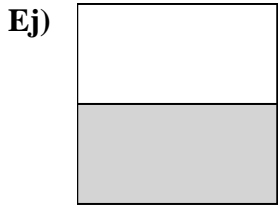




Escribe la cantidad sombreada en forma escrita.



**Respuestas**

Ej. una mitad

1. \_\_\_\_\_

2. \_\_\_\_\_

3. \_\_\_\_\_

4. \_\_\_\_\_

5. \_\_\_\_\_

6. \_\_\_\_\_

7. \_\_\_\_\_

8. \_\_\_\_\_

9. \_\_\_\_\_

10. \_\_\_\_\_

11. \_\_\_\_\_

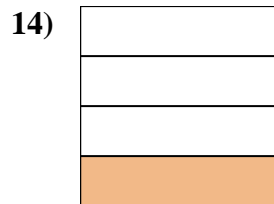
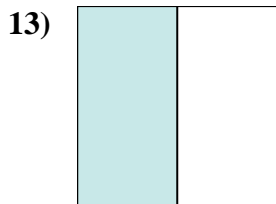
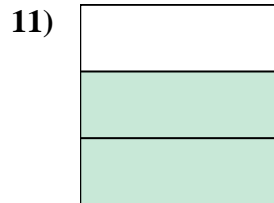

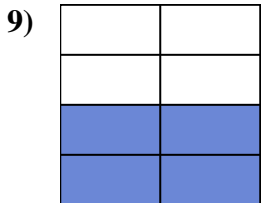
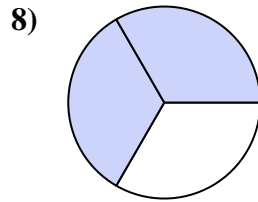
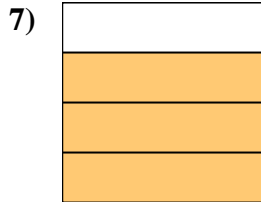
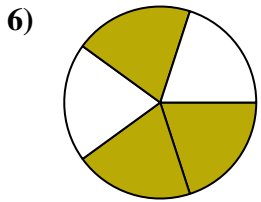
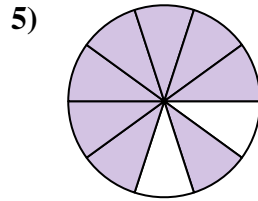
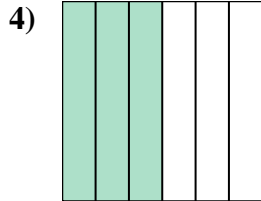
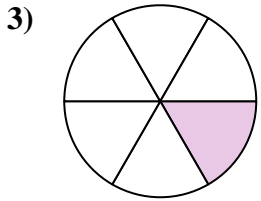

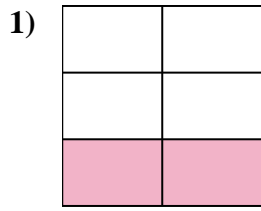
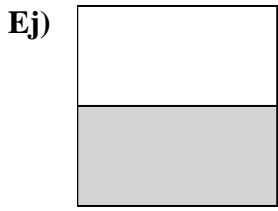
12. \_\_\_\_\_

13. \_\_\_\_\_

14. \_\_\_\_\_



Escriba la cantidad sombreada en forma escrita.



**Respuestas**

Ej. una mitad

1. dos quintas partes

2. dos novenos

3. un sexto

4. tres sextos

5. ocho décimas

6. tres quintos

7. tres cuartos

8. dos tercios

9. cuatro séptimos

10. una décima parte

11. dos tercios

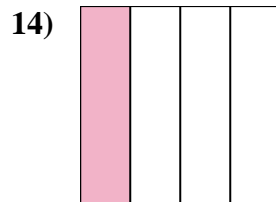
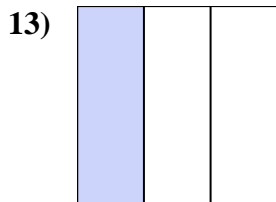
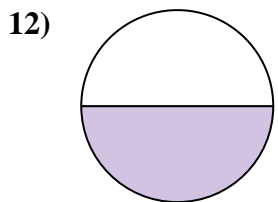
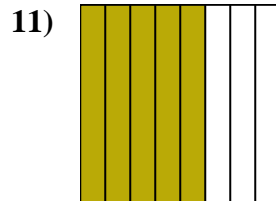
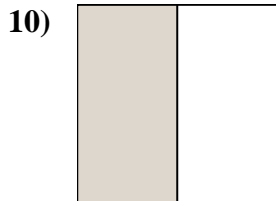
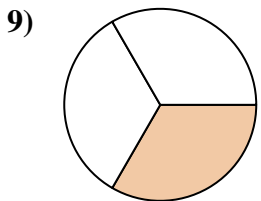
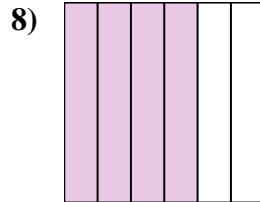
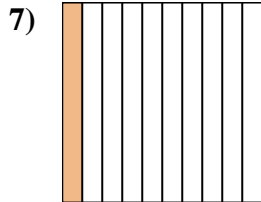
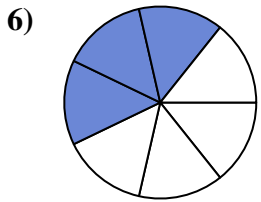
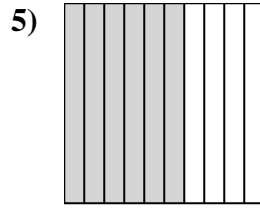
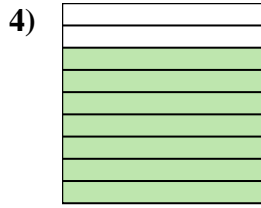
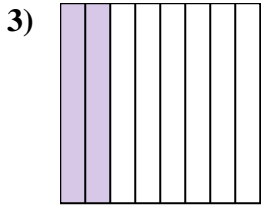
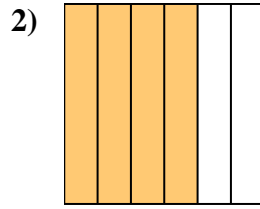
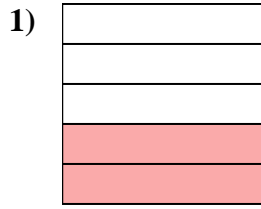
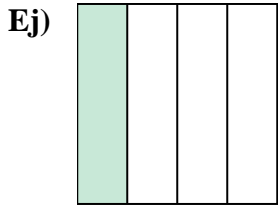
12. cuatro octavos

13. una mitad

14. un cuarto



Escriba la cantidad sombreada en forma escrita.



**Respuestas**

Ej. un cuarto

1. \_\_\_\_\_

2. \_\_\_\_\_

3. \_\_\_\_\_

4. \_\_\_\_\_

5. \_\_\_\_\_

6. \_\_\_\_\_

7. \_\_\_\_\_

8. \_\_\_\_\_

9. \_\_\_\_\_

10. \_\_\_\_\_

11. \_\_\_\_\_

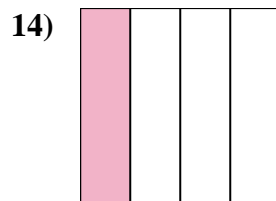
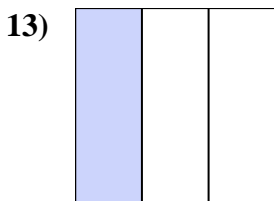
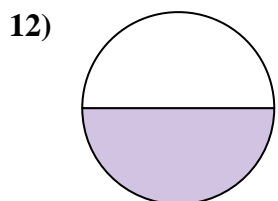
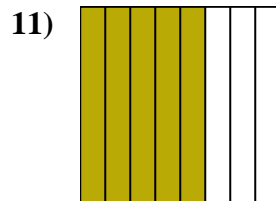
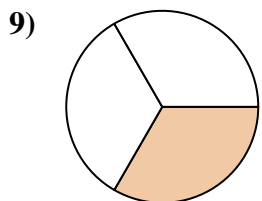
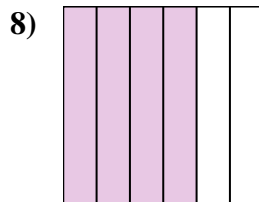
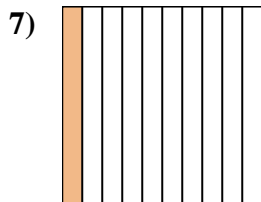
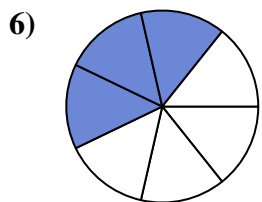
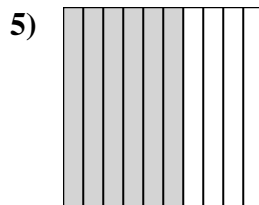
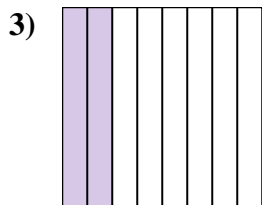
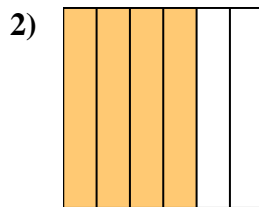
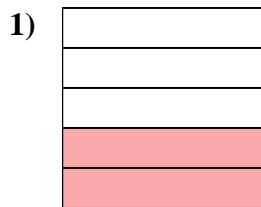
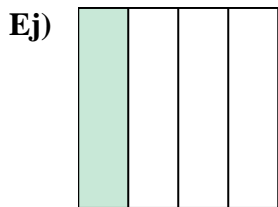
12. \_\_\_\_\_

13. \_\_\_\_\_

14. \_\_\_\_\_



Escriba la cantidad sombreada en forma escrita.



**Respuestas**

Ej. un cuarto

1. dos quintas partes

2. cuatro sextos

3. dos octavos

4. siete novenos

5. seis décimas

6. tres séptimos

7. una décima parte

8. cuatro sextos

9. un tercio

10. una mitad

11. cinco octavos

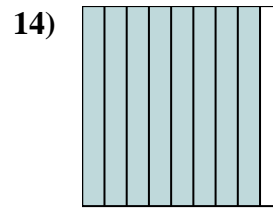
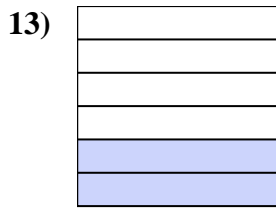
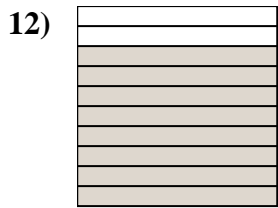
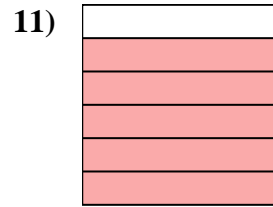
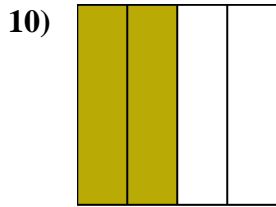
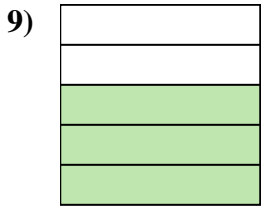
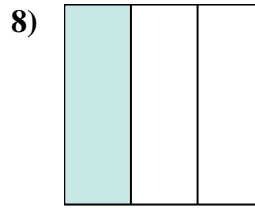
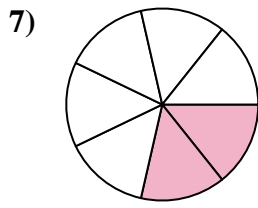
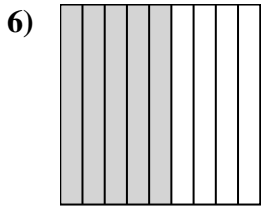
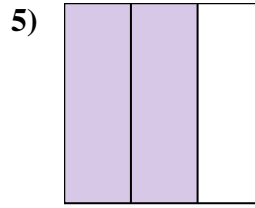
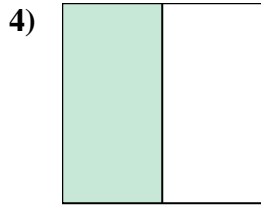
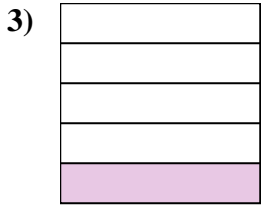
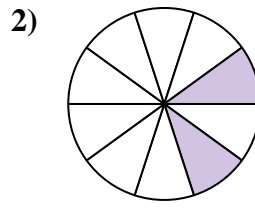
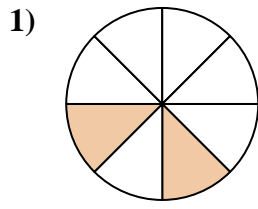
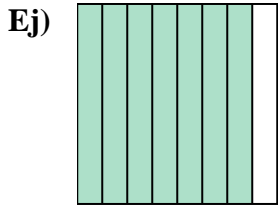
12. una mitad

13. un tercio

14. un cuarto



Escriba la cantidad sombreada en forma escrita.



**Respuestas**

Ej. siete octavos

1. \_\_\_\_\_

2. \_\_\_\_\_

3. \_\_\_\_\_

4. \_\_\_\_\_

5. \_\_\_\_\_

6. \_\_\_\_\_

7. \_\_\_\_\_

8. \_\_\_\_\_

9. \_\_\_\_\_

10. \_\_\_\_\_

11. \_\_\_\_\_

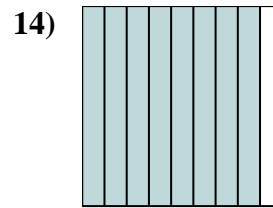
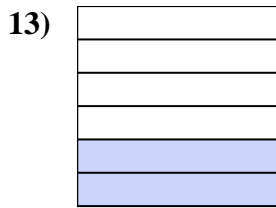
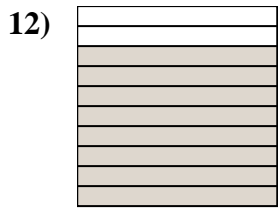
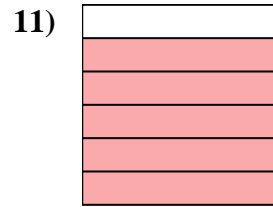
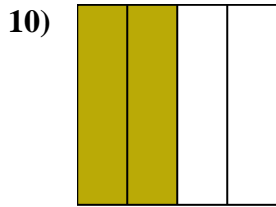
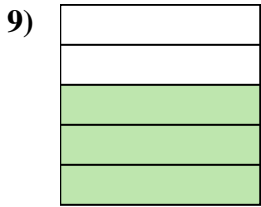
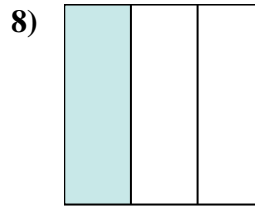
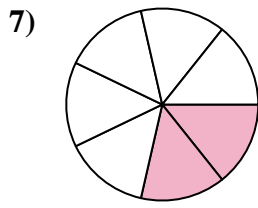
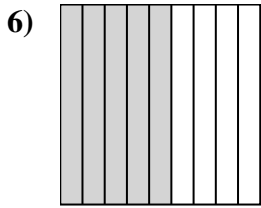
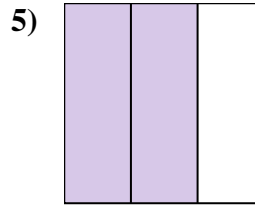
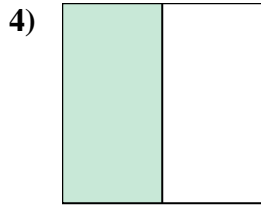
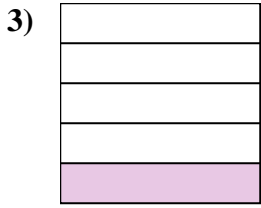
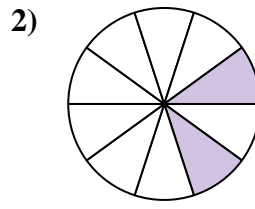
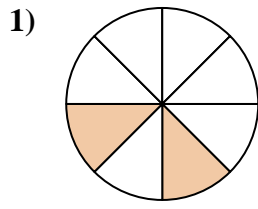
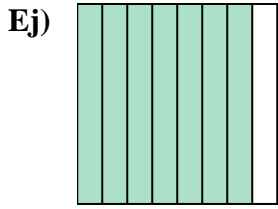
12. \_\_\_\_\_

13. \_\_\_\_\_

14. \_\_\_\_\_



Escriba la cantidad sombreada en forma escrita.



**Respuestas**

Ej. siete octavos

1. dos octavos

2. dos décimas

3. un quinto

4. una mitad

5. dos tercios

6. cinco novenos

7. dos séptimos

8. un tercio

9. tres quintos

10. dos cuartos

11. cinco sextos

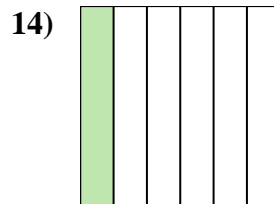
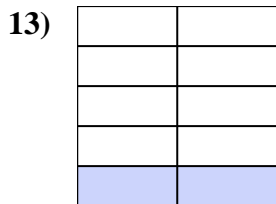
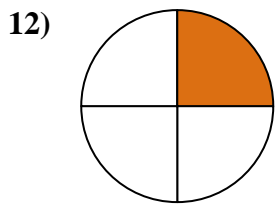
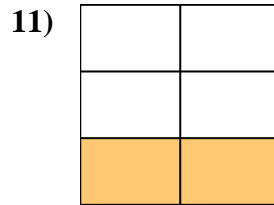
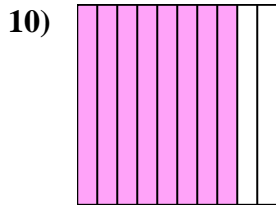
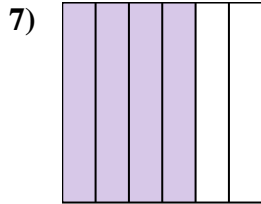
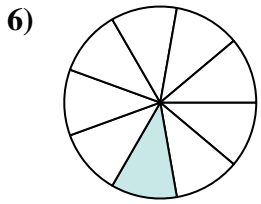
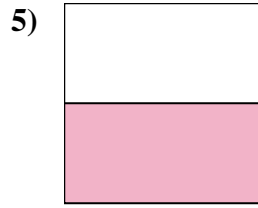
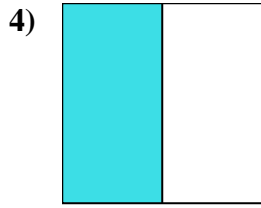
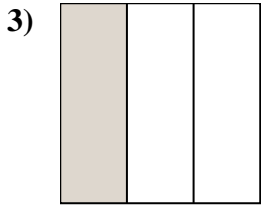
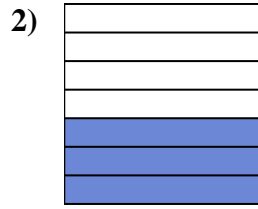
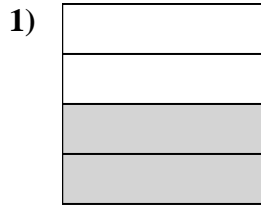
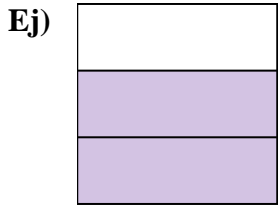
12. ocho décimas

13. dos sextos

14. ocho novenos



Escriba la cantidad sombreada en forma escrita.



**Respuestas**

Ej. **dos tercios**

1. \_\_\_\_\_

2. \_\_\_\_\_

3. \_\_\_\_\_

4. \_\_\_\_\_

5. \_\_\_\_\_

6. \_\_\_\_\_

7. \_\_\_\_\_

8. \_\_\_\_\_

9. \_\_\_\_\_

10. \_\_\_\_\_

11. \_\_\_\_\_

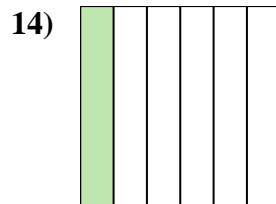
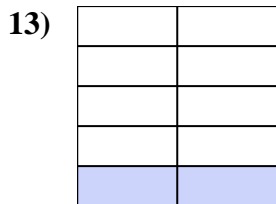
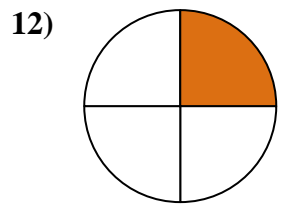
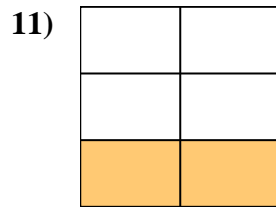
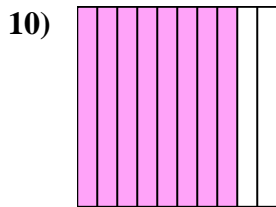
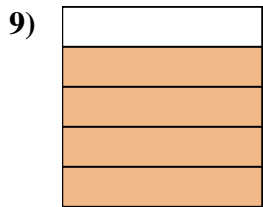
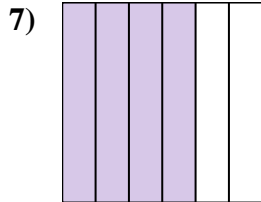
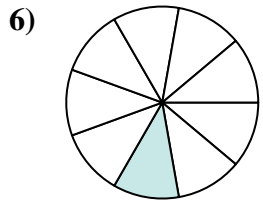
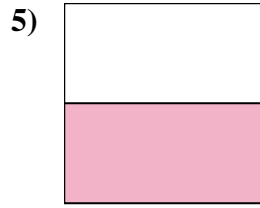
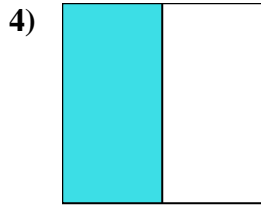
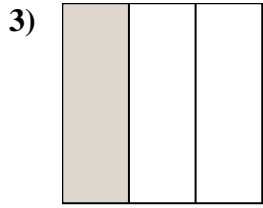
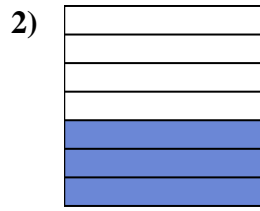
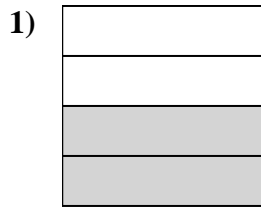
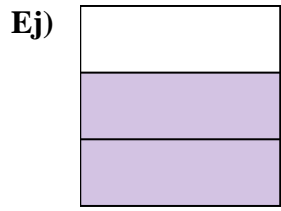
12. \_\_\_\_\_

13. \_\_\_\_\_

14. \_\_\_\_\_



Escriba la cantidad sombreada en forma escrita.



**Respuestas**

Ej. dos tercios

1. dos cuartos

2. tres séptimos

3. un tercio

4. una mitad

5. una mitad

6. un noveno

7. cuatro sextos

8. siete octavos

9. cuatro quintos

10. ocho décimas

11. dos quintas partes

12. un cuarto

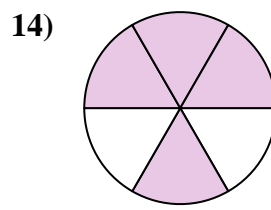
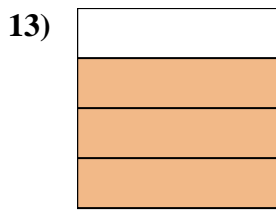
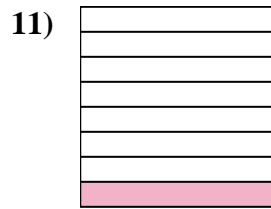
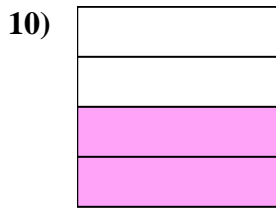
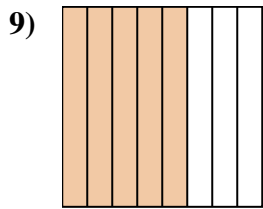
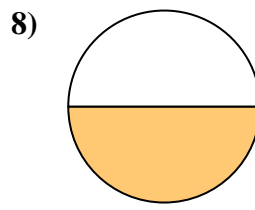
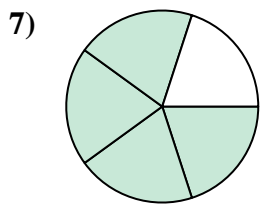
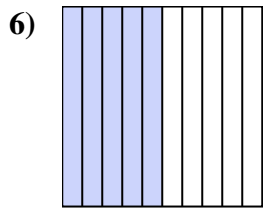
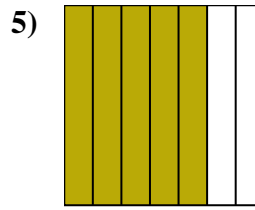
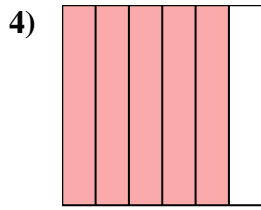
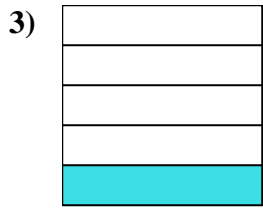
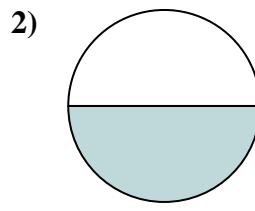
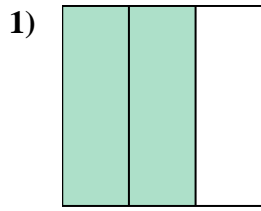
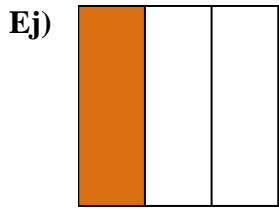
13. dos novenos

14. un sexto





Escriba la cantidad sombreada en forma escrita.



### Respuestas

Ej. un tercio

1. \_\_\_\_\_

2. \_\_\_\_\_

3. \_\_\_\_\_

4. \_\_\_\_\_

5. \_\_\_\_\_

6. \_\_\_\_\_

7. \_\_\_\_\_

8. \_\_\_\_\_

9. \_\_\_\_\_

10. \_\_\_\_\_

11. \_\_\_\_\_

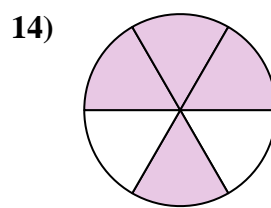
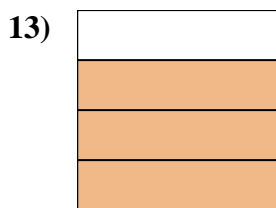
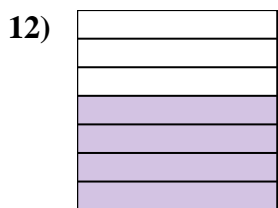

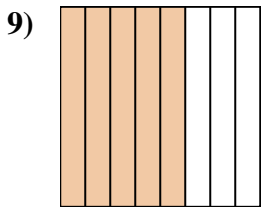
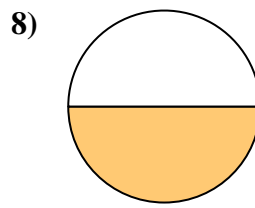
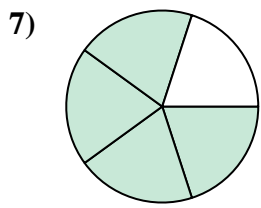
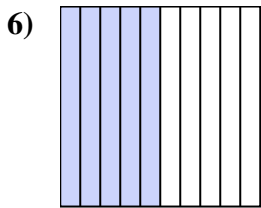
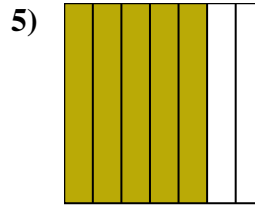
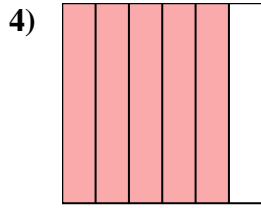
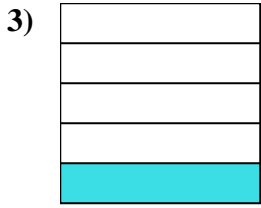
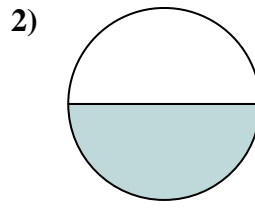
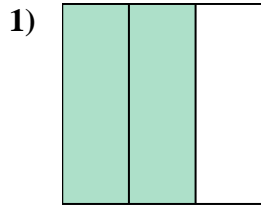
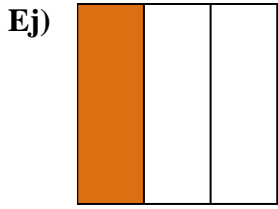
12. \_\_\_\_\_

13. \_\_\_\_\_

14. \_\_\_\_\_



Escriba la cantidad sombreada en forma escrita.



**Respuestas**

Ej. un tercio

1. dos tercios

2. una mitad

3. un quinto

4. cinco sextos

5. cinco séptimos

6. cinco décimas

7. cuatro quintos

8. una mitad

9. cinco octavos

10. dos cuartos

11. uno ocho

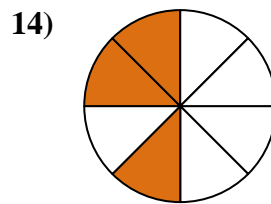
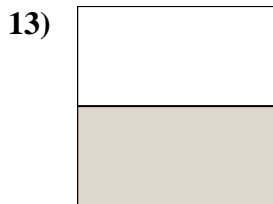
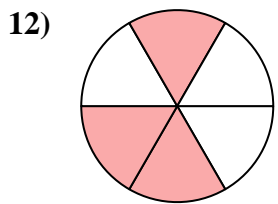
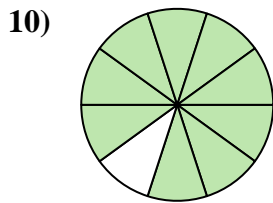
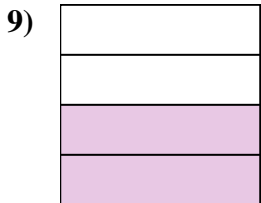
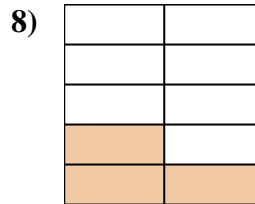
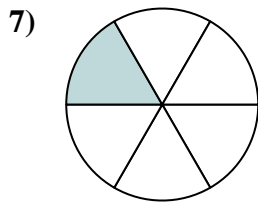
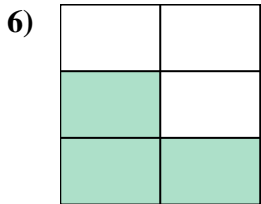
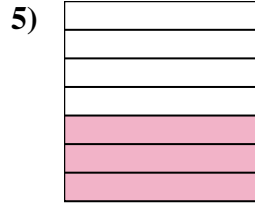
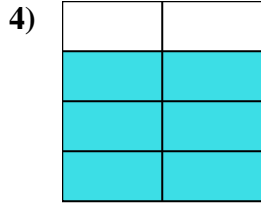
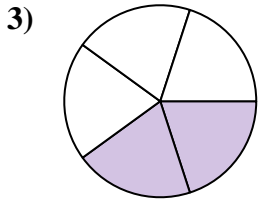
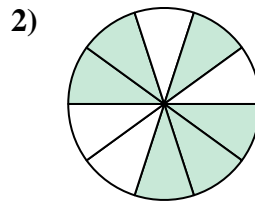
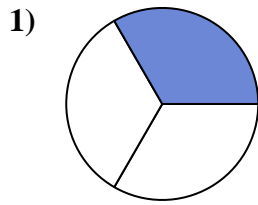
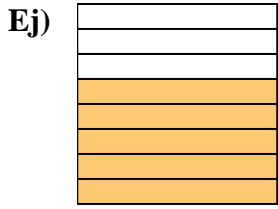
12. cuatro séptimos

13. tres cuartos

14. cuatro sextos



Escribe la cantidad sombreada en forma escrita.



**Respuestas**

Ej. cinco octavos

1. \_\_\_\_\_

2. \_\_\_\_\_

3. \_\_\_\_\_

4. \_\_\_\_\_

5. \_\_\_\_\_

6. \_\_\_\_\_

7. \_\_\_\_\_

8. \_\_\_\_\_

9. \_\_\_\_\_

10. \_\_\_\_\_

11. \_\_\_\_\_

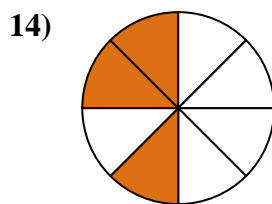
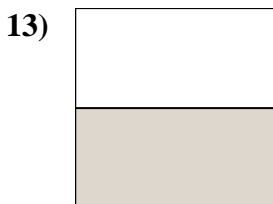
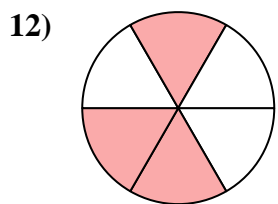
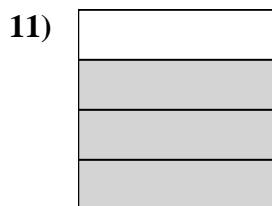
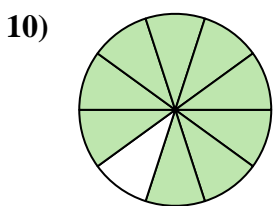
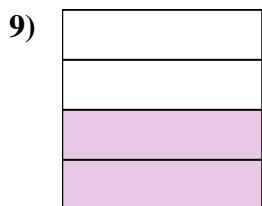
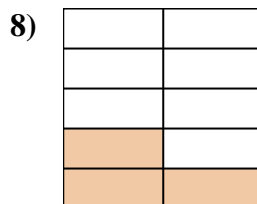
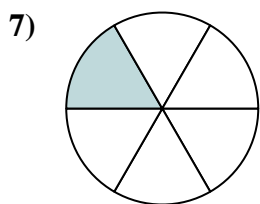
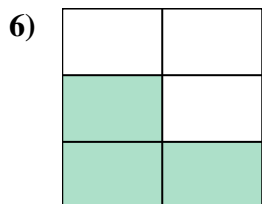
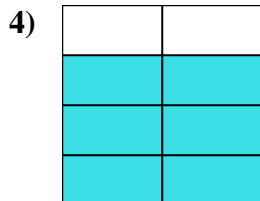
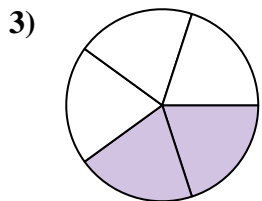
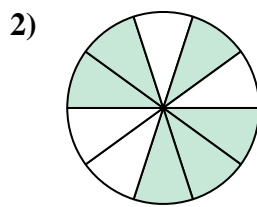
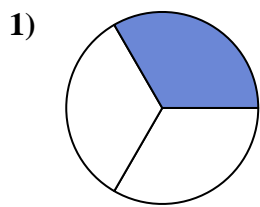
12. \_\_\_\_\_

13. \_\_\_\_\_

14. \_\_\_\_\_



Escriba la cantidad sombreada en forma escrita.



**Respuestas**

Ej. **cinco octavos**

1. **un tercio**

2. **seis décimas**

3. **dos quintas partes**

4. **seis séptimos**

5. **tres séptimos**

6. **tres quintos**

7. **un sexto**

8. **tres novenos**

9. **dos cuartos**

10. **nueve décimos**

11. **tres cuartos**

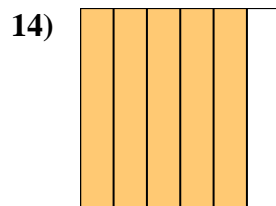

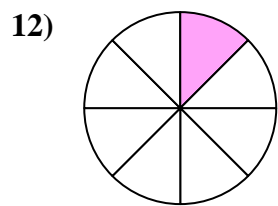
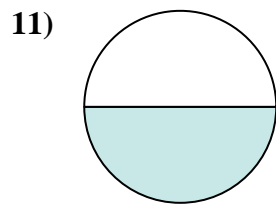
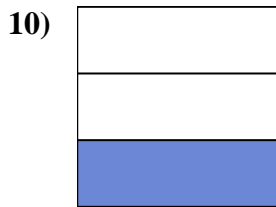
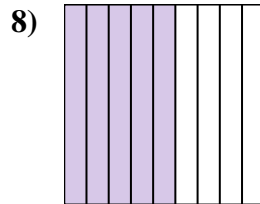
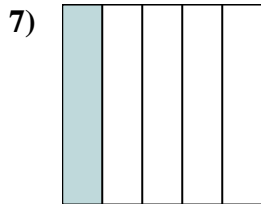
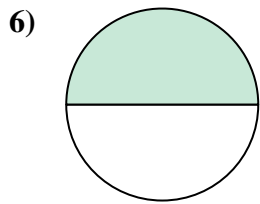
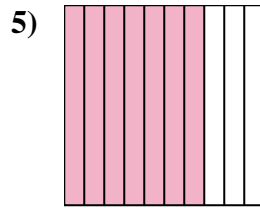
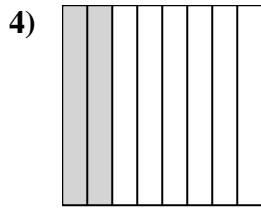
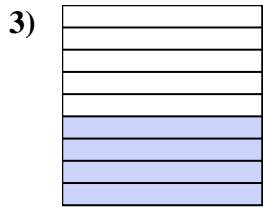
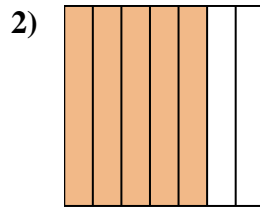
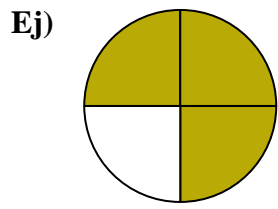
12. **tres sextos**

13. **una mitad**

14. **tres octavos**



Escribe la cantidad sombreada en forma escrita.



### Respuestas

Ej. tres cuartos

1. \_\_\_\_\_

2. \_\_\_\_\_

3. \_\_\_\_\_

4. \_\_\_\_\_

5. \_\_\_\_\_

6. \_\_\_\_\_

7. \_\_\_\_\_

8. \_\_\_\_\_

9. \_\_\_\_\_

10. \_\_\_\_\_

11. \_\_\_\_\_

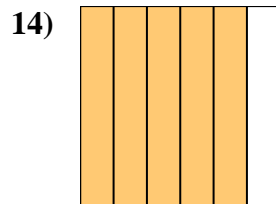
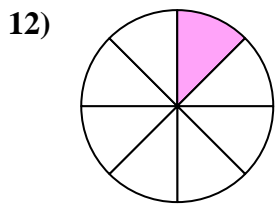
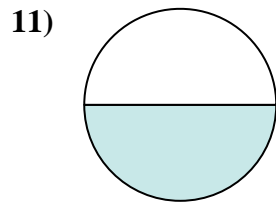
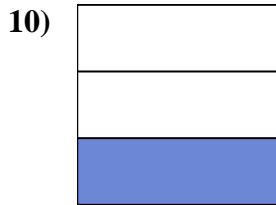
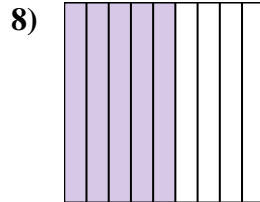
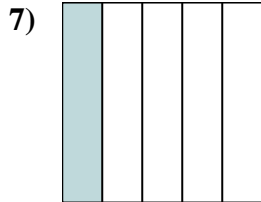
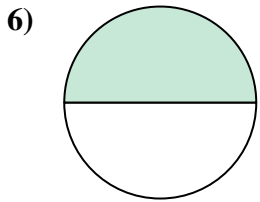
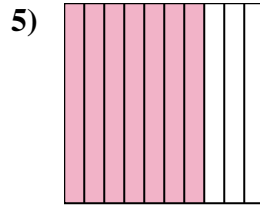
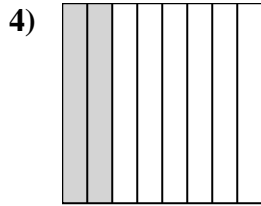
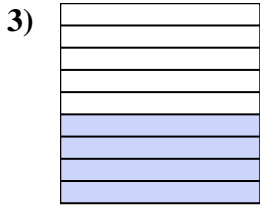
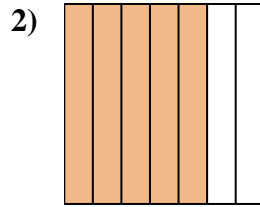
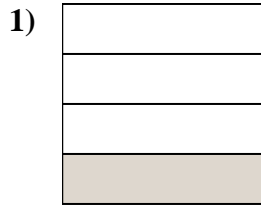
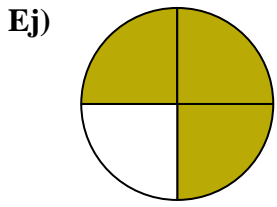
12. \_\_\_\_\_

13. \_\_\_\_\_

14. \_\_\_\_\_



Escriba la cantidad sombreada en forma escrita.



**Respuestas**

Ej. tres cuartos

1. un cuarto

2. cinco séptimos

3. cuatro novenos

4. dos octavos

5. siete décimas

6. una mitad

7. un quinto

8. cinco novenos

9. dos quintas partes

10. un tercio

11. una mitad

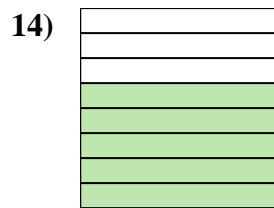
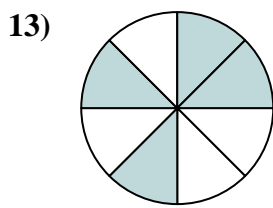
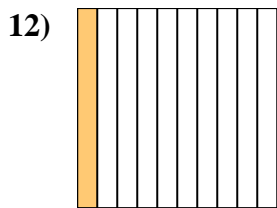
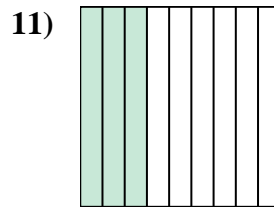
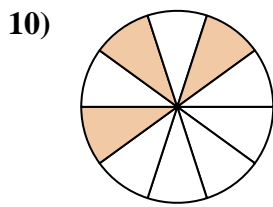
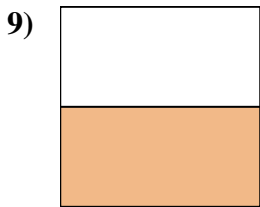
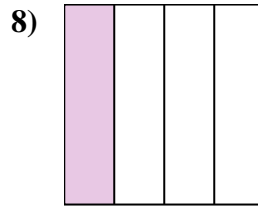
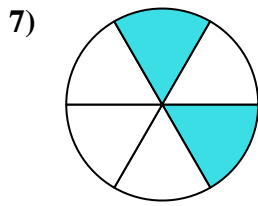
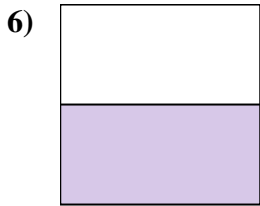
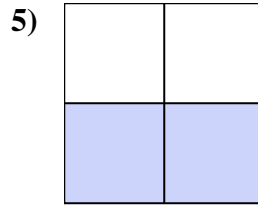
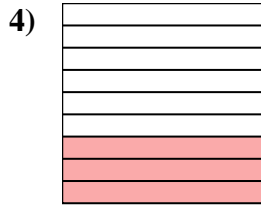
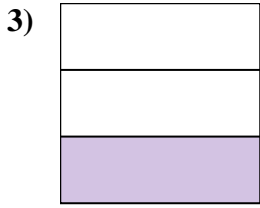
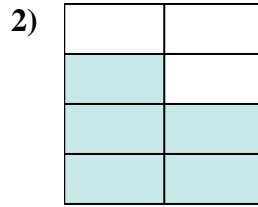
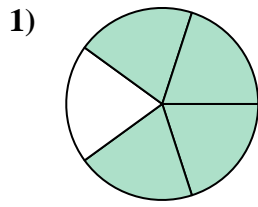
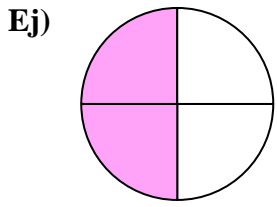
12. uno ocho

13. dos décimas

14. cinco sextos



Escribe la cantidad sombreada en forma escrita.



**Respuestas**

Ej. dos cuartos

1. \_\_\_\_\_

2. \_\_\_\_\_

3. \_\_\_\_\_

4. \_\_\_\_\_

5. \_\_\_\_\_

6. \_\_\_\_\_

7. \_\_\_\_\_

8. \_\_\_\_\_

9. \_\_\_\_\_

10. \_\_\_\_\_

11. \_\_\_\_\_

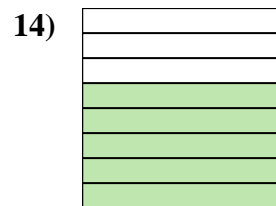
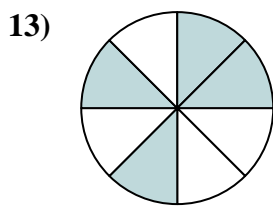
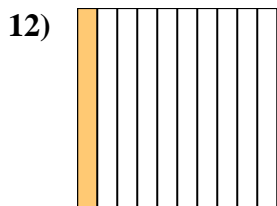
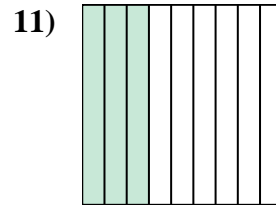
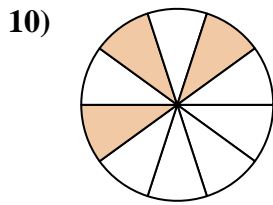
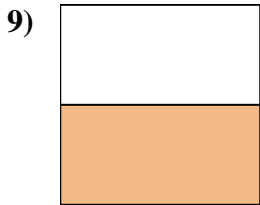
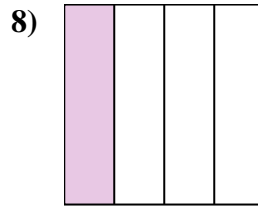
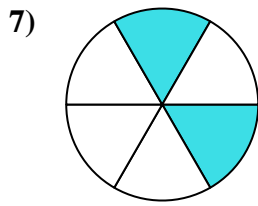
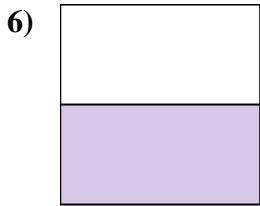
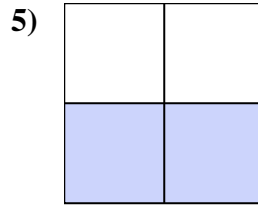
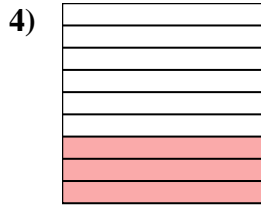
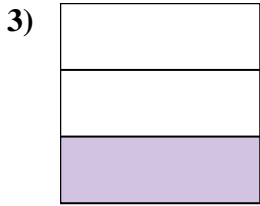
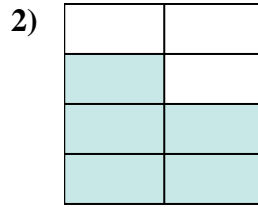
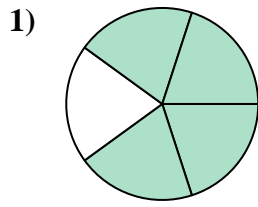
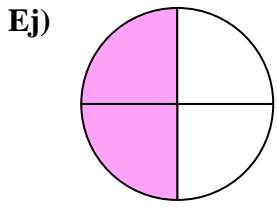
12. \_\_\_\_\_

13. \_\_\_\_\_

14. \_\_\_\_\_



Escriba la cantidad sombreada en forma escrita.



**Respuestas**

Ej. dos cuartos

1. cuatro quintos

2. cinco séptimos

3. un tercio

4. tres novenos

5. dos tercios

6. una mitad

7. dos sextos

8. un cuarto

9. una mitad

10. tres décimas

11. tres novenos

12. una décima parte

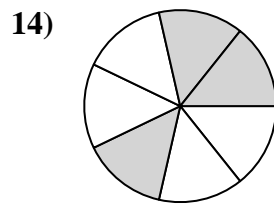
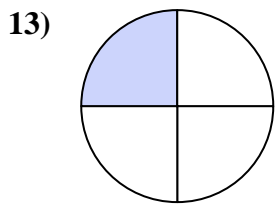
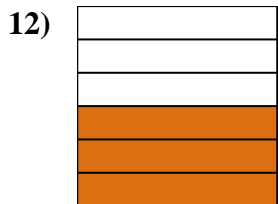
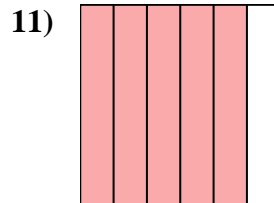

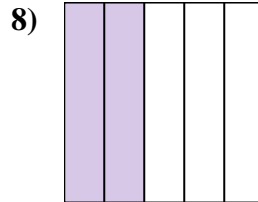
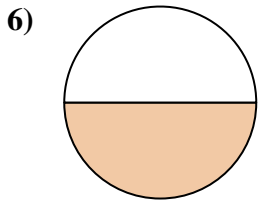
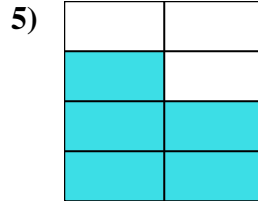
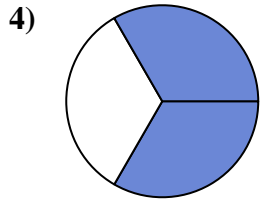
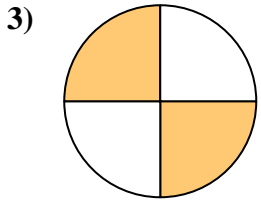
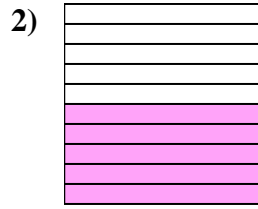
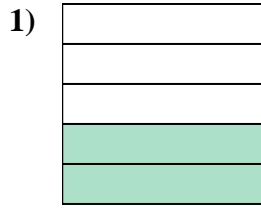
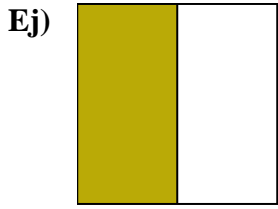
13. cuatro octavos

14. cinco octavos





Escribe la cantidad sombreada en forma escrita.



**Respuestas**

Ej. una mitad

1. \_\_\_\_\_

2. \_\_\_\_\_

3. \_\_\_\_\_

4. \_\_\_\_\_

5. \_\_\_\_\_

6. \_\_\_\_\_

7. \_\_\_\_\_

8. \_\_\_\_\_

9. \_\_\_\_\_

10. \_\_\_\_\_

11. \_\_\_\_\_

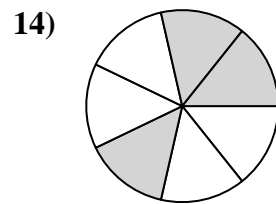
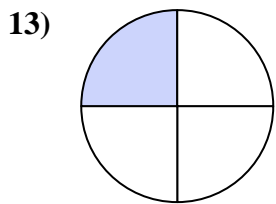
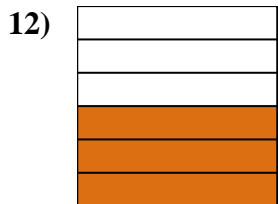
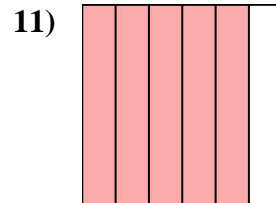

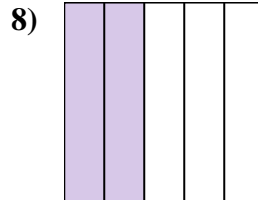

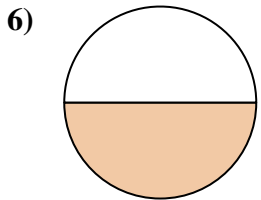
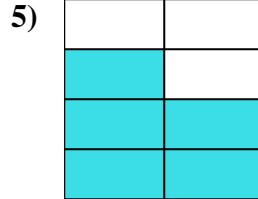
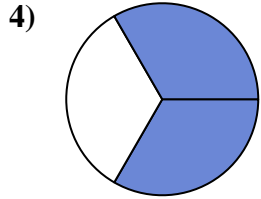
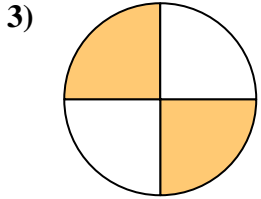
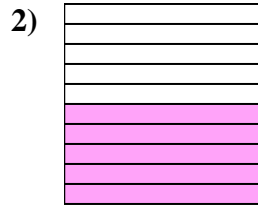
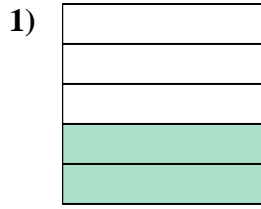
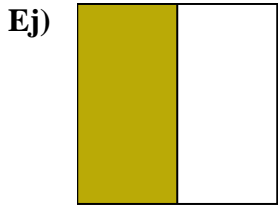
12. \_\_\_\_\_

13. \_\_\_\_\_

14. \_\_\_\_\_



Escriba la cantidad sombreada en forma escrita.



**Respuestas**

Ej. una mitad

1. dos quintas partes

2. cinco décimas

3. dos cuartos

4. dos tercios

5. cinco séptimos

6. una mitad

7. cuatro octavos

8. dos quintas partes

9. dos tercios

10. un noveno

11. cinco sextos

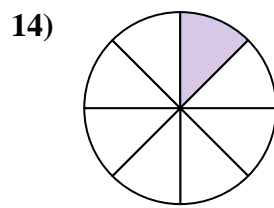
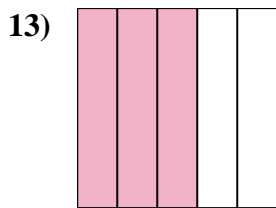
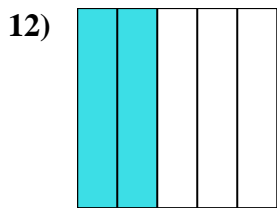
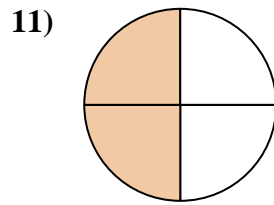
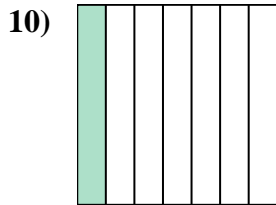
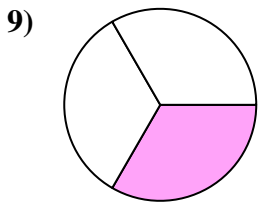
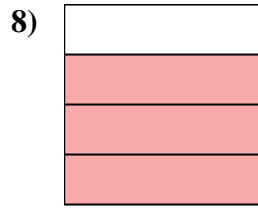
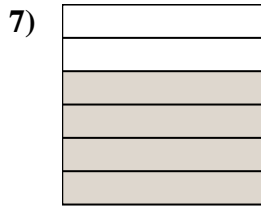
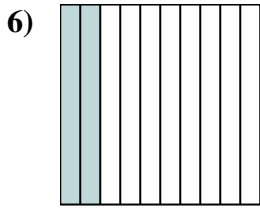
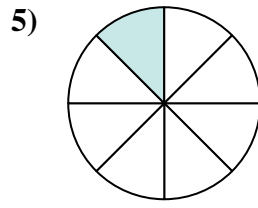
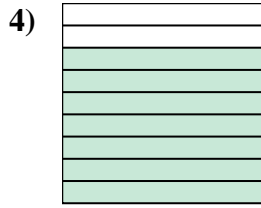
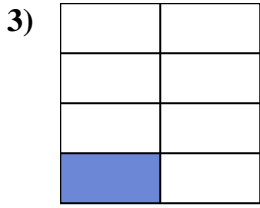
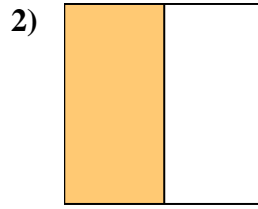
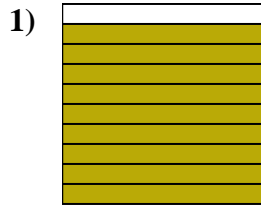
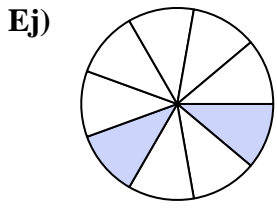
12. tres sextos

13. un cuarto

14. tres séptimos



Escribe la cantidad sombreada en forma escrita.



**Respuestas**

Ej. dos novenos

1. \_\_\_\_\_

2. \_\_\_\_\_

3. \_\_\_\_\_

4. \_\_\_\_\_

5. \_\_\_\_\_

6. \_\_\_\_\_

7. \_\_\_\_\_

8. \_\_\_\_\_

9. \_\_\_\_\_

10. \_\_\_\_\_

11. \_\_\_\_\_

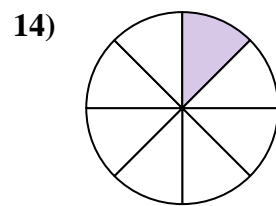
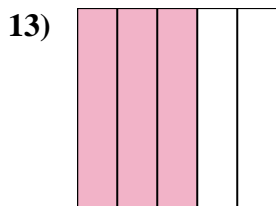
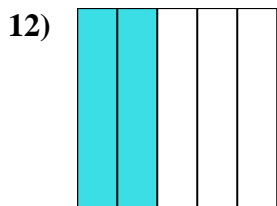
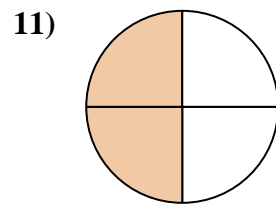
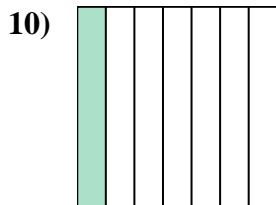
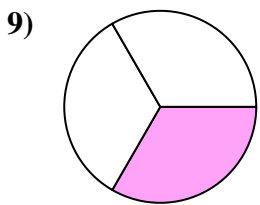
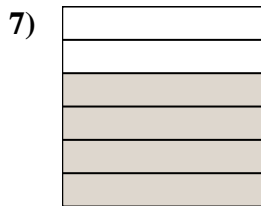
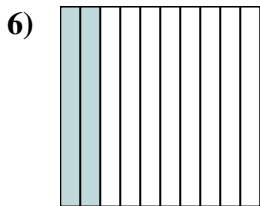
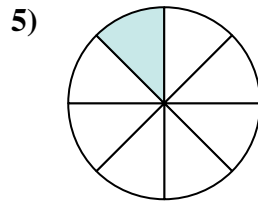
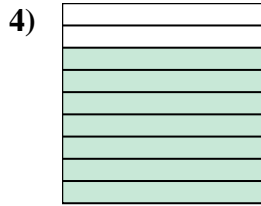
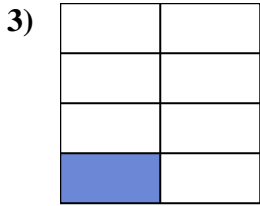
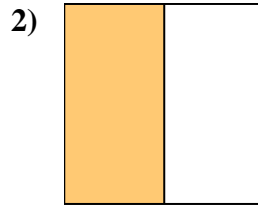
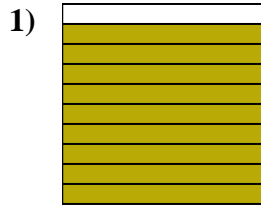
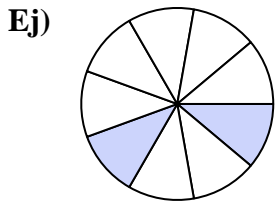
12. \_\_\_\_\_

13. \_\_\_\_\_

14. \_\_\_\_\_



Escriba la cantidad sombreada en forma escrita.



**Respuestas**

Ej. dos novenos

1. nueve décimos

2. una mitad

3. un séptimo

4. siete novenos

5. uno octo

6. dos décimas

7. cuatro sextos

8. tres cuartos

9. un tercio

10. un séptimo

11. dos cuartos

12. dos quintas partes

13. tres quintos

14. uno octo