



Sombrea la fracción visual para encontrar la fracción equivalente.

Ej) $\frac{1}{4} = \frac{3}{12}$

1) $\frac{3}{6} =$

2) $\frac{2}{4} =$

3) $\frac{2}{2} =$

4) $\frac{1}{4} =$

5) $\frac{0}{2} =$

6) $\frac{1}{2} =$

7) $\frac{4}{8} =$

8) $\frac{1}{3} =$

9) $\frac{6}{8} =$

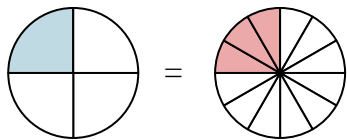
Respuestas

- Ej. $\frac{3}{12}$
1. _____
2. _____
3. _____
4. _____
5. _____
6. _____
7. _____
8. _____
9. _____

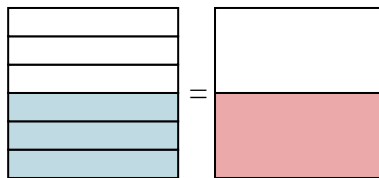


Sombrea la fracción visual para encontrar la fracción equivalente.

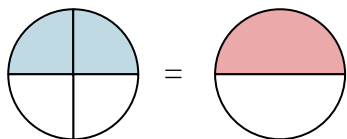
Ej) $\frac{1}{4} = \frac{3}{12}$



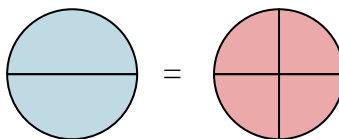
1) $\frac{3}{6} = \frac{1}{2}$



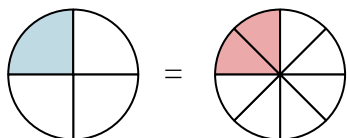
2) $\frac{2}{4} = \frac{1}{2}$



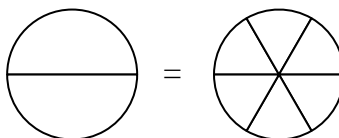
3) $\frac{2}{2} = \frac{4}{4}$



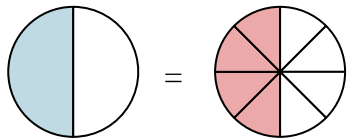
4) $\frac{1}{4} = \frac{2}{8}$



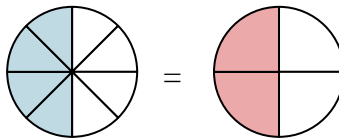
5) $\frac{0}{2} = \frac{0}{6}$



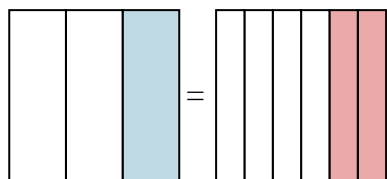
6) $\frac{1}{2} = \frac{4}{8}$



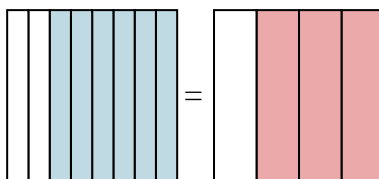
7) $\frac{4}{8} = \frac{2}{4}$



8) $\frac{1}{3} = \frac{2}{6}$



9) $\frac{6}{8} = \frac{3}{4}$

**Respuestas**

Ej. $\frac{3}{12}$

1. $\frac{1}{2}$

2. $\frac{1}{2}$

3. $\frac{4}{4}$

4. $\frac{2}{8}$

5. $\frac{0}{6}$

6. $\frac{4}{8}$

7. $\frac{2}{4}$

8. $\frac{2}{6}$

9. $\frac{3}{4}$