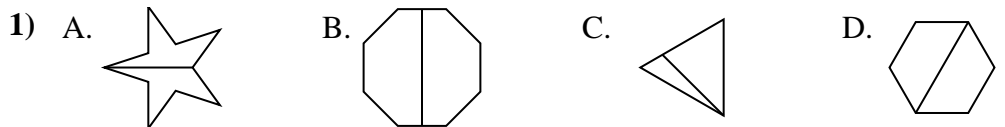


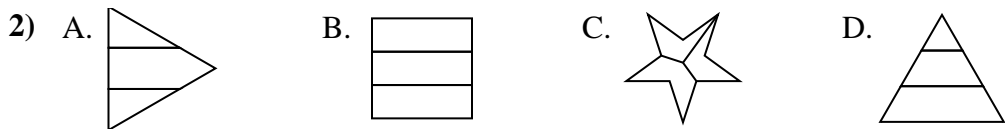


Determina cuál opción(es) muestran la forma dividida para que cada pieza tenga un área igual. Si ninguna, escriba 'ninguna'.

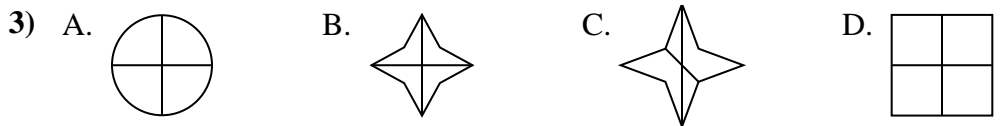
Respuestas



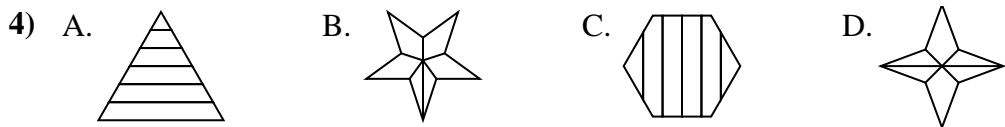
1. _____
 2. _____



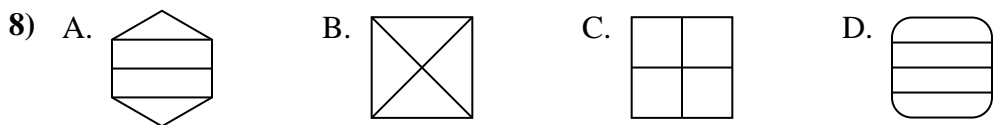
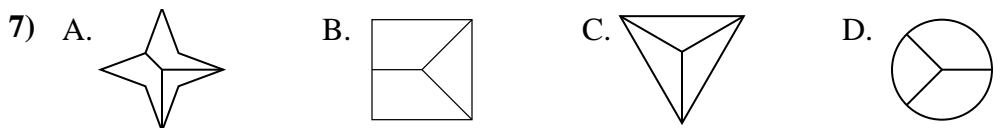
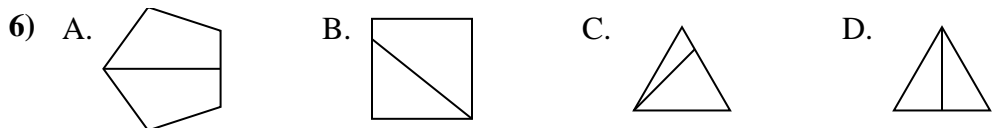
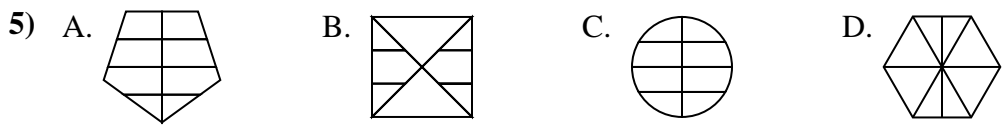
3. _____
 4. _____



5. _____
 6. _____


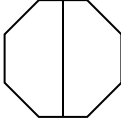
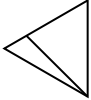
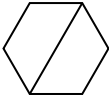


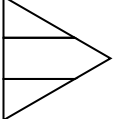


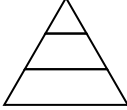
7. _____
 8. _____

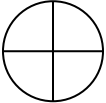


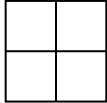


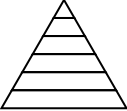
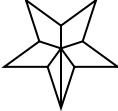
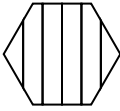
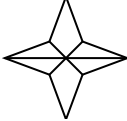


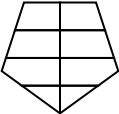
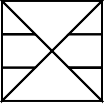
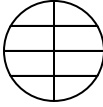
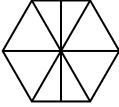
Determina cuál opción(es) muestran la forma dividida para que cada pieza tenga un área igual. Si ninguna, escriba 'ninguna'.

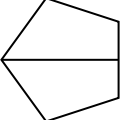
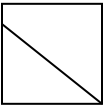
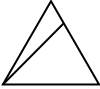
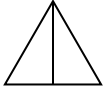
1) A.  B.  C.  D. 


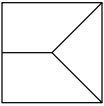
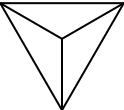
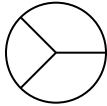
2) A.  B.  C.  D. 

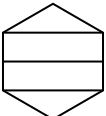
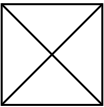
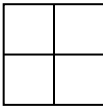
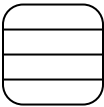
3) A.  B.  C.  D. 

4) A.  B.  C.  D. 

5) A.  B.  C.  D. 

6) A.  B.  C.  D. 

7) A.  B.  C.  D. 

8) A.  B.  C.  D. 

Respuestas

1. **A,B,D**
2. **B**
3. **A,B,D**
4. **ninguna**
5. **ninguna**
6. **A,D**
7. **C**
8. **B,C**