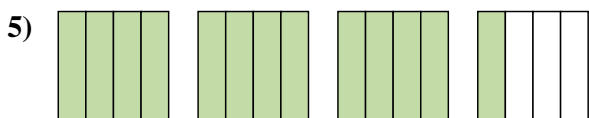
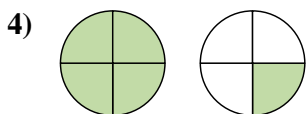
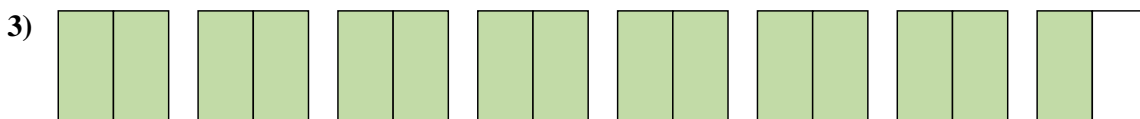
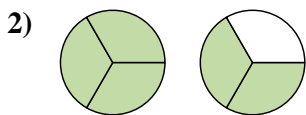
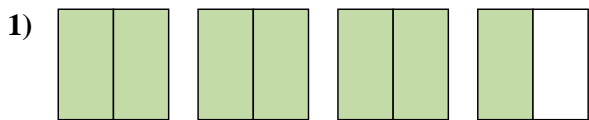


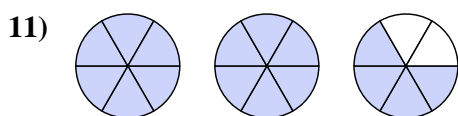
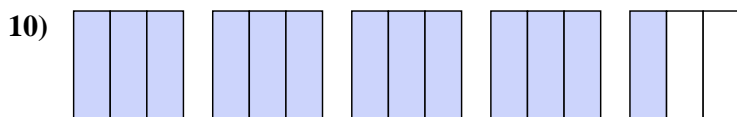
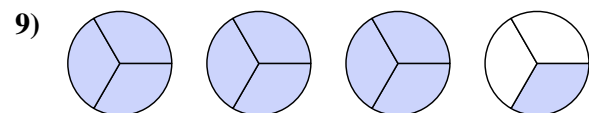
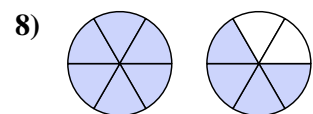
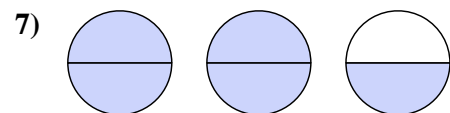
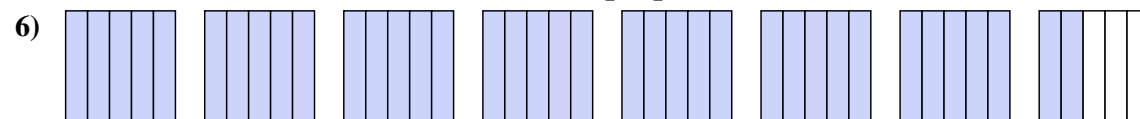




Escribe cada cantidad como un número mixto.



Escribe cada cantidad como una fracción impropia.

**Respuestas**

1.  $3\frac{1}{2}$

2.  $1\frac{2}{3}$

3.  $7\frac{1}{2}$

4.  $1\frac{1}{4}$

5.  $3\frac{1}{4}$

6.  $\frac{37}{5}$

7.  $\frac{5}{2}$

8.  $\frac{10}{6}$

9.  $\frac{10}{3}$

10.  $\frac{13}{3}$

11.  $\frac{16}{6}$







































