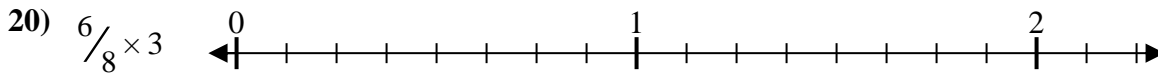
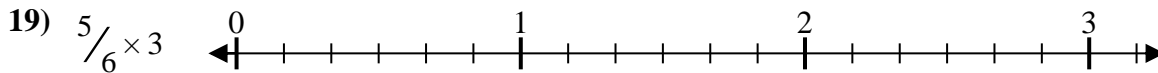
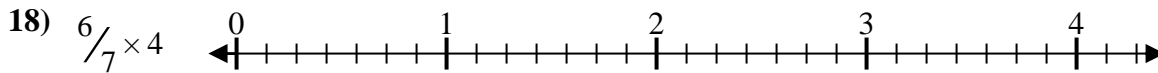
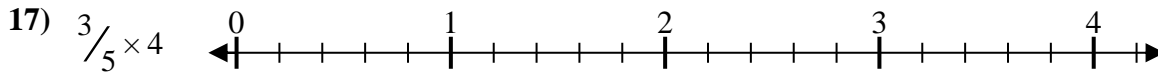
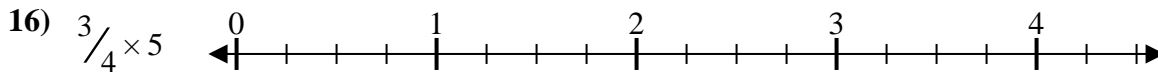
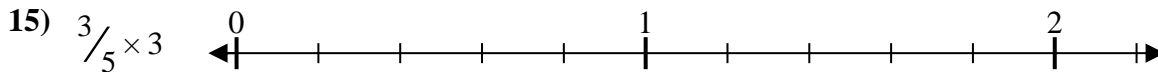
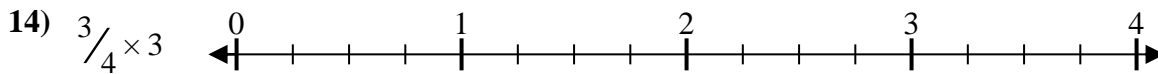
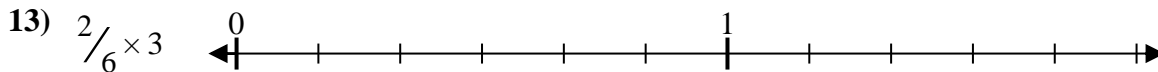
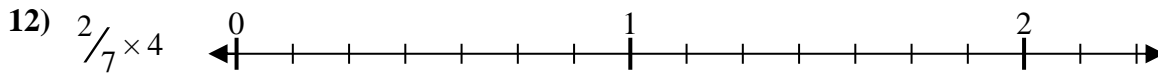
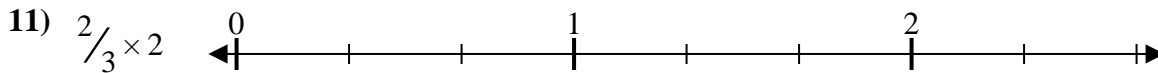
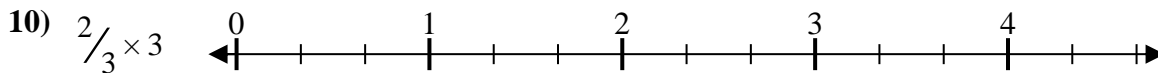
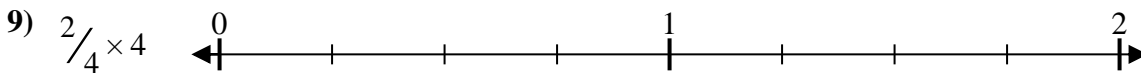
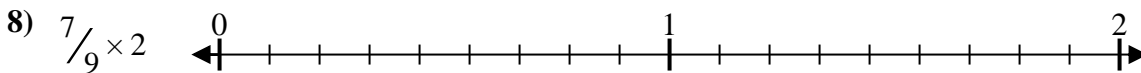
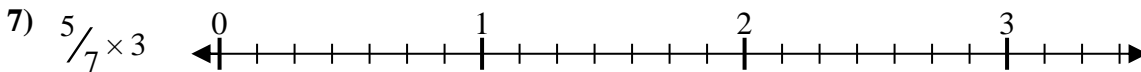
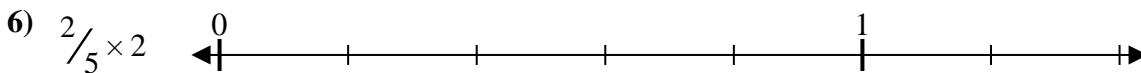
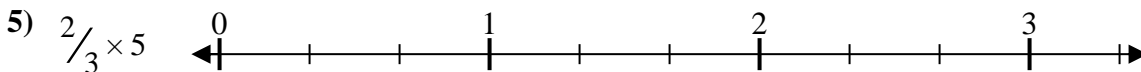
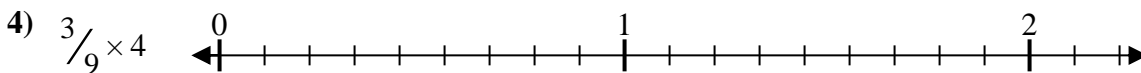
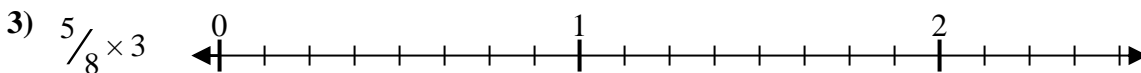
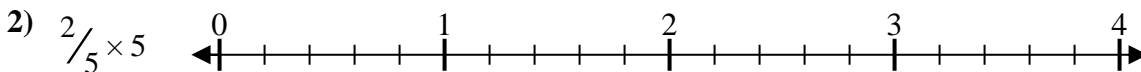
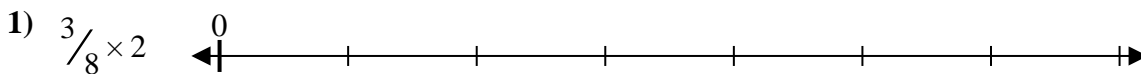




Resuelve cada problema.

Respuestas



1. _____

2. _____

3. _____

4. _____

5. _____

6. _____

7. _____

8. _____

9. _____

10. _____

11. _____

12. _____

13. _____

14. _____

15. _____

16. _____

17. _____

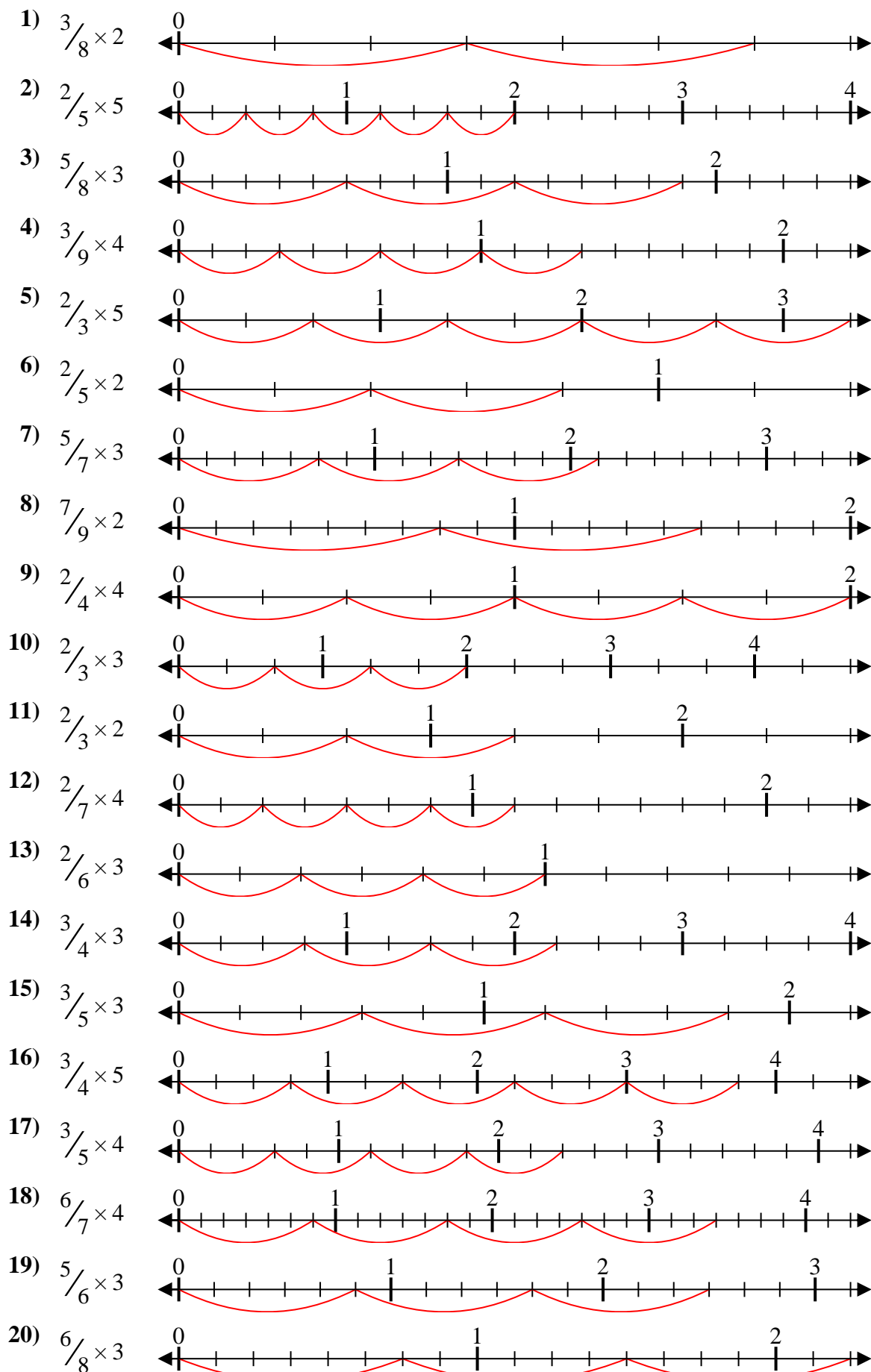
18. _____

19. _____

20. _____



Resuelve cada problema.



Respuestas

1. $\frac{6}{8} = \frac{3}{4}$
2. $\frac{10}{5} = 2$
3. $\frac{15}{8} = 1\frac{7}{8}$
4. $\frac{12}{9} = 1\frac{1}{3}$
5. $\frac{10}{3} = 3\frac{1}{3}$
6. $\frac{4}{5} = \frac{4}{5}$
7. $\frac{15}{7} = 2\frac{1}{7}$
8. $\frac{14}{9} = 1\frac{5}{9}$
9. $\frac{8}{4} = 2$
10. $\frac{6}{3} = 2$
11. $\frac{4}{3} = 1\frac{1}{3}$
12. $\frac{8}{7} = 1\frac{1}{7}$
13. $\frac{6}{6} = 1$
14. $\frac{9}{4} = 2\frac{1}{4}$
15. $\frac{9}{5} = 1\frac{4}{5}$
16. $\frac{15}{4} = 3\frac{3}{4}$
17. $\frac{12}{5} = 2\frac{2}{5}$
18. $\frac{24}{7} = 3\frac{3}{7}$
19. $\frac{15}{6} = 2\frac{1}{2}$
20. $\frac{18}{8} = 2\frac{1}{4}$