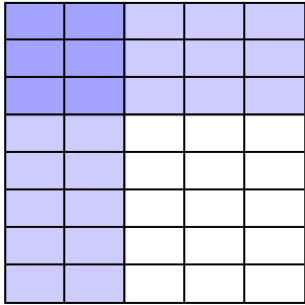


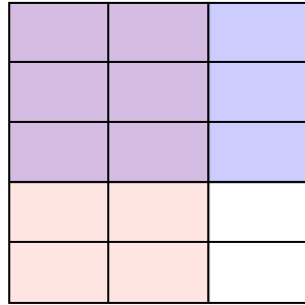


Usa la caja para mostrar de manera visual cómo multiplicar dos fracciones.

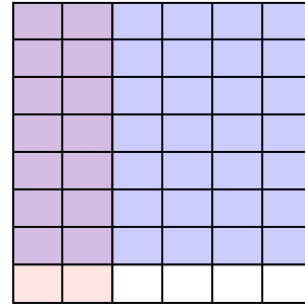
Ej) $\frac{2}{5} \times \frac{3}{8} =$



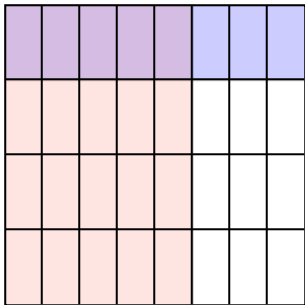
1) $\frac{2}{3} \times \frac{3}{5} =$



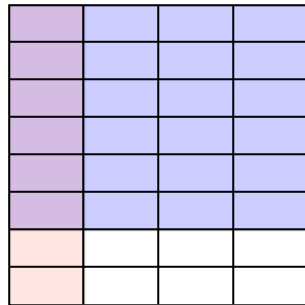
2) $\frac{2}{6} \times \frac{7}{8} =$



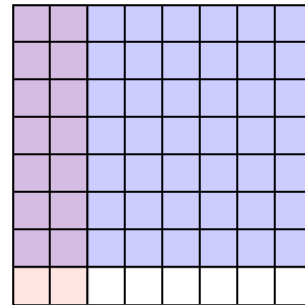
3) $\frac{5}{8} \times \frac{1}{4} =$



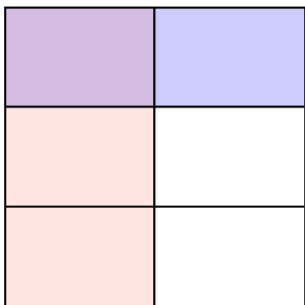
4) $\frac{1}{4} \times \frac{6}{8} =$




5) $\frac{2}{8} \times \frac{7}{8} =$



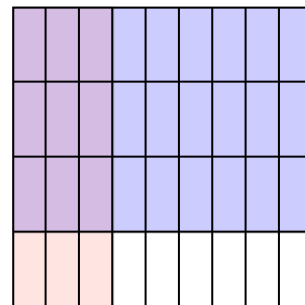
6) $\frac{1}{2} \times \frac{1}{3} =$



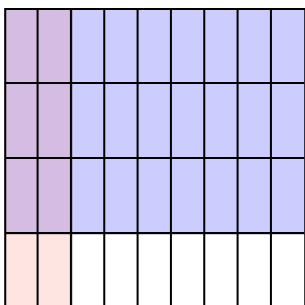
7) $\frac{1}{2} \times \frac{4}{7} =$



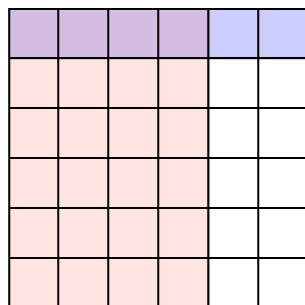
8) $\frac{3}{9} \times \frac{3}{4} =$



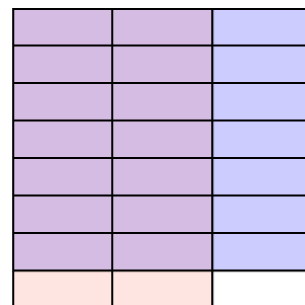
9) $\frac{2}{9} \times \frac{3}{4} =$



10) $\frac{4}{6} \times \frac{1}{6} =$



11) $\frac{2}{3} \times \frac{7}{8} =$



Respuestas

- Ej. $\frac{6}{40}$
- 1. $\frac{6}{15}$
- 2. $\frac{14}{48}$
- 3. $\frac{5}{32}$
- 4. $\frac{6}{32}$
- 5. $\frac{14}{64}$
- 6. $\frac{1}{6}$
- 7. $\frac{4}{14}$
- 8. $\frac{9}{36}$
- 9. $\frac{6}{36}$
- 10. $\frac{4}{36}$
- 11. $\frac{14}{24}$