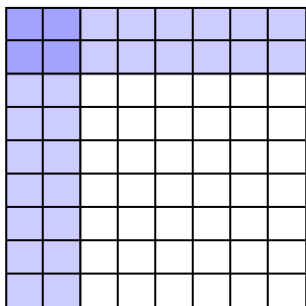




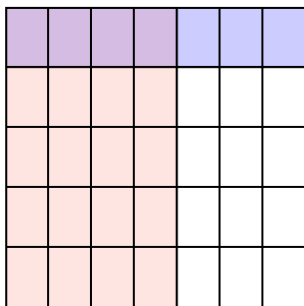


Usa la caja para mostrar de manera visual cómo multiplicar dos fracciones.

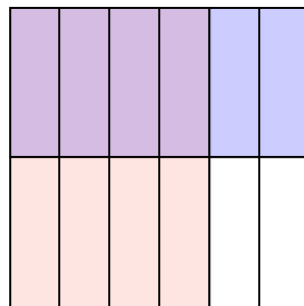
Ej)  $\frac{2}{8} \times \frac{2}{9} =$



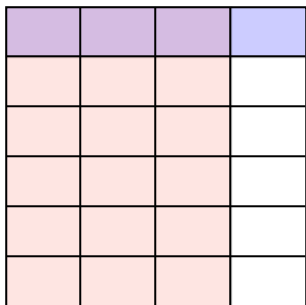
1)  $\frac{4}{7} \times \frac{1}{5} =$



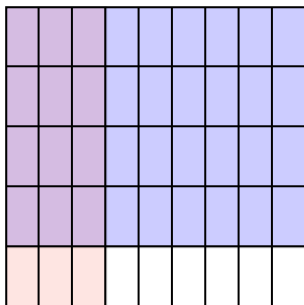
2)  $\frac{4}{6} \times \frac{1}{2} =$



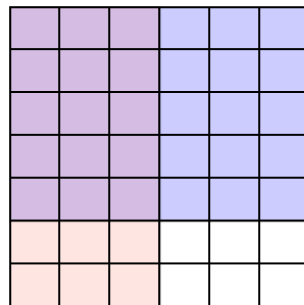
3)  $\frac{3}{4} \times \frac{1}{6} =$




4)  $\frac{3}{9} \times \frac{4}{5} =$



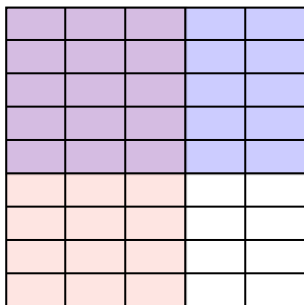
5)  $\frac{3}{6} \times \frac{5}{7} =$




6)  $\frac{1}{3} \times \frac{2}{3} =$



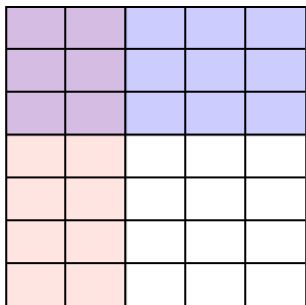
7)  $\frac{3}{5} \times \frac{5}{9} =$




8)  $\frac{3}{7} \times \frac{7}{8} =$



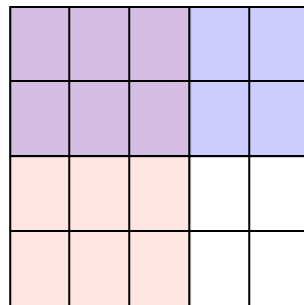
9)  $\frac{2}{5} \times \frac{3}{7} =$



10)  $\frac{1}{2} \times \frac{6}{8} =$



11)  $\frac{3}{5} \times \frac{2}{4} =$



**Respuestas**

Ej.  $\frac{4}{72}$

1.  $\frac{4}{35}$

2.  $\frac{4}{12}$

3.  $\frac{3}{24}$

4.  $\frac{12}{45}$

5.  $\frac{15}{42}$

6.  $\frac{2}{9}$

7.  $\frac{15}{45}$

8.  $\frac{21}{56}$

9.  $\frac{6}{35}$

10.  $\frac{6}{16}$

11.  $\frac{6}{20}$