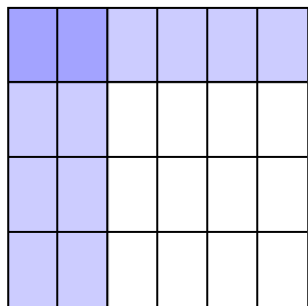


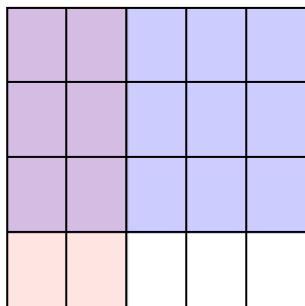


Usa la caja para mostrar de manera visual cómo multiplicar dos fracciones.

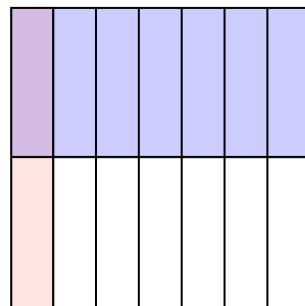
Ej) $\frac{2}{6} \times \frac{1}{4} =$



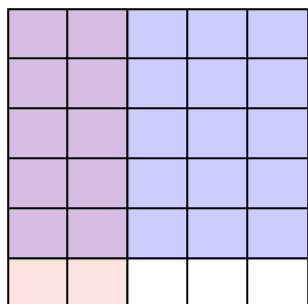
1) $\frac{2}{5} \times \frac{3}{4} =$



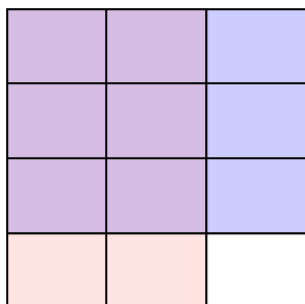
2) $\frac{1}{7} \times \frac{1}{2} =$



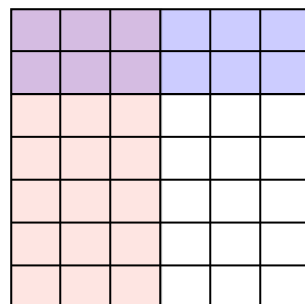
3) $\frac{2}{5} \times \frac{5}{6} =$




4) $\frac{2}{3} \times \frac{3}{4} =$



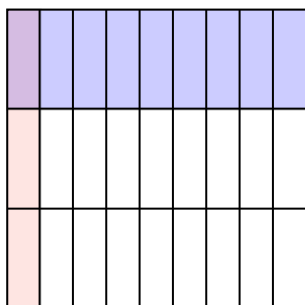
5) $\frac{3}{6} \times \frac{2}{7} =$



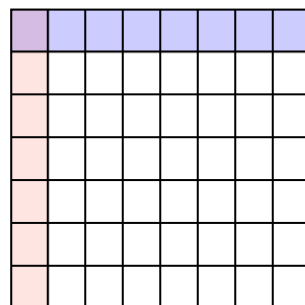
6) $\frac{1}{2} \times \frac{1}{2} =$



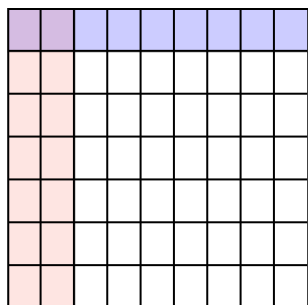
7) $\frac{1}{9} \times \frac{1}{3} =$



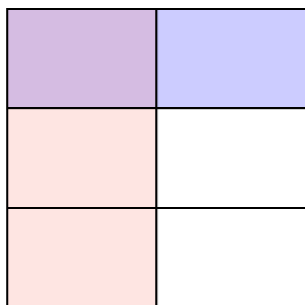
8) $\frac{1}{8} \times \frac{1}{7} =$



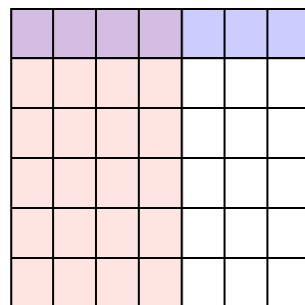
9) $\frac{2}{9} \times \frac{1}{7} =$



10) $\frac{1}{2} \times \frac{1}{3} =$



11) $\frac{4}{7} \times \frac{1}{6} =$



Respuestas

Ej. $\frac{2}{24}$

1. $\frac{6}{20}$

2. $\frac{1}{14}$

3. $\frac{10}{30}$

4. $\frac{6}{12}$

5. $\frac{6}{42}$

6. $\frac{1}{4}$

7. $\frac{1}{27}$

8. $\frac{1}{56}$

9. $\frac{2}{63}$

10. $\frac{1}{6}$

11. $\frac{4}{42}$