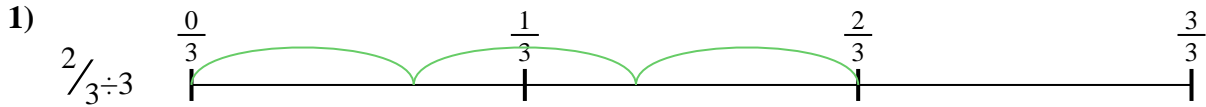





Usa la recta numérica para resolver cada problema. El primero ya está marcado como ejemplo.

**Respuestas**




1. \_\_\_\_\_

2. \_\_\_\_\_




3. \_\_\_\_\_

4. \_\_\_\_\_



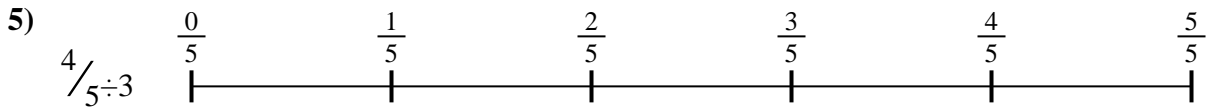
5. \_\_\_\_\_

6. \_\_\_\_\_

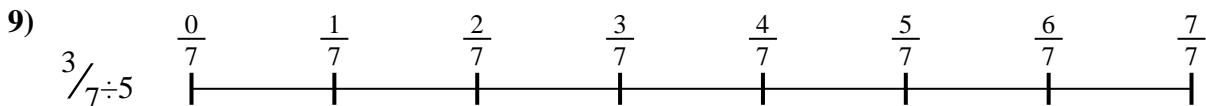
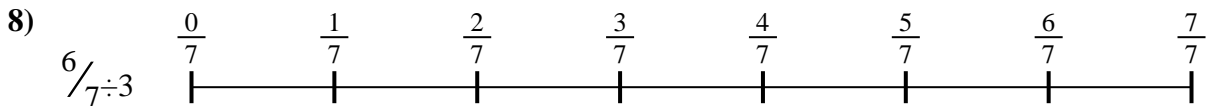
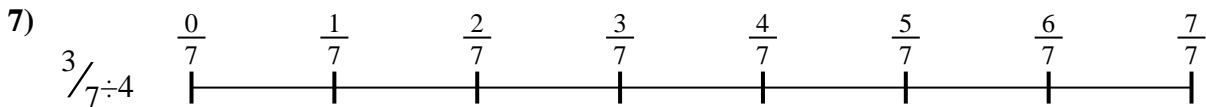



7. \_\_\_\_\_

8. \_\_\_\_\_



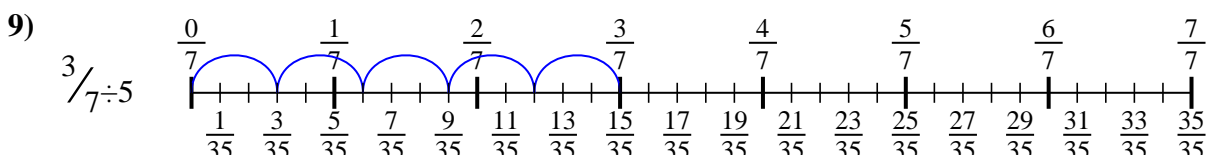
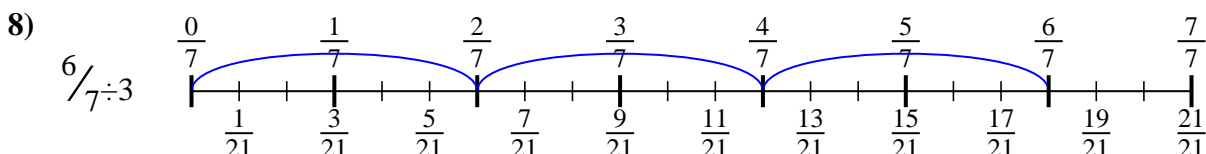
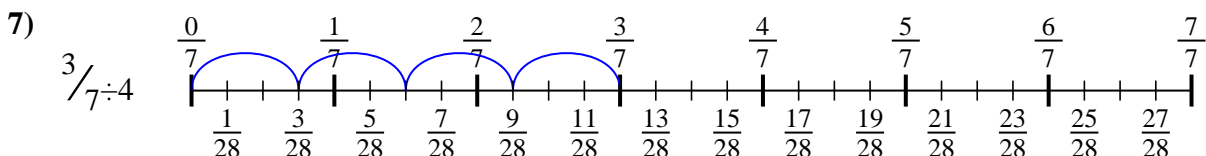
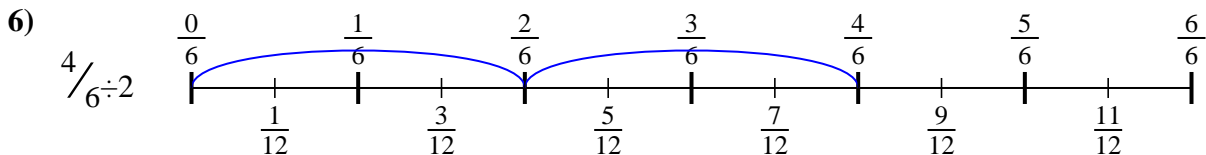
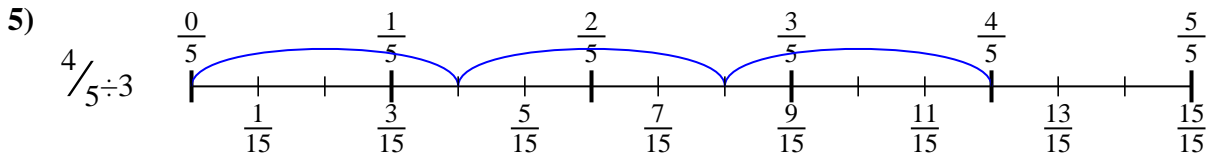
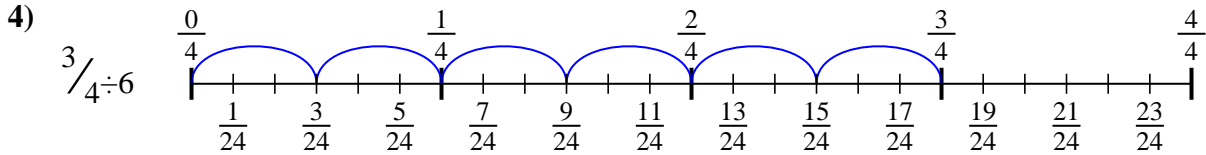
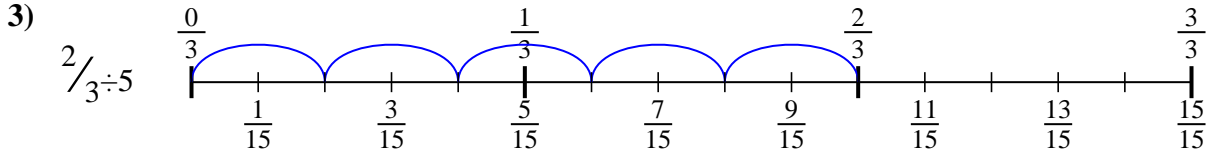
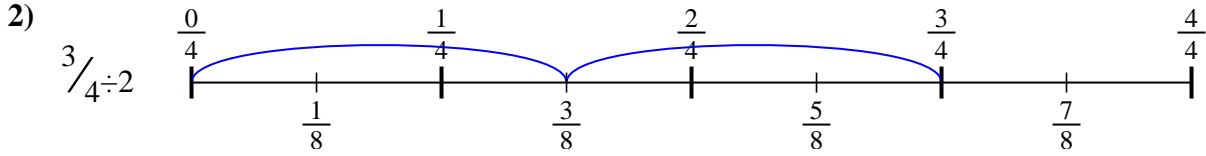
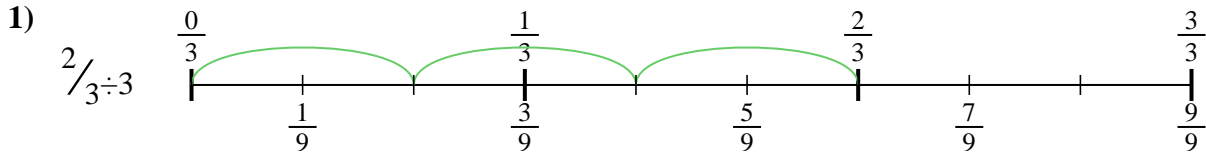
9. \_\_\_\_\_





Usa la recta numérica para resolver cada problema. El primero ya está marcado como ejemplo.

**Respuestas**



1.  $\frac{2}{9}$
2.  $\frac{3}{8}$
3.  $\frac{2}{15}$
4.  $\frac{3}{24}$
5.  $\frac{4}{15}$
6.  $\frac{4}{12}$
7.  $\frac{3}{28}$
8.  $\frac{6}{21}$
9.  $\frac{3}{35}$



Usa la recta numérica para resolver cada problema. El primero ya está marcado como ejemplo.

Respuestas

$\frac{3}{24}$

$\frac{2}{15}$

$\frac{3}{28}$

$\frac{2}{9}$

$\frac{6}{21}$

$\frac{4}{12}$

$\frac{3}{8}$

$\frac{3}{35}$

$\frac{4}{15}$

1. \_\_\_\_\_

2. \_\_\_\_\_

3. \_\_\_\_\_

4. \_\_\_\_\_

5. \_\_\_\_\_

6. \_\_\_\_\_

7. \_\_\_\_\_

8. \_\_\_\_\_

9. \_\_\_\_\_

