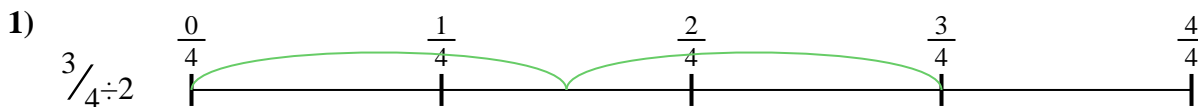





Usa la recta numérica para resolver cada problema. El primero ya está marcado como ejemplo.

Respuestas



1. _____

2. _____



3. _____

4. _____



5. _____

6. _____


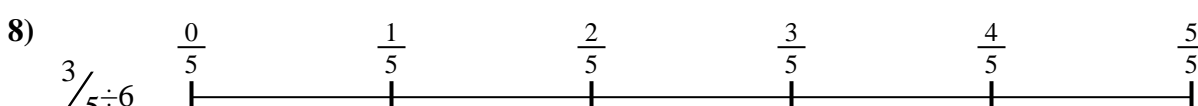
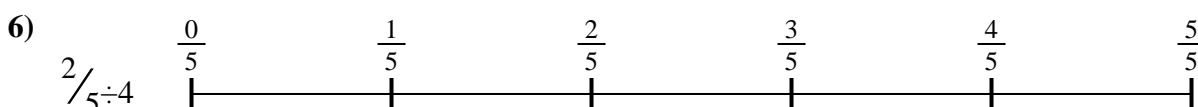


7. _____

8. _____



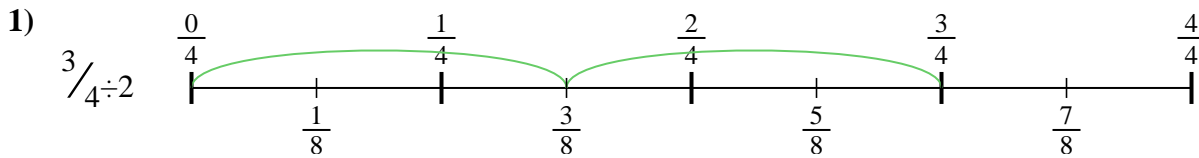
9. _____



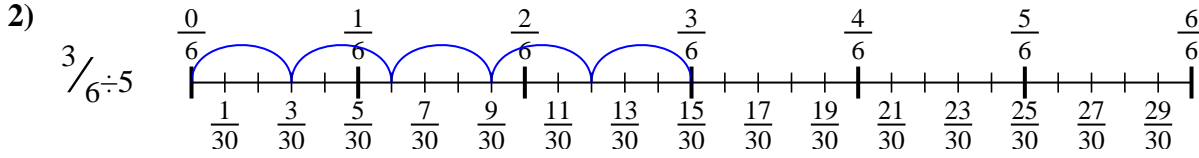


Usa la recta numérica para resolver cada problema. El primero ya está marcado como ejemplo.

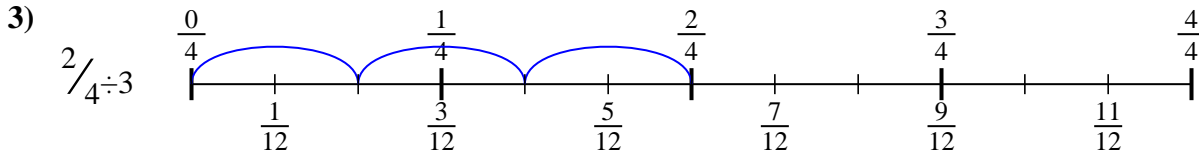
Respuestas



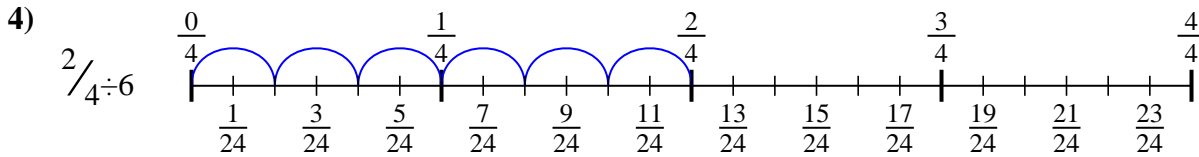
1. $\frac{3}{8}$



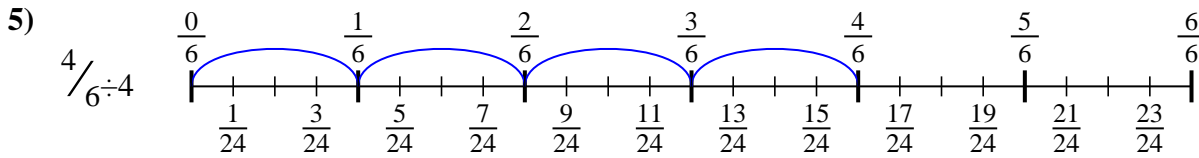
2. $\frac{3}{30}$



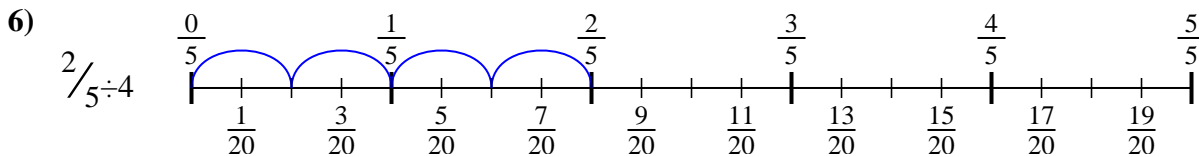
3. $\frac{2}{12}$



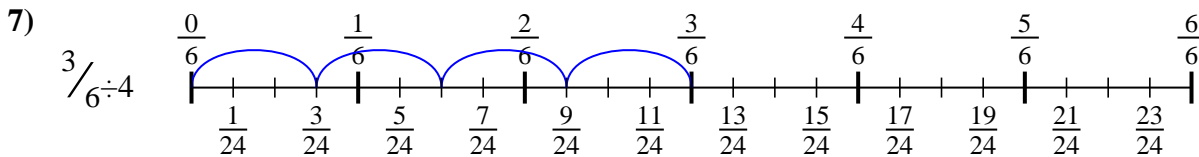
4. $\frac{2}{24}$



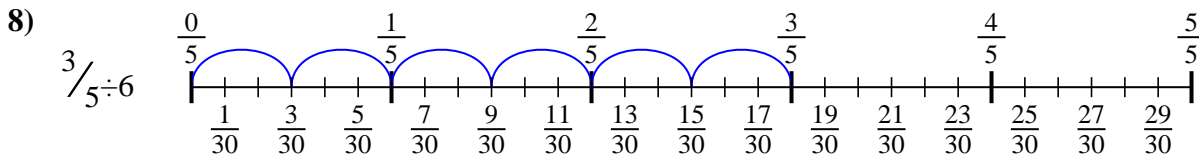
5. $\frac{4}{24}$



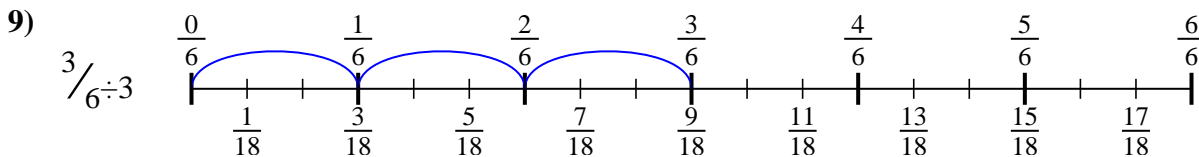
6. $\frac{2}{20}$



7. $\frac{3}{24}$



8. $\frac{3}{30}$



9. $\frac{3}{18}$



Usa la recta numérica para resolver cada problema. El primero ya está marcado como ejemplo.

Respuestas

$\frac{3}{24}$

$\frac{3}{30}$

$\frac{2}{20}$

$\frac{3}{30}$

$\frac{4}{24}$

$\frac{2}{12}$

$\frac{3}{8}$

$\frac{2}{24}$

$\frac{3}{18}$

1. _____

2. _____

3. _____

4. _____

5. _____

6. _____

7. _____

8. _____

9. _____

