



Usa la recta numérica para resolver cada problema. El primero ya está marcado como ejemplo.

**Respuestas**



1. \_\_\_\_\_

2. \_\_\_\_\_




3. \_\_\_\_\_

4. \_\_\_\_\_



5. \_\_\_\_\_

6. \_\_\_\_\_


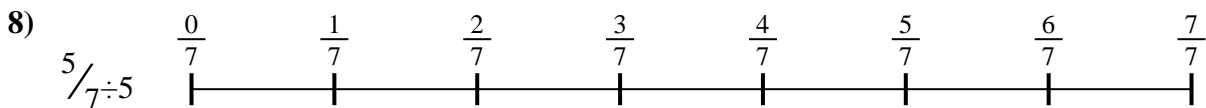
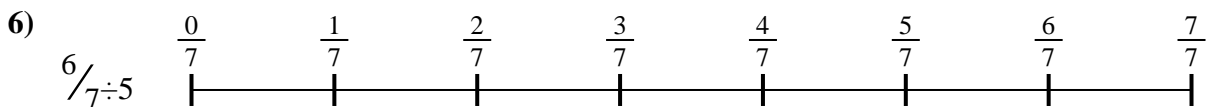


7. \_\_\_\_\_

8. \_\_\_\_\_



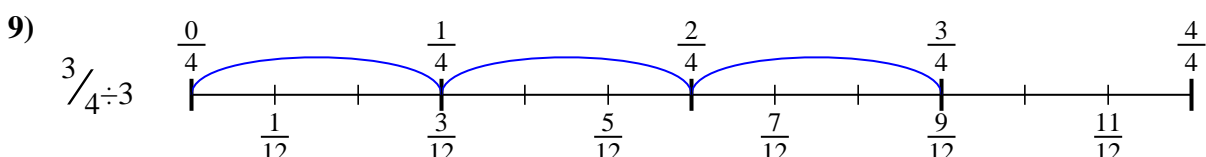
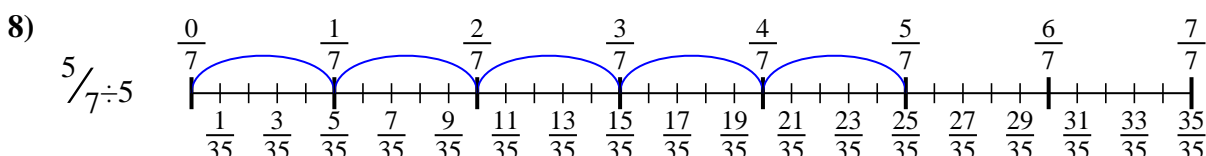
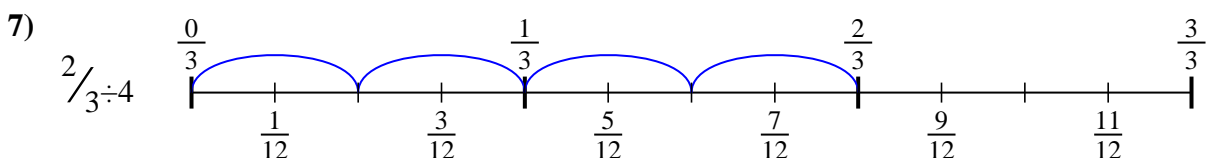
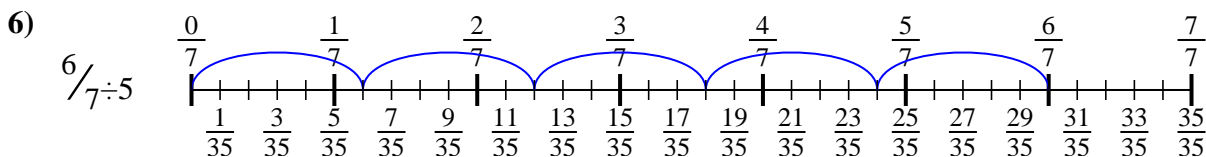
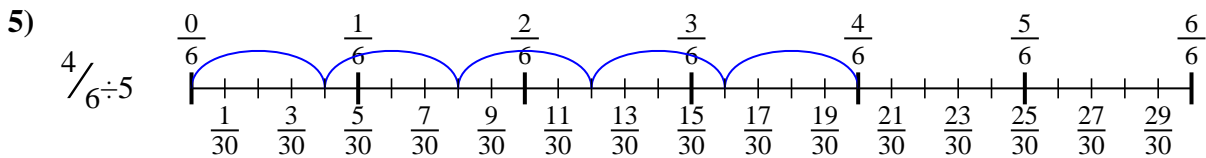
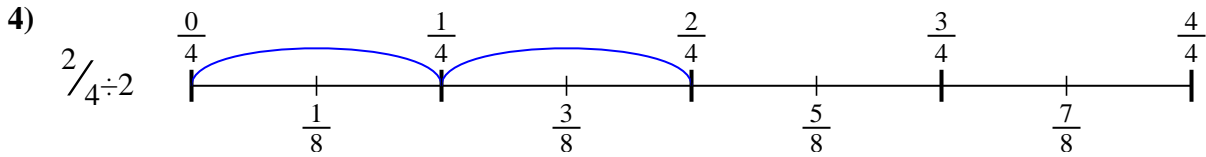
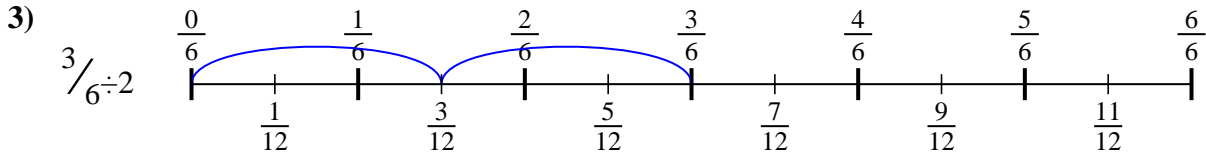
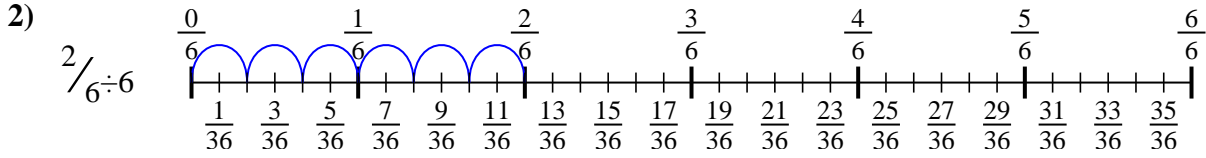
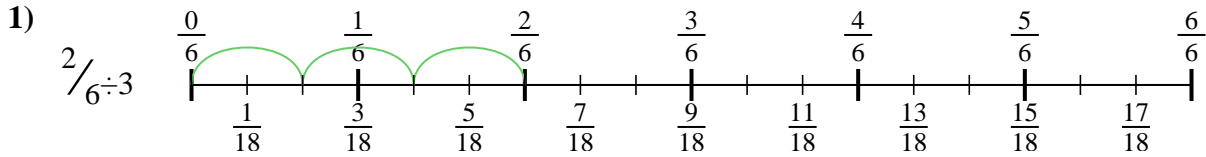
9. \_\_\_\_\_





Usa la recta numérica para resolver cada problema. El primero ya está marcado como ejemplo.

**Respuestas**



1.  $\frac{2}{18}$
2.  $\frac{2}{36}$
3.  $\frac{3}{12}$
4.  $\frac{2}{8}$
5.  $\frac{4}{30}$
6.  $\frac{6}{35}$
7.  $\frac{2}{12}$
8.  $\frac{5}{35}$
9.  $\frac{3}{12}$



Usa la recta numérica para resolver cada problema. El primero ya está marcado como ejemplo.

Respuestas

$\frac{2}{18}$

$\frac{2}{8}$

$\frac{2}{36}$

$\frac{3}{12}$

$\frac{6}{35}$

$\frac{5}{35}$

$\frac{4}{30}$

$\frac{2}{12}$

$\frac{3}{12}$

1. \_\_\_\_\_

2. \_\_\_\_\_

3. \_\_\_\_\_

4. \_\_\_\_\_

5. \_\_\_\_\_

6. \_\_\_\_\_

7. \_\_\_\_\_

8. \_\_\_\_\_

9. \_\_\_\_\_

