



Usa la línea numérica para resolver cada problema. El primero ya está hecho como ejemplo

Respuestas

1. _____

2. _____



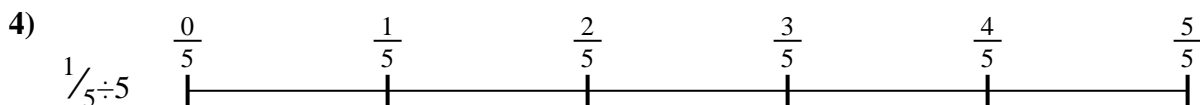
3. _____

4. _____



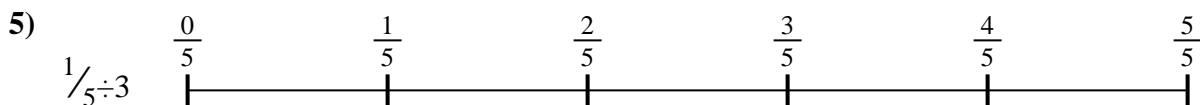
5. _____

6. _____

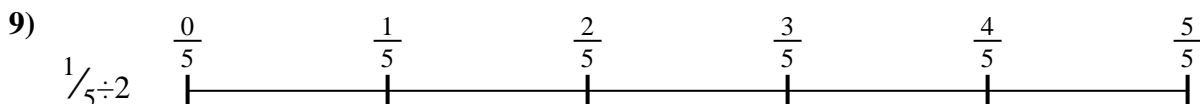
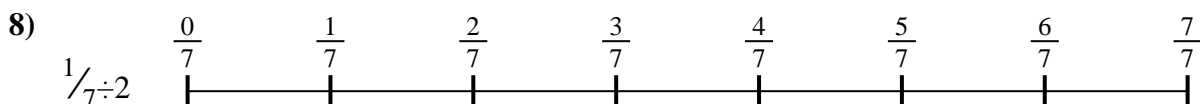




7. _____

8. _____



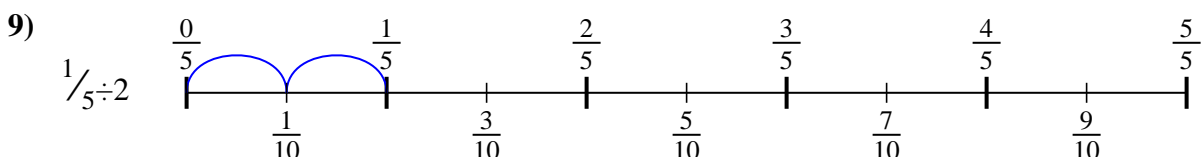
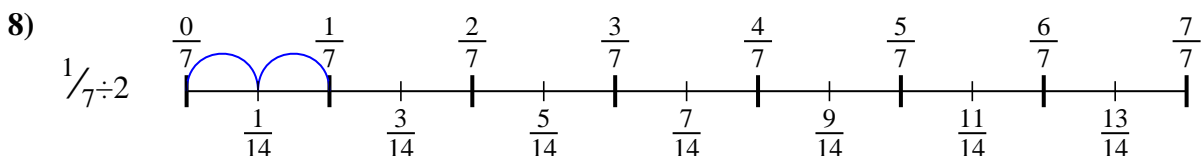
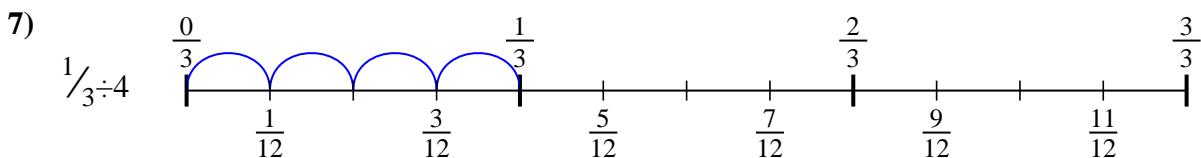
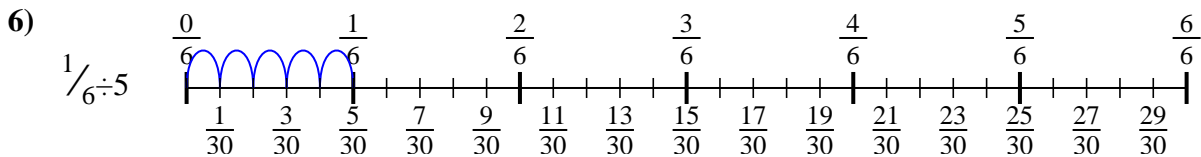
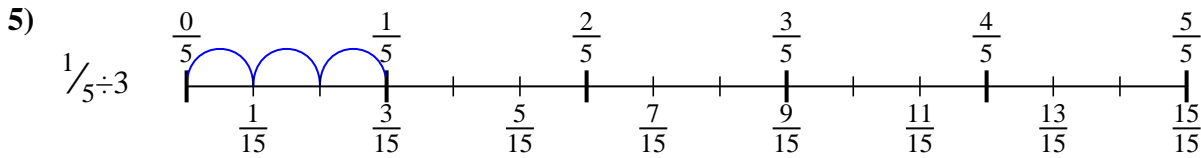
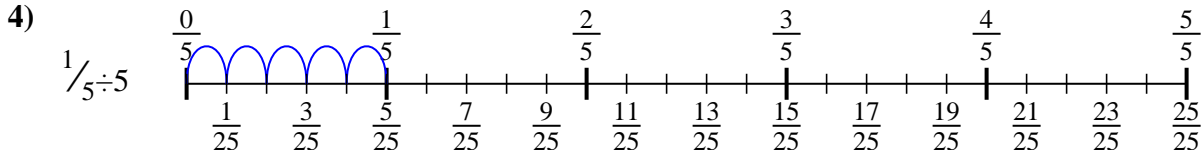
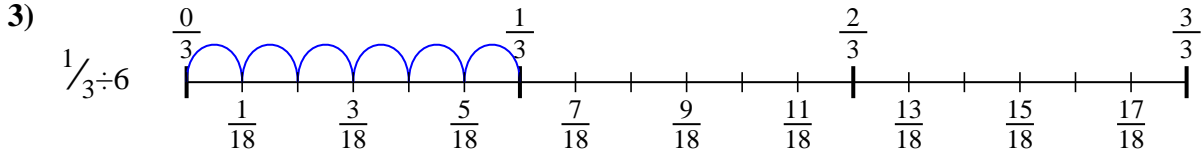
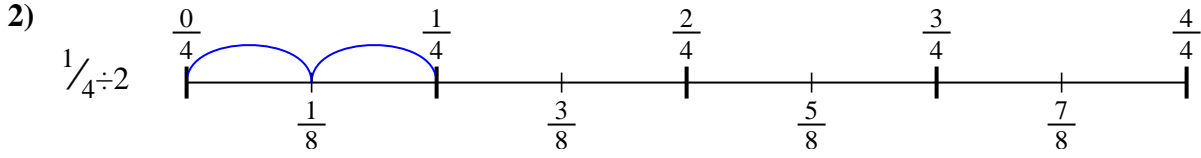
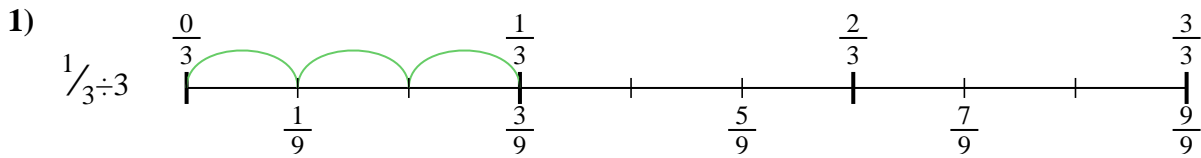
9. _____





Usa la línea numérica para resolver cada problema. El primero ya está hecho como ejemplo

Respuestas



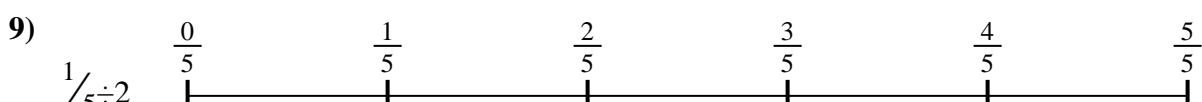
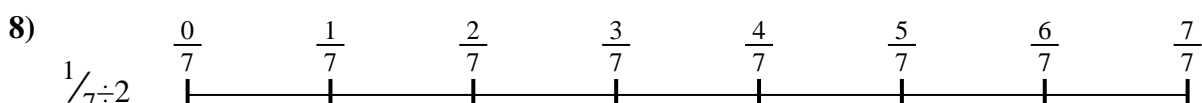
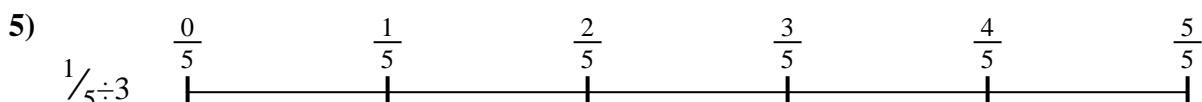
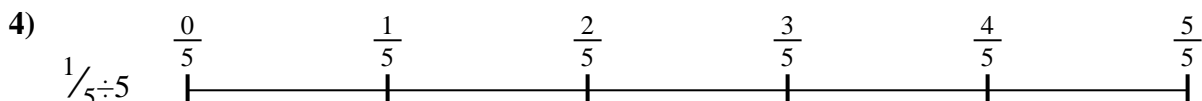
1. $\frac{1}{9}$
2. $\frac{1}{8}$
3. $\frac{1}{18}$
4. $\frac{1}{25}$
5. $\frac{1}{15}$
6. $\frac{1}{30}$
7. $\frac{1}{12}$
8. $\frac{1}{14}$
9. $\frac{1}{10}$



Usa la línea numérica para resolver cada problema. El primero ya está hecho como ejemplo

Respuestas

| | | | |
|----------------|---------------|----------------|----------------|
| $\frac{1}{14}$ | $\frac{1}{9}$ | $\frac{1}{30}$ | $\frac{1}{10}$ |
| $\frac{1}{18}$ | $\frac{1}{8}$ | $\frac{1}{25}$ | $\frac{1}{15}$ |
| $\frac{1}{12}$ | | | |



1. _____
2. _____
3. _____
4. _____
5. _____
6. _____
7. _____
8. _____
9. _____