




Usa la línea numérica para resolver cada problema. El primero ya está hecho como ejemplo

**Respuestas**



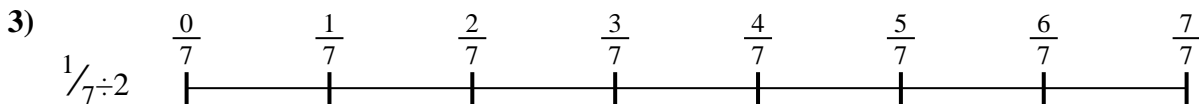
1. \_\_\_\_\_

2. \_\_\_\_\_



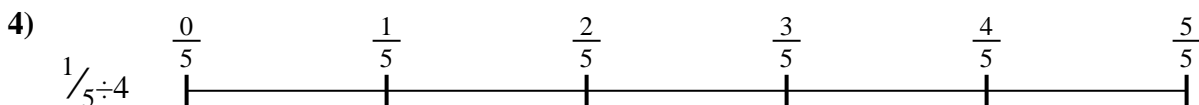
3. \_\_\_\_\_

4. \_\_\_\_\_



5. \_\_\_\_\_

6. \_\_\_\_\_

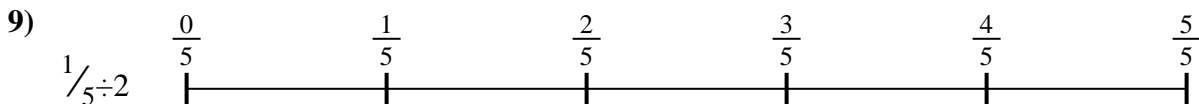
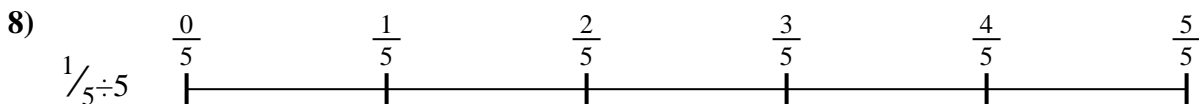



7. \_\_\_\_\_

8. \_\_\_\_\_



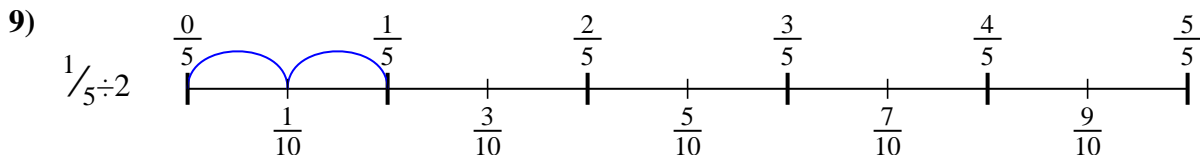
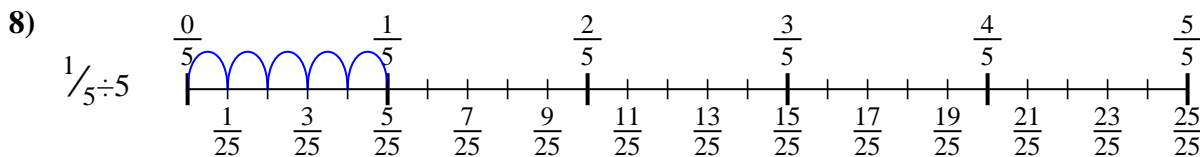
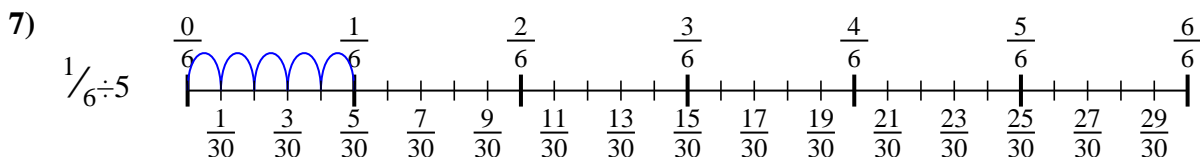
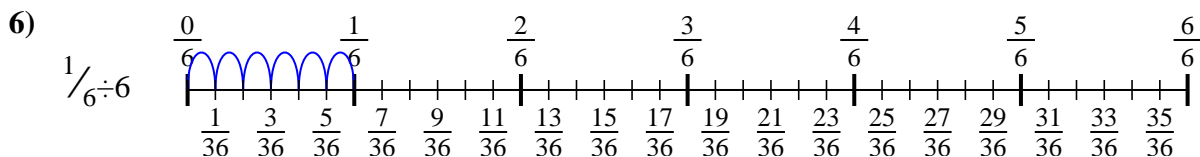
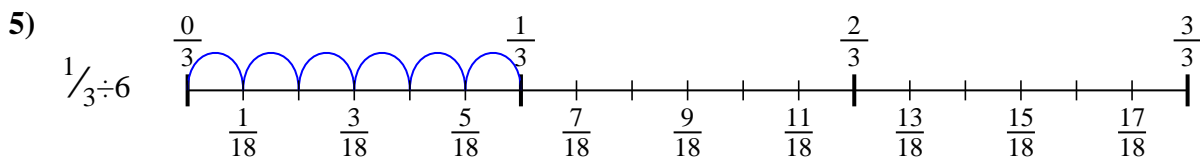
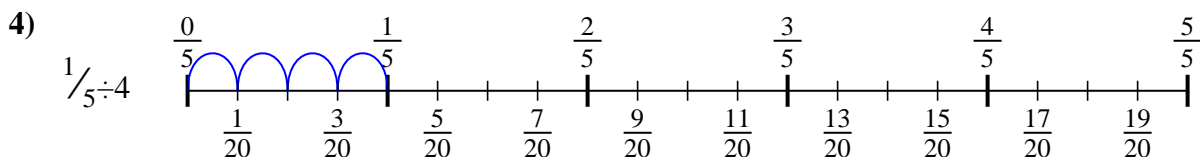
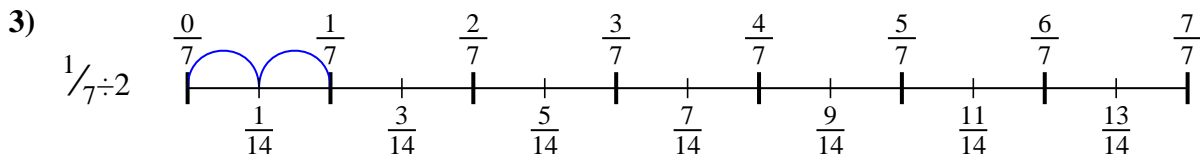
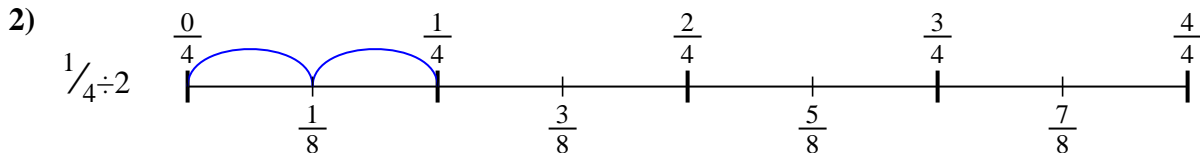
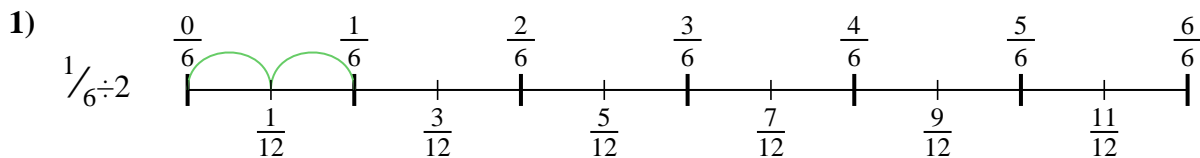
9. \_\_\_\_\_





Usa la línea numérica para resolver cada problema. El primero ya está hecho como ejemplo

**Respuestas**



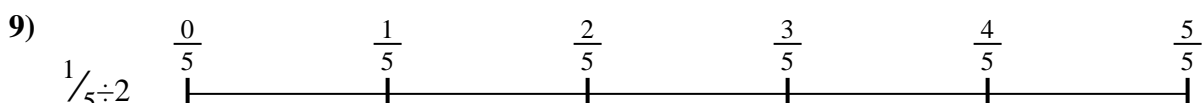
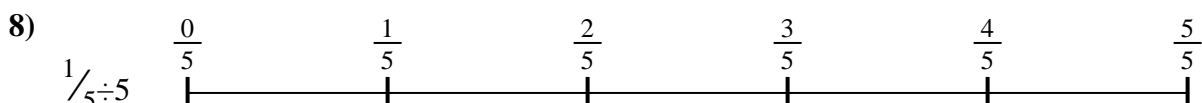

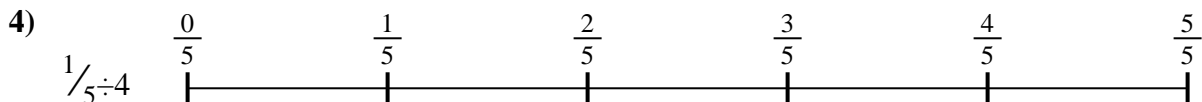
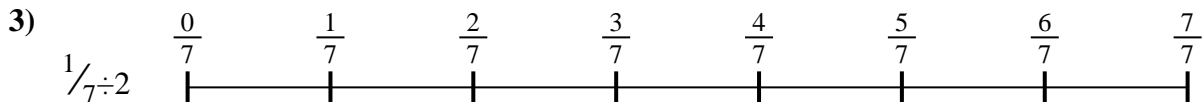
1.  $\frac{1}{12}$
2.  $\frac{1}{8}$
3.  $\frac{1}{14}$
4.  $\frac{1}{20}$
5.  $\frac{1}{18}$
6.  $\frac{1}{36}$
7.  $\frac{1}{30}$
8.  $\frac{1}{25}$
9.  $\frac{1}{10}$



Usa la línea numérica para resolver cada problema. El primero ya está hecho como ejemplo

**Respuestas**

$\frac{1}{30}$	$\frac{1}{12}$	$\frac{1}{36}$	$\frac{1}{8}$
$\frac{1}{18}$	$\frac{1}{25}$	$\frac{1}{14}$	$\frac{1}{20}$
$\frac{1}{10}$			



1. \_\_\_\_\_
2. \_\_\_\_\_
3. \_\_\_\_\_
4. \_\_\_\_\_
5. \_\_\_\_\_
6. \_\_\_\_\_
7. \_\_\_\_\_
8. \_\_\_\_\_
9. \_\_\_\_\_