



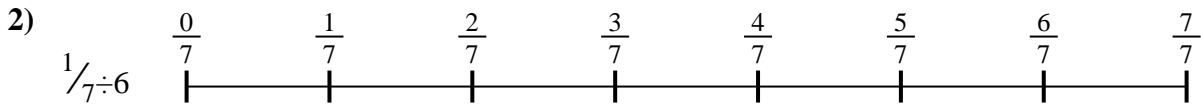
Usa la línea numérica para resolver cada problema. El primero ya está hecho como ejemplo

**Respuestas**



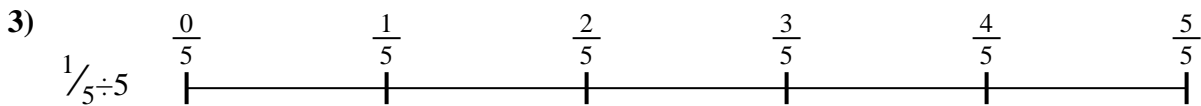
1. \_\_\_\_\_

2. \_\_\_\_\_



3. \_\_\_\_\_

4. \_\_\_\_\_



5. \_\_\_\_\_

6. \_\_\_\_\_

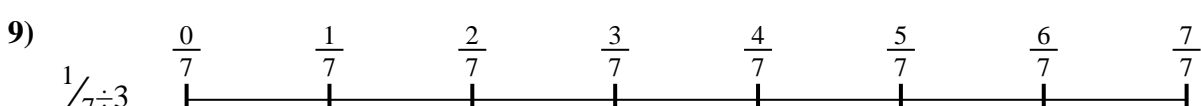
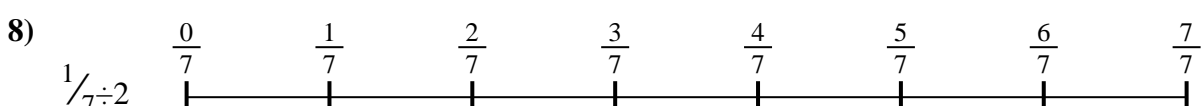



7. \_\_\_\_\_

8. \_\_\_\_\_



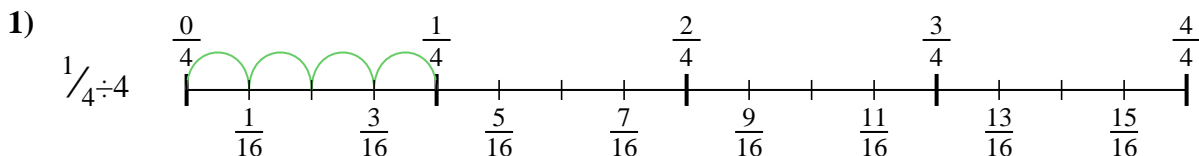
9. \_\_\_\_\_



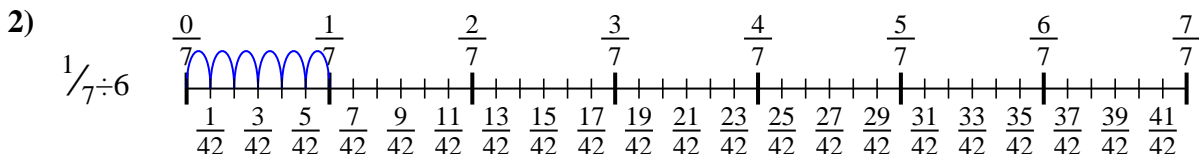


Usa la línea numérica para resolver cada problema. El primero ya está hecho como ejemplo

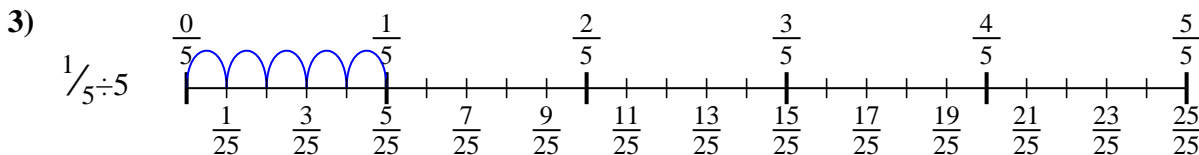
**Respuestas**



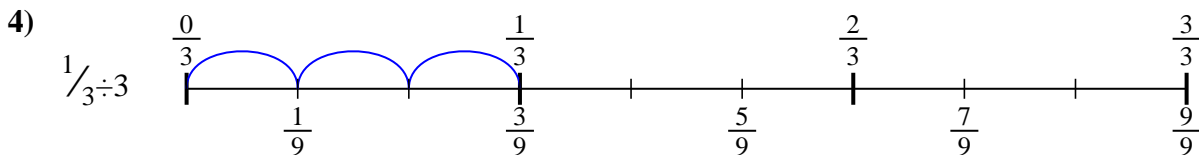
1.  $\frac{1}{16}$



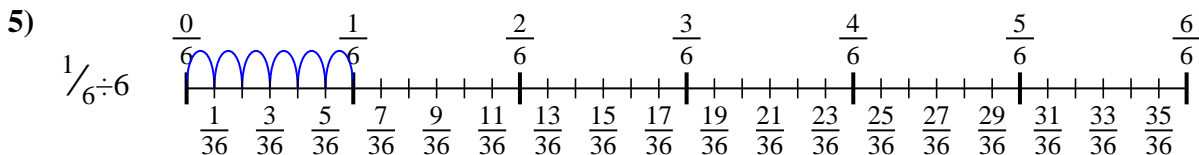
2.  $\frac{1}{42}$



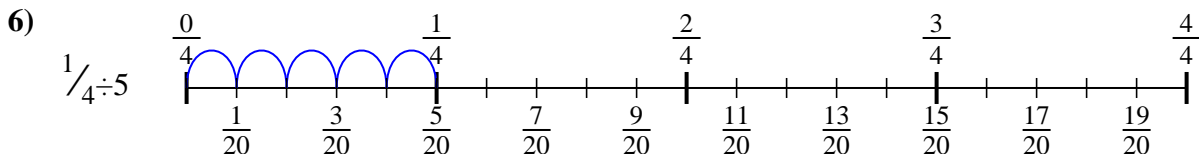
3.  $\frac{1}{25}$



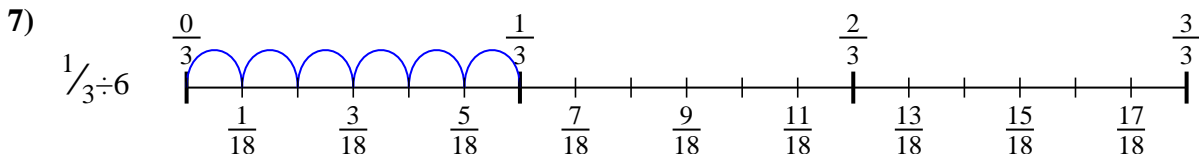
4.  $\frac{1}{9}$



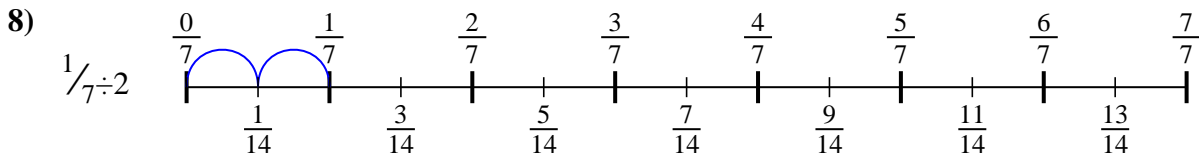
5.  $\frac{1}{36}$



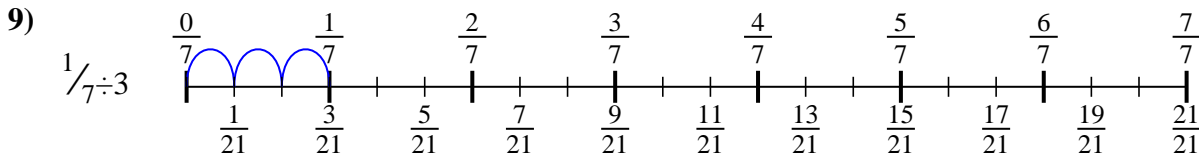
6.  $\frac{1}{20}$



7.  $\frac{1}{18}$



8.  $\frac{1}{14}$



9.  $\frac{1}{21}$



Usa la línea numérica para resolver cada problema. El primero ya está hecho como ejemplo

**Respuestas**

$\frac{1}{42}$

$\frac{1}{20}$

$\frac{1}{14}$

$\frac{1}{21}$

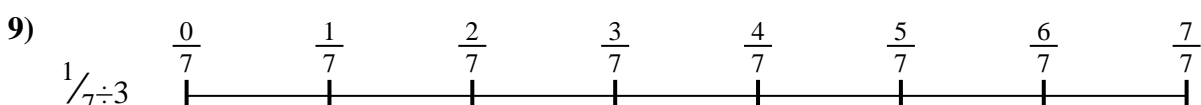
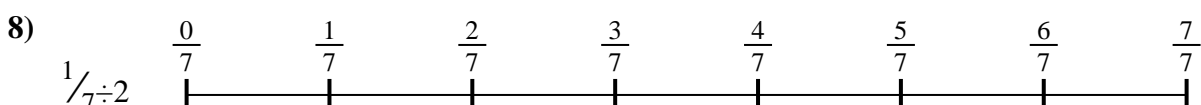


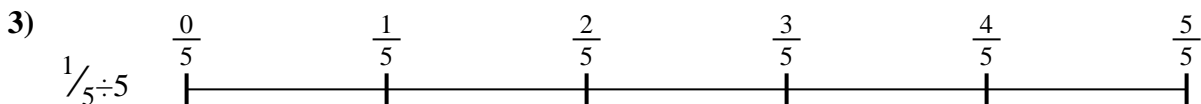
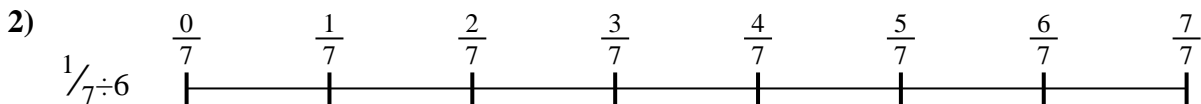
$\frac{1}{36}$

$\frac{1}{25}$

$\frac{1}{16}$

$\frac{1}{9}$

$\frac{1}{18}$



1. \_\_\_\_\_

2. \_\_\_\_\_

3. \_\_\_\_\_

4. \_\_\_\_\_

5. \_\_\_\_\_

6. \_\_\_\_\_

7. \_\_\_\_\_

8. \_\_\_\_\_

9. \_\_\_\_\_