



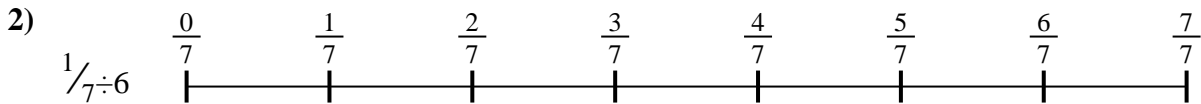
Usa la línea numérica para resolver cada problema. El primero ya está hecho como ejemplo

Respuestas



1. _____

2. _____



3. _____

4. _____



5. _____

6. _____


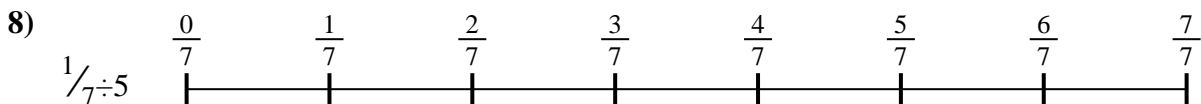
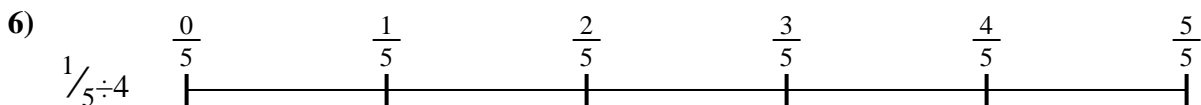


7. _____

8. _____



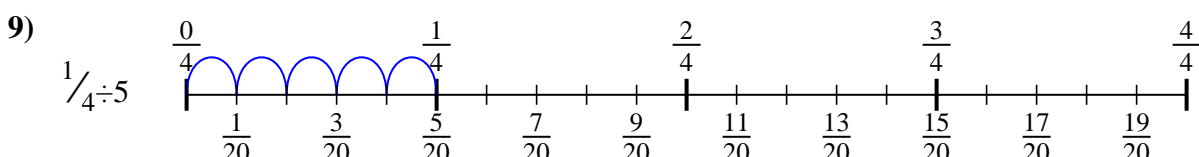
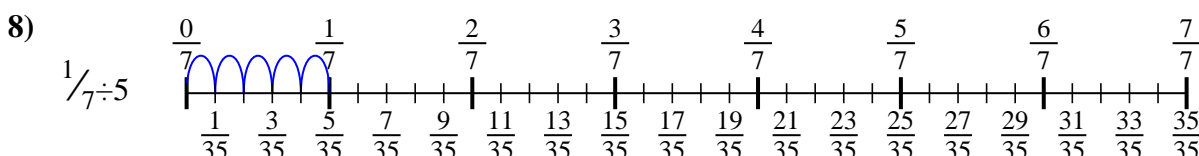
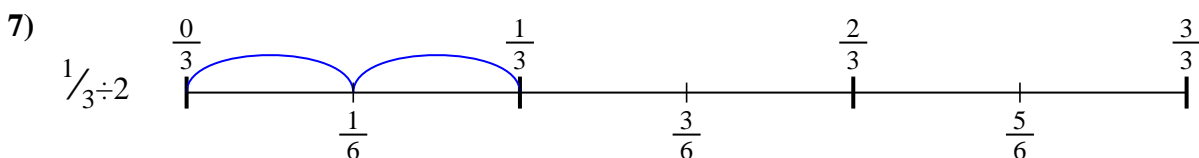
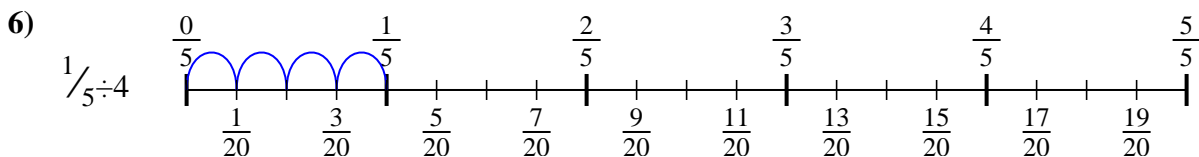
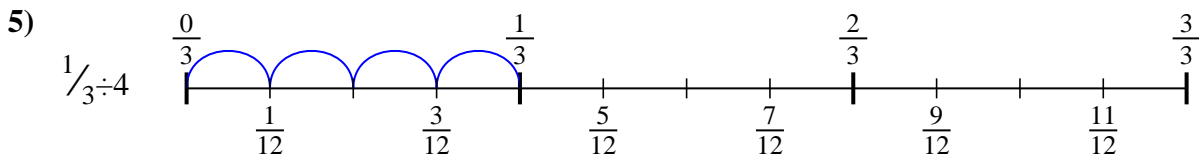
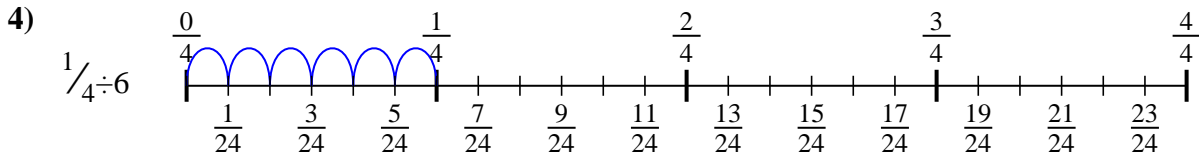
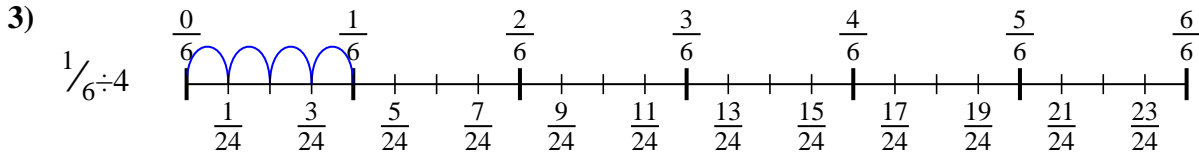
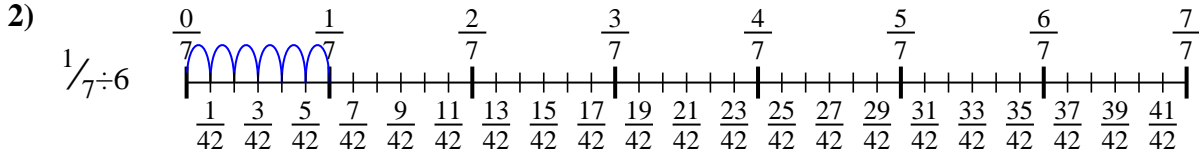
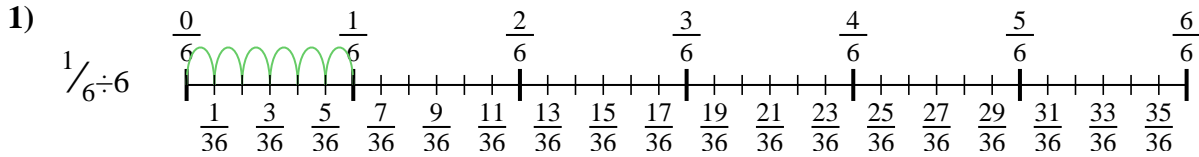
9. _____





Usa la línea numérica para resolver cada problema. El primero ya está hecho como ejemplo

Respuestas



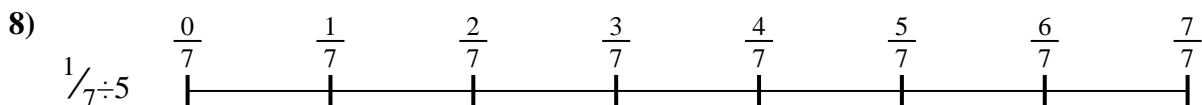

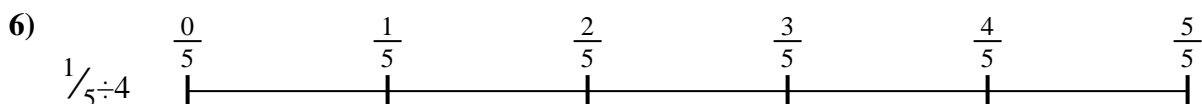

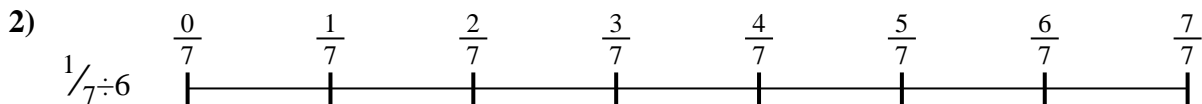
1. $\frac{1}{36}$
2. $\frac{1}{42}$
3. $\frac{1}{24}$
4. $\frac{1}{24}$
5. $\frac{1}{12}$
6. $\frac{1}{20}$
7. $\frac{1}{6}$
8. $\frac{1}{35}$
9. $\frac{1}{20}$



Usa la línea numérica para resolver cada problema. El primero ya está hecho como ejemplo

Respuestas

$\frac{1}{35}$	$\frac{1}{6}$	$\frac{1}{24}$	$\frac{1}{42}$
$\frac{1}{24}$	$\frac{1}{36}$	$\frac{1}{20}$	$\frac{1}{20}$
$\frac{1}{12}$			



1. _____
2. _____
3. _____
4. _____
5. _____
6. _____
7. _____
8. _____
9. _____