



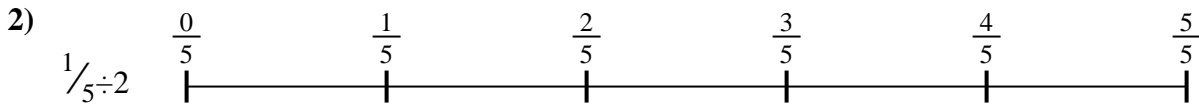
Usa la línea numérica para resolver cada problema. El primero ya está hecho como ejemplo

**Respuestas**



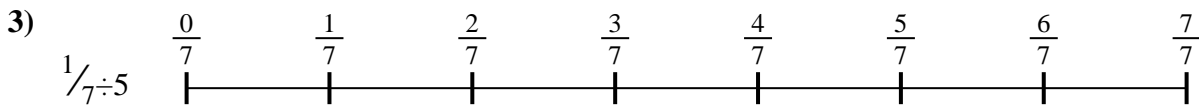
1. \_\_\_\_\_

2. \_\_\_\_\_



3. \_\_\_\_\_

4. \_\_\_\_\_



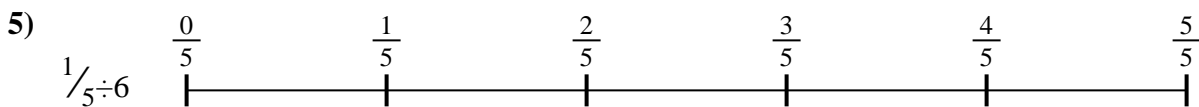
5. \_\_\_\_\_

6. \_\_\_\_\_

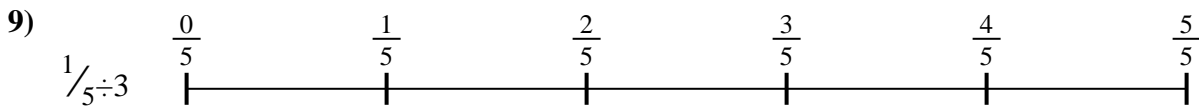


7. \_\_\_\_\_

8. \_\_\_\_\_



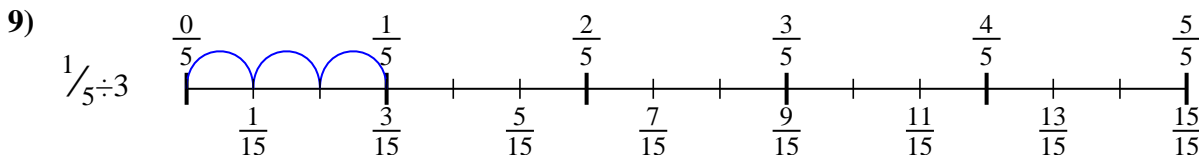
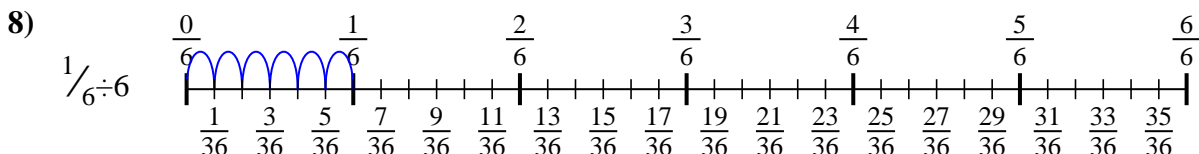
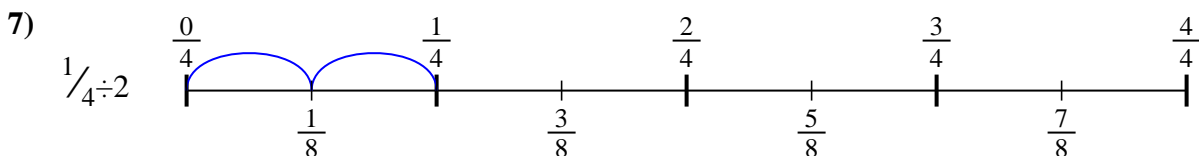
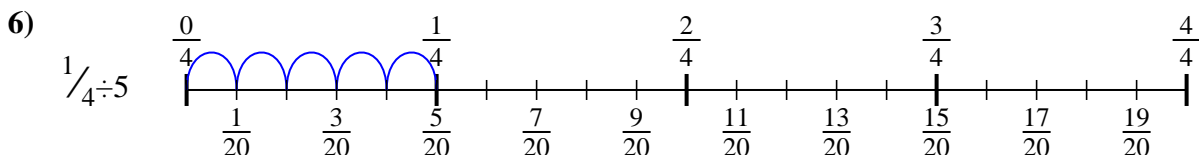
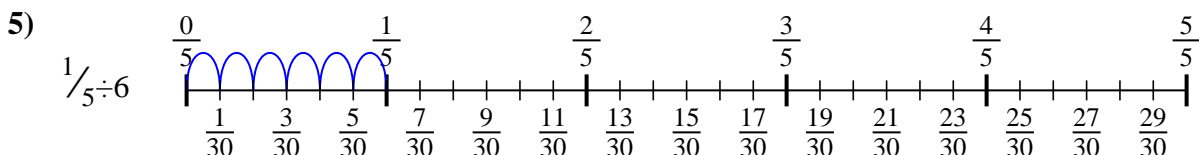
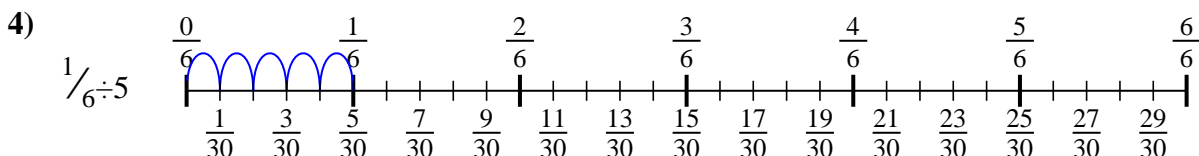
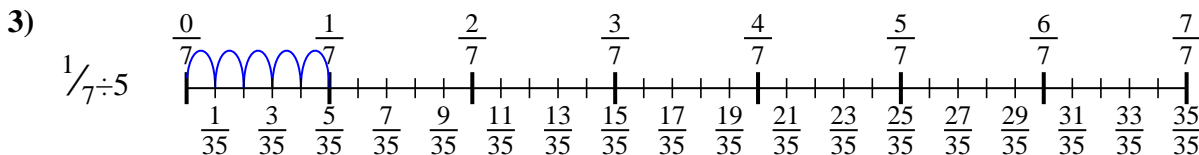
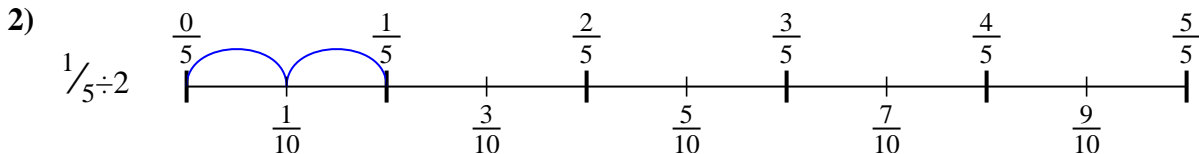
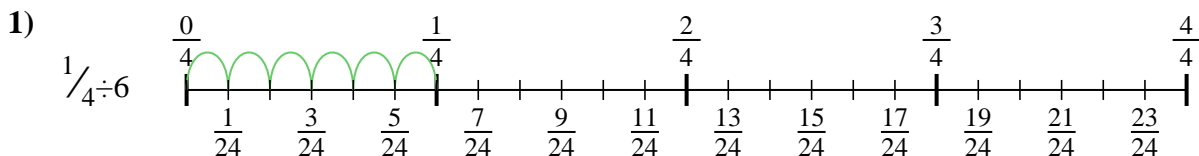
9. \_\_\_\_\_





Usa la línea numérica para resolver cada problema. El primero ya está hecho como ejemplo

**Respuestas**



1.  $\frac{1}{24}$

2.  $\frac{1}{10}$

3.  $\frac{1}{35}$

4.  $\frac{1}{30}$

5.  $\frac{1}{30}$

6.  $\frac{1}{20}$

7.  $\frac{1}{8}$

8.  $\frac{1}{36}$

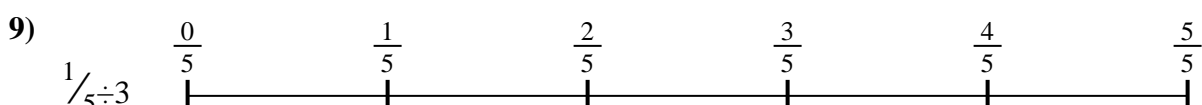

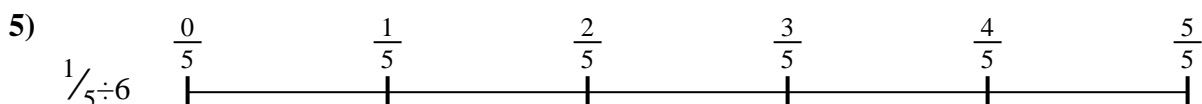
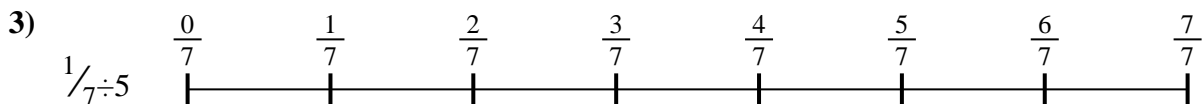
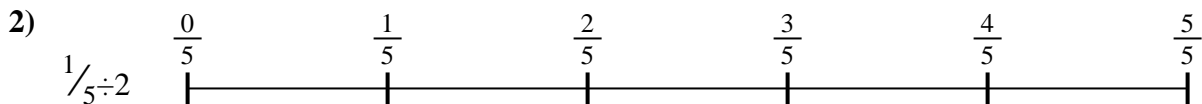
9.  $\frac{1}{15}$



Usa la línea numérica para resolver cada problema. El primero ya está hecho como ejemplo

**Respuestas**

- |                |                |                |                |
|----------------|----------------|----------------|----------------|
| $\frac{1}{30}$ | $\frac{1}{36}$ | $\frac{1}{20}$ | $\frac{1}{8}$  |
| $\frac{1}{15}$ | $\frac{1}{24}$ | $\frac{1}{30}$ | $\frac{1}{35}$ |
| $\frac{1}{10}$ |                |                |                |



1. \_\_\_\_\_
2. \_\_\_\_\_
3. \_\_\_\_\_
4. \_\_\_\_\_
5. \_\_\_\_\_
6. \_\_\_\_\_
7. \_\_\_\_\_
8. \_\_\_\_\_
9. \_\_\_\_\_