


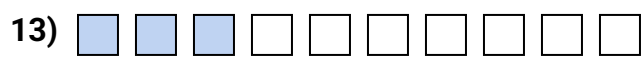
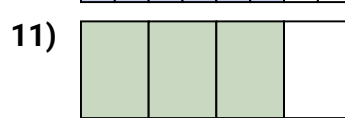
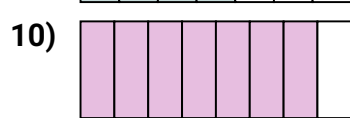
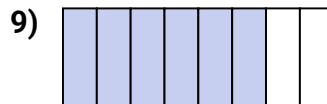
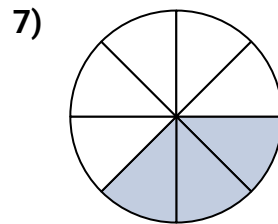
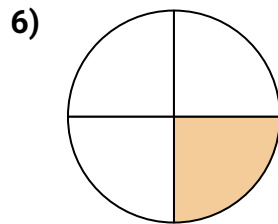
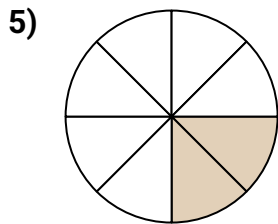
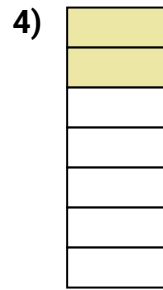

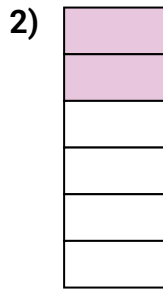





Determina si el área sombreada es 'más', 'menos' o 'igual' que la mitad.

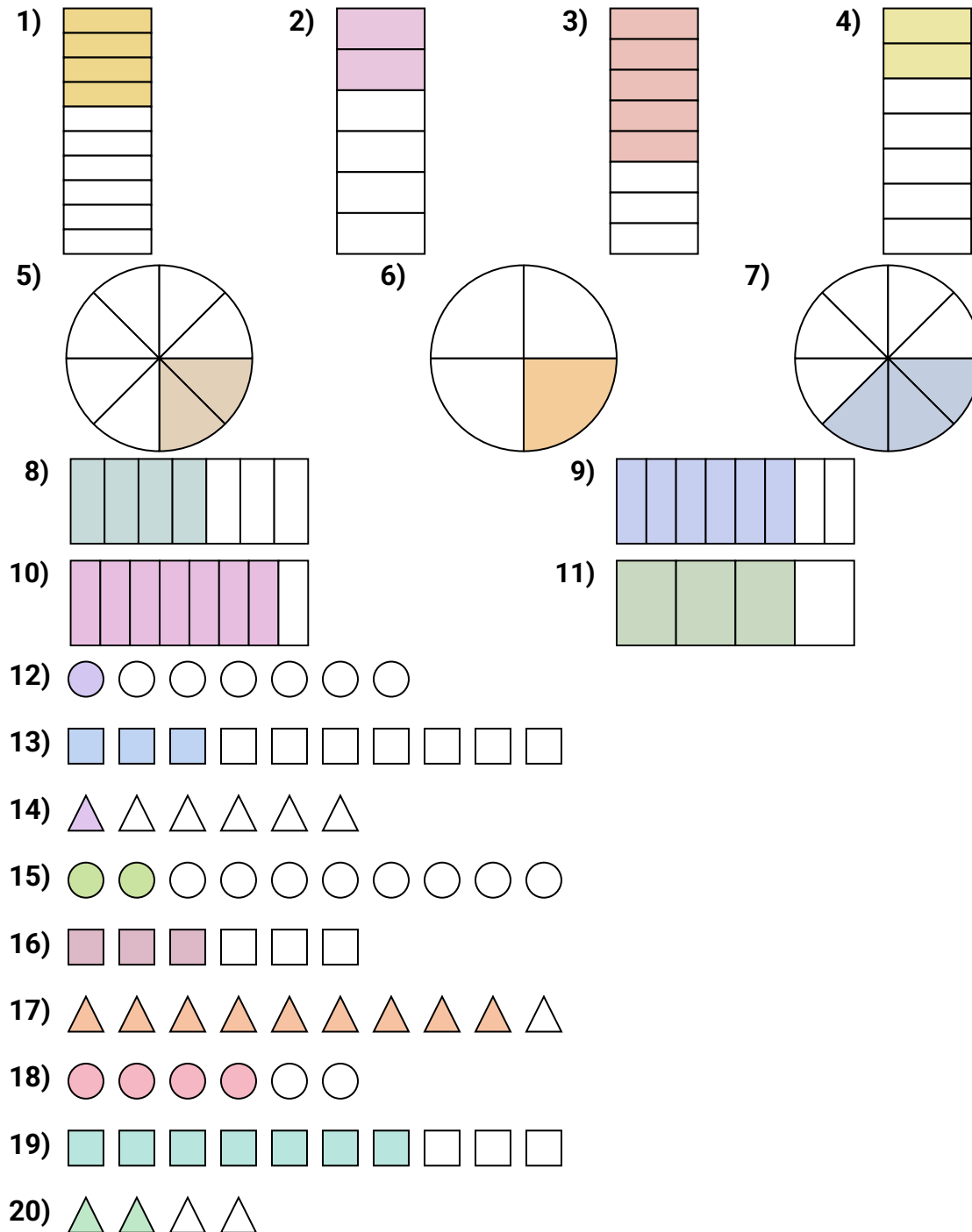
### Respuestas



1. \_\_\_\_\_
2. \_\_\_\_\_
3. \_\_\_\_\_
4. \_\_\_\_\_
5. \_\_\_\_\_
6. \_\_\_\_\_
7. \_\_\_\_\_
8. \_\_\_\_\_
9. \_\_\_\_\_
10. \_\_\_\_\_
11. \_\_\_\_\_
12. \_\_\_\_\_
13. \_\_\_\_\_
14. \_\_\_\_\_
15. \_\_\_\_\_
16. \_\_\_\_\_
17. \_\_\_\_\_
18. \_\_\_\_\_
19. \_\_\_\_\_
20. \_\_\_\_\_



Determina si el área sombreada es 'más', 'menos' o 'igual' que la mitad.

**Respuestas**

1. **menor**
2. **menor**
3. **mayor**
4. **menor**
5. **menor**
6. **menor**
7. **menor**
8. **mayor**
9. **mayor**
10. **mayor**
11. **mayor**
12. **menor**
13. **menor**
14. **menor**
15. **menor**
16. **igual**
17. **mayor**
18. **mayor**
19. **mayor**
20. **igual**