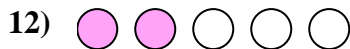
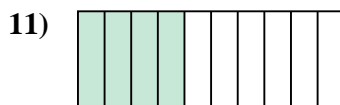


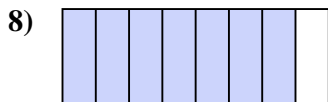
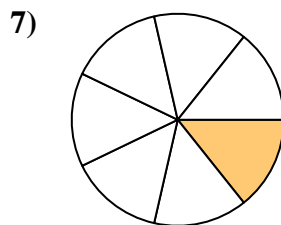
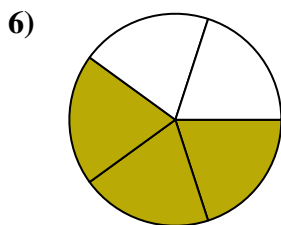
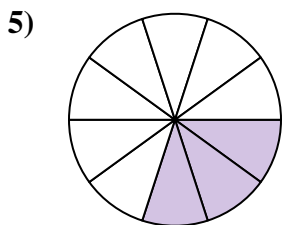

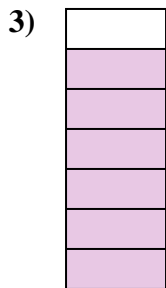






Determina si el área sombreada es 'más', 'menos' o 'igual' que la mitad.

**Respuestas**

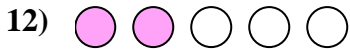
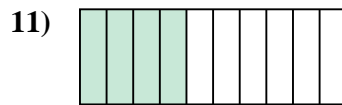
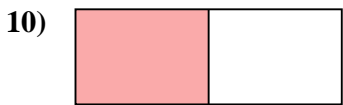
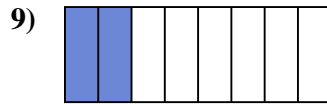
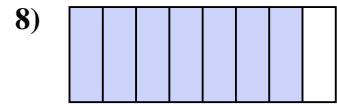
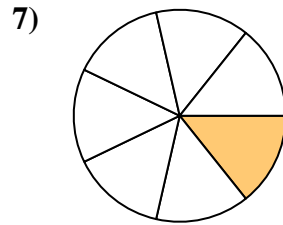
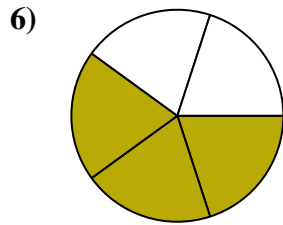
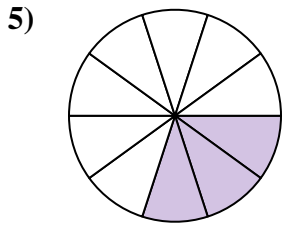

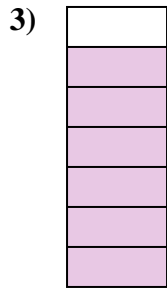




1. \_\_\_\_\_
2. \_\_\_\_\_
3. \_\_\_\_\_
4. \_\_\_\_\_
5. \_\_\_\_\_
6. \_\_\_\_\_
7. \_\_\_\_\_
8. \_\_\_\_\_
9. \_\_\_\_\_
10. \_\_\_\_\_
11. \_\_\_\_\_
12. \_\_\_\_\_
13. \_\_\_\_\_
14. \_\_\_\_\_
15. \_\_\_\_\_
16. \_\_\_\_\_
17. \_\_\_\_\_
18. \_\_\_\_\_
19. \_\_\_\_\_
20. \_\_\_\_\_



Determina si el área sombreada es 'más', 'menos' o 'igual' que la mitad.

**Respuestas**



1. **menor**

2. **mayor**

3. **mayor**

4. **menor**

5. **menor**

6. **mayor**

7. **menor**

8. **mayor**

9. **menor**

10. **igual**

11. **menor**

12. **menor**

13. **mayor**

14. **mayor**

15. **menor**

16. **menor**

17. **igual**

18. **menor**

19. **menor**

20. **mayor**