
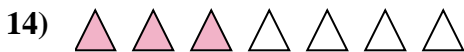
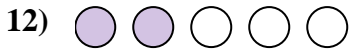
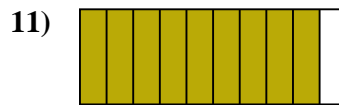
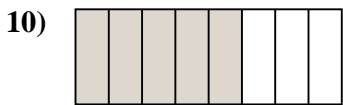
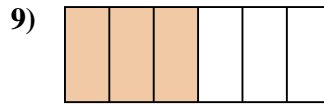
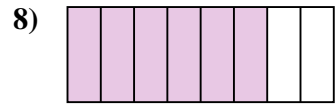
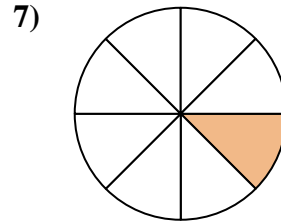
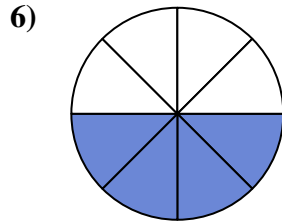
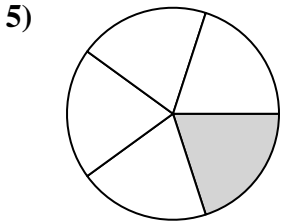
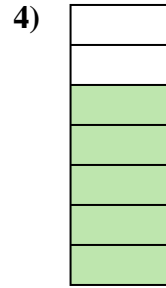
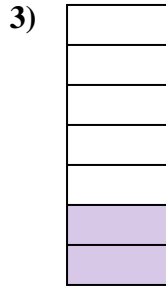






Determina si el área sombreada es 'más', 'menos' o 'igual' que la mitad.

**Respuestas**


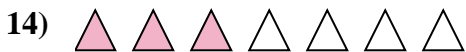
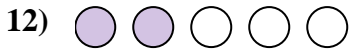

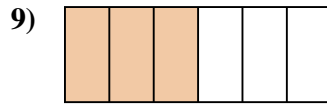
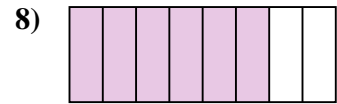
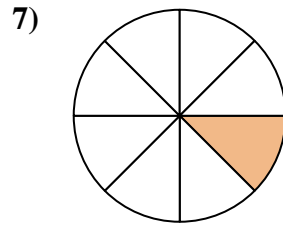
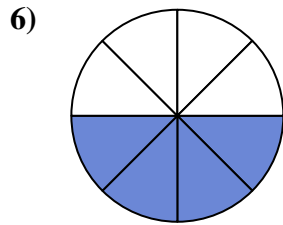
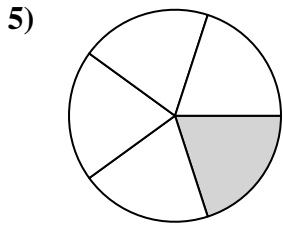
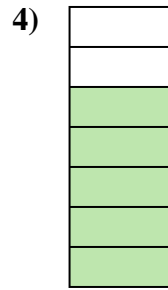
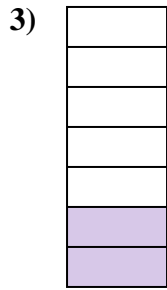




1. \_\_\_\_\_
2. \_\_\_\_\_
3. \_\_\_\_\_
4. \_\_\_\_\_
5. \_\_\_\_\_
6. \_\_\_\_\_
7. \_\_\_\_\_
8. \_\_\_\_\_
9. \_\_\_\_\_
10. \_\_\_\_\_
11. \_\_\_\_\_
12. \_\_\_\_\_
13. \_\_\_\_\_
14. \_\_\_\_\_
15. \_\_\_\_\_
16. \_\_\_\_\_
17. \_\_\_\_\_
18. \_\_\_\_\_
19. \_\_\_\_\_
20. \_\_\_\_\_

1-10	95	90	85	80	75	70	65	60	55	50
11-20	45	40	35	30	25	20	15	10	5	0



Determina si el área sombreada es 'más', 'menos' o 'igual' que la mitad.



**Respuestas**

1. menor

2. menor

3. menor

4. mayor

5. menor

6. igual

7. menor

8. mayor

9. igual

10. mayor

11. mayor

12. menor

13. mayor

14. menor

15. mayor

16. menor

17. menor

18. mayor

19. igual

20. menor

1-10	95	90	85	80	75	70	65	60	55	50
11-20	45	40	35	30	25	20	15	10	5	0