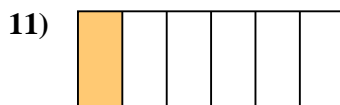
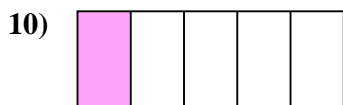
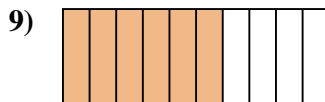
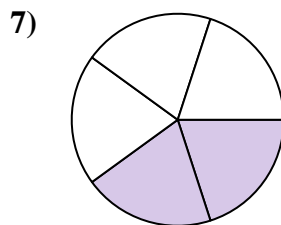
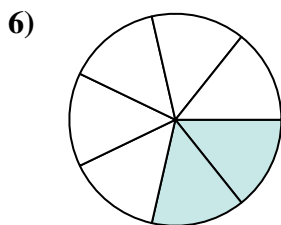
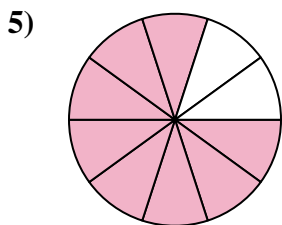


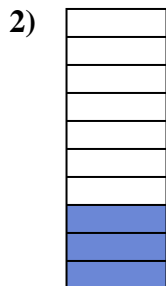





Determina si el área sombreada es 'más', 'menos' o 'igual' que la mitad.

Respuestas



1. _____

2. _____

3. _____

4. _____

5. _____

6. _____

7. _____

8. _____

9. _____

10. _____

11. _____

12. _____

13. _____

14. _____

15. _____

16. _____

17. _____

18. _____

19. _____

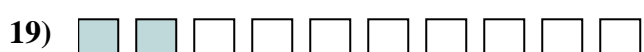
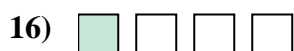
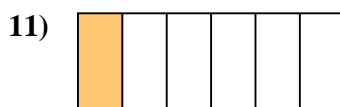

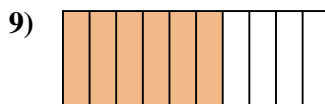
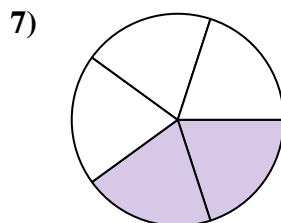
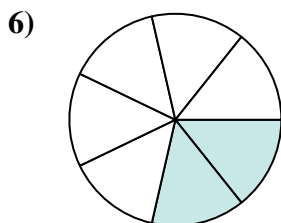
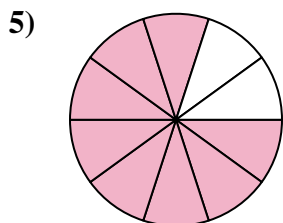


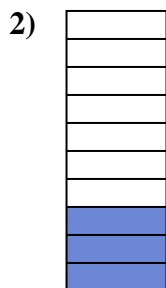

20. _____

1-10	95	90	85	80	75	70	65	60	55	50
11-20	45	40	35	30	25	20	15	10	5	0



Determina si el área sombreada es 'más', 'menos' o 'igual' que la mitad.

Respuestas



1. mayor

2. menor

3. menor

4. mayor

5. mayor

6. menor

7. menor

8. menor

9. mayor

10. menor

11. menor

12. mayor

13. igual

14. mayor

15. menor

16. menor

17. igual

18. menor

19. menor

20. igual