
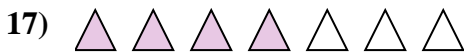
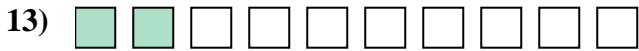
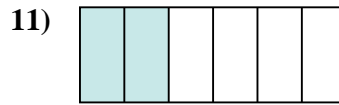
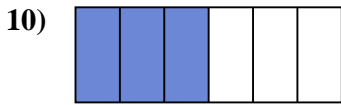
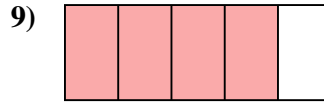
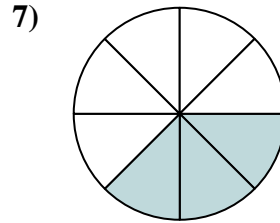
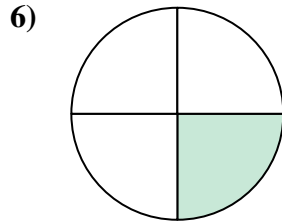
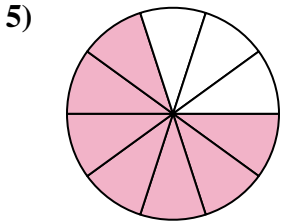






Determina si el área sombreada es 'más', 'menos' o 'igual' que la mitad.

Respuestas



1. _____

2. _____

3. _____

4. _____

5. _____

6. _____

7. _____

8. _____

9. _____

10. _____

11. _____

12. _____

13. _____

14. _____

15. _____

16. _____

17. _____

18. _____

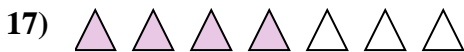
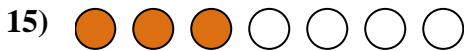
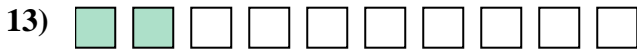

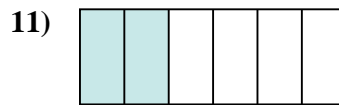
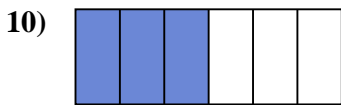
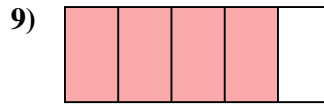
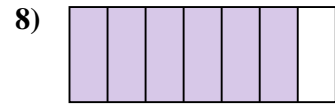
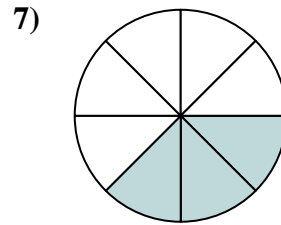
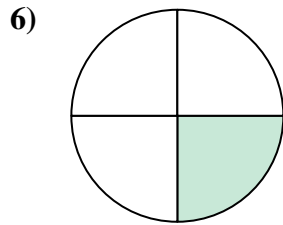
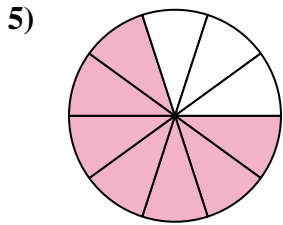

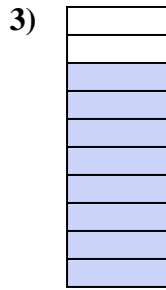


19. _____

20. _____



Determina si el área sombreada es 'más', 'menos' o 'igual' que la mitad.

Respuestas



1. igual

2. menor

3. mayor

4. mayor

5. mayor

6. menor

7. menor

8. mayor

9. mayor

10. igual

11. menor

12. igual

13. menor

14. mayor

15. menor

16. mayor

17. mayor

18. menor

19. igual

20. menor