
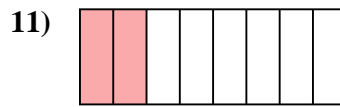
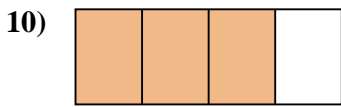
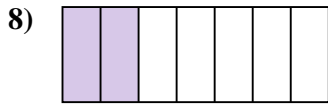
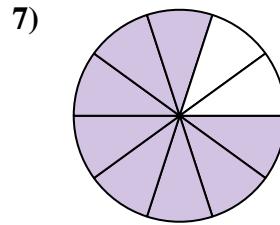
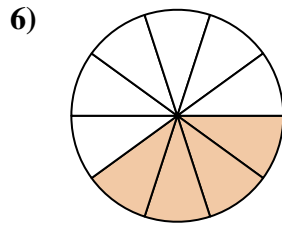
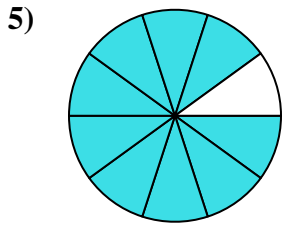

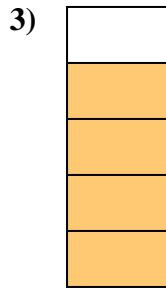
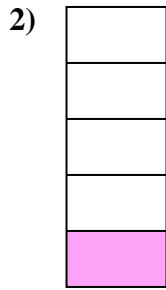





Determina si el área sombreada es 'más', 'menos' o 'igual' que la mitad.

**Respuestas**

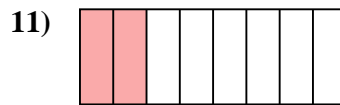
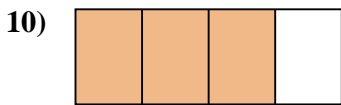
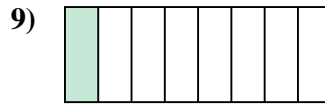
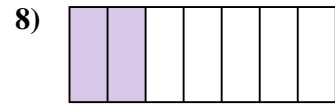
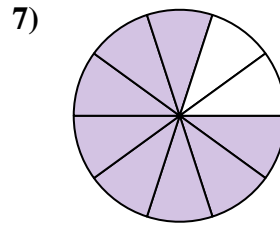
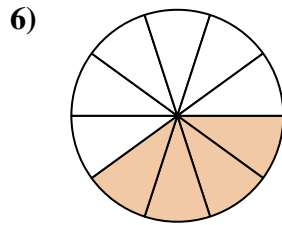
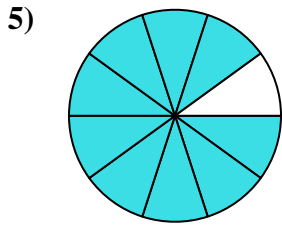

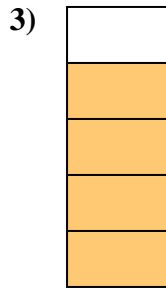
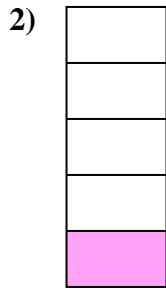



1. \_\_\_\_\_
2. \_\_\_\_\_
3. \_\_\_\_\_
4. \_\_\_\_\_
5. \_\_\_\_\_
6. \_\_\_\_\_
7. \_\_\_\_\_
8. \_\_\_\_\_
9. \_\_\_\_\_
10. \_\_\_\_\_
11. \_\_\_\_\_
12. \_\_\_\_\_
13. \_\_\_\_\_
14. \_\_\_\_\_
15. \_\_\_\_\_
16. \_\_\_\_\_
17. \_\_\_\_\_
18. \_\_\_\_\_
19. \_\_\_\_\_
20. \_\_\_\_\_



Determina si el área sombreada es 'más', 'menos' o 'igual' que la mitad.

**Respuestas**



1. mayor

2. menor

3. mayor

4. mayor

5. mayor

6. menor

7. mayor

8. menor

9. menor

10. mayor

11. menor

12. mayor

13. menor

14. menor

15. menor

16. igual

17. mayor

18. igual

19. igual

20. mayor