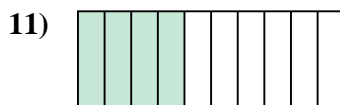


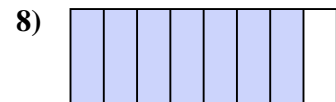
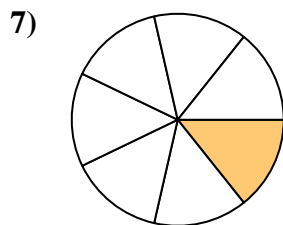
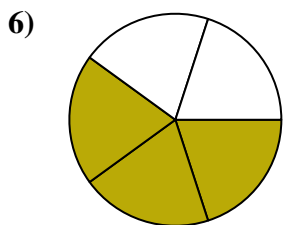
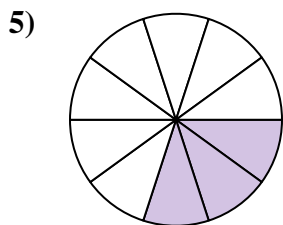

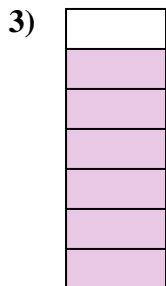






Determina si el área sombreada es 'más', 'menos' o 'igual' que la mitad.

Respuestas

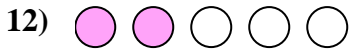
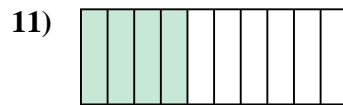
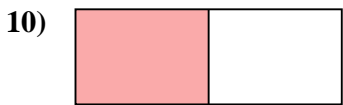
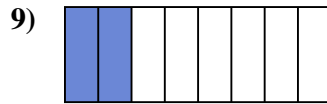
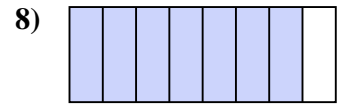
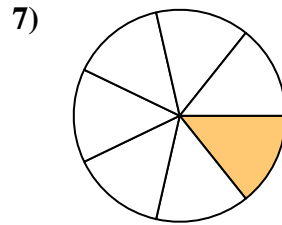
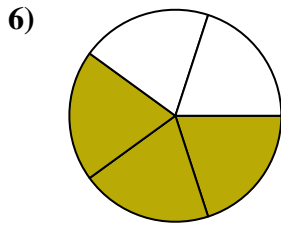
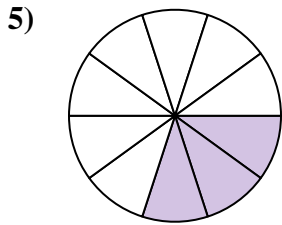

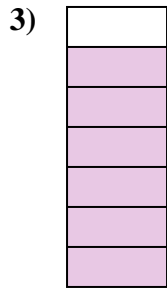




1. _____
2. _____
3. _____
4. _____
5. _____
6. _____
7. _____
8. _____
9. _____
10. _____
11. _____
12. _____
13. _____
14. _____
15. _____
16. _____
17. _____
18. _____
19. _____
20. _____



Determina si el área sombreada es 'más', 'menos' o 'igual' que la mitad.

Respuestas



1. **menor**

2. **mayor**

3. **mayor**

4. **menor**

5. **menor**

6. **mayor**

7. **menor**

8. **mayor**

9. **menor**

10. **igual**

11. **menor**

12. **menor**

13. **mayor**

14. **mayor**

15. **menor**

16. **menor**

17. **igual**

18. **menor**


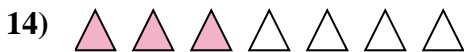
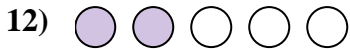
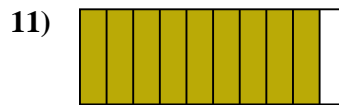
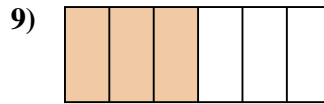
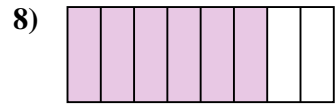
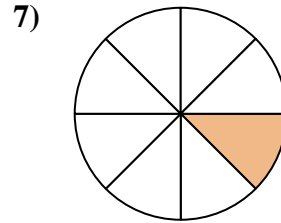
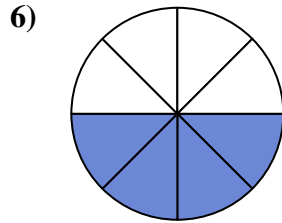
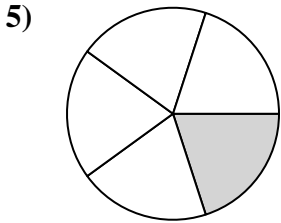
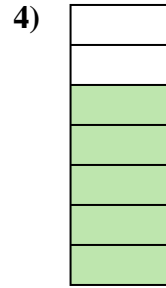
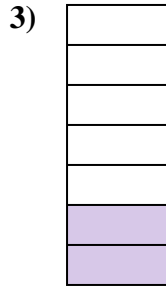


19. **menor**

20. **mayor**



Determina si el área sombreada es 'más', 'menos' o 'igual' que la mitad.

Respuestas


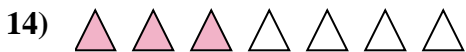
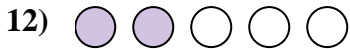

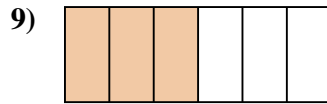
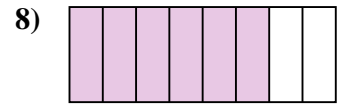
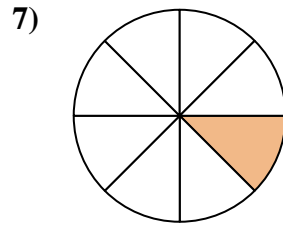
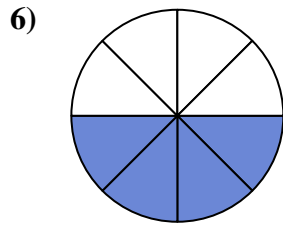
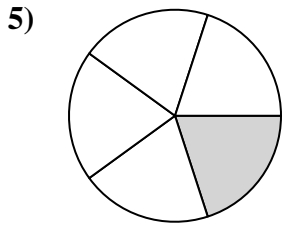
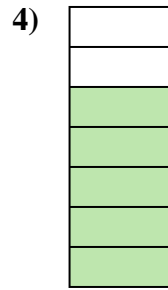
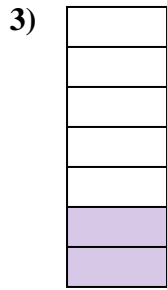




1. _____
2. _____
3. _____
4. _____
5. _____
6. _____
7. _____
8. _____
9. _____
10. _____
11. _____
12. _____
13. _____
14. _____
15. _____
16. _____
17. _____
18. _____
19. _____
20. _____

1-10	95	90	85	80	75	70	65	60	55	50
11-20	45	40	35	30	25	20	15	10	5	0



Determina si el área sombreada es 'más', 'menos' o 'igual' que la mitad.



Respuestas

1. menor

2. menor

3. menor

4. mayor

5. menor

6. igual

7. menor

8. mayor

9. igual

10. mayor

11. mayor

12. menor

13. mayor

14. menor

15. mayor

16. menor

17. menor

18. mayor

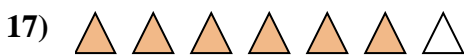



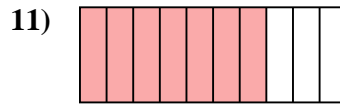

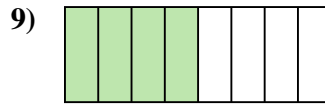
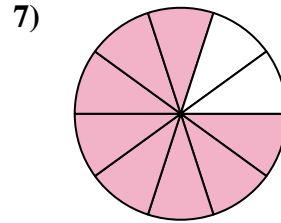
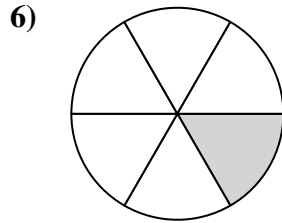
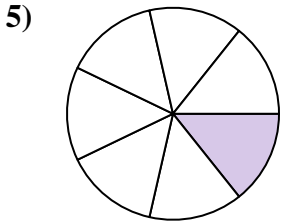

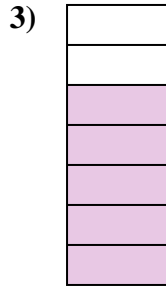
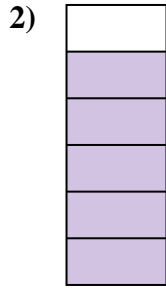

19. igual

20. menor



Determina si el área sombreada es 'más', 'menos' o 'igual' que la mitad.

Respuestas






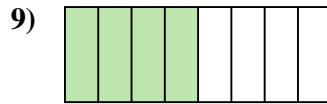
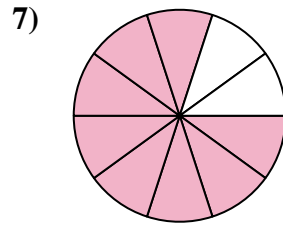
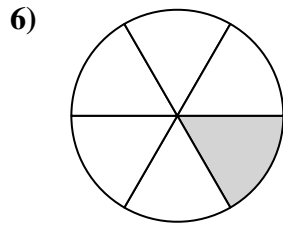
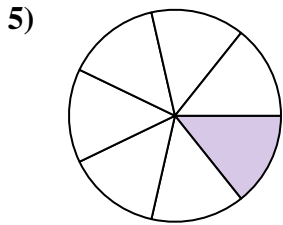
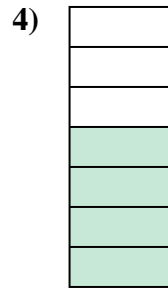
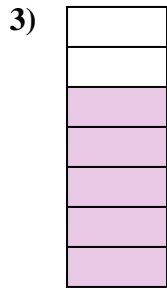
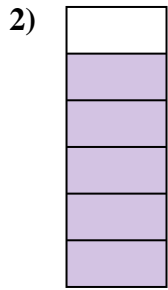
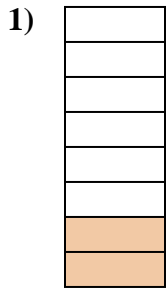
1. _____
2. _____
3. _____
4. _____
5. _____
6. _____
7. _____
8. _____
9. _____
10. _____
11. _____
12. _____
13. _____
14. _____
15. _____
16. _____
17. _____
18. _____
19. _____
20. _____

1-10	95	90	85	80	75	70	65	60	55	50
11-20	45	40	35	30	25	20	15	10	5	0



Determina si el área sombreada es 'más', 'menos' o 'igual' que la mitad.

Respuestas



1. menor

2. mayor

3. mayor

4. mayor

5. menor

6. menor

7. mayor

8. menor

9. igual

10. igual

11. mayor

12. mayor

13. menor

14. igual

15. igual

16. menor

17. mayor

18. mayor


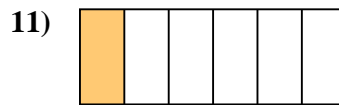
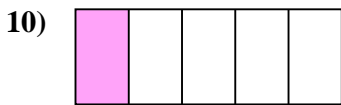
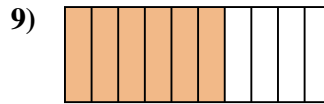
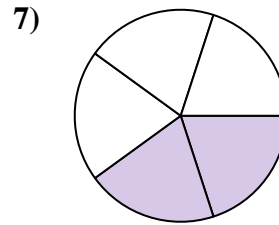
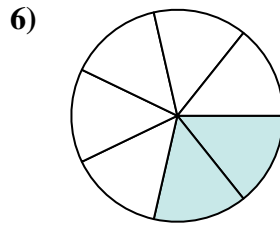
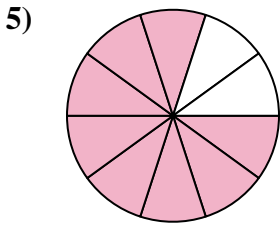

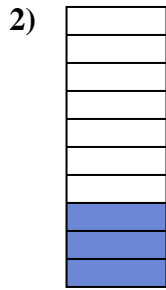
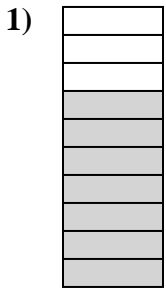
19. menor

20. mayor



Determina si el área sombreada es 'más', 'menos' o 'igual' que la mitad.

Respuestas

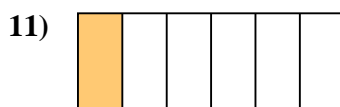

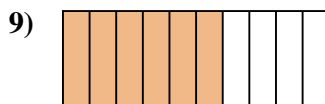
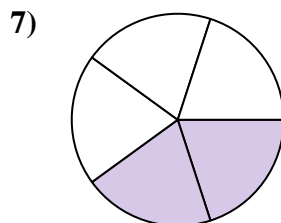
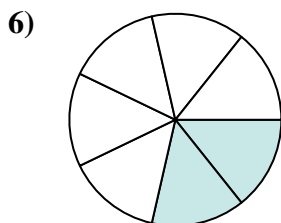
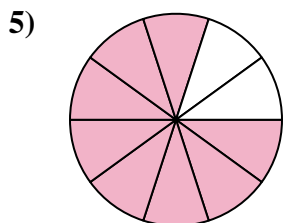


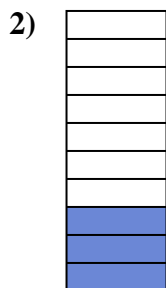



1. _____
2. _____
3. _____
4. _____
5. _____
6. _____
7. _____
8. _____
9. _____
10. _____
11. _____
12. _____
13. _____
14. _____
15. _____
16. _____
17. _____
18. _____
19. _____
20. _____



Determina si el área sombreada es 'más', 'menos' o 'igual' que la mitad.

Respuestas



1. mayor

2. menor

3. menor

4. mayor

5. mayor

6. menor

7. menor

8. menor

9. mayor

10. menor

11. menor

12. mayor

13. igual

14. mayor

15. menor

16. menor

17. igual

18. menor

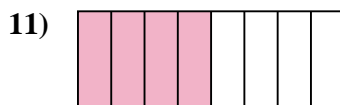
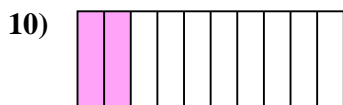
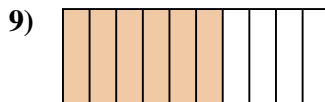

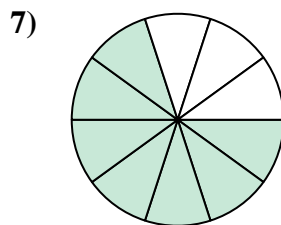
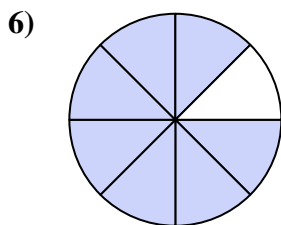
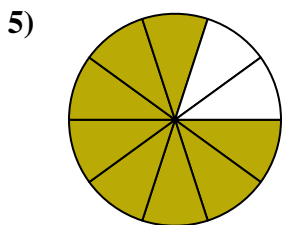



19. menor

20. igual



Determina si el área sombreada es 'más', 'menos' o 'igual' que la mitad.

Respuestas



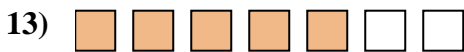

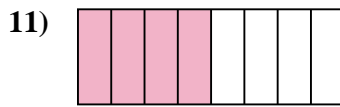
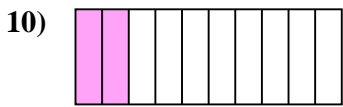
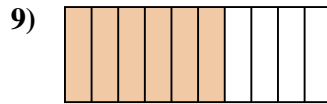
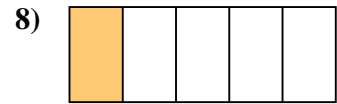
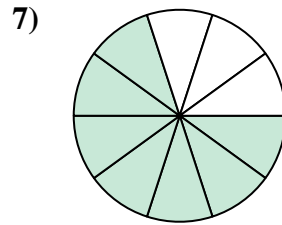
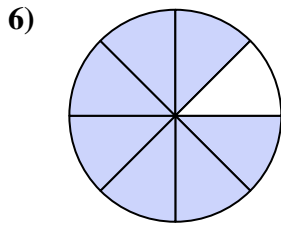
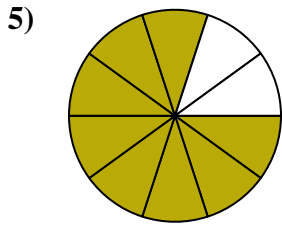


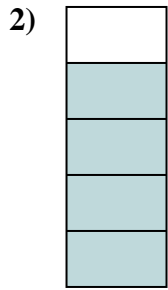

1. _____
2. _____
3. _____
4. _____
5. _____
6. _____
7. _____
8. _____
9. _____
10. _____
11. _____
12. _____
13. _____
14. _____
15. _____
16. _____
17. _____
18. _____
19. _____
20. _____

1-10	95	90	85	80	75	70	65	60	55	50
11-20	45	40	35	30	25	20	15	10	5	0



Determina si el área sombreada es 'más', 'menos' o 'igual' que la mitad.

Respuestas



1. menor

2. mayor

3. menor

4. menor

5. mayor

6. mayor

7. mayor

8. menor

9. mayor

10. menor

11. igual

12. mayor

13. mayor

14. igual

15. igual

16. menor

17. menor

18. mayor

19. menor

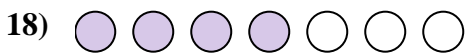




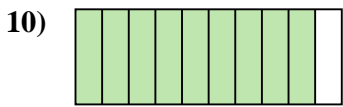
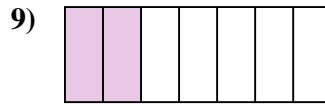
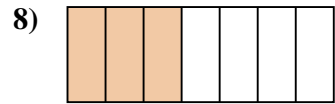
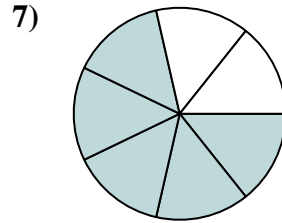
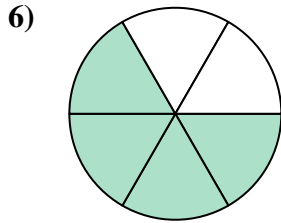
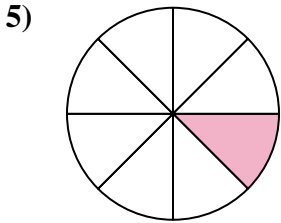



20. menor

1-10	95	90	85	80	75	70	65	60	55	50
11-20	45	40	35	30	25	20	15	10	5	0



Determina si el área sombreada es 'más', 'menos' o 'igual' que la mitad.

Respuestas

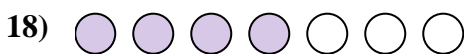


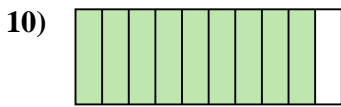
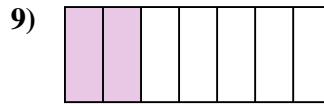
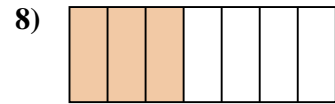
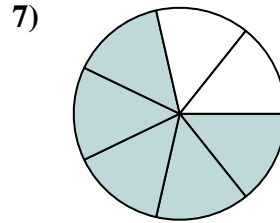
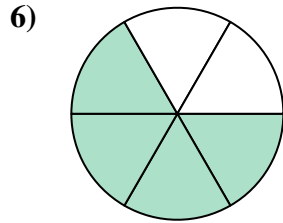
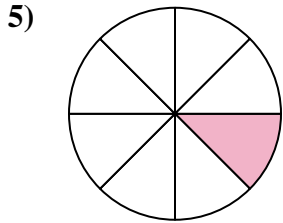





1. _____
2. _____
3. _____
4. _____
5. _____
6. _____
7. _____
8. _____
9. _____
10. _____
11. _____
12. _____
13. _____
14. _____
15. _____
16. _____
17. _____
18. _____
19. _____
20. _____

1-10	95	90	85	80	75	70	65	60	55	50
11-20	45	40	35	30	25	20	15	10	5	0



Determina si el área sombreada es 'más', 'menos' o 'igual' que la mitad.



Respuestas

1. mayor

2. igual

3. menor

4. menor

5. menor

6. mayor

7. mayor

8. menor

9. menor

10. mayor

11. igual

12. mayor

13. menor

14. menor

15. menor

16. mayor

17. menor

18. mayor


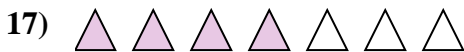
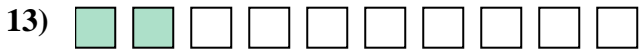
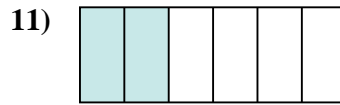
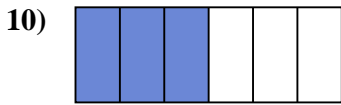
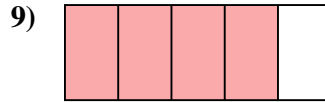
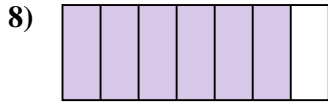
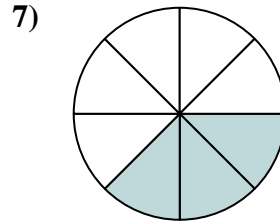
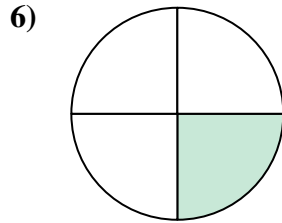
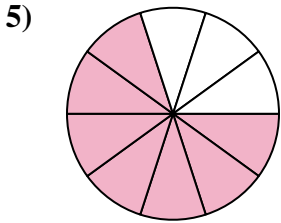


19. mayor

20. igual



Determina si el área sombreada es 'más', 'menos' o 'igual' que la mitad.

Respuestas



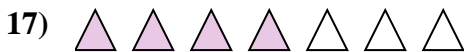
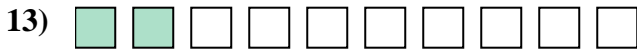

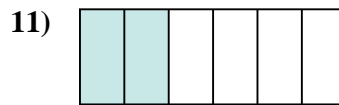
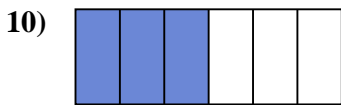
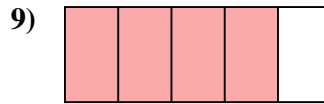
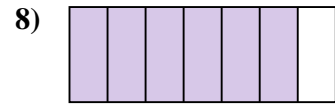
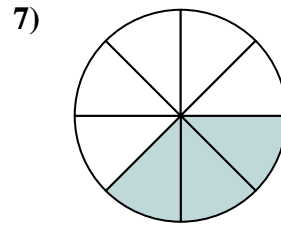
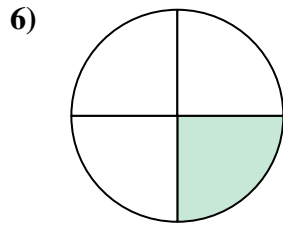
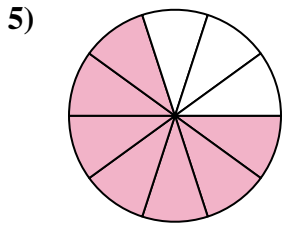

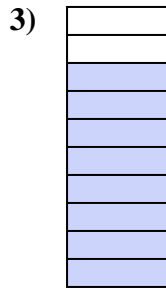

1. _____
2. _____
3. _____
4. _____
5. _____
6. _____
7. _____
8. _____
9. _____
10. _____
11. _____
12. _____
13. _____
14. _____
15. _____
16. _____
17. _____
18. _____
19. _____
20. _____

1-10	95	90	85	80	75	70	65	60	55	50
11-20	45	40	35	30	25	20	15	10	5	0



Determina si el área sombreada es 'más', 'menos' o 'igual' que la mitad.

Respuestas



1. igual

2. menor

3. mayor

4. mayor

5. mayor

6. menor

7. menor

8. mayor

9. mayor

10. igual

11. menor

12. igual

13. menor

14. mayor

15. menor

16. mayor

17. mayor

18. menor


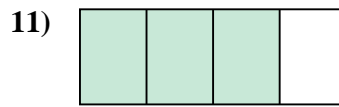
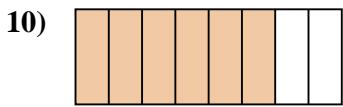
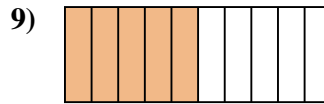
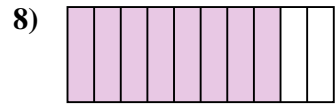
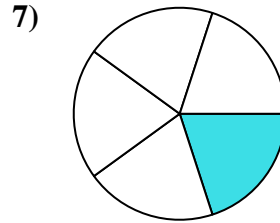
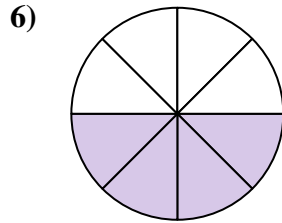
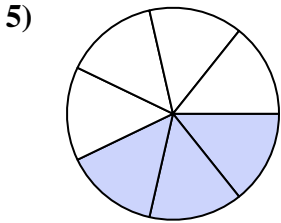

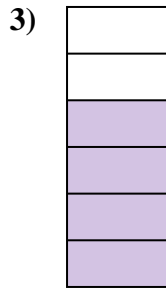

19. igual

20. menor



Determina si el área sombreada es 'más', 'menos' o 'igual' que la mitad.

Respuestas




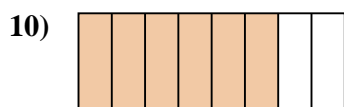
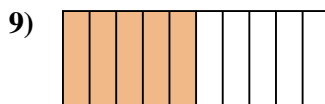
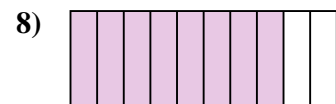
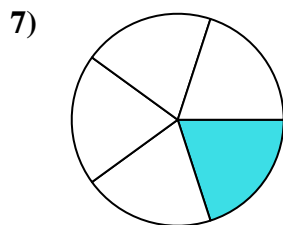
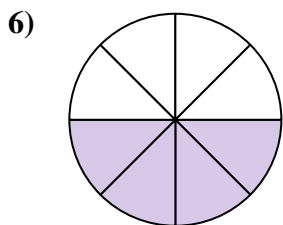
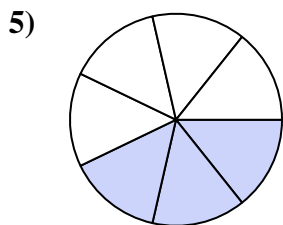

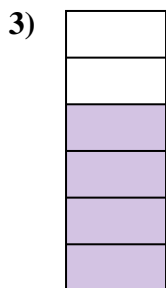

1. _____
2. _____
3. _____
4. _____
5. _____
6. _____
7. _____
8. _____
9. _____
10. _____
11. _____
12. _____
13. _____
14. _____
15. _____
16. _____
17. _____
18. _____
19. _____
20. _____

1-10	95	90	85	80	75	70	65	60	55	50
11-20	45	40	35	30	25	20	15	10	5	0



Determina si el área sombreada es 'más', 'menos' o 'igual' que la mitad.

Respuestas



1. mayor

2. menor

3. mayor

4. menor

5. menor

6. igual

7. menor

8. mayor

9. igual

10. mayor

11. mayor

12. menor

13. mayor

14. mayor

15. menor

16. mayor

17. menor

18. menor


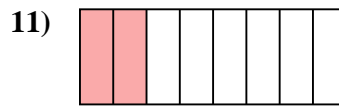
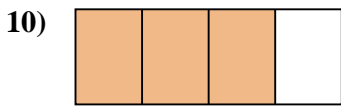
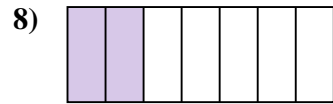
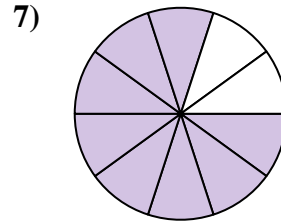
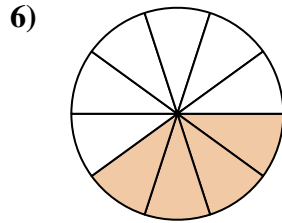
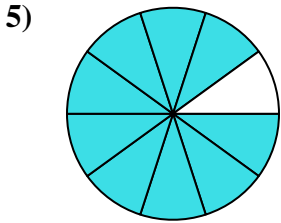

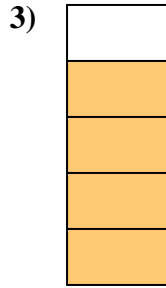
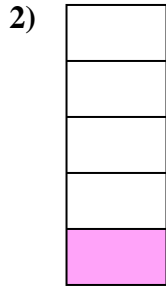

19. menor

20. mayor



Determina si el área sombreada es 'más', 'menos' o 'igual' que la mitad.

Respuestas


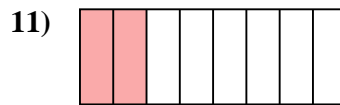
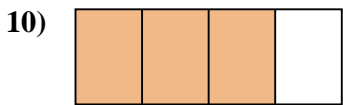
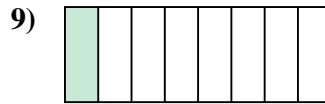
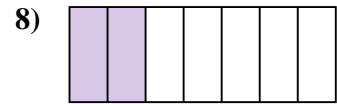
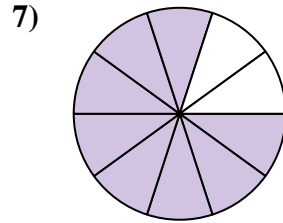
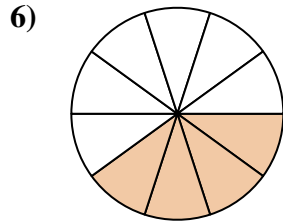
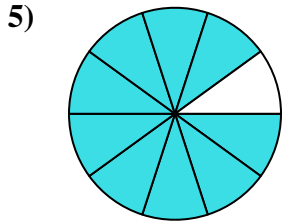

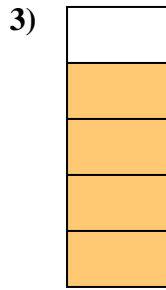
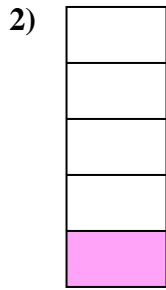



1. _____
2. _____
3. _____
4. _____
5. _____
6. _____
7. _____
8. _____
9. _____
10. _____
11. _____
12. _____
13. _____
14. _____
15. _____
16. _____
17. _____
18. _____
19. _____
20. _____



Determina si el área sombreada es 'más', 'menos' o 'igual' que la mitad.

Respuestas



1. mayor

2. menor

3. mayor

4. mayor

5. mayor

6. menor

7. mayor

8. menor

9. menor

10. mayor

11. menor

12. mayor

13. menor

14. menor

15. menor

16. igual

17. mayor

18. igual

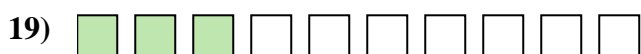

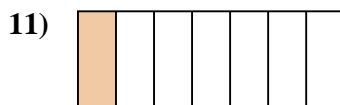
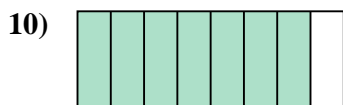

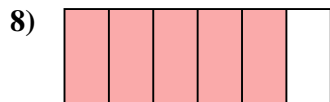
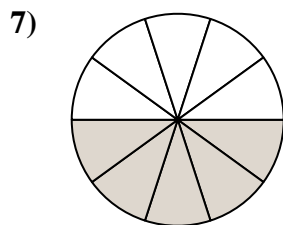
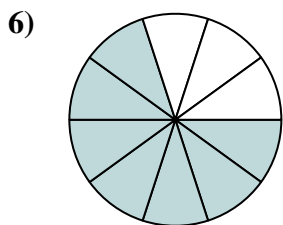
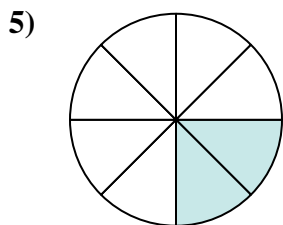




19. igual

20. mayor



Determina si el área sombreada es 'más', 'menos' o 'igual' que la mitad.

Respuestas


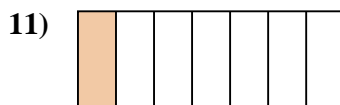
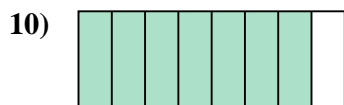
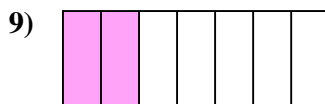

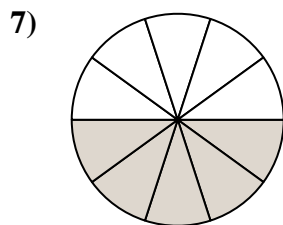
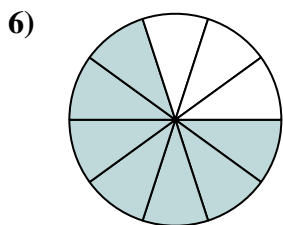
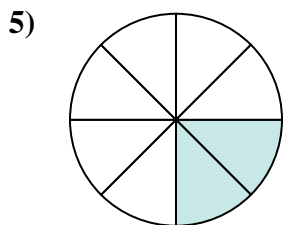






1. _____
2. _____
3. _____
4. _____
5. _____
6. _____
7. _____
8. _____
9. _____
10. _____
11. _____
12. _____
13. _____
14. _____
15. _____
16. _____
17. _____
18. _____
19. _____
20. _____



Determina si el área sombreada es 'más', 'menos' o 'igual' que la mitad.

Respuestas



1. menor

2. menor

3. mayor

4. mayor

5. menor

6. mayor

7. igual

8. mayor

9. menor

10. mayor

11. menor

12. mayor

13. menor

14. menor

15. mayor

16. igual

17. menor

18. menor

19. menor

20. menor